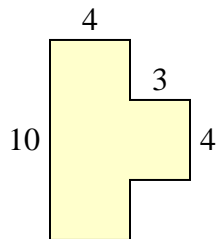


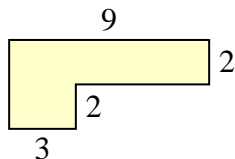


Find the total area of each shape. Measurement is in millimeters (mm). Not to scale.

1)



2)



Answers

1. \_\_\_\_\_

2. \_\_\_\_\_

3. \_\_\_\_\_

4. \_\_\_\_\_

5. \_\_\_\_\_

6. \_\_\_\_\_

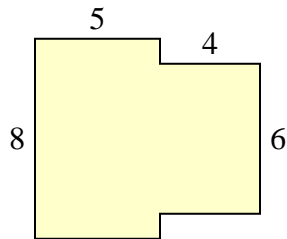
7. \_\_\_\_\_

8. \_\_\_\_\_

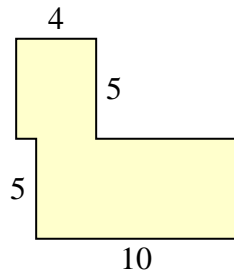
9. \_\_\_\_\_

10. \_\_\_\_\_

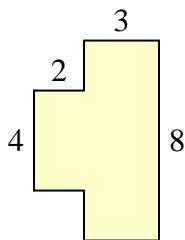
3)



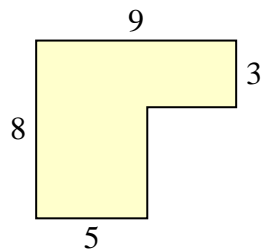
4)



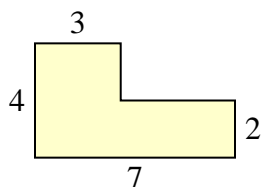
5)



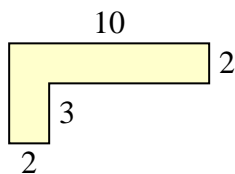
6)



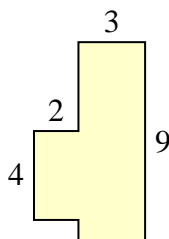
7)



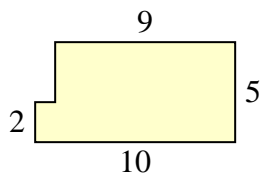
8)



9)

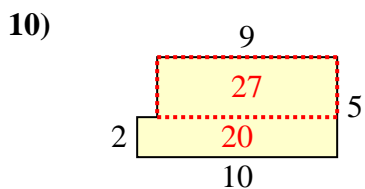
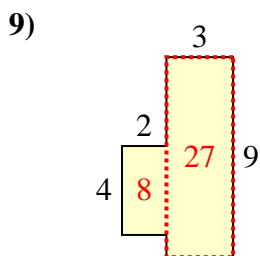
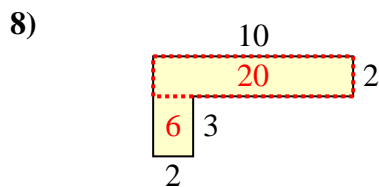
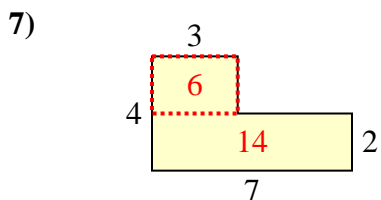
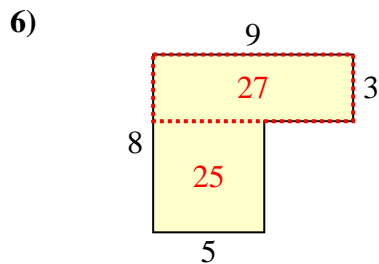
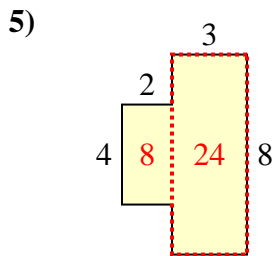
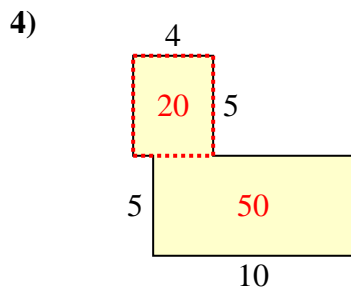
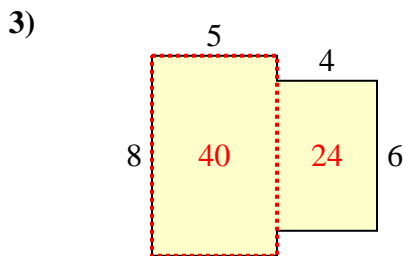
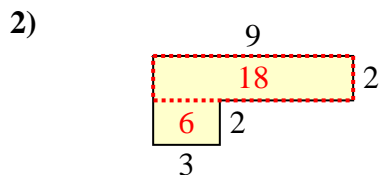
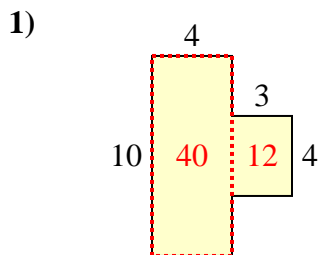


10)





Find the total area of each shape. Measurement is in millimeters (mm). Not to scale.



**Answers**

1. 52 mm<sup>2</sup>
2. 24 mm<sup>2</sup>
3. 64 mm<sup>2</sup>
4. 70 mm<sup>2</sup>
5. 32 mm<sup>2</sup>
6. 52 mm<sup>2</sup>
7. 20 mm<sup>2</sup>
8. 26 mm<sup>2</sup>
9. 35 mm<sup>2</sup>
10. 47 mm<sup>2</sup>