




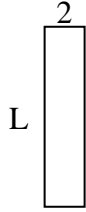
Determine the value of 'L'. Lengths are in cm (not to scale).

Answers

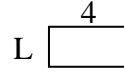
1) perimeter = 26



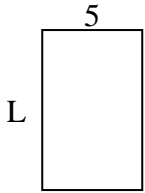
2) perimeter = 22



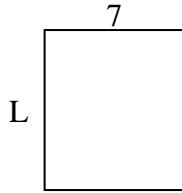
3) perimeter = 12



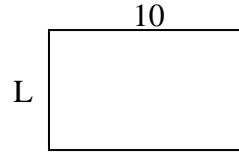
4) perimeter = 26



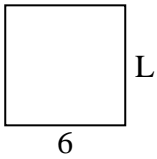
5) perimeter = 30



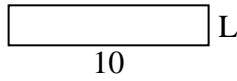
6) perimeter = 32



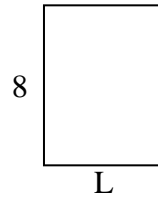
7) perimeter = 24



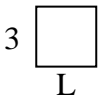
8) perimeter = 24



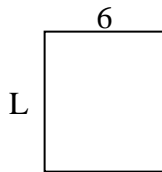
9) perimeter = 28



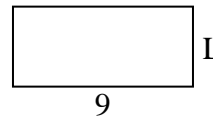
10) perimeter = 12




11) perimeter = 26



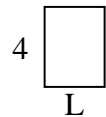
12) perimeter = 26



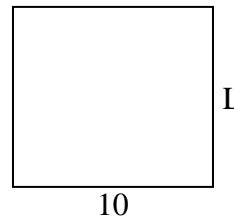
13) perimeter = 20



14) perimeter = 14



15) perimeter = 38

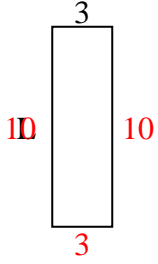


1. \_\_\_\_\_
2. \_\_\_\_\_
3. \_\_\_\_\_
4. \_\_\_\_\_
5. \_\_\_\_\_
6. \_\_\_\_\_
7. \_\_\_\_\_
8. \_\_\_\_\_
9. \_\_\_\_\_
10. \_\_\_\_\_
11. \_\_\_\_\_
12. \_\_\_\_\_
13. \_\_\_\_\_
14. \_\_\_\_\_
15. \_\_\_\_\_

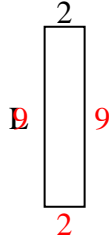


Determine the value of 'L'. Lengths are in cm (not to scale).

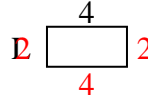
1) perimeter = 26



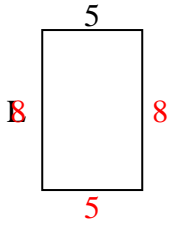
2) perimeter = 22



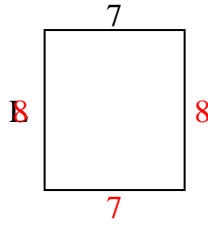
3) perimeter = 12



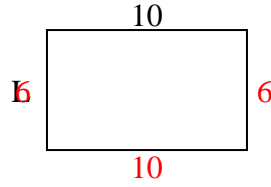
4) perimeter = 26



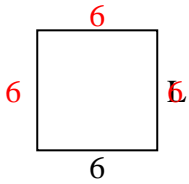
5) perimeter = 30



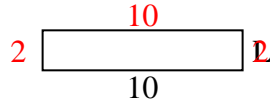
6) perimeter = 32



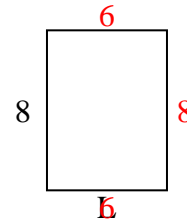
7) perimeter = 24



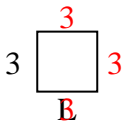
8) perimeter = 24



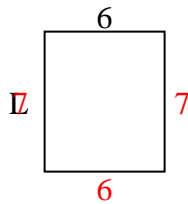
9) perimeter = 28



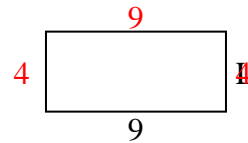
10) perimeter = 12



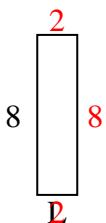
11) perimeter = 26



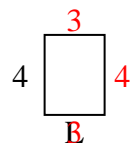
12) perimeter = 26



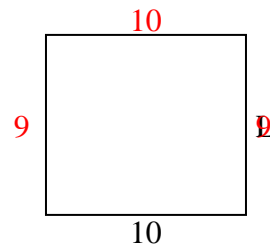
13) perimeter = 20



14) perimeter = 14



15) perimeter = 38



Answers

1. 10 cm

2. 9 cm

3. 2 cm

4. 8 cm

5. 8 cm

6. 6 cm

7. 6 cm

8. 2 cm

9. 6 cm

10. 3 cm

11. 7 cm

12. 4 cm

13. 2 cm

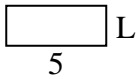
14. 3 cm

15. 9 cm

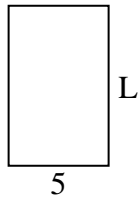


Determine the value of 'L'. Lengths are in cm (not to scale).

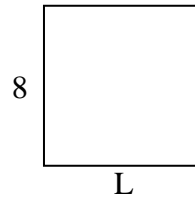
1) perimeter = 14



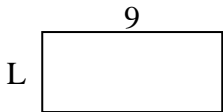
2) perimeter = 26



3) perimeter = 32



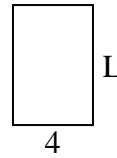
4) perimeter = 26



5) perimeter = 16




6) perimeter = 20



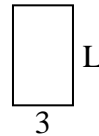
7) perimeter = 16



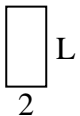
8) perimeter = 24



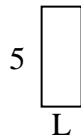
9) perimeter = 16



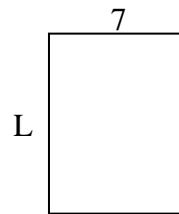
10) perimeter = 12



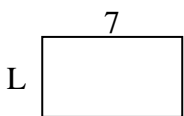
11) perimeter = 14



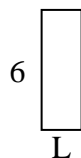
12) perimeter = 32



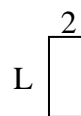
13) perimeter = 22



14) perimeter = 16



15) perimeter = 12



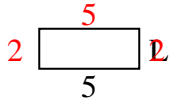
**Answers**

1. \_\_\_\_\_
2. \_\_\_\_\_
3. \_\_\_\_\_
4. \_\_\_\_\_
5. \_\_\_\_\_
6. \_\_\_\_\_
7. \_\_\_\_\_
8. \_\_\_\_\_
9. \_\_\_\_\_
10. \_\_\_\_\_
11. \_\_\_\_\_
12. \_\_\_\_\_
13. \_\_\_\_\_
14. \_\_\_\_\_
15. \_\_\_\_\_

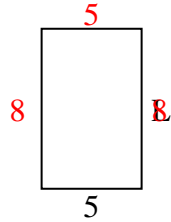


Determine the value of 'L'. Lengths are in cm (not to scale).

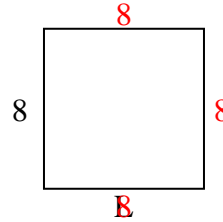
1) perimeter = 14



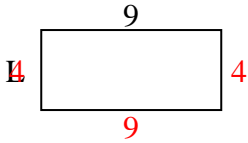
2) perimeter = 26



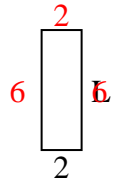
3) perimeter = 32



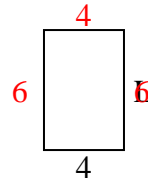
4) perimeter = 26



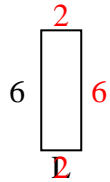
5) perimeter = 16



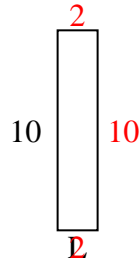
6) perimeter = 20



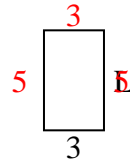
7) perimeter = 16



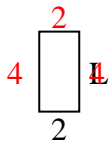
8) perimeter = 24



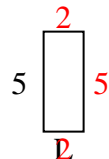
9) perimeter = 16



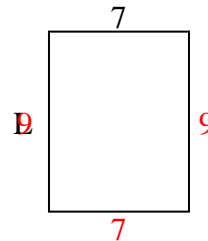
10) perimeter = 12



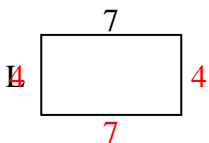
11) perimeter = 14



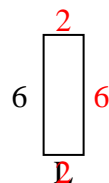
12) perimeter = 32



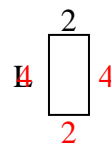
13) perimeter = 22



14) perimeter = 16



15) perimeter = 12



Answers

1. 2 cm

2. 8 cm

3. 8 cm

4. 4 cm

5. 6 cm

6. 6 cm

7. 2 cm

8. 2 cm

9. 5 cm

10. 4 cm

11. 2 cm

12. 9 cm

13. 4 cm

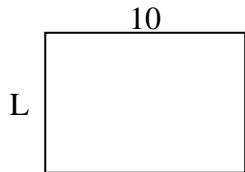
14. 2 cm

15. 4 cm

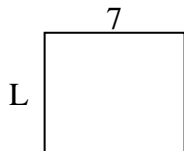


Determine the value of 'L'. Lengths are in cm (not to scale).


1) perimeter = 34



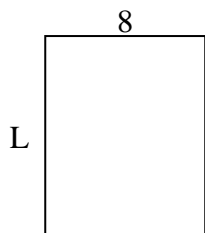
2) perimeter = 26



3) perimeter = 18



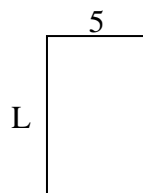
4) perimeter = 36



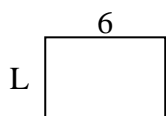
5) perimeter = 18




6) perimeter = 26



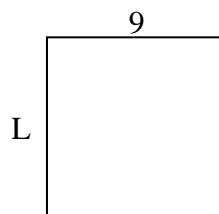
7) perimeter = 20



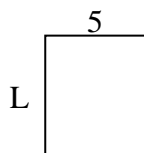
8) perimeter = 32



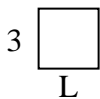
9) perimeter = 36



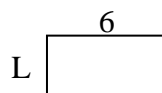
10) perimeter = 22



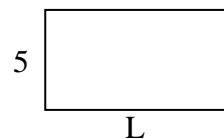
11) perimeter = 12




12) perimeter = 18



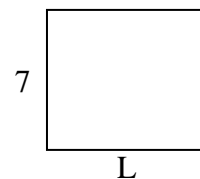
13) perimeter = 28



14) perimeter = 24



15) perimeter = 30



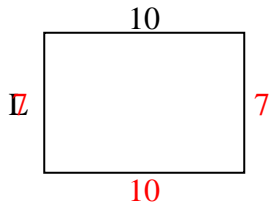
**Answers**

1. \_\_\_\_\_
2. \_\_\_\_\_
3. \_\_\_\_\_
4. \_\_\_\_\_
5. \_\_\_\_\_
6. \_\_\_\_\_
7. \_\_\_\_\_
8. \_\_\_\_\_
9. \_\_\_\_\_
10. \_\_\_\_\_
11. \_\_\_\_\_
12. \_\_\_\_\_
13. \_\_\_\_\_
14. \_\_\_\_\_
15. \_\_\_\_\_

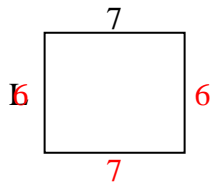


Determine the value of 'L'. Lengths are in cm (not to scale).

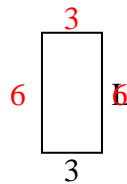
1) perimeter = 34



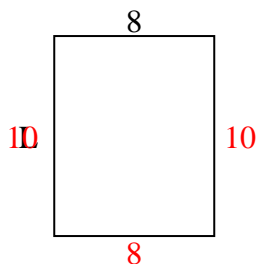
2) perimeter = 26



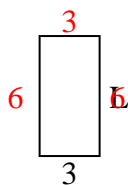
3) perimeter = 18



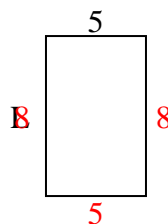
4) perimeter = 36



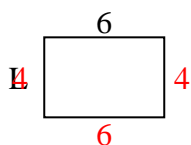
5) perimeter = 18



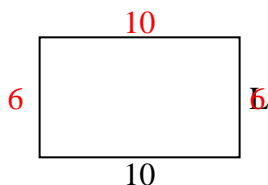
6) perimeter = 26



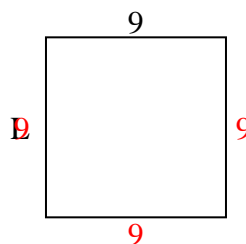
7) perimeter = 20



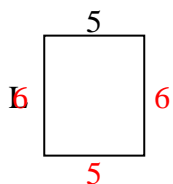
8) perimeter = 32



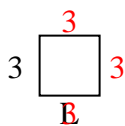
9) perimeter = 36



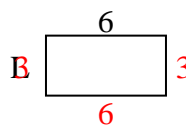
10) perimeter = 22



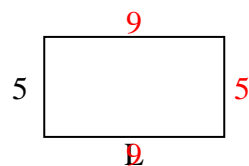
11) perimeter = 12



12) perimeter = 18



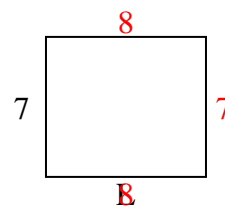
13) perimeter = 28



14) perimeter = 24



15) perimeter = 30



Answers

1. 7 cm

2. 6 cm

3. 6 cm

4. 10 cm

5. 6 cm

6. 8 cm

7. 4 cm

8. 6 cm

9. 9 cm

10. 6 cm

11. 3 cm

12. 3 cm

13. 9 cm

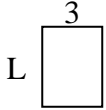
14. 4 cm

15. 8 cm

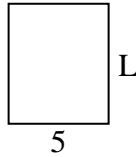


Determine the value of 'L'. Lengths are in cm (not to scale).

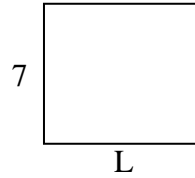
1) perimeter = 14



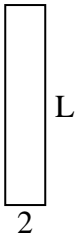
2) perimeter = 22



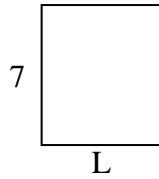
3) perimeter = 30



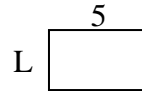
4) perimeter = 24



5) perimeter = 26



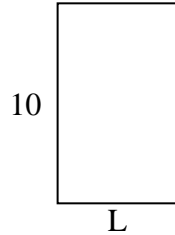
6) perimeter = 16




7) perimeter = 16



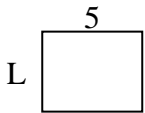
8) perimeter = 32



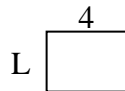
9) perimeter = 26



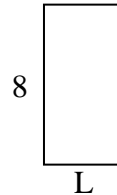
10) perimeter = 18



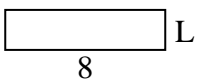
11) perimeter = 14



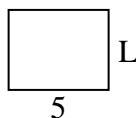
12) perimeter = 24



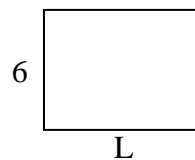
13) perimeter = 20



14) perimeter = 18



15) perimeter = 28



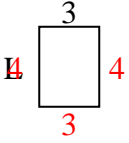
**Answers**

1. \_\_\_\_\_
2. \_\_\_\_\_
3. \_\_\_\_\_
4. \_\_\_\_\_
5. \_\_\_\_\_
6. \_\_\_\_\_
7. \_\_\_\_\_
8. \_\_\_\_\_
9. \_\_\_\_\_
10. \_\_\_\_\_
11. \_\_\_\_\_
12. \_\_\_\_\_
13. \_\_\_\_\_
14. \_\_\_\_\_
15. \_\_\_\_\_

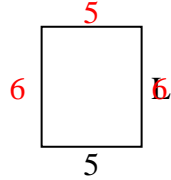


Determine the value of 'L'. Lengths are in cm (not to scale).

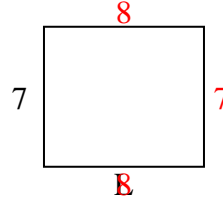
1) perimeter = 14



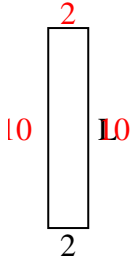
2) perimeter = 22



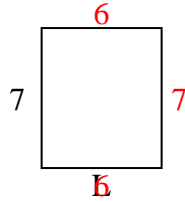
3) perimeter = 30



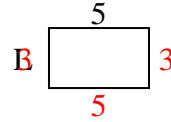
4) perimeter = 24



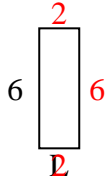
5) perimeter = 26



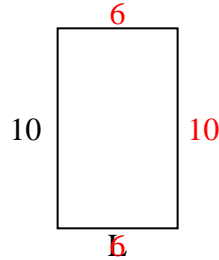
6) perimeter = 16




7) perimeter = 16



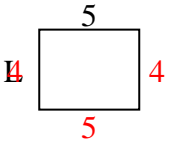
8) perimeter = 32



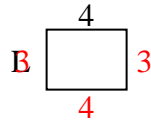
9) perimeter = 26



10) perimeter = 18



11) perimeter = 14



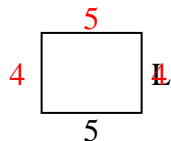
12) perimeter = 24



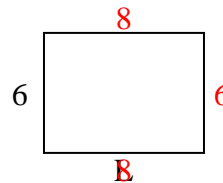
13) perimeter = 20



14) perimeter = 18



15) perimeter = 28



Answers

1. 4 cm

2. 6 cm

3. 8 cm

4. 10 cm

5. 6 cm

6. 3 cm

7. 2 cm

8. 6 cm

9. 4 cm

10. 4 cm

11. 3 cm

12. 4 cm

13. 2 cm

14. 4 cm

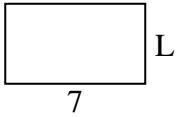
15. 8 cm



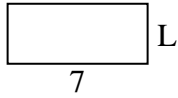


Determine the value of 'L'. Lengths are in cm (not to scale).

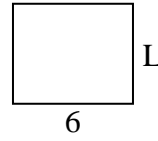
1) perimeter = 22



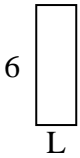
2) perimeter = 20



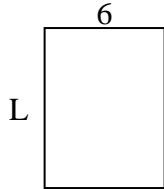
3) perimeter = 22



4) perimeter = 16




5) perimeter = 28



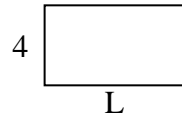
6) perimeter = 10



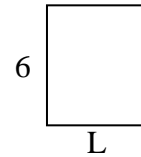
7) perimeter = 22



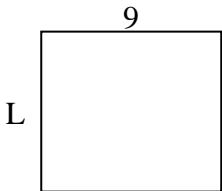
8) perimeter = 22



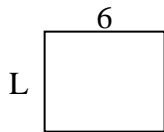
9) perimeter = 22



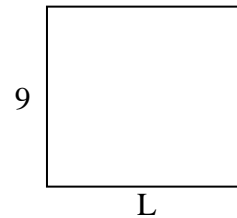
10) perimeter = 34



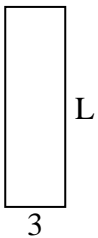
11) perimeter = 22



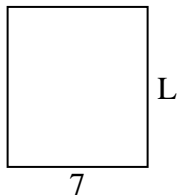
12) perimeter = 38



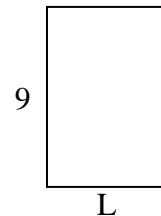
13) perimeter = 26



14) perimeter = 30



15) perimeter = 30



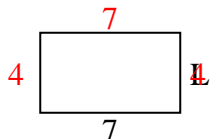
**Answers**

1. \_\_\_\_\_
2. \_\_\_\_\_
3. \_\_\_\_\_
4. \_\_\_\_\_
5. \_\_\_\_\_
6. \_\_\_\_\_
7. \_\_\_\_\_
8. \_\_\_\_\_
9. \_\_\_\_\_
10. \_\_\_\_\_
11. \_\_\_\_\_
12. \_\_\_\_\_
13. \_\_\_\_\_
14. \_\_\_\_\_
15. \_\_\_\_\_

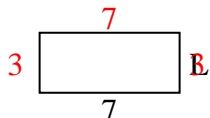


Determine the value of 'L'. Lengths are in cm (not to scale).

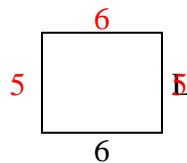
1) perimeter = 22



2) perimeter = 20



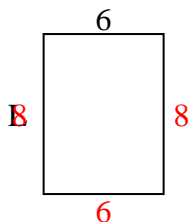
3) perimeter = 22



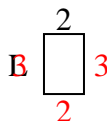
4) perimeter = 16



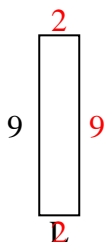
5) perimeter = 28



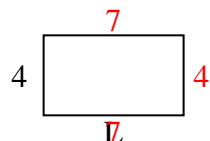
6) perimeter = 10



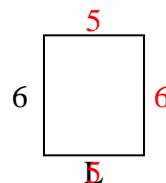
7) perimeter = 22



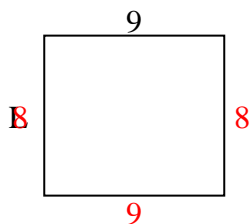
8) perimeter = 22



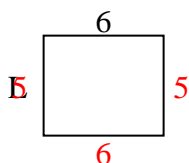
9) perimeter = 22



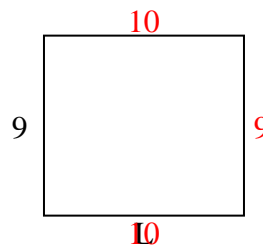
10) perimeter = 34



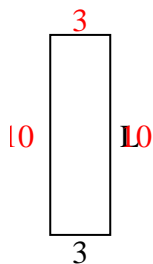
11) perimeter = 22



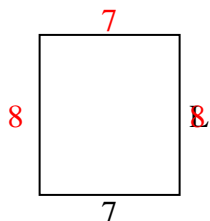
12) perimeter = 38



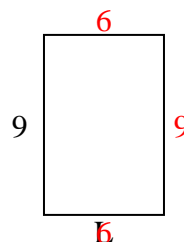
13) perimeter = 26



14) perimeter = 30



15) perimeter = 30



Answers

1. 4 cm

2. 3 cm

3. 5 cm

4. 2 cm

5. 8 cm

6. 3 cm

7. 2 cm

8. 7 cm

9. 5 cm

10. 8 cm

11. 5 cm

12. 10 cm

13. 10 cm

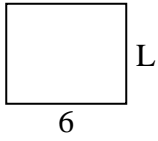
14. 8 cm

15. 6 cm

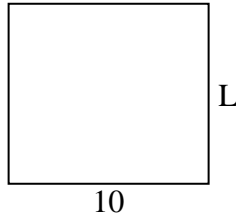


Determine the value of 'L'. Lengths are in cm (not to scale).

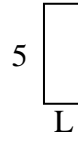
1) perimeter = 22



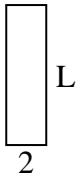
2) perimeter = 38



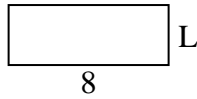
3) perimeter = 14



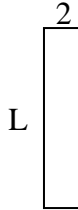
4) perimeter = 18



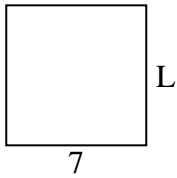
5) perimeter = 22



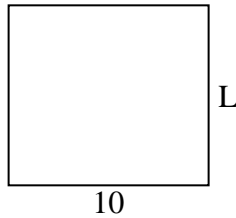
6) perimeter = 22



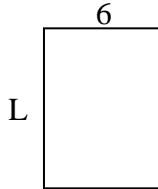
7) perimeter = 28



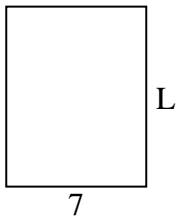
8) perimeter = 38



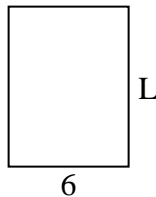
9) perimeter = 28



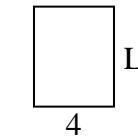
10) perimeter = 32



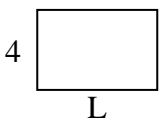
11) perimeter = 28



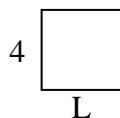
12) perimeter = 18



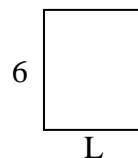
13) perimeter = 20



14) perimeter = 16



15) perimeter = 22



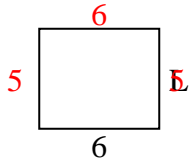
**Answers**

1. \_\_\_\_\_
2. \_\_\_\_\_
3. \_\_\_\_\_
4. \_\_\_\_\_
5. \_\_\_\_\_
6. \_\_\_\_\_
7. \_\_\_\_\_
8. \_\_\_\_\_
9. \_\_\_\_\_
10. \_\_\_\_\_
11. \_\_\_\_\_
12. \_\_\_\_\_
13. \_\_\_\_\_
14. \_\_\_\_\_
15. \_\_\_\_\_

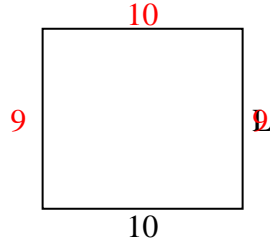


Determine the value of 'L'. Lengths are in cm (not to scale).

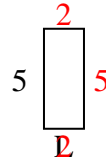
1) perimeter = 22



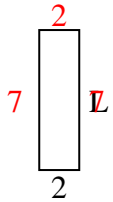
2) perimeter = 38



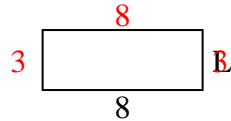
3) perimeter = 14



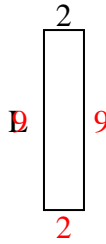
4) perimeter = 18



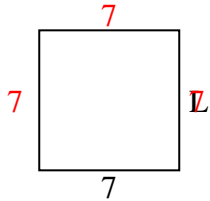
5) perimeter = 22



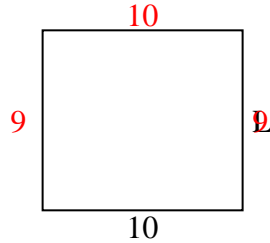
6) perimeter = 22



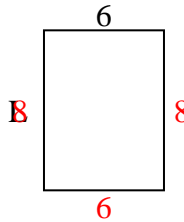
7) perimeter = 28



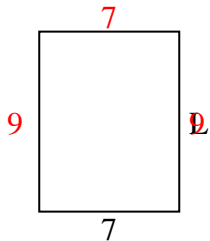
8) perimeter = 38



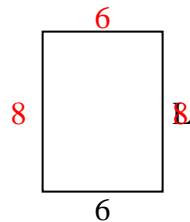
9) perimeter = 28



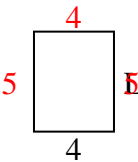
10) perimeter = 32



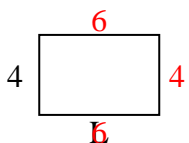
11) perimeter = 28



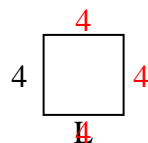
12) perimeter = 18



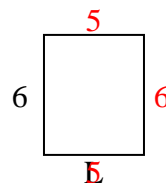
13) perimeter = 20



14) perimeter = 16



15) perimeter = 22



Answers

1. 5 cm

2. 9 cm

3. 2 cm

4. 7 cm

5. 3 cm

6. 9 cm

7. 7 cm

8. 9 cm

9. 8 cm

10. 9 cm

11. 8 cm

12. 5 cm

13. 6 cm

14. 4 cm

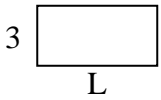
15. 5 cm



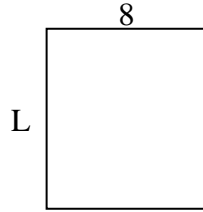
Determine the value of 'L'. Lengths are in cm (not to scale).

Answers

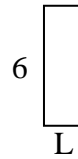
1) perimeter = 18



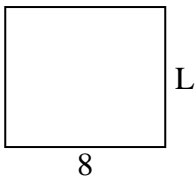
2) perimeter = 34



3) perimeter = 16



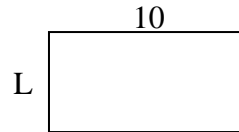
4) perimeter = 30



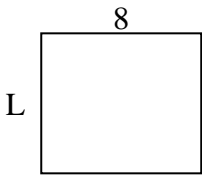
5) perimeter = 10



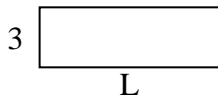
6) perimeter = 30



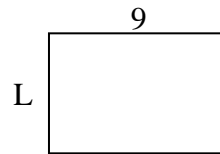
7) perimeter = 30



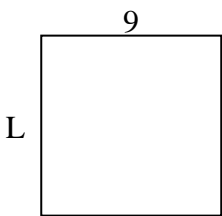
8) perimeter = 24



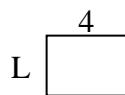
9) perimeter = 30



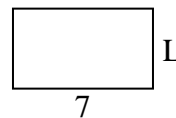
10) perimeter = 36



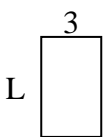
11) perimeter = 14




12) perimeter = 22



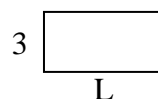
13) perimeter = 16



14) perimeter = 24



15) perimeter = 18

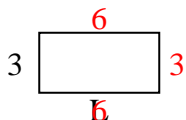


1. \_\_\_\_\_
2. \_\_\_\_\_
3. \_\_\_\_\_
4. \_\_\_\_\_
5. \_\_\_\_\_
6. \_\_\_\_\_
7. \_\_\_\_\_
8. \_\_\_\_\_
9. \_\_\_\_\_
10. \_\_\_\_\_
11. \_\_\_\_\_
12. \_\_\_\_\_
13. \_\_\_\_\_
14. \_\_\_\_\_
15. \_\_\_\_\_

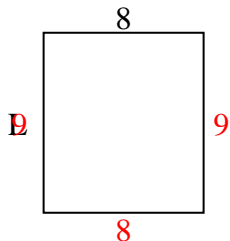


Determine the value of 'L'. Lengths are in cm (not to scale).

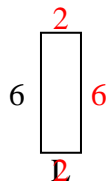
1) perimeter = 18



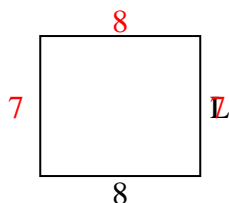
2) perimeter = 34



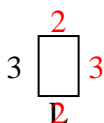
3) perimeter = 16



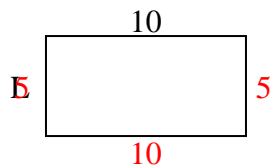
4) perimeter = 30



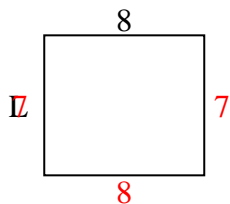
5) perimeter = 10



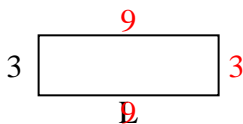
6) perimeter = 30



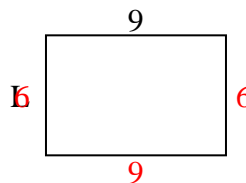
7) perimeter = 30



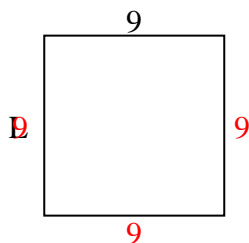
8) perimeter = 24



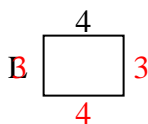
9) perimeter = 30



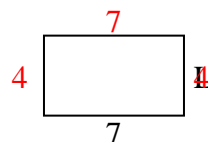
10) perimeter = 36



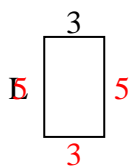
11) perimeter = 14



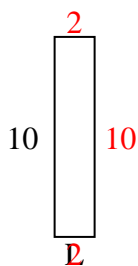
12) perimeter = 22



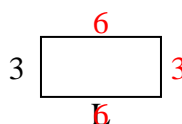
13) perimeter = 16



14) perimeter = 24



15) perimeter = 18



Answers

1. 6 cm

2. 9 cm

3. 2 cm

4. 7 cm

5. 2 cm

6. 5 cm

7. 7 cm

8. 9 cm

9. 6 cm

10. 9 cm

11. 3 cm

12. 4 cm

13. 5 cm


14. 2 cm

15. 6 cm

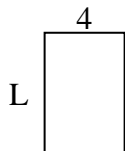


Determine the value of 'L'. Lengths are in cm (not to scale).

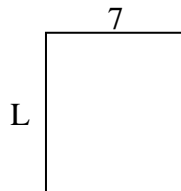
1) perimeter = 26



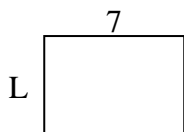
2) perimeter = 20



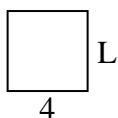
3) perimeter = 30



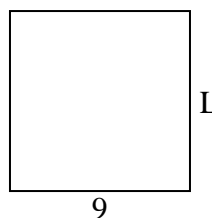
4) perimeter = 24



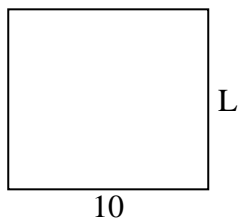
5) perimeter = 16



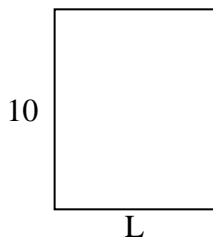
6) perimeter = 36



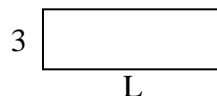
7) perimeter = 38




8) perimeter = 36



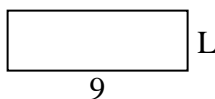
9) perimeter = 24



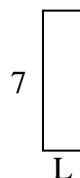
10) perimeter = 24



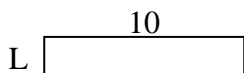
11) perimeter = 24



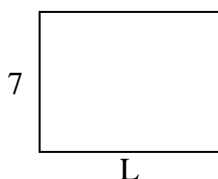
12) perimeter = 18



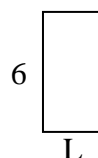
13) perimeter = 24



14) perimeter = 32



15) perimeter = 18



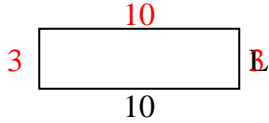
**Answers**

1. \_\_\_\_\_
2. \_\_\_\_\_
3. \_\_\_\_\_
4. \_\_\_\_\_
5. \_\_\_\_\_
6. \_\_\_\_\_
7. \_\_\_\_\_
8. \_\_\_\_\_
9. \_\_\_\_\_
10. \_\_\_\_\_
11. \_\_\_\_\_
12. \_\_\_\_\_
13. \_\_\_\_\_
14. \_\_\_\_\_
15. \_\_\_\_\_

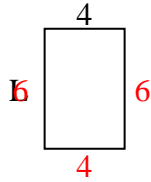


Determine the value of 'L'. Lengths are in cm (not to scale).

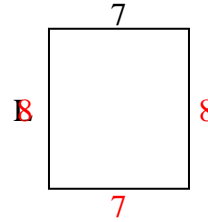
1) perimeter = 26



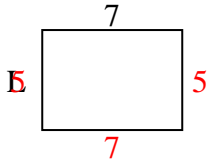
2) perimeter = 20



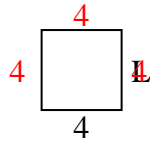
3) perimeter = 30



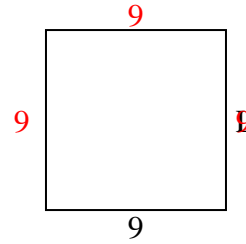
4) perimeter = 24



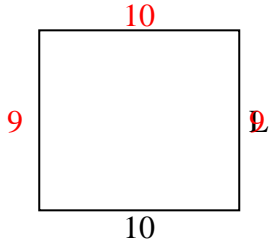
5) perimeter = 16



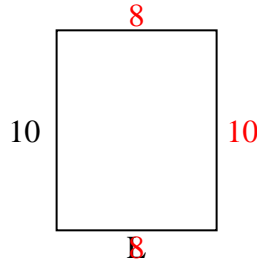
6) perimeter = 36



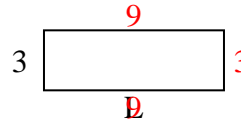
7) perimeter = 38



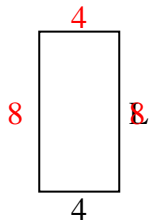
8) perimeter = 36



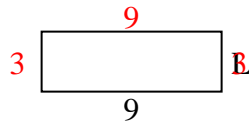
9) perimeter = 24



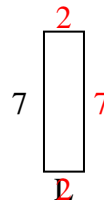
10) perimeter = 24



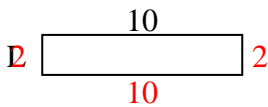
11) perimeter = 24



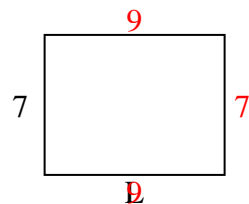
12) perimeter = 18



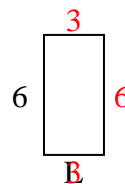
13) perimeter = 24



14) perimeter = 32



15) perimeter = 18



Answers

1. 3 cm

2. 6 cm

3. 8 cm

4. 5 cm

5. 4 cm

6. 9 cm

7. 9 cm

8. 8 cm

9. 9 cm

10. 8 cm

11. 3 cm

12. 2 cm

13. 2 cm

14. 9 cm

15. 3 cm



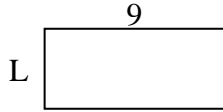


Determine the value of 'L'. Lengths are in cm (not to scale).

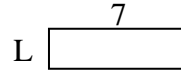
1) perimeter = 12



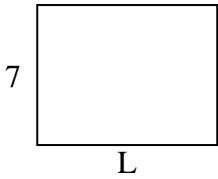
2) perimeter = 26



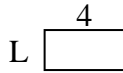
3) perimeter = 18



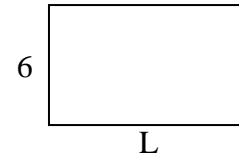
4) perimeter = 32



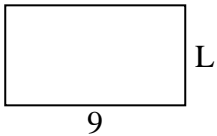
5) perimeter = 12



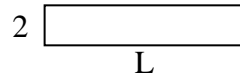
6) perimeter = 32



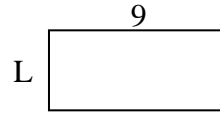
7) perimeter = 28



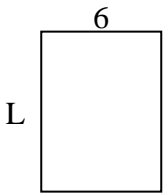
8) perimeter = 24



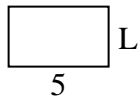
9) perimeter = 26



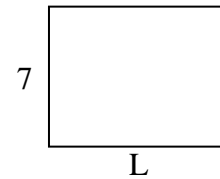
10) perimeter = 28



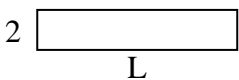
11) perimeter = 16



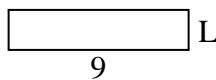
12) perimeter = 32



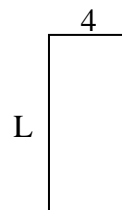
13) perimeter = 24



14) perimeter = 22



15) perimeter = 26



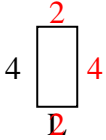
**Answers**

1. \_\_\_\_\_
2. \_\_\_\_\_
3. \_\_\_\_\_
4. \_\_\_\_\_
5. \_\_\_\_\_
6. \_\_\_\_\_
7. \_\_\_\_\_
8. \_\_\_\_\_
9. \_\_\_\_\_
10. \_\_\_\_\_
11. \_\_\_\_\_
12. \_\_\_\_\_
13. \_\_\_\_\_
14. \_\_\_\_\_
15. \_\_\_\_\_

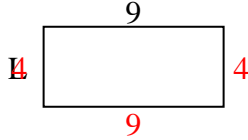


Determine the value of 'L'. Lengths are in cm (not to scale).

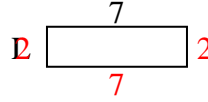
1) perimeter = 12



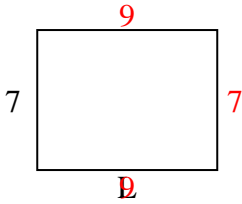
2) perimeter = 26



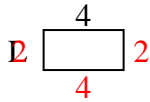
3) perimeter = 18



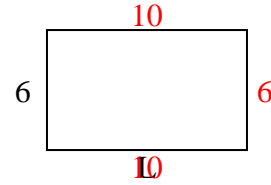
4) perimeter = 32



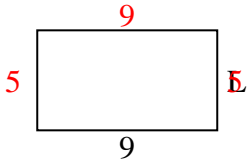
5) perimeter = 12



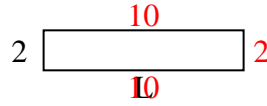
6) perimeter = 32



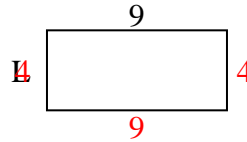
7) perimeter = 28



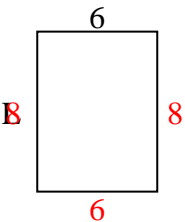
8) perimeter = 24



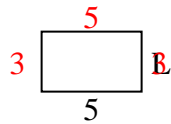
9) perimeter = 26



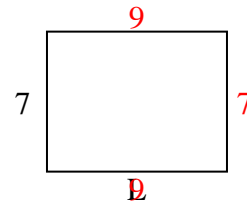
10) perimeter = 28



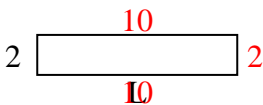
11) perimeter = 16



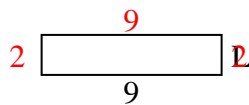
12) perimeter = 32



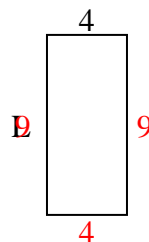
13) perimeter = 24



14) perimeter = 22



15) perimeter = 26



Answers

1. **2 cm**

2. **4 cm**

3. **2 cm**

4. **9 cm**

5. **2 cm**

6. **10 cm**

7. **5 cm**

8. **10 cm**

9. **4 cm**

10. **8 cm**

11. **3 cm**

12. **9 cm**

13. **10 cm**

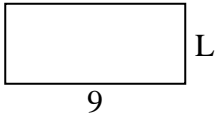
14. **2 cm**

15. **9 cm**

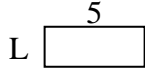


Determine the value of 'L'. Lengths are in cm (not to scale).

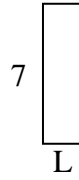
1) perimeter = 26



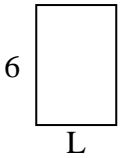
2) perimeter = 14



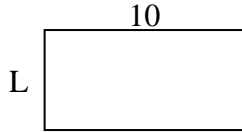
3) perimeter = 18



4) perimeter = 20



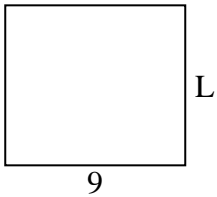
5) perimeter = 30




6) perimeter = 10



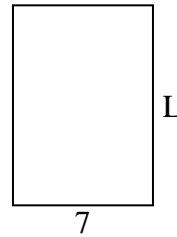
7) perimeter = 34



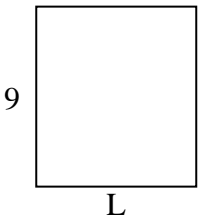
8) perimeter = 24



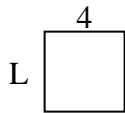
9) perimeter = 34



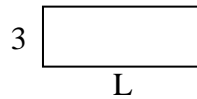
10) perimeter = 34




11) perimeter = 16



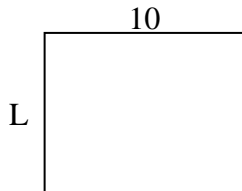
12) perimeter = 22



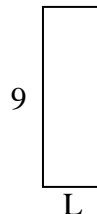
13) perimeter = 18



14) perimeter = 36



15) perimeter = 24



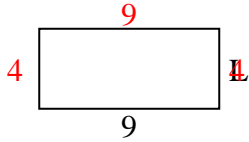
**Answers**

1. \_\_\_\_\_
2. \_\_\_\_\_
3. \_\_\_\_\_
4. \_\_\_\_\_
5. \_\_\_\_\_
6. \_\_\_\_\_
7. \_\_\_\_\_
8. \_\_\_\_\_
9. \_\_\_\_\_
10. \_\_\_\_\_
11. \_\_\_\_\_
12. \_\_\_\_\_
13. \_\_\_\_\_
14. \_\_\_\_\_
15. \_\_\_\_\_

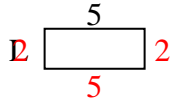


Determine the value of 'L'. Lengths are in cm (not to scale).

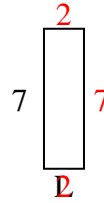
1) perimeter = 26



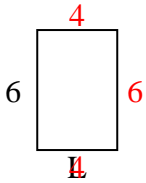
2) perimeter = 14



3) perimeter = 18



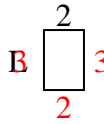
4) perimeter = 20



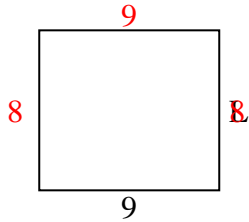
5) perimeter = 30



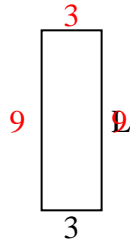
6) perimeter = 10



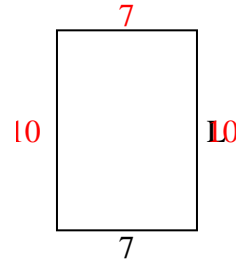
7) perimeter = 34



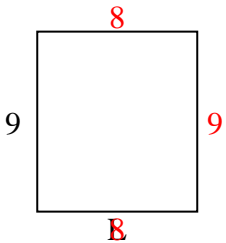
8) perimeter = 24



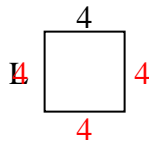
9) perimeter = 34



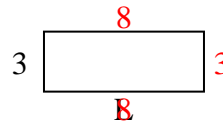
10) perimeter = 34



11) perimeter = 16



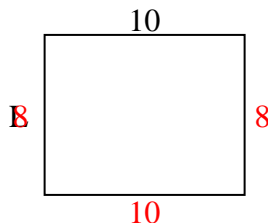
12) perimeter = 22



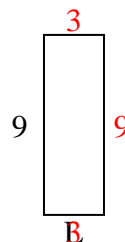
13) perimeter = 18



14) perimeter = 36



15) perimeter = 24



Answers

1. 4 cm

2. 2 cm

3. 2 cm

4. 4 cm

5. 5 cm

6. 3 cm

7. 8 cm

8. 9 cm

9. 10 cm

10. 8 cm

11. 4 cm

12. 8 cm

13. 2 cm

14. 8 cm

15. 3 cm