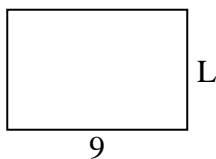





Determine the value of 'L'.

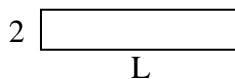
1) Area = $54u^2$



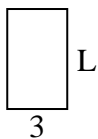
2) Area = $45u^2$




3) Area = $20u^2$



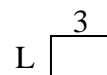
4) Area = $15u^2$



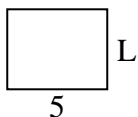
5) Area = $40u^2$



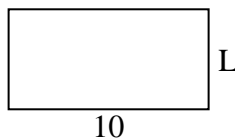
6) Area = $6u^2$



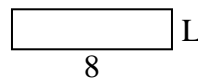
7) Area = $20u^2$



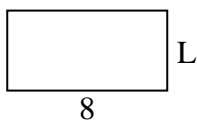
8) Area = $50u^2$



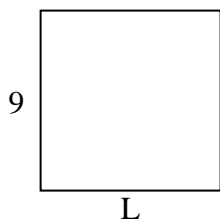
9) Area = $16u^2$



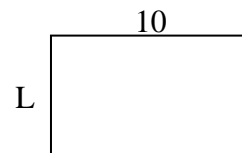
10) Area = $32u^2$



11) Area = $81u^2$



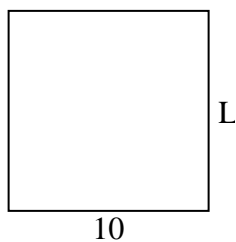
12) Area = $60u^2$



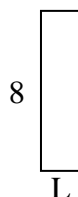
13) Area = $36u^2$



14) Area = $100u^2$



15) Area = $16u^2$



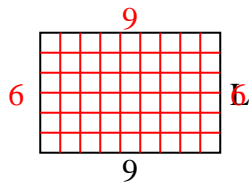
Answers

1. _____
2. _____
3. _____
4. _____
5. _____
6. _____
7. _____
8. _____
9. _____
10. _____
11. _____
12. _____
13. _____
14. _____
15. _____

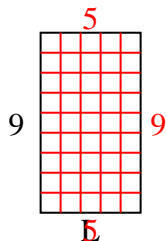


Determine the value of 'L'.

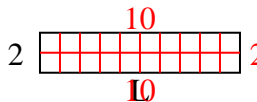
1) Area = $54u^2$



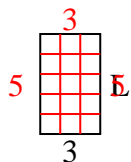
2) Area = $45u^2$



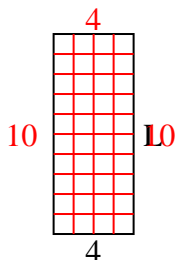
3) Area = $20u^2$



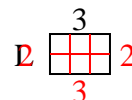
4) Area = $15u^2$



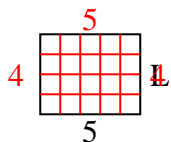
5) Area = $40u^2$



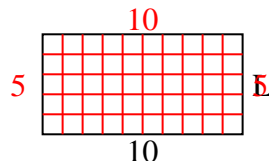
6) Area = $6u^2$



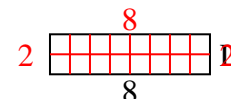
7) Area = $20u^2$



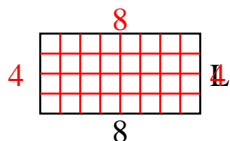
8) Area = $50u^2$



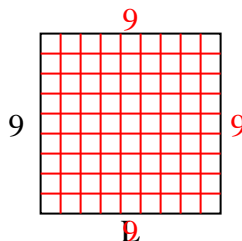
9) Area = $16u^2$



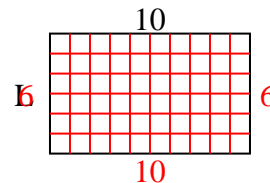
10) Area = $32u^2$



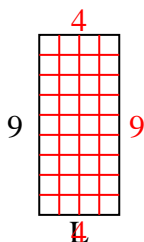
11) Area = $81u^2$



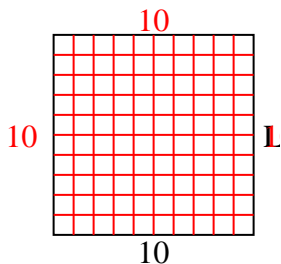
12) Area = $60u^2$



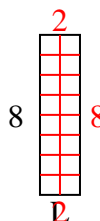
13) Area = $36u^2$



14) Area = $100u^2$



15) Area = $16u^2$



Answers

1. 6

2. 5

3. 10

4. 5

5. 10

6. 2

7. 4

8. 5

9. 2

10. 4

11. 9

12. 6

13. 4

14. 10

15. 2