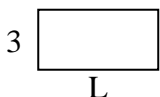




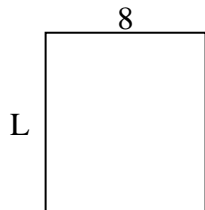
Determine the value of 'L'.

**Answers**

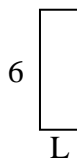
1) Area =  $18u^2$



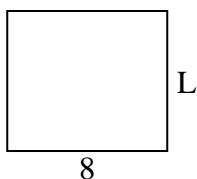
2) Area =  $72u^2$



3) Area =  $12u^2$



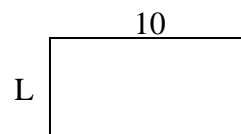
4) Area =  $56u^2$



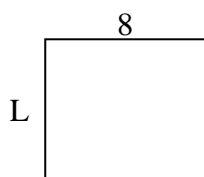
5) Area =  $6u^2$



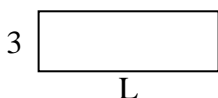
6) Area =  $50u^2$



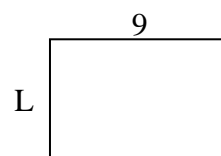
7) Area =  $56u^2$



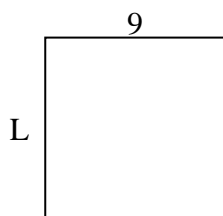
8) Area =  $27u^2$



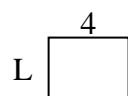
9) Area =  $54u^2$



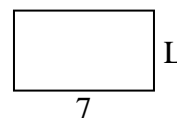
10) Area =  $81u^2$



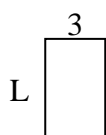
11) Area =  $12u^2$




12) Area =  $28u^2$



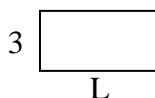
13) Area =  $15u^2$



14) Area =  $20u^2$



15) Area =  $18u^2$

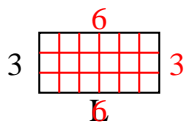


1. \_\_\_\_\_
2. \_\_\_\_\_
3. \_\_\_\_\_
4. \_\_\_\_\_
5. \_\_\_\_\_
6. \_\_\_\_\_
7. \_\_\_\_\_
8. \_\_\_\_\_
9. \_\_\_\_\_
10. \_\_\_\_\_
11. \_\_\_\_\_
12. \_\_\_\_\_
13. \_\_\_\_\_
14. \_\_\_\_\_
15. \_\_\_\_\_

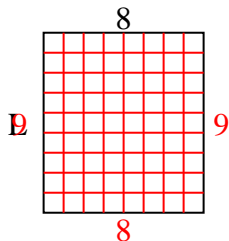


Determine the value of 'L'.

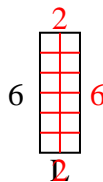
1) Area =  $18u^2$



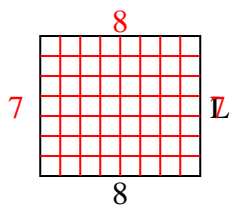
2) Area =  $72u^2$



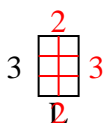
3) Area =  $12u^2$



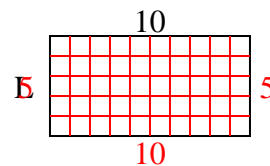
4) Area =  $56u^2$



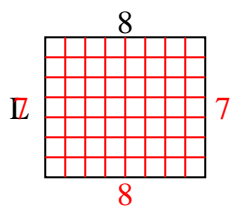
5) Area =  $6u^2$



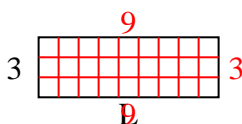
6) Area =  $50u^2$



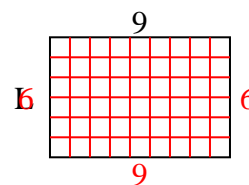
7) Area =  $56u^2$



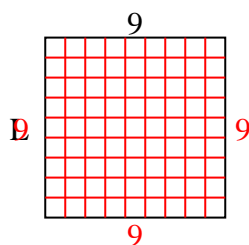
8) Area =  $27u^2$



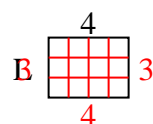
9) Area =  $54u^2$



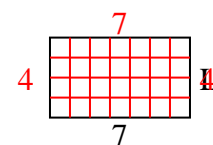
10) Area =  $81u^2$



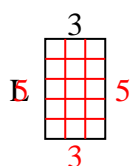
11) Area =  $12u^2$



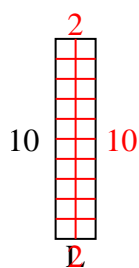
12) Area =  $28u^2$



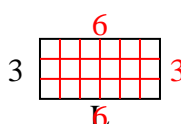
13) Area =  $15u^2$



14) Area =  $20u^2$



15) Area =  $18u^2$



Answers

1. 6

2. 9

3. 2

4. 7

5. 2

6. 5

7. 7

8. 9

9. 6

10. 9

11. 3

12. 4

13. 5

14. 2

15. 6