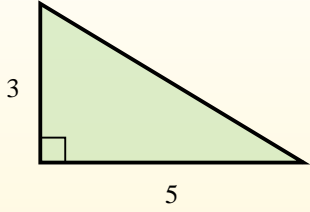


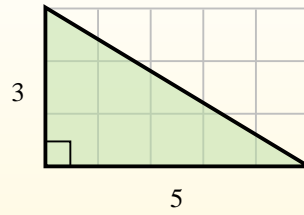


Find the area of each triangle in blocks (b).

The area of a **right** triangle is half the area of the rectangle that would surround it.



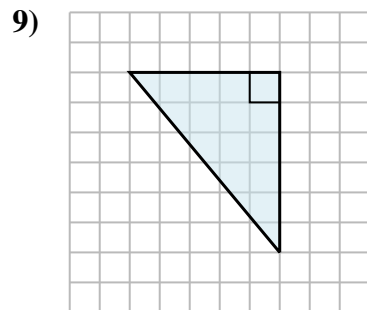
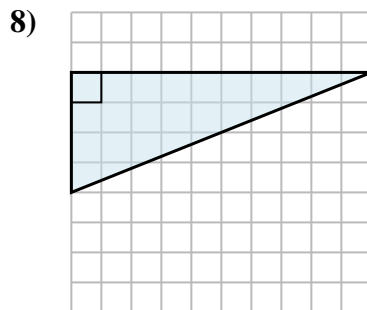
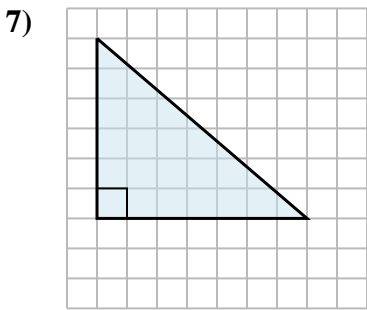
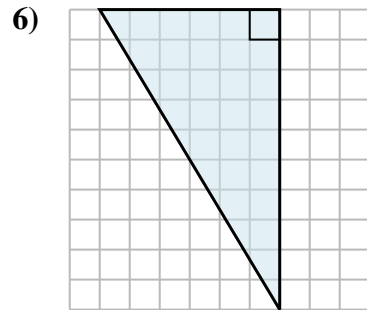
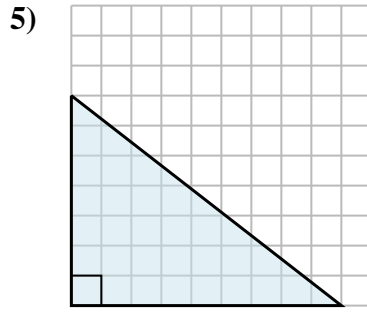
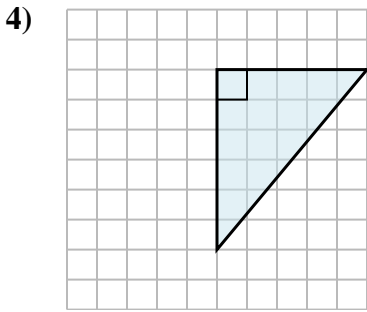
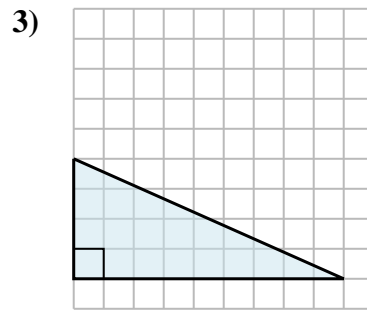
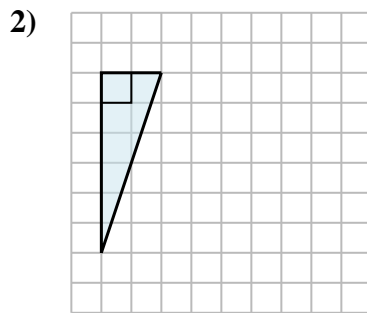
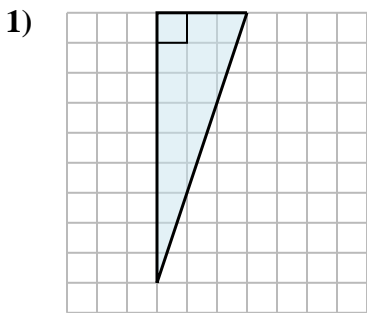
In this example, the surrounding rectangle would have an area of 15 blocks ( $15 b^2$ ).



Half of 15 is 7.5  
This **right** triangle has an area of  $7.5 b^2$ .

Answers

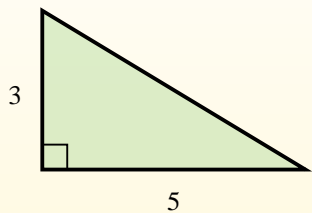
1. \_\_\_\_\_
2. \_\_\_\_\_
3. \_\_\_\_\_
4. \_\_\_\_\_
5. \_\_\_\_\_
6. \_\_\_\_\_
7. \_\_\_\_\_
8. \_\_\_\_\_
9. \_\_\_\_\_



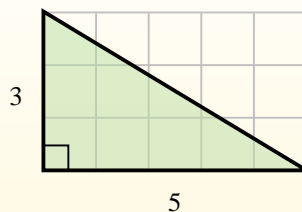


Find the area of each triangle in blocks (b).

The area of a **right** triangle is half the area of the rectangle that would surround it.



In this example, the surrounding rectangle would have an area of 15 blocks ( $15 b^2$ ).



Half of 15 is 7.5  
This **right** triangle has an area of  $7.5 b^2$ .

**Answers**

1. 13.5 b<sup>2</sup>
2. 6 b<sup>2</sup>
3. 18 b<sup>2</sup>
4. 15 b<sup>2</sup>
5. 31.5 b<sup>2</sup>
6. 30 b<sup>2</sup>
7. 21 b<sup>2</sup>
8. 20 b<sup>2</sup>
9. 15 b<sup>2</sup>

