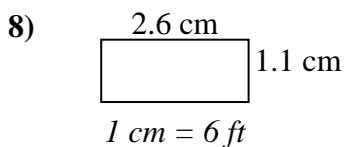
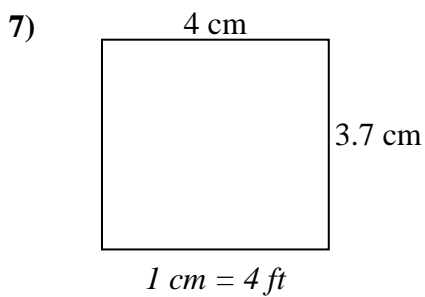
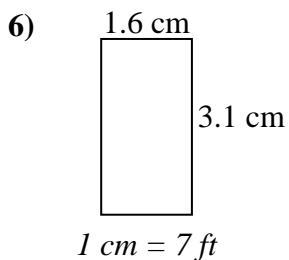
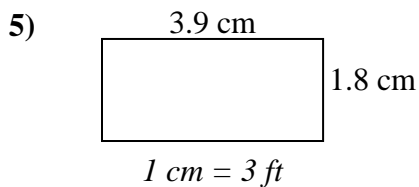
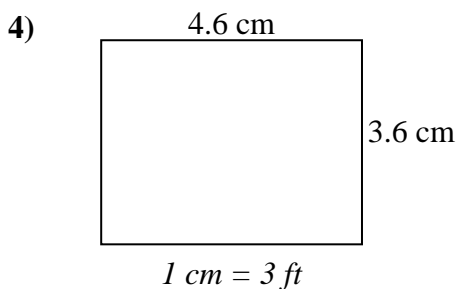
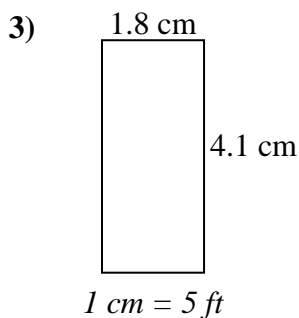
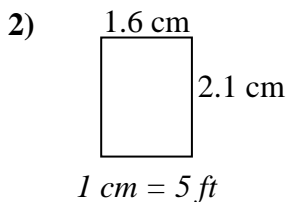
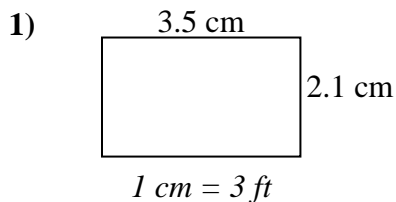




Determine the actual width, height and area of each scale rectangle.

Round the area to the nearest whole number.



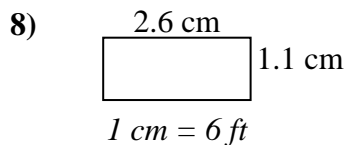
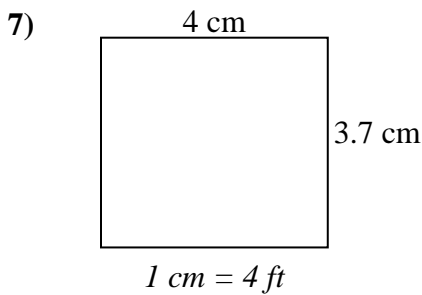
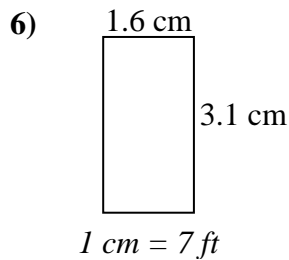
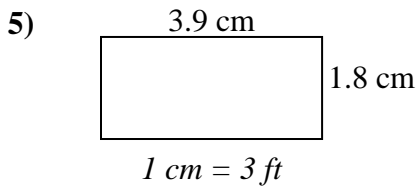
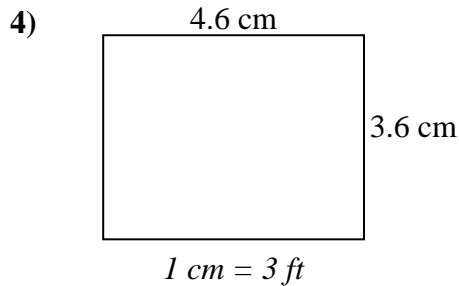
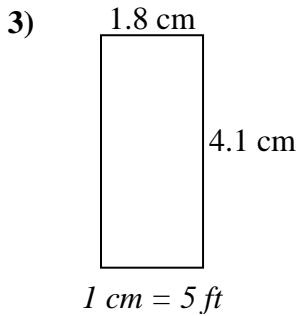
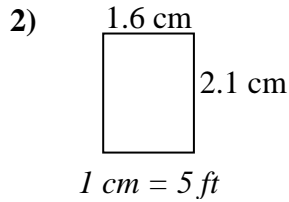
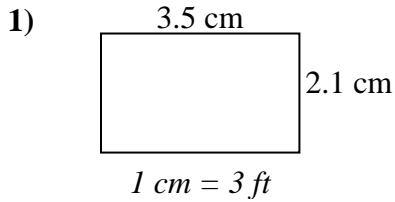
Answers

1. \_\_\_\_\_
2. \_\_\_\_\_
3. \_\_\_\_\_
4. \_\_\_\_\_
5. \_\_\_\_\_
6. \_\_\_\_\_
7. \_\_\_\_\_
8. \_\_\_\_\_



Determine the actual width, height and area of each scale rectangle.

Round the area to the nearest whole number.



Answers

- |    |             |             |            |
|----|-------------|-------------|------------|
| 1. | <u>10.5</u> | <u>6.3</u>  | <u>66</u>  |
| 2. | <u>8</u>    | <u>10.5</u> | <u>84</u>  |
| 3. | <u>9</u>    | <u>20.5</u> | <u>185</u> |
| 4. | <u>13.8</u> | <u>10.8</u> | <u>149</u> |
| 5. | <u>11.7</u> | <u>5.4</u>  | <u>63</u>  |
| 6. | <u>11.2</u> | <u>21.7</u> | <u>243</u> |
| 7. | <u>16</u>   | <u>14.8</u> | <u>237</u> |
| 8. | <u>15.6</u> | <u>6.6</u>  | <u>103</u> |