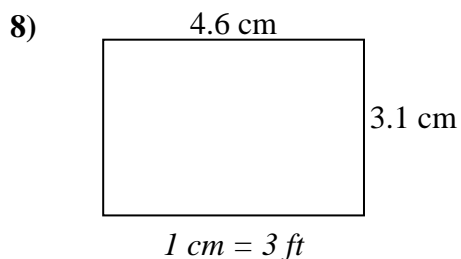
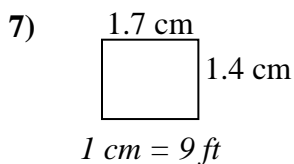
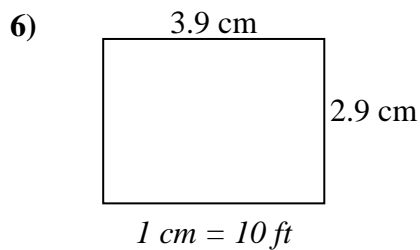
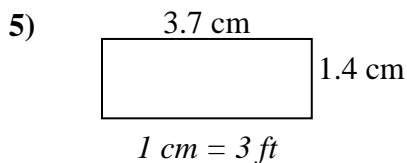
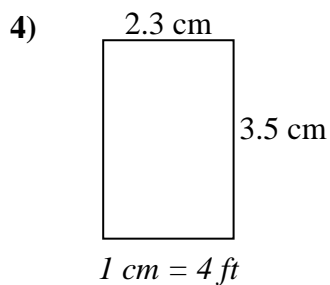
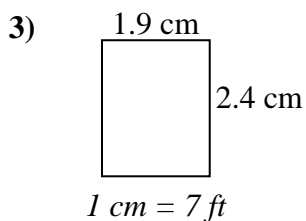
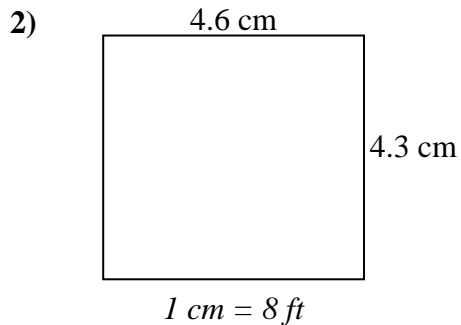
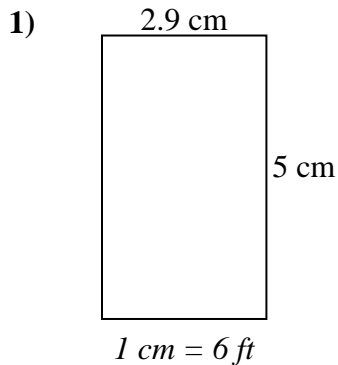




Determine the actual width, height and area of each scale rectangle.

Round the area to the nearest whole number.



Answers

1. \_\_\_\_\_

2. \_\_\_\_\_

3. \_\_\_\_\_

4. \_\_\_\_\_

5. \_\_\_\_\_

6. \_\_\_\_\_

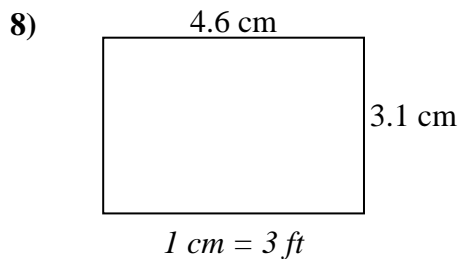
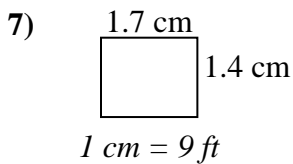
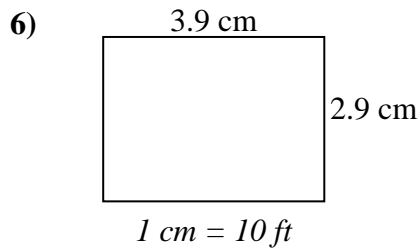
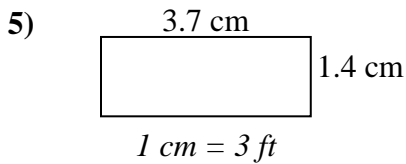
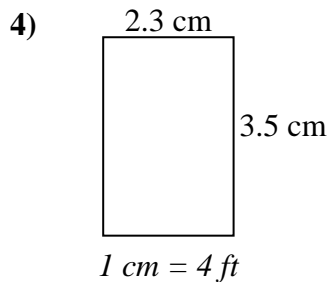
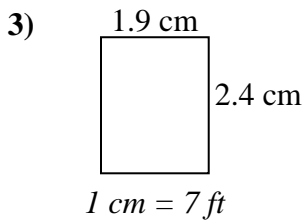
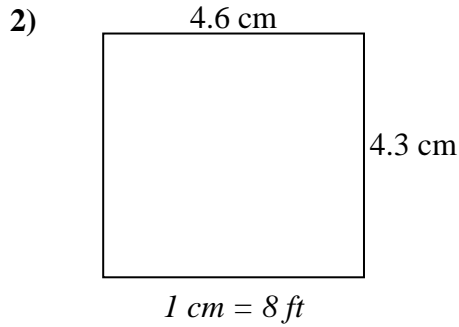
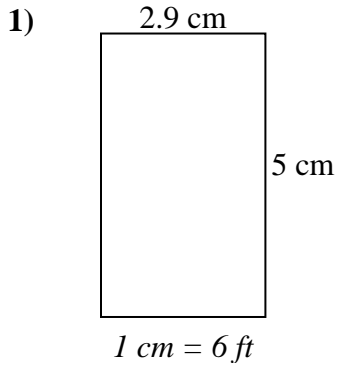
7. \_\_\_\_\_

8. \_\_\_\_\_



Determine the actual width, height and area of each scale rectangle.

Round the area to the nearest whole number.



Answers

- 1. 17.4   30   522
- 2. 36.8   34.4   1,266
- 3. 13.3   16.8   223
- 4. 9.2   14   129
- 5. 11.1   4.2   47
- 6. 39   29   1,131
- 7. 15.3   12.6   193
- 8. 13.8   9.3   128