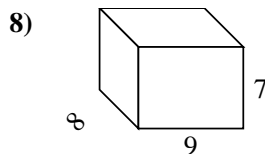
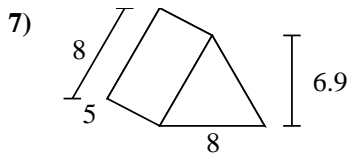
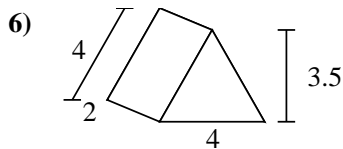
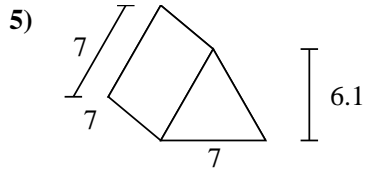
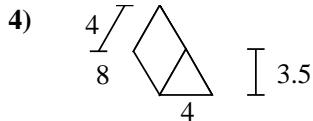
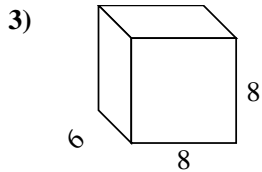
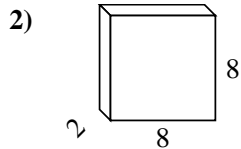
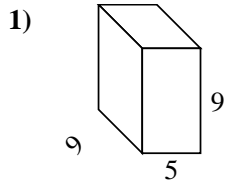
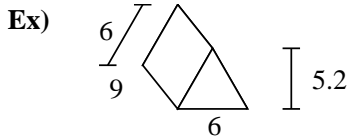




Find the surface area of each figure. Units are in cm (not to scale).



**Answers**

Ex. 193.2 cm<sup>2</sup>

1. \_\_\_\_\_

2. \_\_\_\_\_

3. \_\_\_\_\_

4. \_\_\_\_\_

5. \_\_\_\_\_

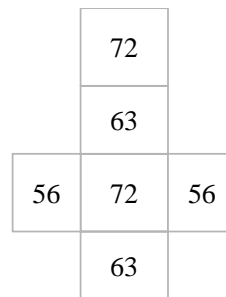
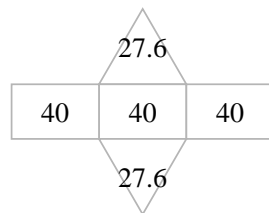
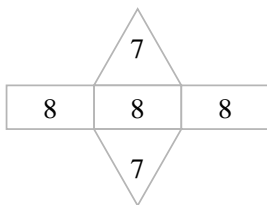
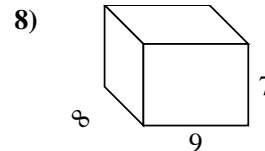
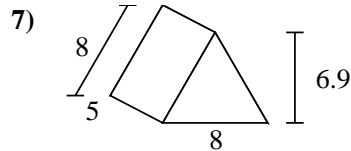
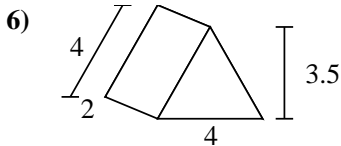
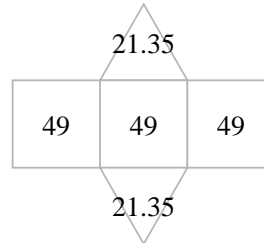
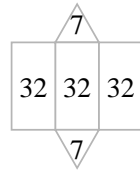
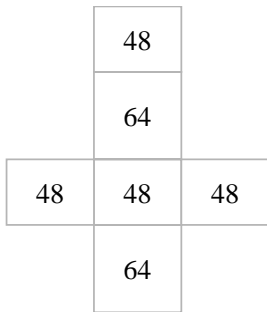
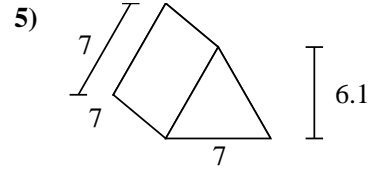
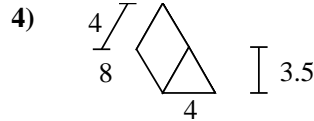
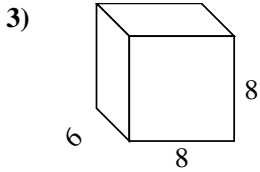
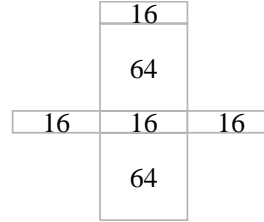
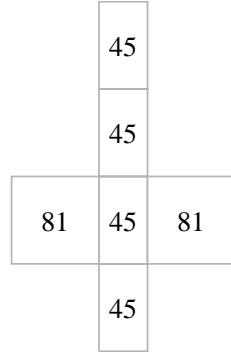
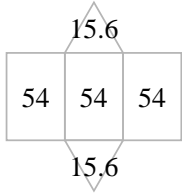
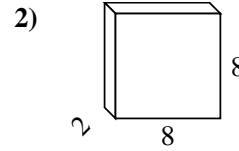
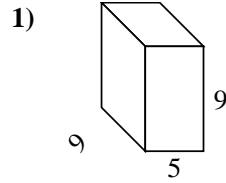
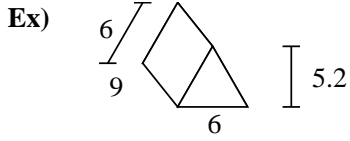
6. \_\_\_\_\_

7. \_\_\_\_\_

8. \_\_\_\_\_



Find the surface area of each figure. Units are in cm (not to scale).



**Answers**

Ex. 193.2 cm<sup>2</sup>

1. 342 cm<sup>2</sup>

2. 192 cm<sup>2</sup>

3. 320 cm<sup>2</sup>

4. 110 cm<sup>2</sup>

5. 189.7 cm<sup>2</sup>

6. 38 cm<sup>2</sup>

7. 175.2 cm<sup>2</sup>

8. 382 cm<sup>2</sup>