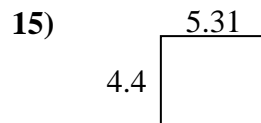
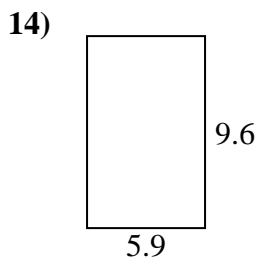
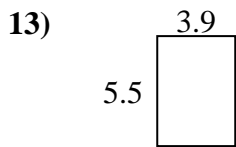
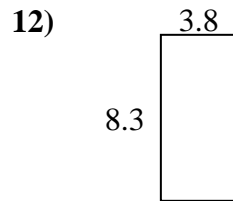
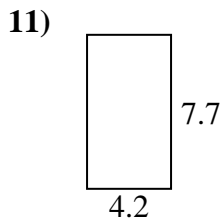
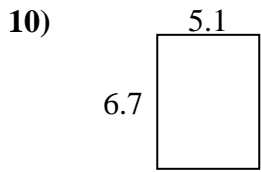
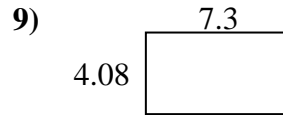
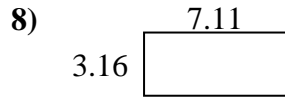
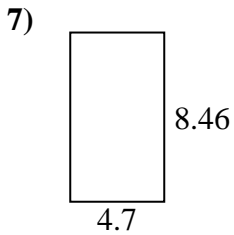
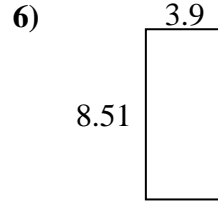
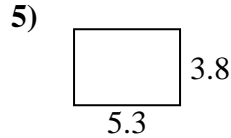
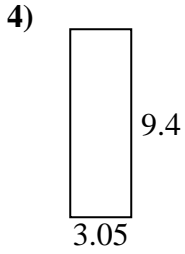
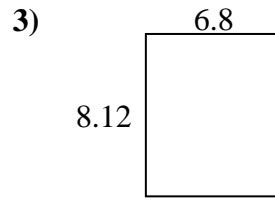
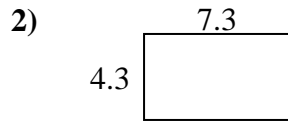
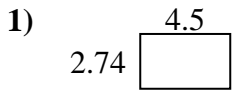




Find the perimeter and area of each figure. Answer to the nearest 10th.

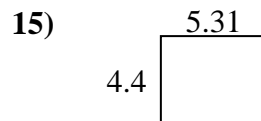
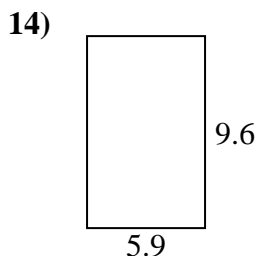
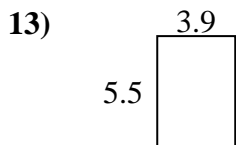
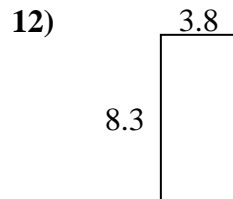
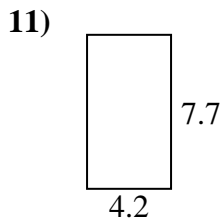
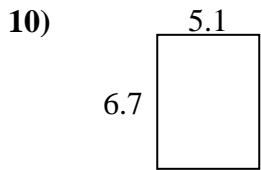
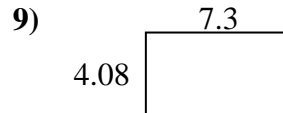
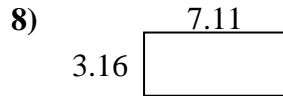
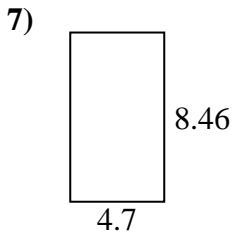
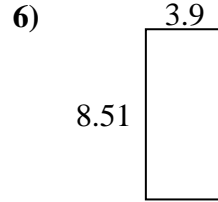
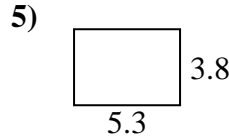
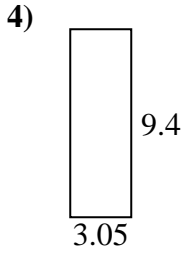
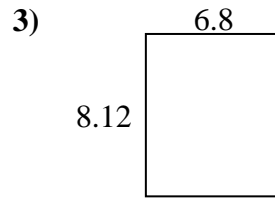
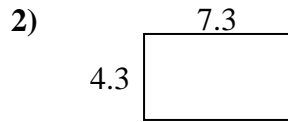
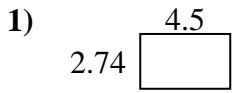


Answers

1. _____
2. _____
3. _____
4. _____
5. _____
6. _____
7. _____
8. _____
9. _____
10. _____
11. _____
12. _____
13. _____
14. _____
15. _____



Find the perimeter and area of each figure. Answer to the nearest 10th.



Answers

| | | |
|-----|-------------|-------------|
| 1. | <u>12.3</u> | <u>14.5</u> |
| 2. | <u>31.4</u> | <u>23.2</u> |
| 3. | <u>55.2</u> | <u>29.8</u> |
| 4. | <u>28.7</u> | <u>24.9</u> |
| 5. | <u>20.1</u> | <u>18.2</u> |
| 6. | <u>33.2</u> | <u>24.8</u> |
| 7. | <u>39.8</u> | <u>26.3</u> |
| 8. | <u>22.5</u> | <u>20.5</u> |
| 9. | <u>29.8</u> | <u>22.8</u> |
| 10. | <u>34.2</u> | <u>23.6</u> |
| 11. | <u>32.3</u> | <u>23.8</u> |
| 12. | <u>31.5</u> | <u>24.2</u> |
| 13. | <u>21.5</u> | <u>18.8</u> |
| 14. | <u>56.6</u> | <u>31.0</u> |
| 15. | <u>23.4</u> | <u>19.4</u> |