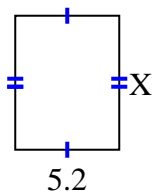


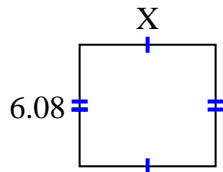


Find the value of X for each figure. Each figure is in centimeters (cm). Not to scale.

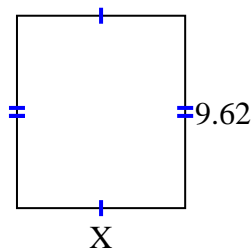
1) area = 34.84 cm^2



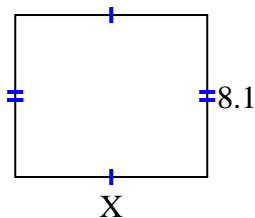
2) area = 41.344 cm^2



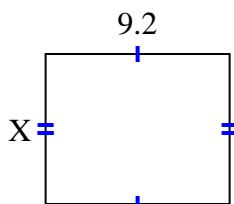
3) area = 80.9042 cm^2



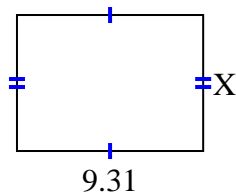
4) area = 77.76 cm^2



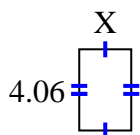
5) area = 69 cm^2



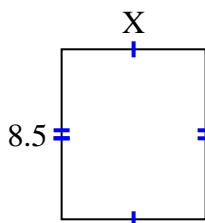
6) area = 63.308 cm^2



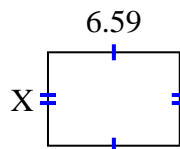
7) area = 10.556 cm^2



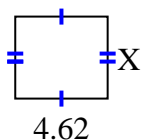
8) area = 61.2 cm^2



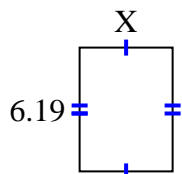
9) area = 30.7753 cm^2



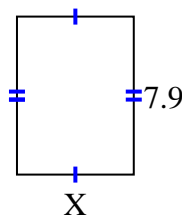
10) area = 18.942 cm^2



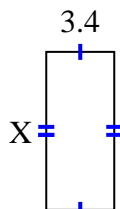
11) area = 28.7835 cm^2



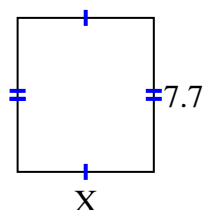
12) area = 46.136 cm^2



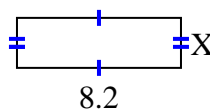
13) area = 26.86 cm^2



14) area = 52.437 cm^2



15) area = 20.5 cm^2



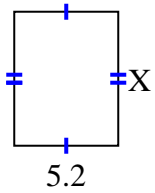
Answers

1. _____
2. _____
3. _____
4. _____
5. _____
6. _____
7. _____
8. _____
9. _____
10. _____
11. _____
12. _____
13. _____
14. _____
15. _____

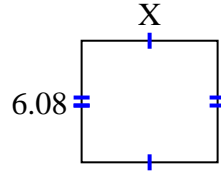


Find the value of X for each figure. Each figure is in centimeters (cm). Not to scale.

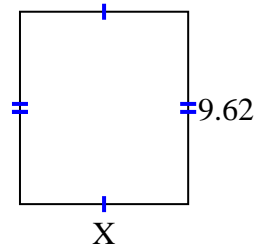
1) area = 34.84 cm^2



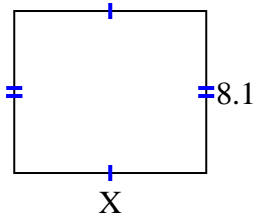
2) area = 41.344 cm^2



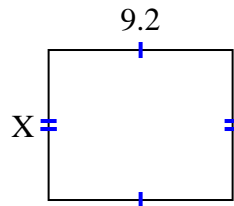
3) area = 80.9042 cm^2



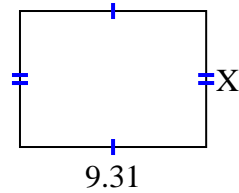
4) area = 77.76 cm^2



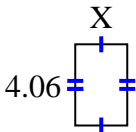
5) area = 69 cm^2



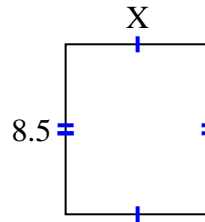
6) area = 63.308 cm^2



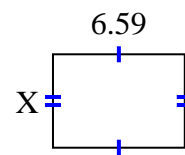
7) area = 10.556 cm^2



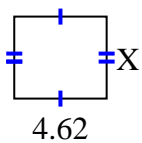
8) area = 61.2 cm^2



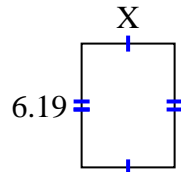
9) area = 30.7753 cm^2



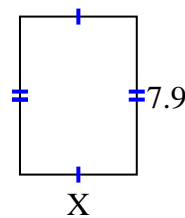
10) area = 18.942 cm^2



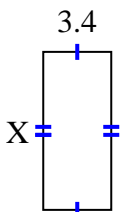
11) area = 28.7835 cm^2



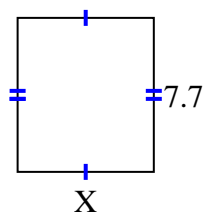
12) area = 46.136 cm^2



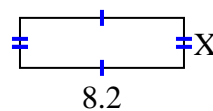
13) area = 26.86 cm^2



14) area = 52.437 cm^2



15) area = 20.5 cm^2



Answers

1. 6.7
2. 6.8
3. 8.41
4. 9.6
5. 7.5
6. 6.8
7. 2.6
8. 7.2
9. 4.67
10. 4.1
11. 4.65
12. 5.84
13. 7.9
14. 6.81
15. 2.5