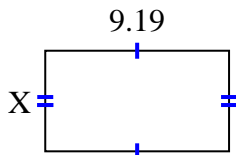


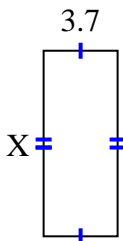


Find the value of X for each figure. Each figure is in centimeters (cm). Not to scale.

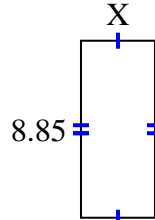
1) area =  $46.2257 \text{ cm}^2$



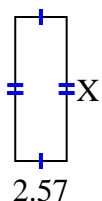
2) area =  $34.336 \text{ cm}^2$



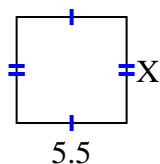
3) area =  $32.745 \text{ cm}^2$



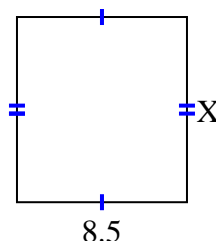
4) area =  $18.504 \text{ cm}^2$



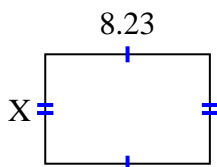
5) area =  $29.15 \text{ cm}^2$



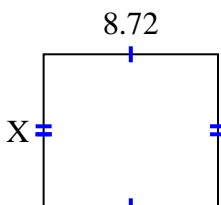
6) area =  $78.71 \text{ cm}^2$



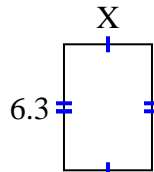
7) area =  $45.0181 \text{ cm}^2$



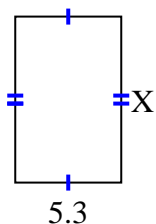
8) area =  $66.272 \text{ cm}^2$



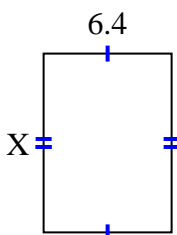
9) area =  $27.72 \text{ cm}^2$



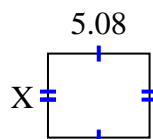
10) area =  $43.99 \text{ cm}^2$



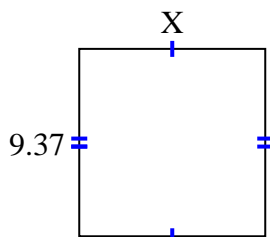
11) area =  $57.216 \text{ cm}^2$



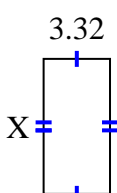
12) area =  $21.336 \text{ cm}^2$



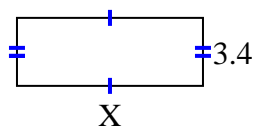
13) area =  $87.141 \text{ cm}^2$



14) area =  $22.41 \text{ cm}^2$



15) area =  $31.62 \text{ cm}^2$



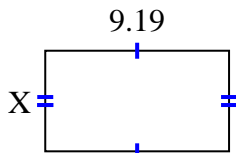
**Answers**

1. \_\_\_\_\_
2. \_\_\_\_\_
3. \_\_\_\_\_
4. \_\_\_\_\_
5. \_\_\_\_\_
6. \_\_\_\_\_
7. \_\_\_\_\_
8. \_\_\_\_\_
9. \_\_\_\_\_
10. \_\_\_\_\_
11. \_\_\_\_\_
12. \_\_\_\_\_
13. \_\_\_\_\_
14. \_\_\_\_\_
15. \_\_\_\_\_

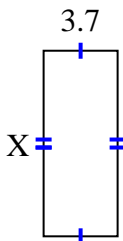


Find the value of X for each figure. Each figure is in centimeters (cm). Not to scale.

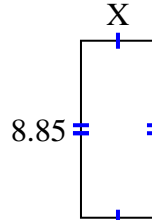
1) area =  $46.2257 \text{ cm}^2$



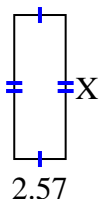
2) area =  $34.336 \text{ cm}^2$



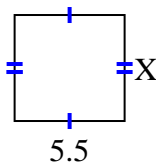
3) area =  $32.745 \text{ cm}^2$



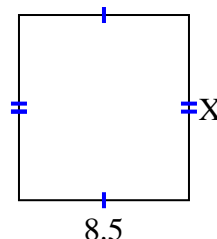
4) area =  $18.504 \text{ cm}^2$



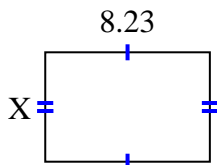
5) area =  $29.15 \text{ cm}^2$



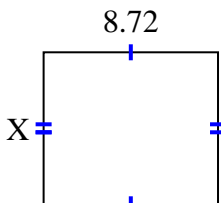
6) area =  $78.71 \text{ cm}^2$



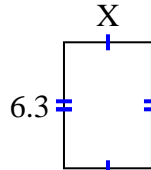
7) area =  $45.0181 \text{ cm}^2$



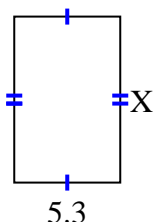
8) area =  $66.272 \text{ cm}^2$



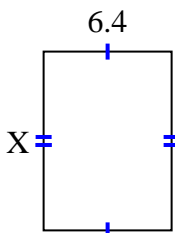
9) area =  $27.72 \text{ cm}^2$



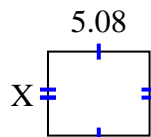
10) area =  $43.99 \text{ cm}^2$



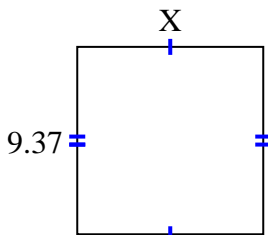
11) area =  $57.216 \text{ cm}^2$



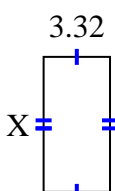
12) area =  $21.336 \text{ cm}^2$



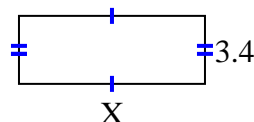
13) area =  $87.141 \text{ cm}^2$



14) area =  $22.41 \text{ cm}^2$



15) area =  $31.62 \text{ cm}^2$



Answers

1. 5.03

2. 9.28

3. 3.7

4. 7.2

5. 5.3

6. 9.26

7. 5.47

8. 7.6

9. 4.4

10. 8.3

11. 8.94

12. 4.2

13. 9.3

14. 6.75

15. 9.3