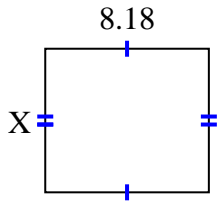


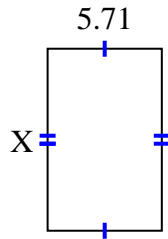


Find the value of X for each figure. Each figure is in centimeters (cm). Not to scale.

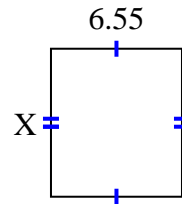
1) area = 58.7324 cm^2



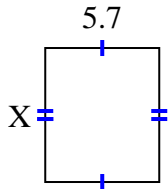
2) area = 51.961 cm^2



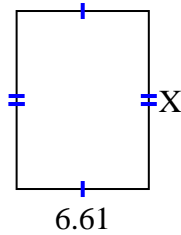
3) area = 48.47 cm^2



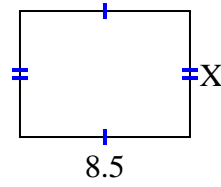
4) area = 38.19 cm^2



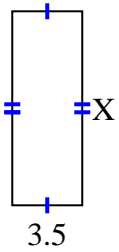
5) area = 58.829 cm^2



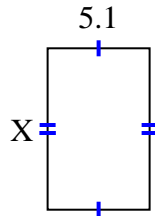
6) area = 53.55 cm^2



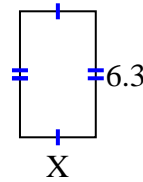
7) area = 33.95 cm^2



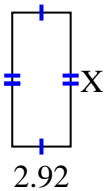
8) area = 41.157 cm^2



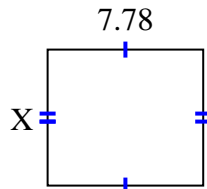
9) area = 23.877 cm^2



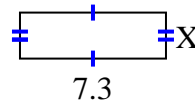
10) area = 19.564 cm^2



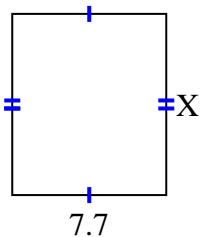
11) area = 52.904 cm^2



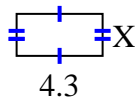
12) area = 16.79 cm^2



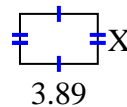
13) area = 69.762 cm^2



14) area = 9.03 cm^2



15) area = 9.725 cm^2



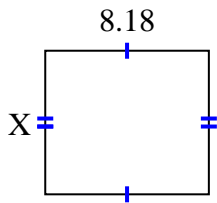
Answers

1. _____
2. _____
3. _____
4. _____
5. _____
6. _____
7. _____
8. _____
9. _____
10. _____
11. _____
12. _____
13. _____
14. _____
15. _____

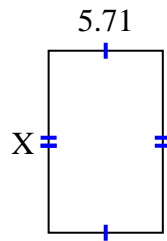


Find the value of X for each figure. Each figure is in centimeters (cm). Not to scale.

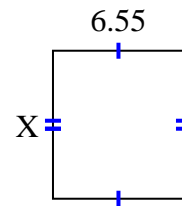
1) area = 58.7324 cm^2



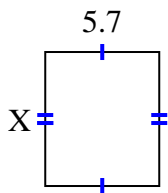
2) area = 51.961 cm^2



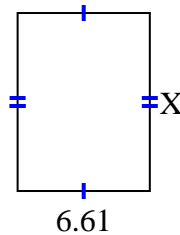
3) area = 48.47 cm^2



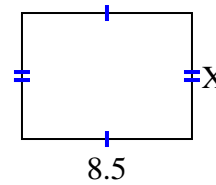
4) area = 38.19 cm^2



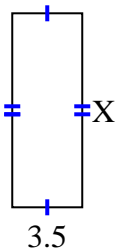
5) area = 58.829 cm^2



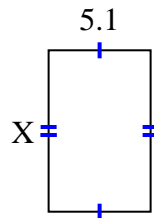
6) area = 53.55 cm^2



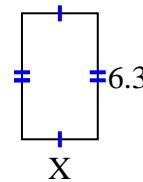
7) area = 33.95 cm^2



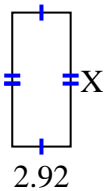
8) area = 41.157 cm^2



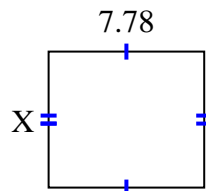
9) area = 23.877 cm^2



10) area = 19.564 cm^2



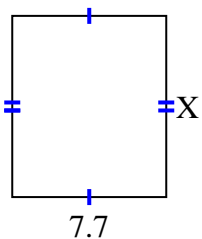
11) area = 52.904 cm^2



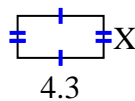
12) area = 16.79 cm^2



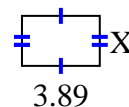
13) area = 69.762 cm^2



14) area = 9.03 cm^2



15) area = 9.725 cm^2



Answers

1. 7.18

2. 9.1

3. 7.4

4. 6.7

5. 8.9

6. 6.3

7. 9.7

8. 8.07

9. 3.79

10. 6.7

11. 6.8

12. 2.3

13. 9.06

14. 2.1

15. 2.5