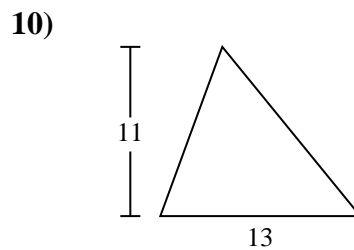
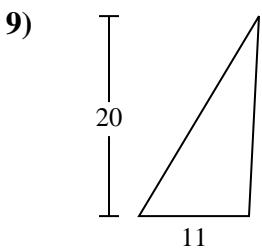
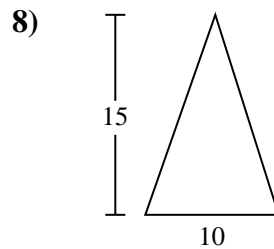
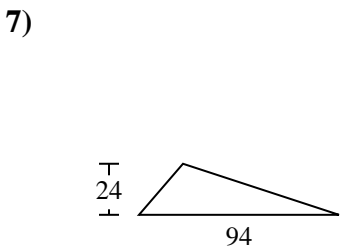
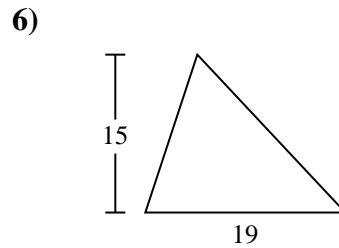
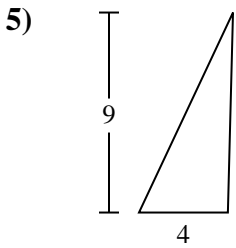
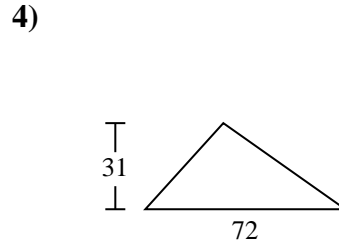
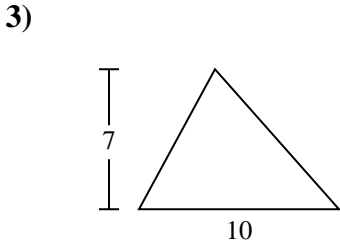
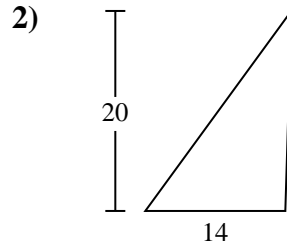
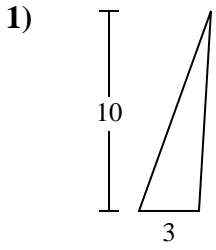




Find the area of the triangle. Round your answer to the nearest 10th.

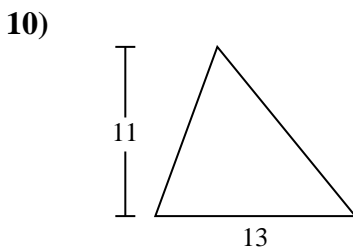
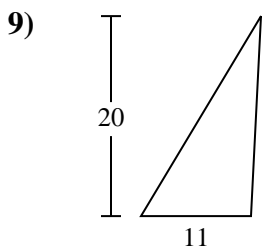
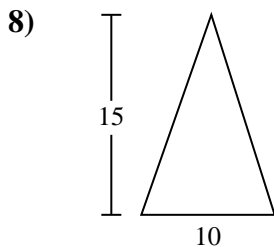
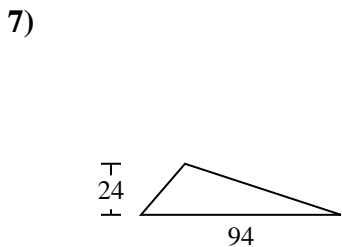
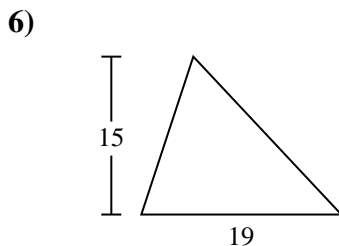
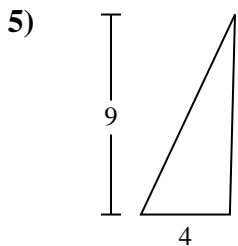
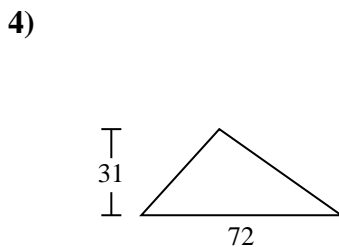
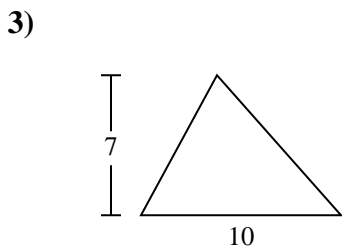
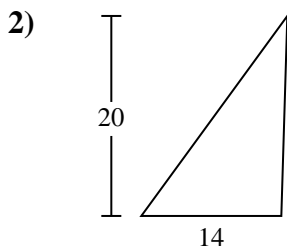
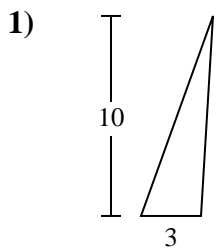


Answers

- 1. _____
- 2. _____
- 3. _____
- 4. _____
- 5. _____
- 6. _____
- 7. _____
- 8. _____
- 9. _____
- 10. _____



Find the area of the triangle. Round your answer to the nearest 10th.



Answers

1. 15

2. 140

3. 35

4. 1,116

5. 18

6. 142.5

7. 1,128

8. 75

9. 110

10. 71.5



Find the area of the triangle. Round your answer to the nearest 10th.

142.5

75

1,116

140

110

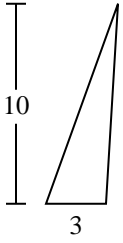
18

1,128

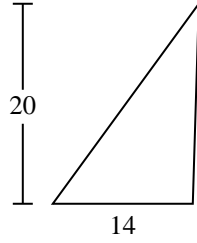
15

35

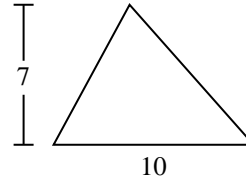
1)



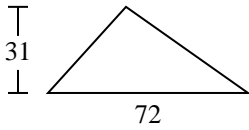
2)



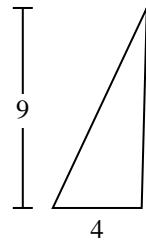
3)



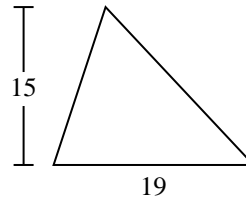
4)



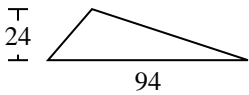
5)



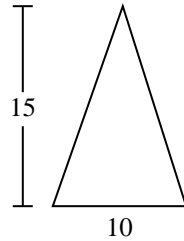
6)



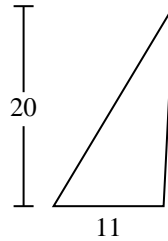
7)



8)



9)



Answers

1. _____
2. _____
3. _____
4. _____
5. _____
6. _____
7. _____
8. _____
9. _____