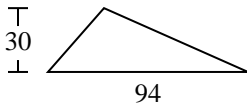


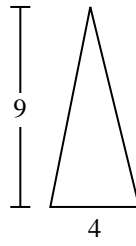


Find the area of the triangle. Round your answer to the nearest 10th.

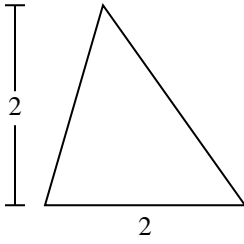
1)



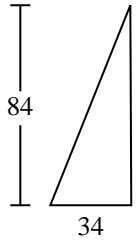
2)



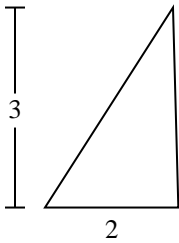
3)



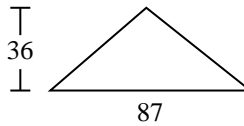
4)



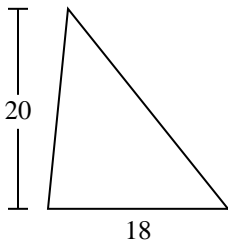
5)



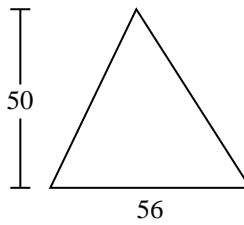
6)



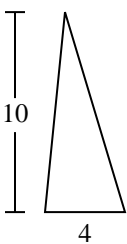
7)



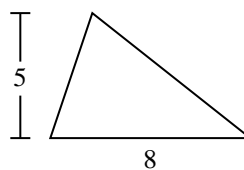
8)



9)



10)



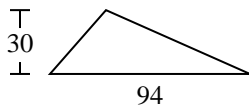
Answers

- 1. \_\_\_\_\_
- 2. \_\_\_\_\_
- 3. \_\_\_\_\_
- 4. \_\_\_\_\_
- 5. \_\_\_\_\_
- 6. \_\_\_\_\_
- 7. \_\_\_\_\_
- 8. \_\_\_\_\_
- 9. \_\_\_\_\_
- 10. \_\_\_\_\_

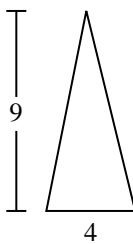


Find the area of the triangle. Round your answer to the nearest 10th.

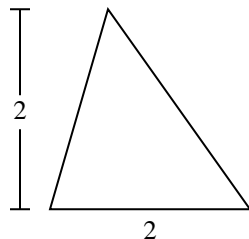
1)



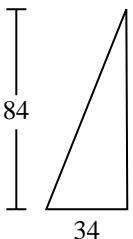
2)



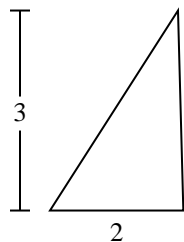
3)



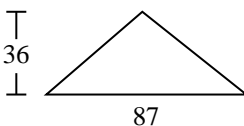
4)



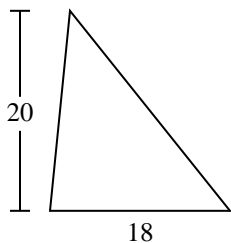
5)



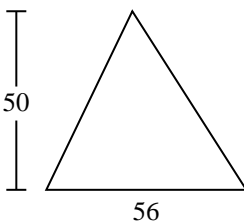
6)



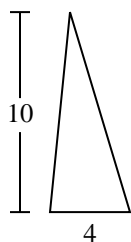
7)



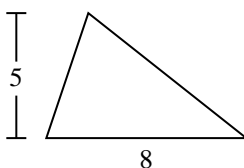
8)



9)



10)



Answers

1. 1,410

2. 18

3. 2

4. 1,428

5. 3

6. 1,566

7. 180

8. 1,400

9. 20

10. 20



Find the area of the triangle. Round your answer to the nearest 10th.

180	1,428	18	1,566	1,400
3	2	20	1,410	

Answers

1. \_\_\_\_\_
2. \_\_\_\_\_
3. \_\_\_\_\_
4. \_\_\_\_\_
5. \_\_\_\_\_
6. \_\_\_\_\_
7. \_\_\_\_\_
8. \_\_\_\_\_
9. \_\_\_\_\_

