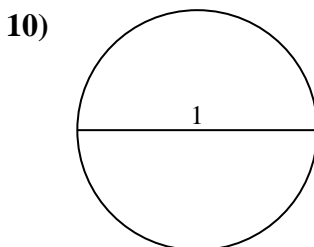
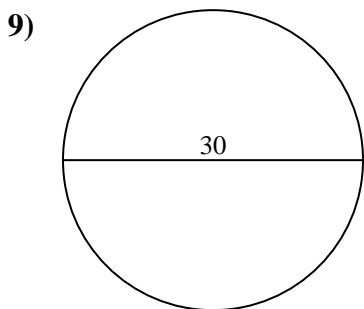
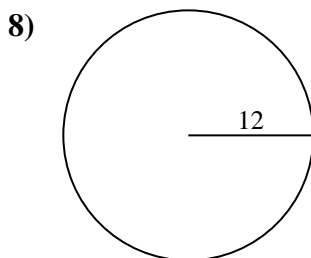
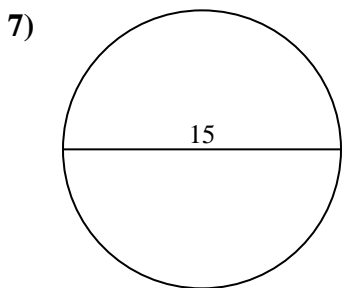
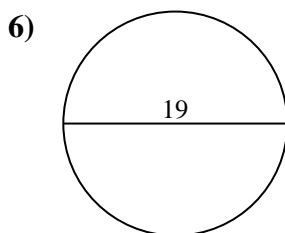
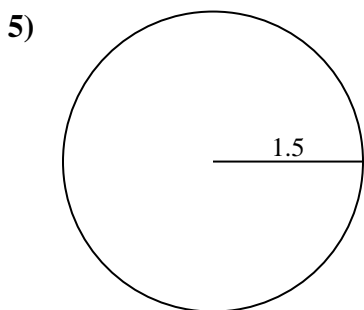
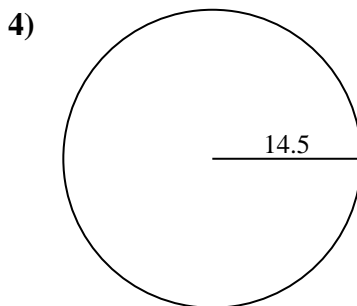
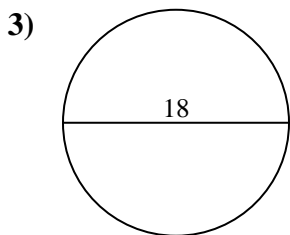
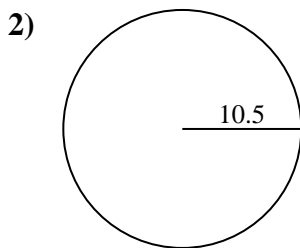
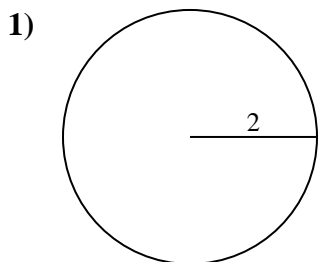




Find the area of the circle. Round to the nearest 10th.

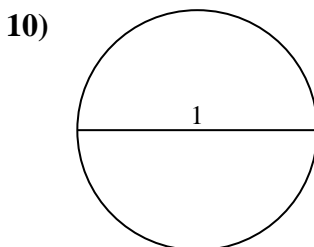
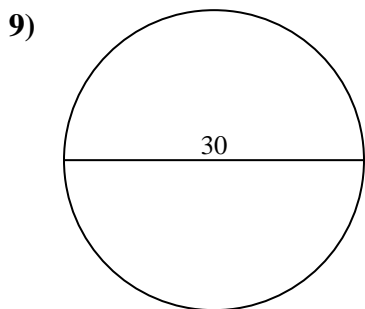
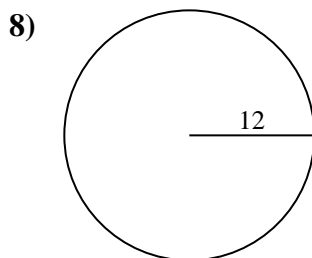
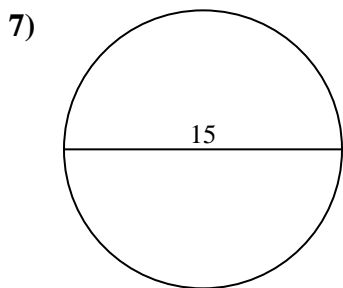
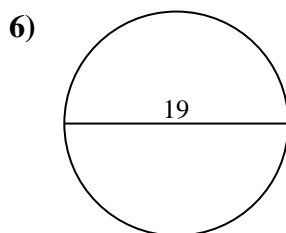
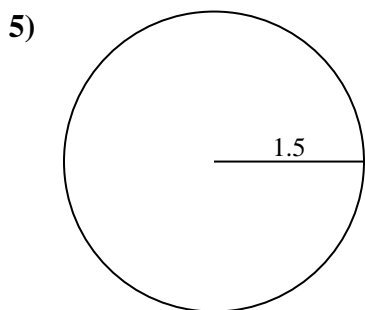
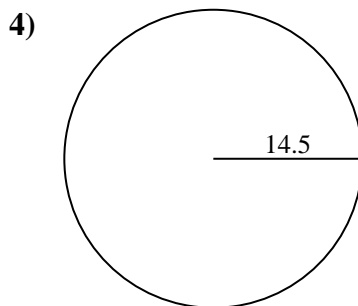
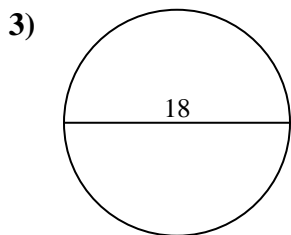
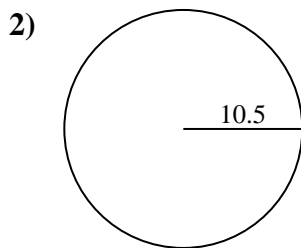
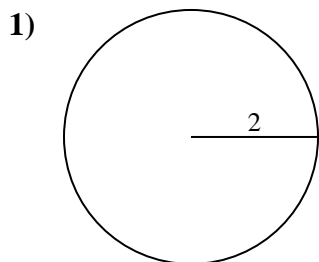
Answers



- 1. _____
- 2. _____
- 3. _____
- 4. _____
- 5. _____
- 6. _____
- 7. _____
- 8. _____
- 9. _____
- 10. _____



Find the area of the circle. Round to the nearest 10th.



Answers

- 1. 12.6
- 2. 346.4
- 3. 254.5
- 4. 660.5
- 5. 7.1
- 6. 283.5
- 7. 176.7
- 8. 452.4
- 9. 706.9
- 10. 0.8



Find the area of the circle. Round to the nearest 10th.

452.4	7.1	346.4	283.5	660.5
254.5	12.6	176.7	706.9	

Answers

1. _____
2. _____
3. _____
4. _____
5. _____
6. _____
7. _____
8. _____
9. _____

