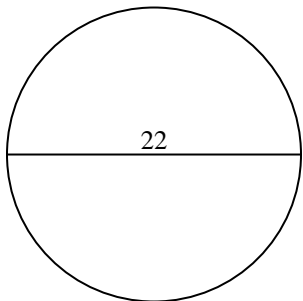


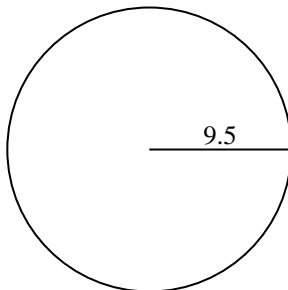


Find the area and circumference of the circle. Circles are not to scale. Round to the nearest 10th.

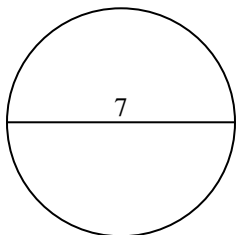
1)



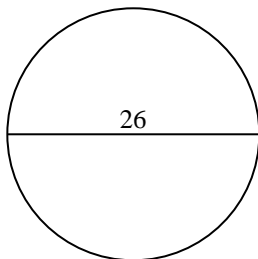
2)



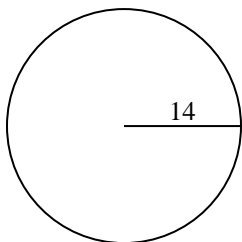
3)



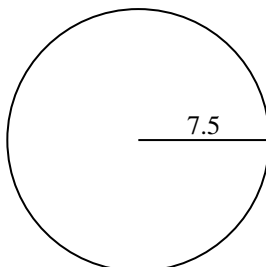
4)



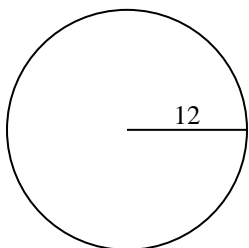
5)



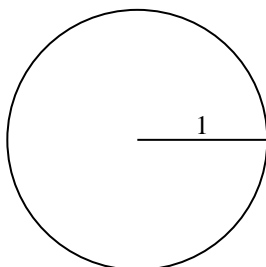
6)



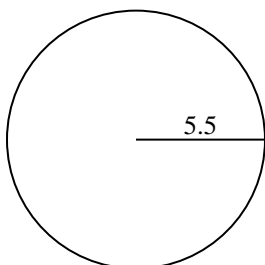
7)



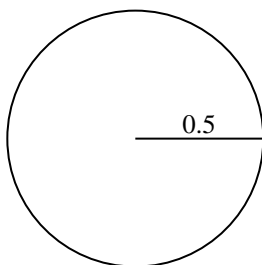
8)



9)



10)

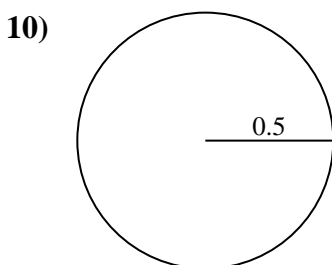
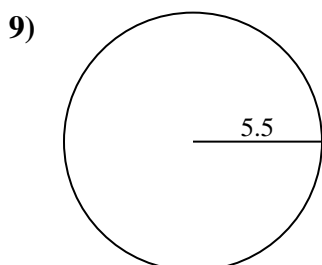
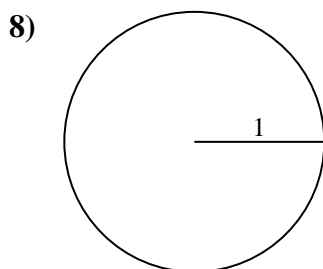
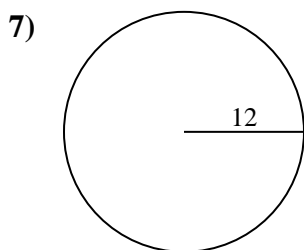
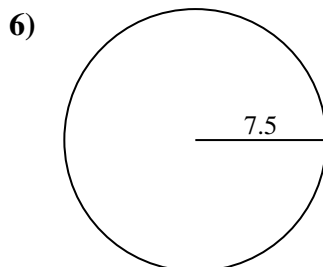
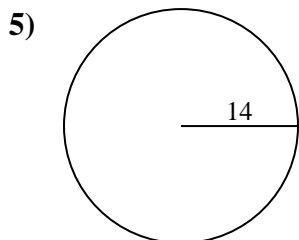
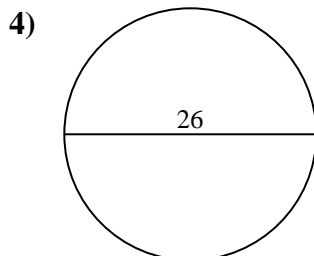
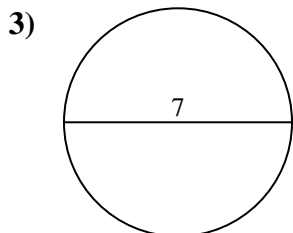
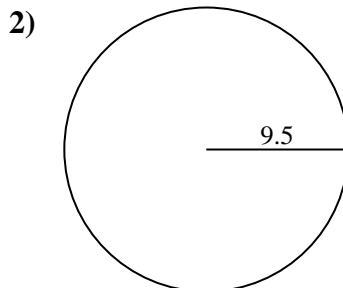
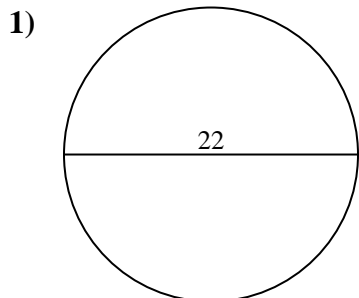


Answers

- 1. \_\_\_\_\_
- 2. \_\_\_\_\_
- 3. \_\_\_\_\_
- 4. \_\_\_\_\_
- 5. \_\_\_\_\_
- 6. \_\_\_\_\_
- 7. \_\_\_\_\_
- 8. \_\_\_\_\_
- 9. \_\_\_\_\_
- 10. \_\_\_\_\_



Find the area and circumference of the circle. Circles are not to scale. Round to the nearest 10th.



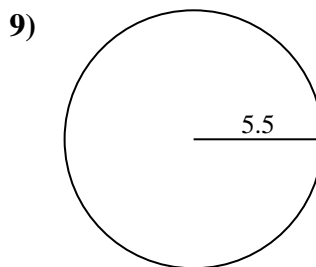
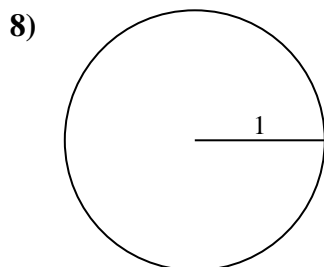
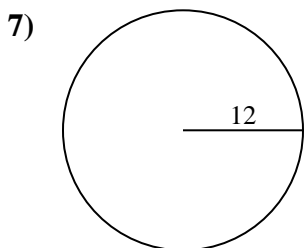
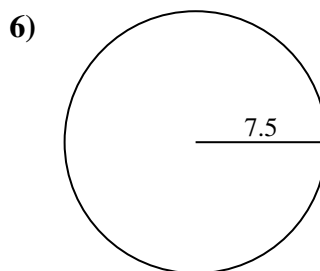
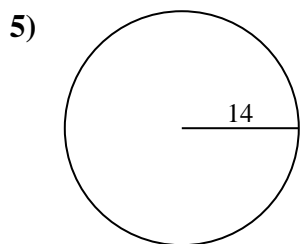
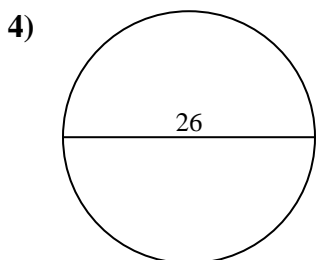
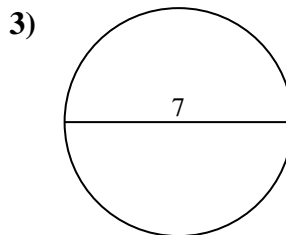
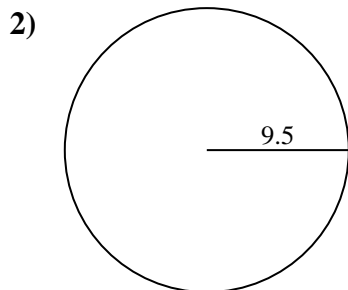
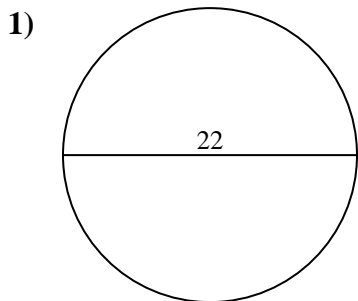
Answers

|     |              |             |
|-----|--------------|-------------|
| 1.  | <u>380.1</u> | <u>69.1</u> |
| 2.  | <u>283.5</u> | <u>59.7</u> |
| 3.  | <u>38.5</u>  | <u>22</u>   |
| 4.  | <u>530.9</u> | <u>81.7</u> |
| 5.  | <u>615.8</u> | <u>88</u>   |
| 6.  | <u>176.7</u> | <u>47.1</u> |
| 7.  | <u>452.4</u> | <u>75.4</u> |
| 8.  | <u>3.1</u>   | <u>6.3</u>  |
| 9.  | <u>95</u>    | <u>34.6</u> |
| 10. | <u>0.8</u>   | <u>3.1</u>  |



Find the area and circumference of the circle. Circles are not to scale. Round to the nearest 10th.

|      |      |       |       |       |
|------|------|-------|-------|-------|
| 95   | 34.6 | 283.5 | 380.1 | 530.9 |
| 75.4 | 59.7 | 615.8 | 452.4 | 6.3   |
| 81.7 | 3.1  | 47.1  | 22    | 176.7 |
| 69.1 | 38.5 | 88    |       |       |



Answers

1. \_\_\_\_\_
2. \_\_\_\_\_
3. \_\_\_\_\_
4. \_\_\_\_\_
5. \_\_\_\_\_
6. \_\_\_\_\_
7. \_\_\_\_\_
8. \_\_\_\_\_
9. \_\_\_\_\_