



Solve each problem.



- 1) fine knob \_\_\_\_\_
- 2) stage \_\_\_\_\_
- 3) base \_\_\_\_\_
- 4) course knob \_\_\_\_\_
- 5) eye piece \_\_\_\_\_
- 6) lens \_\_\_\_\_
- 7) illuminator \_\_\_\_\_

**Answers**

- 1. \_\_\_\_\_
- 2. \_\_\_\_\_
- 3. \_\_\_\_\_
- 4. \_\_\_\_\_
- 5. \_\_\_\_\_
- 6. \_\_\_\_\_
- 7. \_\_\_\_\_



Solve each problem.



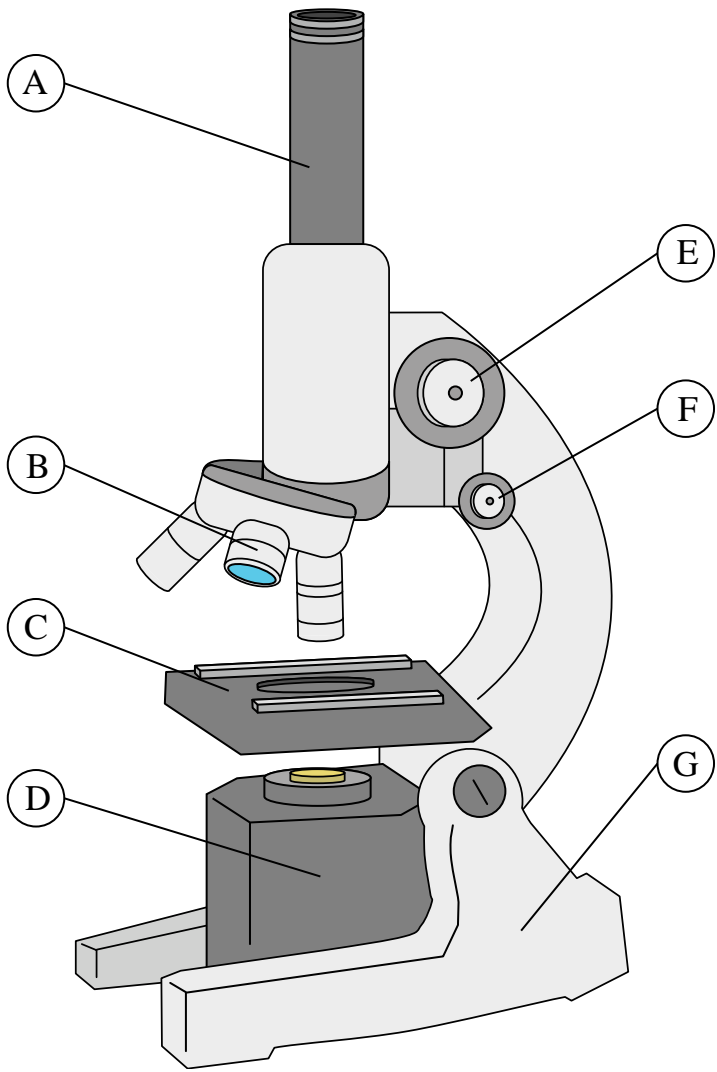
- 1) fine knob         F
- 2) stage           C
- 3) base            G
- 4) course knob           E
- 5) eye piece           A
- 6) lens            B
- 7) illuminator           D

Answers

- 1.         **F**
- 2.         **C**
- 3.         **G**
- 4.         **E**
- 5.         **A**
- 6.         **B**
- 7.         **D**



Solve each problem.



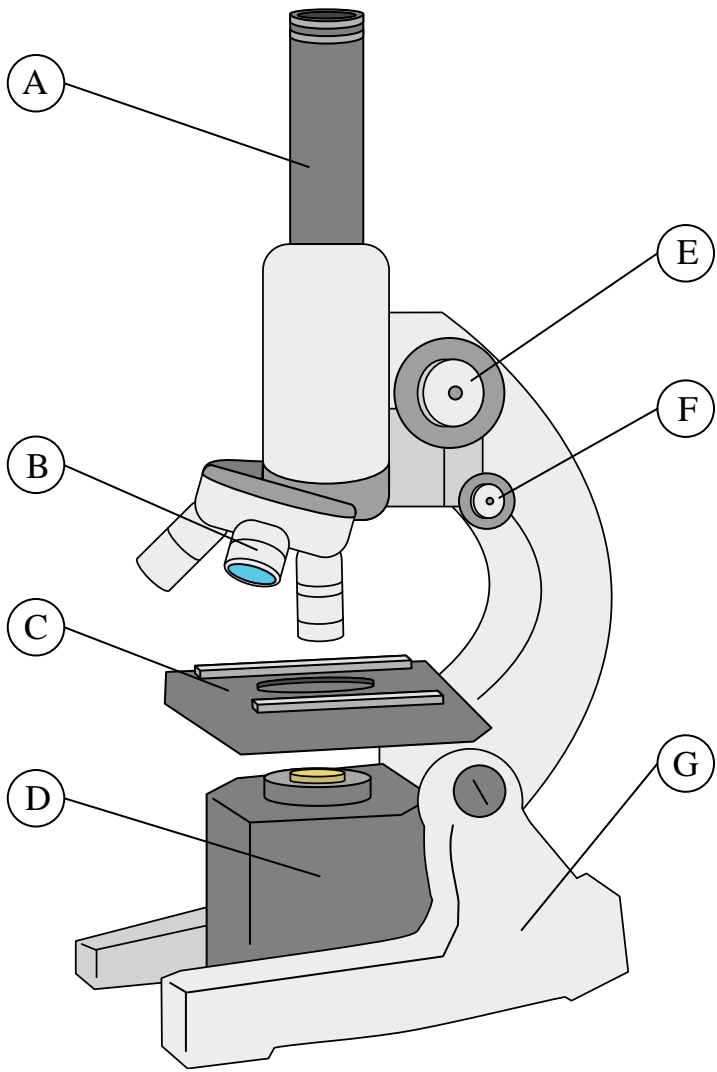
- 1) stage \_\_\_\_\_
- 2) lens \_\_\_\_\_
- 3) fine knob \_\_\_\_\_
- 4) base \_\_\_\_\_
- 5) course knob \_\_\_\_\_
- 6) eye piece \_\_\_\_\_
- 7) illuminator \_\_\_\_\_

Answers

- 1. \_\_\_\_\_
- 2. \_\_\_\_\_
- 3. \_\_\_\_\_
- 4. \_\_\_\_\_
- 5. \_\_\_\_\_
- 6. \_\_\_\_\_
- 7. \_\_\_\_\_



Solve each problem.



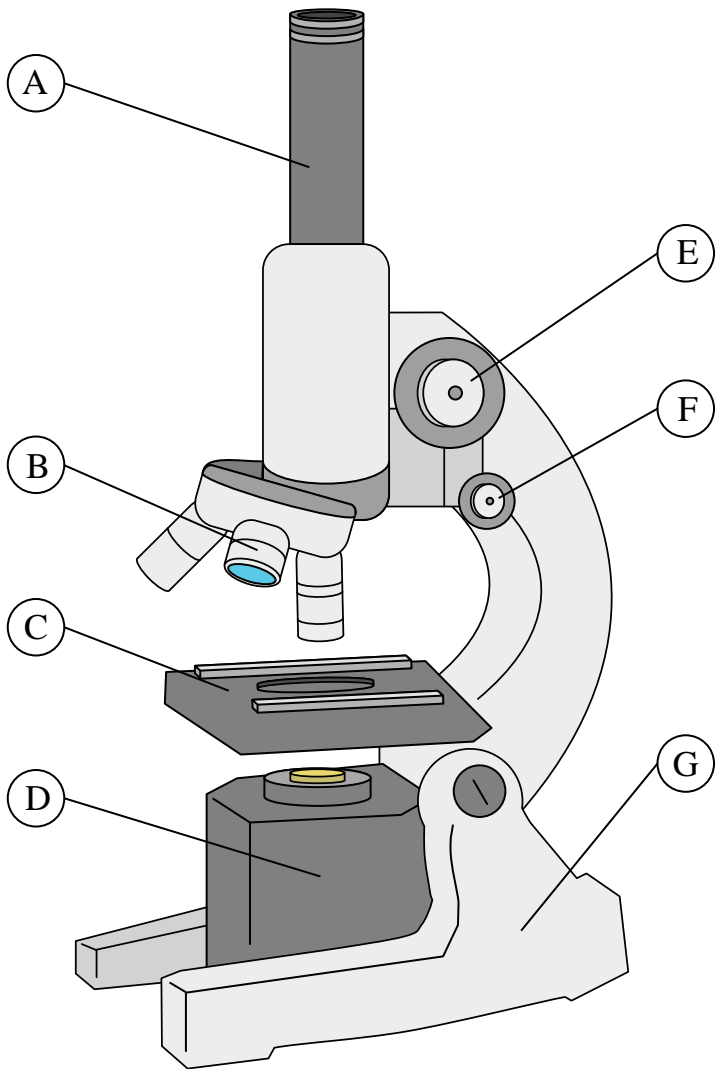
- 1) stage           C
- 2) lens           B
- 3) fine knob           F
- 4) base           G
- 5) course knob           E
- 6) eye piece           A
- 7) illuminator           D

Answers

- 1.           C
- 2.           B
- 3.           F
- 4.           G
- 5.           E
- 6.           A
- 7.           D



Solve each problem.



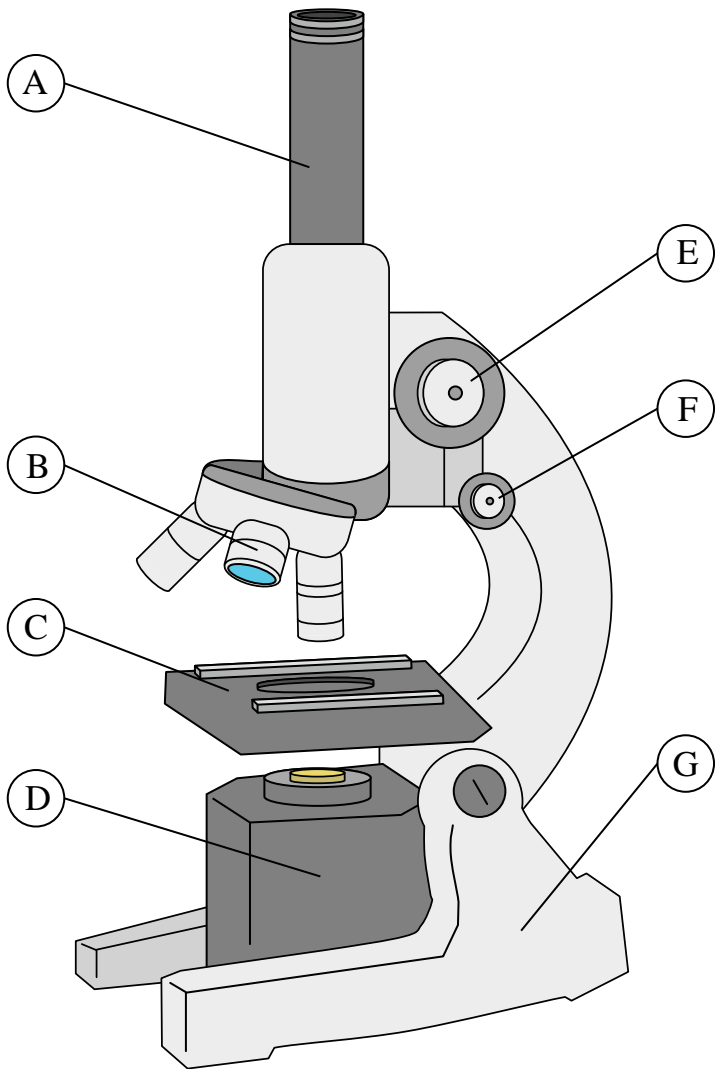
- 1) eye piece \_\_\_\_\_
- 2) stage \_\_\_\_\_
- 3) course knob \_\_\_\_\_
- 4) lens \_\_\_\_\_
- 5) fine knob \_\_\_\_\_
- 6) illuminator \_\_\_\_\_
- 7) base \_\_\_\_\_

Answers

- 1. \_\_\_\_\_
- 2. \_\_\_\_\_
- 3. \_\_\_\_\_
- 4. \_\_\_\_\_
- 5. \_\_\_\_\_
- 6. \_\_\_\_\_
- 7. \_\_\_\_\_



Solve each problem.



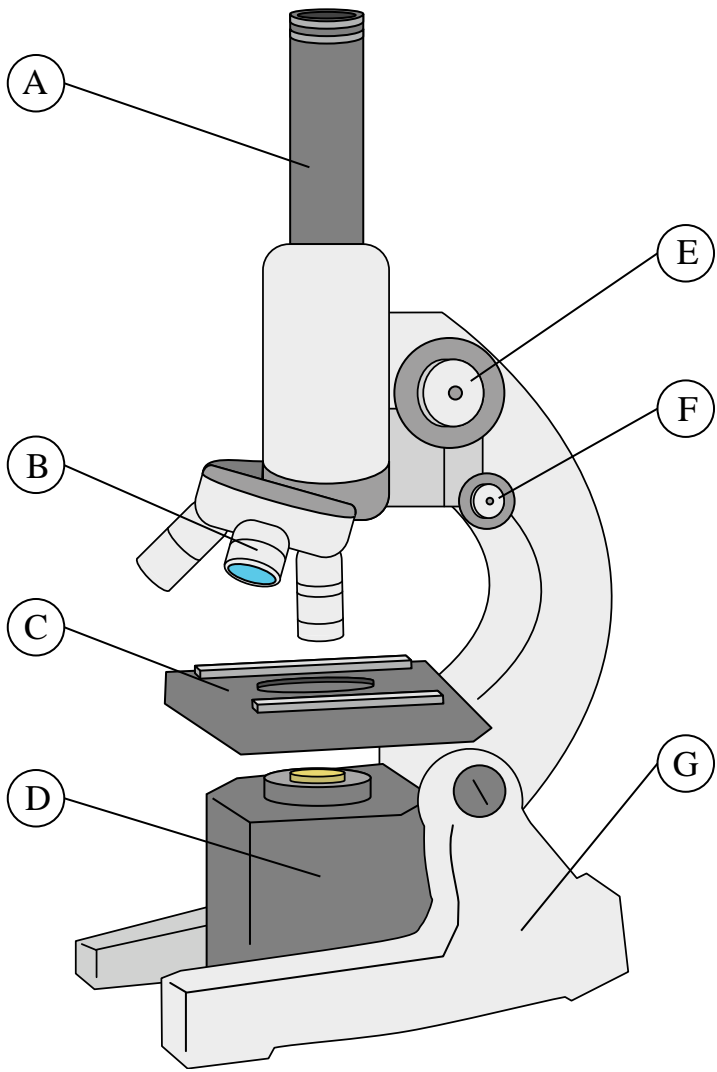
- 1) eye piece          **A**
- 2) stage              **C**
- 3) course knob        **E**
- 4) lens                **B**
- 5) fine knob          **F**
- 6) illuminator         **D**
- 7) base                **G**

Answers

- 1.     **A**
- 2.     **C**
- 3.     **E**
- 4.     **B**
- 5.     **F**
- 6.     **D**
- 7.     **G**



Solve each problem.



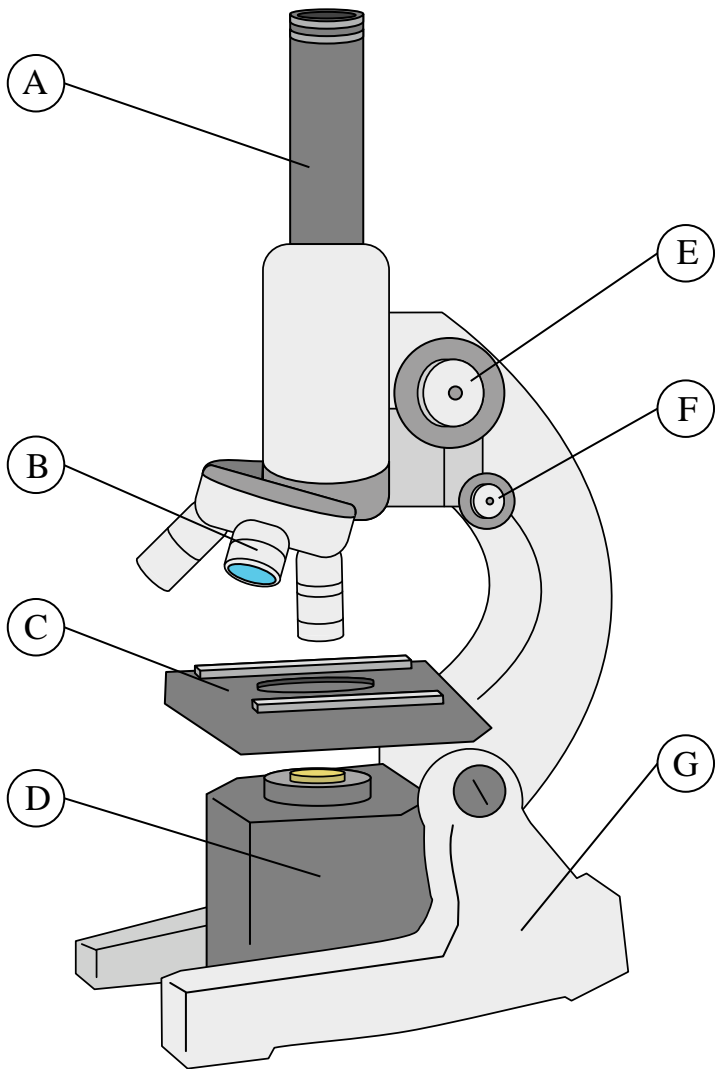
- 1) fine knob \_\_\_\_\_
- 2) course knob \_\_\_\_\_
- 3) stage \_\_\_\_\_
- 4) base \_\_\_\_\_
- 5) eye piece \_\_\_\_\_
- 6) illuminator \_\_\_\_\_
- 7) lens \_\_\_\_\_

**Answers**

- 1. \_\_\_\_\_
- 2. \_\_\_\_\_
- 3. \_\_\_\_\_
- 4. \_\_\_\_\_
- 5. \_\_\_\_\_
- 6. \_\_\_\_\_
- 7. \_\_\_\_\_



Solve each problem.



- 1) fine knob     F
- 2) course knob     E
- 3) stage     C
- 4) base     G
- 5) eye piece     A
- 6) illuminator     D
- 7) lens     B

Answers

- 1.     F
- 2.     E
- 3.     C
- 4.     G
- 5.     A
- 6.     D
- 7.     B





Solve each problem.



- 1) illuminator \_\_\_\_\_
- 2) lens \_\_\_\_\_
- 3) fine knob \_\_\_\_\_
- 4) course knob \_\_\_\_\_
- 5) eye piece \_\_\_\_\_
- 6) base \_\_\_\_\_
- 7) stage \_\_\_\_\_

Answers

- 1. \_\_\_\_\_
- 2. \_\_\_\_\_
- 3. \_\_\_\_\_
- 4. \_\_\_\_\_
- 5. \_\_\_\_\_
- 6. \_\_\_\_\_
- 7. \_\_\_\_\_



Solve each problem.



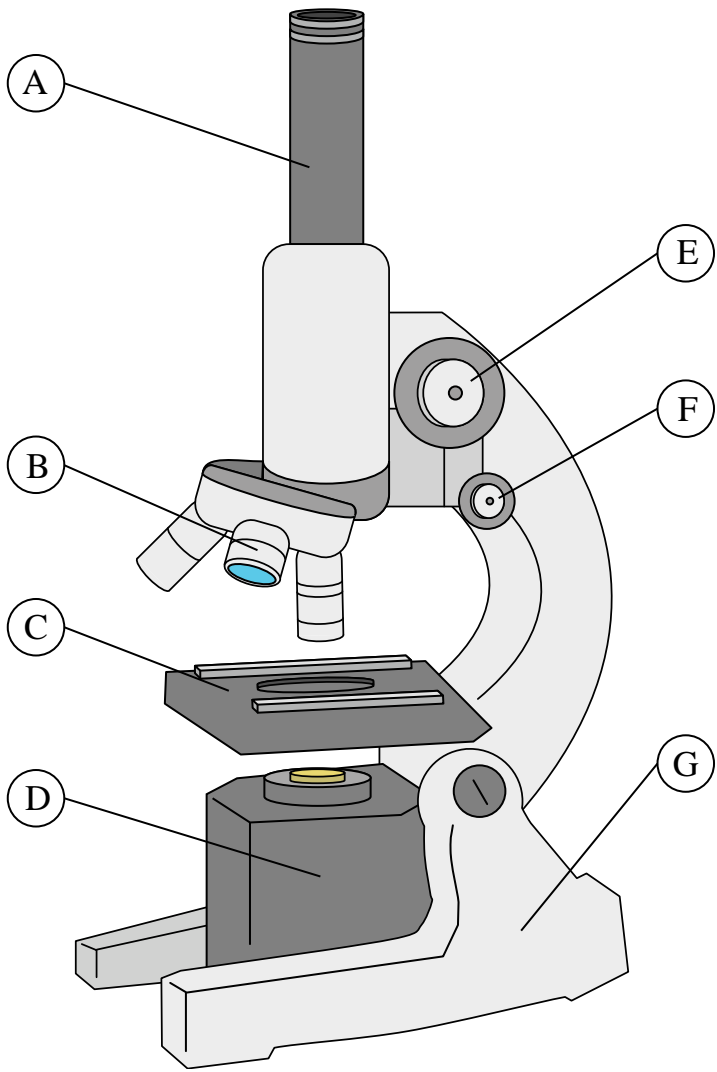
- 1) illuminator     D
- 2) lens     B
- 3) fine knob     F
- 4) course knob     E
- 5) eye piece     A
- 6) base     G
- 7) stage     C

Answers

- 1.     D
- 2.     B
- 3.     F
- 4.     E
- 5.     A
- 6.     G
- 7.     C



Solve each problem.



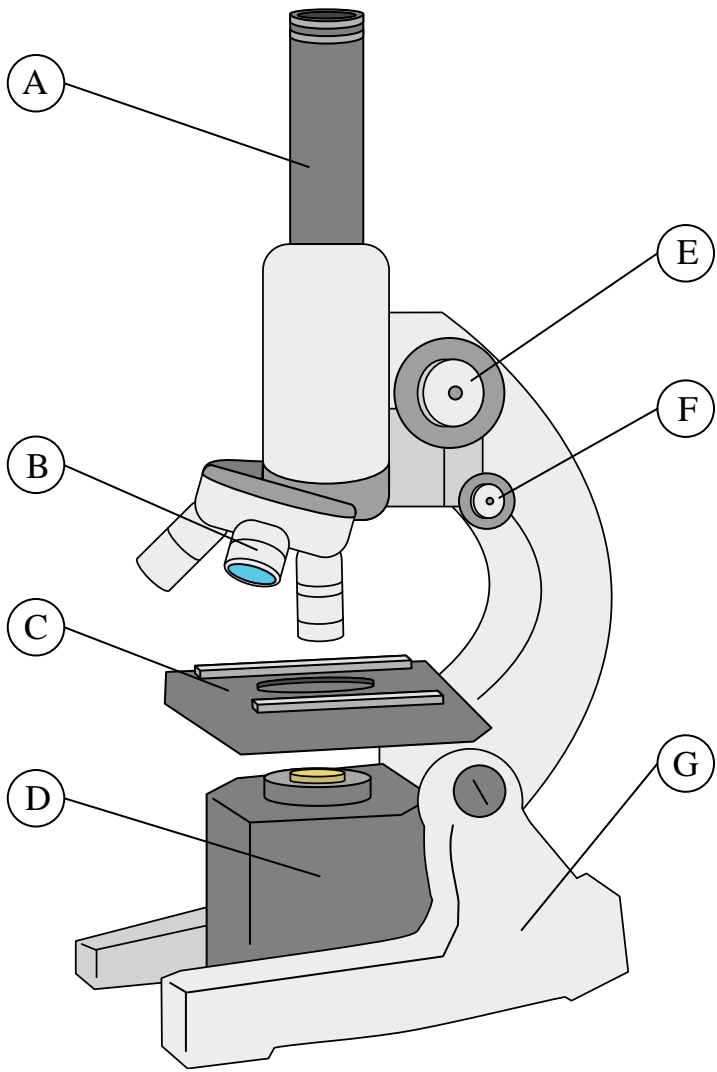
- 1) eye piece \_\_\_\_\_
- 2) lens \_\_\_\_\_
- 3) fine knob \_\_\_\_\_
- 4) stage \_\_\_\_\_
- 5) illuminator \_\_\_\_\_
- 6) base \_\_\_\_\_
- 7) course knob \_\_\_\_\_

Answers

- 1. \_\_\_\_\_
- 2. \_\_\_\_\_
- 3. \_\_\_\_\_
- 4. \_\_\_\_\_
- 5. \_\_\_\_\_
- 6. \_\_\_\_\_
- 7. \_\_\_\_\_



Solve each problem.



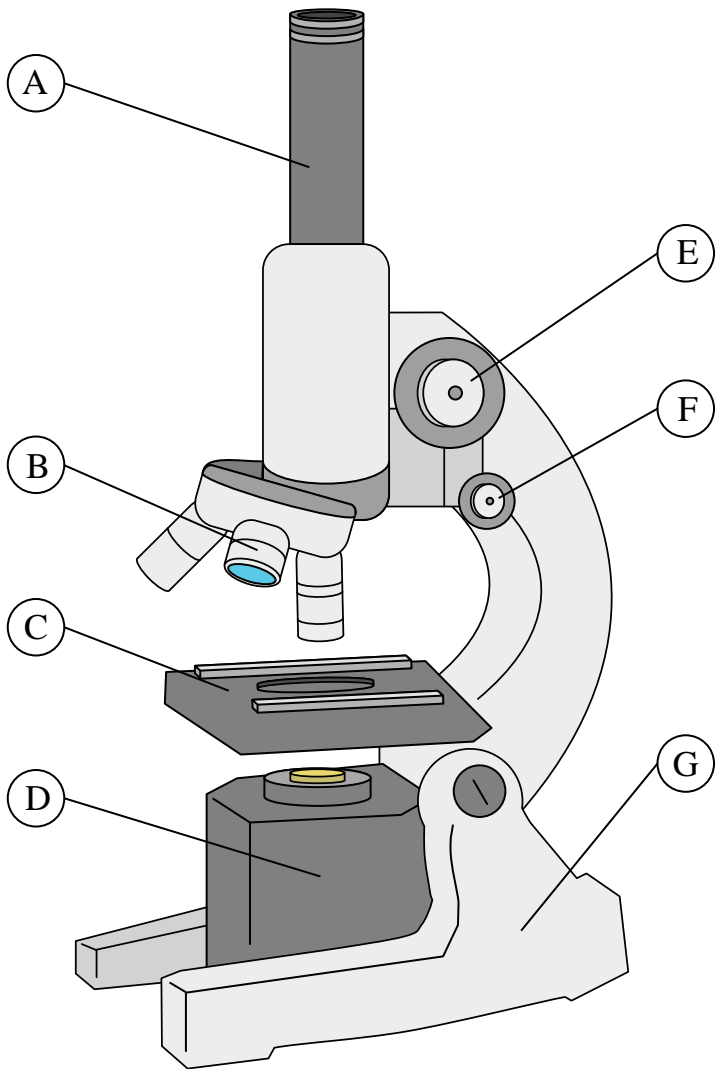
- 1) eye piece          A
- 2) lens                B
- 3) fine knob          F
- 4) stage               C
- 5) illuminator         D
- 6) base                G
- 7) course knob        E

Answers

- 1.     **A**
- 2.     **B**
- 3.     **F**
- 4.     **C**
- 5.     **D**
- 6.     **G**
- 7.     **E**



Solve each problem.



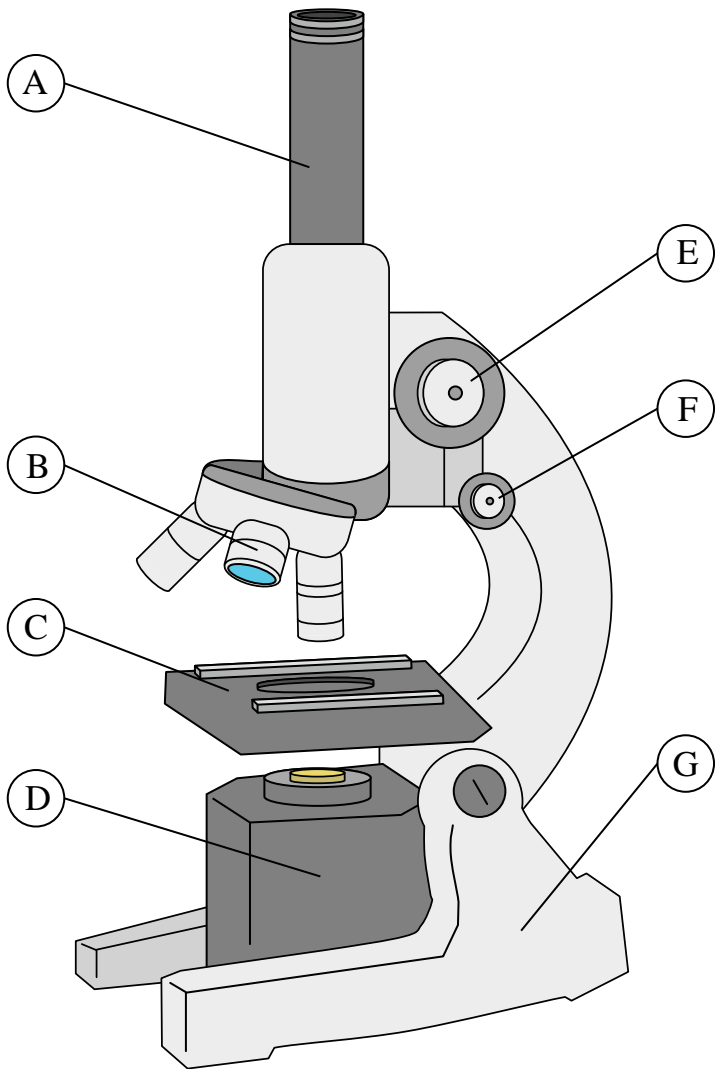
- 1) fine knob \_\_\_\_\_
- 2) eye piece \_\_\_\_\_
- 3) lens \_\_\_\_\_
- 4) illuminator \_\_\_\_\_
- 5) course knob \_\_\_\_\_
- 6) stage \_\_\_\_\_
- 7) base \_\_\_\_\_

Answers

- 1. \_\_\_\_\_
- 2. \_\_\_\_\_
- 3. \_\_\_\_\_
- 4. \_\_\_\_\_
- 5. \_\_\_\_\_
- 6. \_\_\_\_\_
- 7. \_\_\_\_\_



Solve each problem.



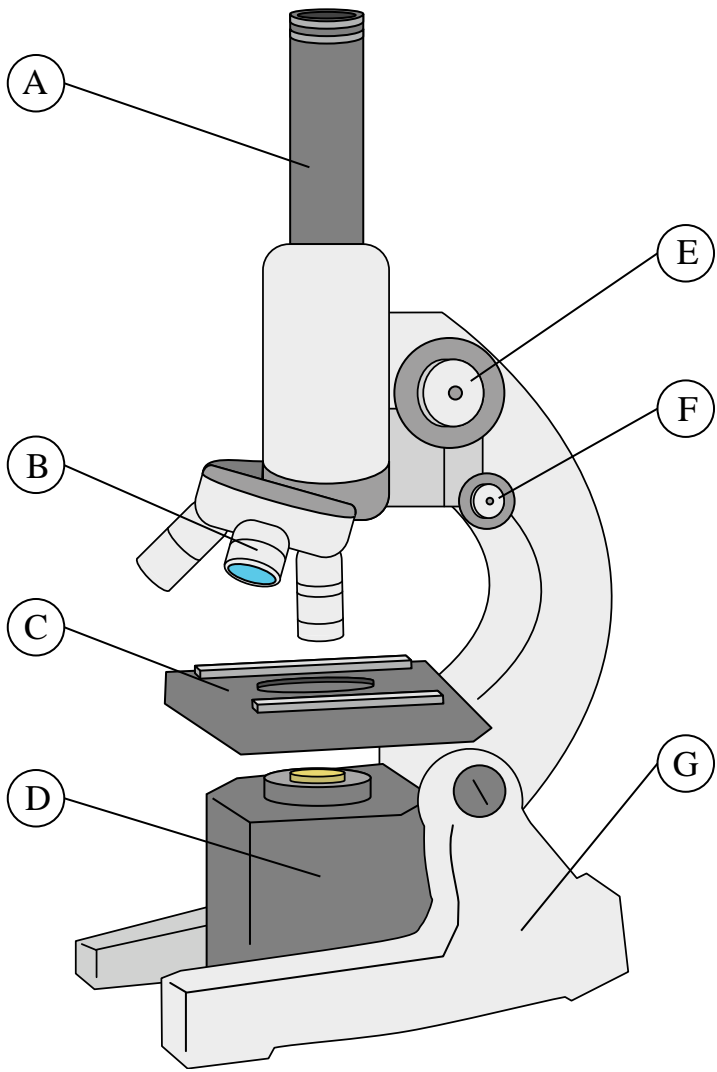
- 1) fine knob     **F**
- 2) eye piece     **A**
- 3) lens     **B**
- 4) illuminator     **D**
- 5) course knob     **E**
- 6) stage     **C**
- 7) base     **G**

Answers

- 1.     **F**
- 2.     **A**
- 3.     **B**
- 4.     **D**
- 5.     **E**
- 6.     **C**
- 7.     **G**



Solve each problem.



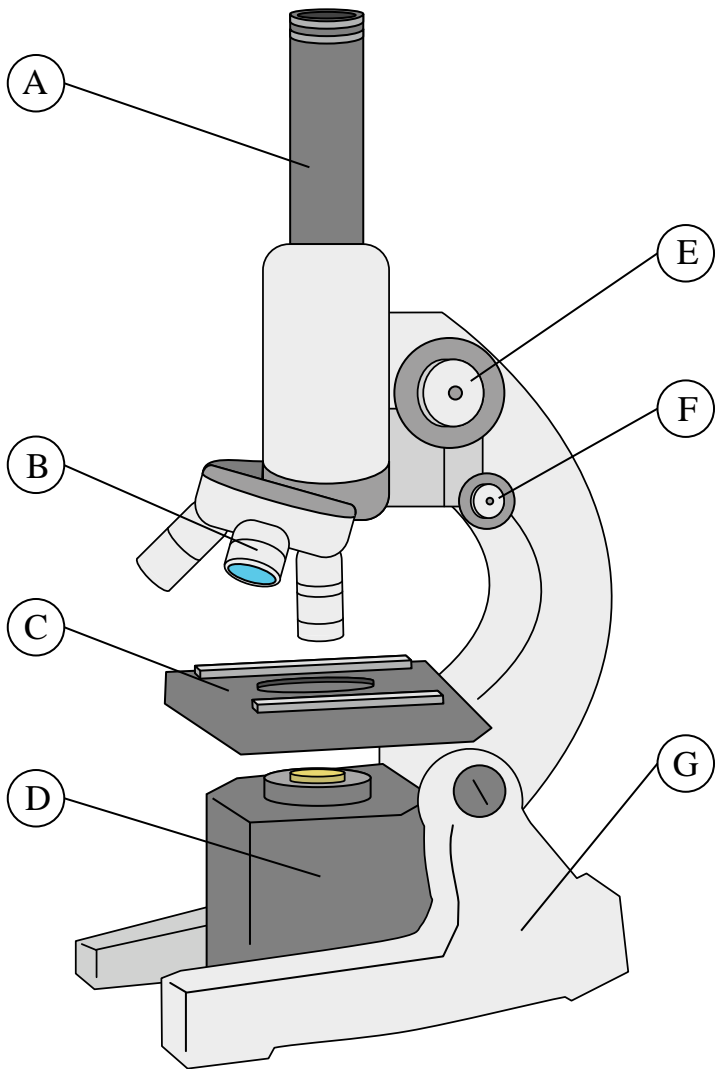
- 1) illuminator \_\_\_\_\_
- 2) lens \_\_\_\_\_
- 3) fine knob \_\_\_\_\_
- 4) eye piece \_\_\_\_\_
- 5) course knob \_\_\_\_\_
- 6) base \_\_\_\_\_
- 7) stage \_\_\_\_\_

Answers

- 1. \_\_\_\_\_
- 2. \_\_\_\_\_
- 3. \_\_\_\_\_
- 4. \_\_\_\_\_
- 5. \_\_\_\_\_
- 6. \_\_\_\_\_
- 7. \_\_\_\_\_



Solve each problem.



- 1) illuminator     D
- 2) lens     B
- 3) fine knob     F
- 4) eye piece     A
- 5) course knob     E
- 6) base     G
- 7) stage     C

Answers

- 1.     D
- 2.     B
- 3.     F
- 4.     A
- 5.     E
- 6.     G
- 7.     C





Solve each problem.



- 1) stage \_\_\_\_\_
- 2) eye piece \_\_\_\_\_
- 3) fine knob \_\_\_\_\_
- 4) base \_\_\_\_\_
- 5) lens \_\_\_\_\_
- 6) illuminator \_\_\_\_\_
- 7) course knob \_\_\_\_\_

Answers

- 1. \_\_\_\_\_
- 2. \_\_\_\_\_
- 3. \_\_\_\_\_
- 4. \_\_\_\_\_
- 5. \_\_\_\_\_
- 6. \_\_\_\_\_
- 7. \_\_\_\_\_



Solve each problem.



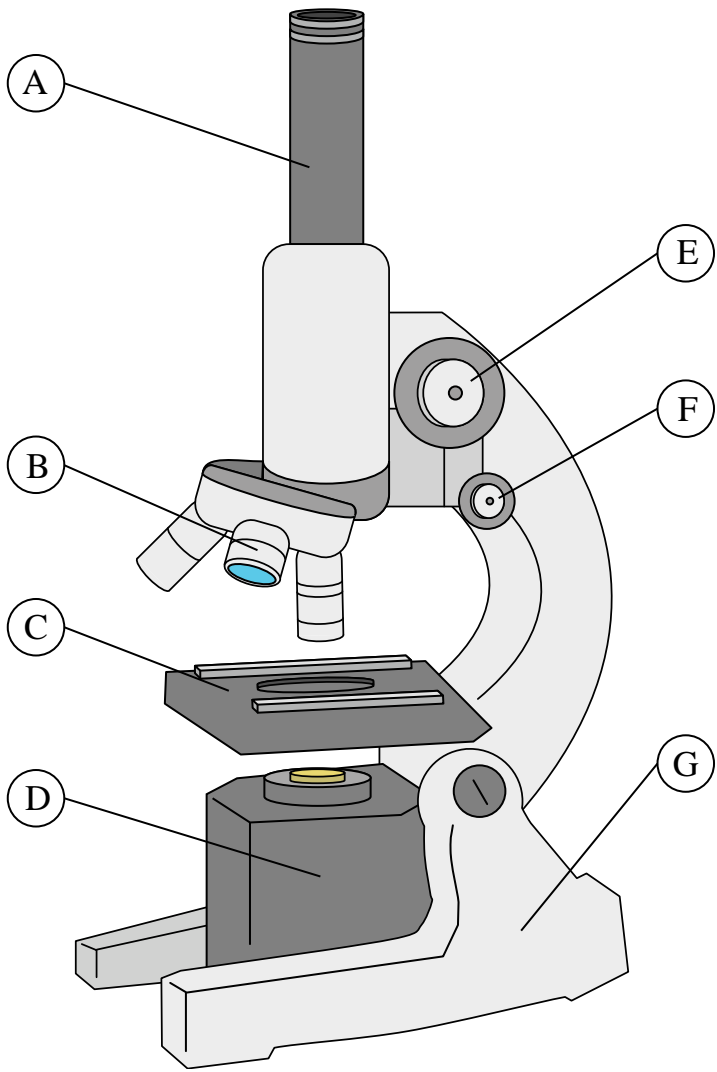
- 1) stage           C
- 2) eye piece           A
- 3) fine knob           F
- 4) base           G
- 5) lens           B
- 6) illuminator           D
- 7) course knob           E

Answers

- 1.           C
- 2.           A
- 3.           F
- 4.           G
- 5.           B
- 6.           D
- 7.           E



Solve each problem.



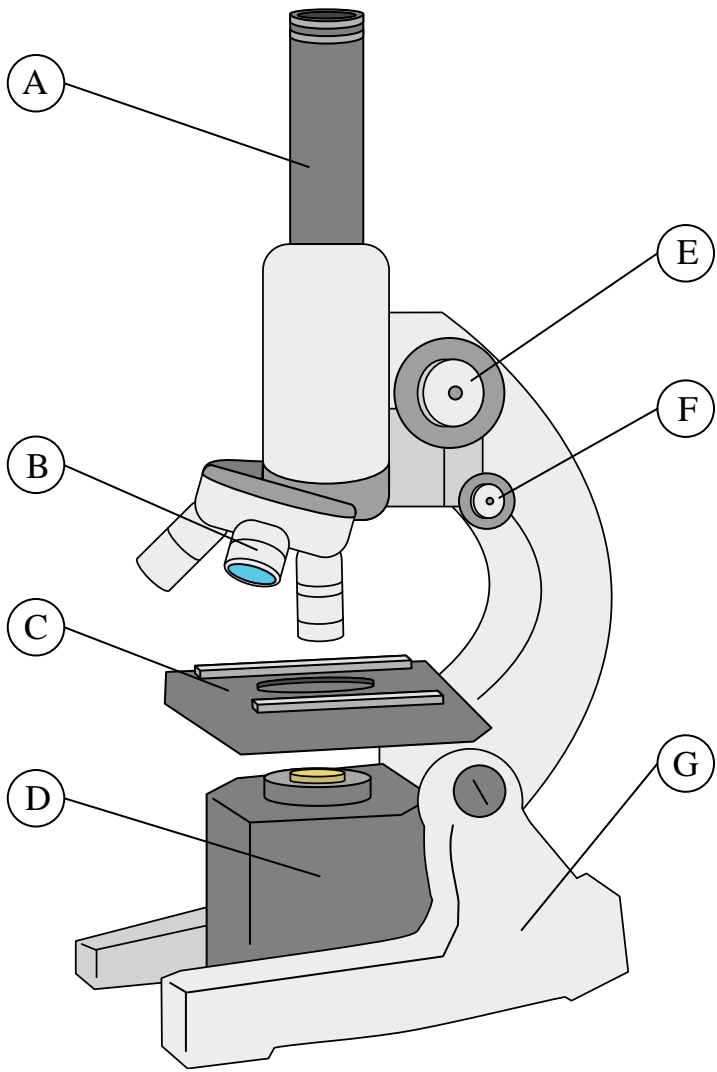
- 1) lens \_\_\_\_\_
- 2) stage \_\_\_\_\_
- 3) fine knob \_\_\_\_\_
- 4) base \_\_\_\_\_
- 5) eye piece \_\_\_\_\_
- 6) course knob \_\_\_\_\_
- 7) illuminator \_\_\_\_\_

Answers

- 1. \_\_\_\_\_
- 2. \_\_\_\_\_
- 3. \_\_\_\_\_
- 4. \_\_\_\_\_
- 5. \_\_\_\_\_
- 6. \_\_\_\_\_
- 7. \_\_\_\_\_



Solve each problem.



- 1) lens           B
- 2) stage           C
- 3) fine knob           F
- 4) base           G
- 5) eye piece           A
- 6) course knob           E
- 7) illuminator           D

Answers

- 1.           B
- 2.           C
- 3.           F
- 4.           G
- 5.           A
- 6.           E
- 7.           D