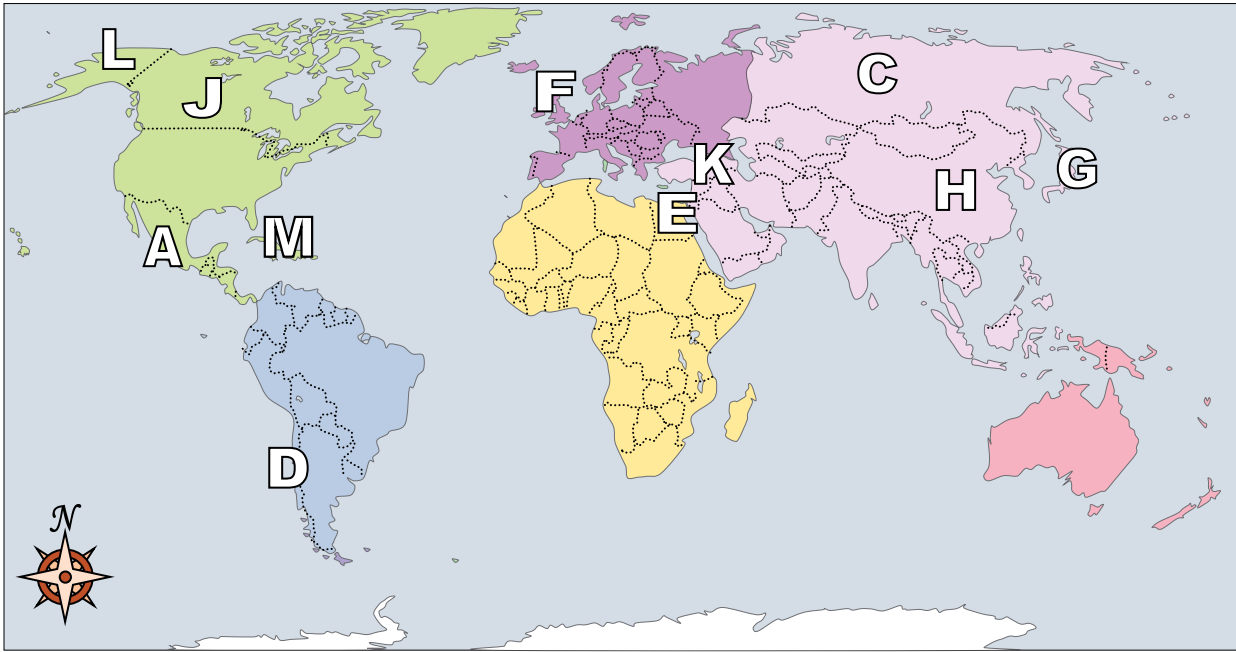




Using the map below, determine which letter represents each location.



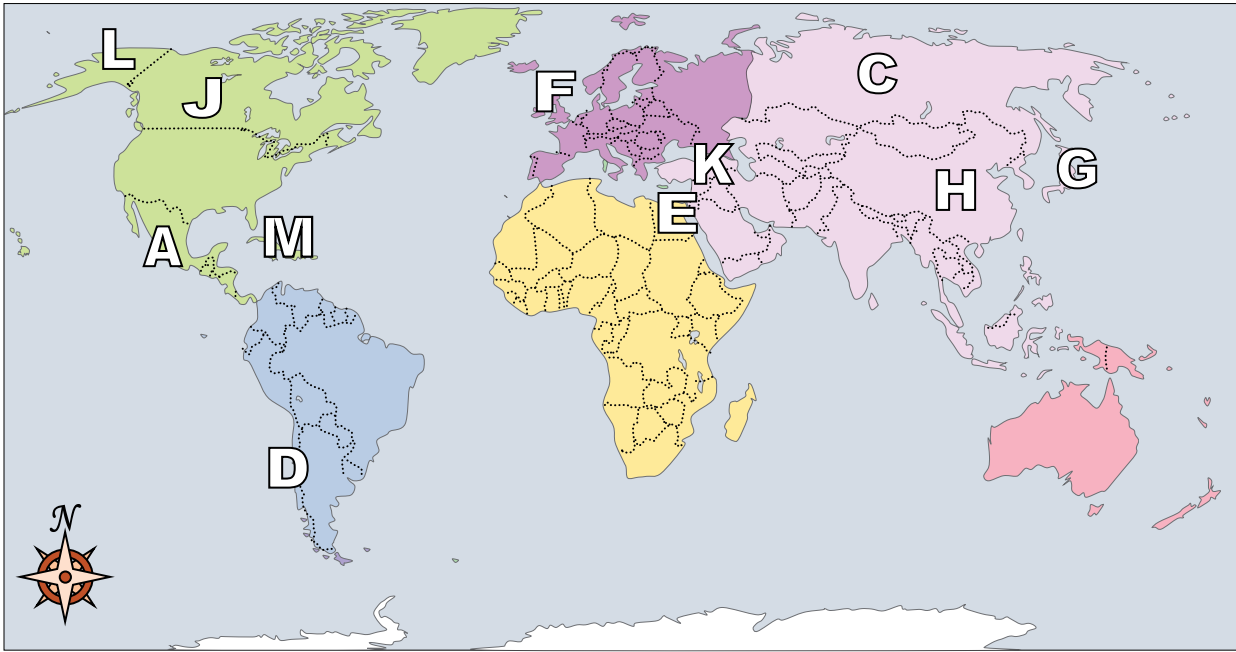
Answers

1. _____
2. _____
3. _____
4. _____
5. _____
6. _____
7. _____
8. _____
9. _____
10. _____
11. _____
12. _____
13. _____
14. _____
15. _____
16. _____
17. _____

- 1) Iraq _____
- 2) Canada _____
- 3) Mexico _____
- 4) Chile _____
- 5) Russia _____
- 6) Egypt _____
- 7) Alaska (State) _____
- 8) Cuba _____
- 9) United Kingdom _____
- 10) Japan _____
- 11) Britain _____
- 12) China _____
- 13) Which country is the largest in Asia?
A. Russia B. Canada C. China D. Egypt
- 14) If you wanted to see pyramids where should you go?
A. Egypt B. Mexico C. Japan D. France
- 15) Which country touches the USA's northern border?
A. China B. Japan C. Canada D. Mexico
- 16) Which country attacked the United State's base at Pearl Harbor during World War 2?
A. Britain B. Japan C. France D. Egypt
- 17) The state of Alaska is touching which country?
A. Russia B. China C. Canada D. Egypt



Using the map below, determine which letter represents each location.



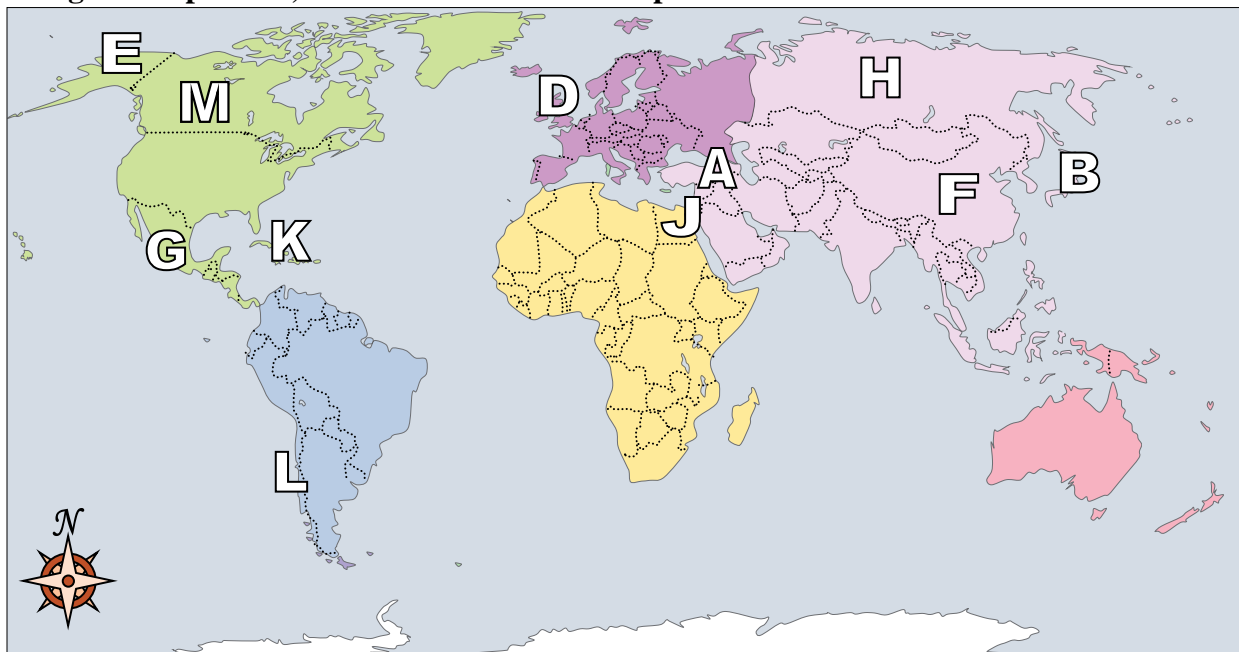
Answers

- 1) Iraq K
- 2) Canada J
- 3) Mexico A
- 4) Chile D
- 5) Russia C
- 6) Egypt E
- 7) Alaska (State) L
- 8) Cuba M
- 9) United Kingdom F
- 10) Japan G
- 11) Britain B
- 12) China H
- 13) Which country is the largest in Asia?
A. Russia B. Canada C. China D. Egypt
- 14) If you wanted to see pyramids where should you go?
A. Egypt B. Mexico C. Japan D. France
- 15) Which country touches the USA's northern border?
A. China B. Japan C. Canada D. Mexico
- 16) Which country attacked the United State's base at Pearl Harbor during World War 2?
A. Britain B. Japan C. France D. Egypt
- 17) The state of Alaska is touching which country?
A. Russia B. China C. Canada D. Egypt

- 1. K
- 2. J
- 3. A
- 4. D
- 5. C
- 6. E
- 7. L
- 8. M
- 9. F
- 10. G
- 11. B
- 12. H
- 13. A
- 14. A
- 15. C
- 16. B
- 17. C



Using the map below, determine which letter represents each location.



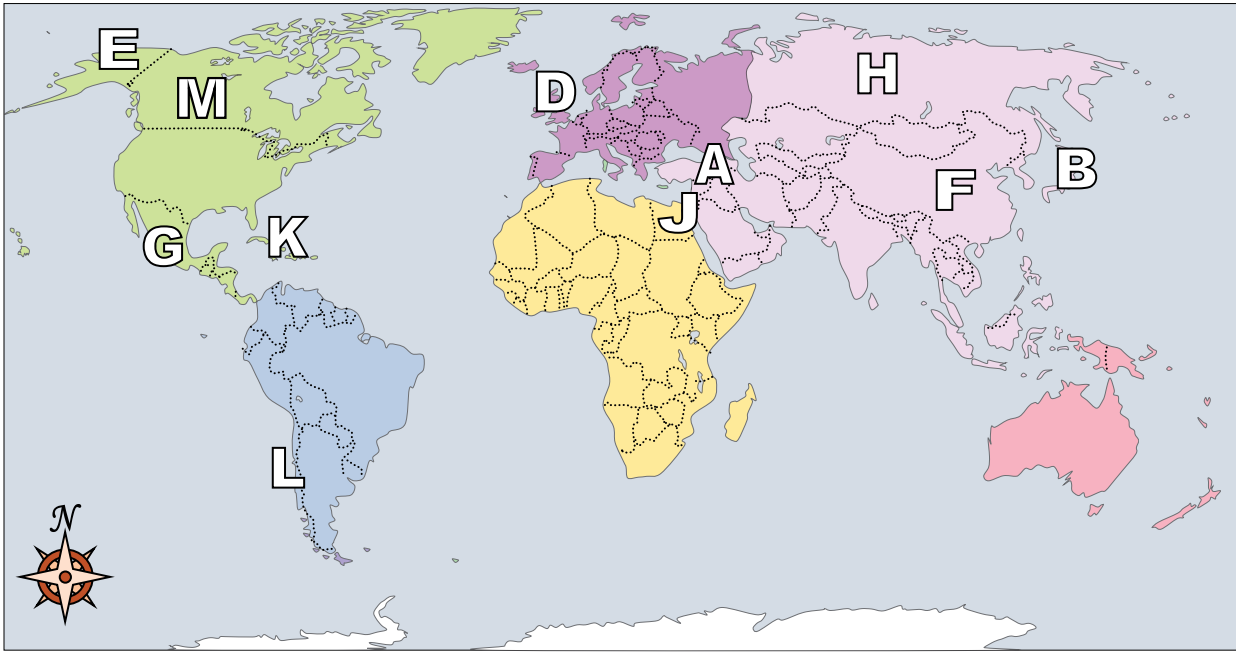
Answers

1. _____
2. _____
3. _____
4. _____
5. _____
6. _____
7. _____
8. _____
9. _____
10. _____
11. _____
12. _____
13. _____
14. _____
15. _____
16. _____
17. _____

- 1) China _____
- 2) United Kingdom _____
- 3) Cuba _____
- 4) Britain _____
- 5) Russia _____
- 6) Iraq _____
- 7) Mexico _____
- 8) Canada _____
- 9) Chile _____
- 10) Japan _____
- 11) Alaska (State) _____
- 12) Egypt _____
- 13) Which country is the largest in Asia?
 A. Russia B. Britain C. France D. Canada
- 14) Which country touches the USA's northern border?
 A. Japan B. Canada C. Mexico D. Britain
- 15) If you wanted to see pyramids where should you go?
 A. Egypt B. France C. Canada D. Mexico
- 16) Which country attacked the United State's base at Pearl Harbor during World War 2?
 A. Japan B. Canada C. Mexico D. Egypt
- 17) Which country is closest to the state of Florida?
 A. Cuba B. Mexico C. Britain D. Egypt



Using the map below, determine which letter represents each location.



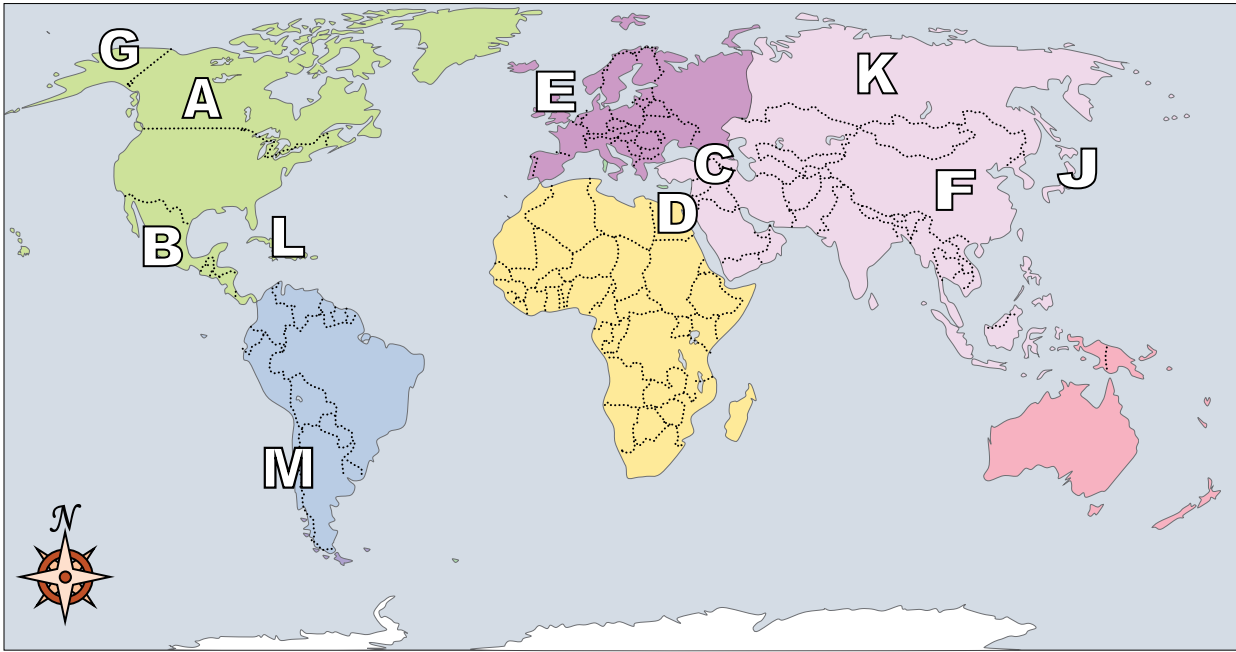
Answers

- 1) China F
- 2) United Kingdom D
- 3) Cuba K
- 4) Britain C
- 5) Russia H
- 6) Iraq A
- 7) Mexico G
- 8) Canada M
- 9) Chile L
- 10) Japan B
- 11) Alaska (State) E
- 12) Egypt J
- 13) Which country is the largest in Asia?
A. Russia B. Britain C. France D. Canada
- 14) Which country touches the USA's northern border?
A. Japan B. Canada C. Mexico D. Britain
- 15) If you wanted to see pyramids where should you go?
A. Egypt B. France C. Canada D. Mexico
- 16) Which country attacked the United State's base at Pearl Harbor during World War 2?
A. Japan B. Canada C. Mexico D. Egypt
- 17) Which country is closest to the state of Florida?
A. Cuba B. Mexico C. Britain D. Egypt

- 1. F
- 2. D
- 3. K
- 4. C
- 5. H
- 6. A
- 7. G
- 8. M
- 9. L
- 10. B
- 11. E
- 12. J
- 13. A
- 14. B
- 15. A
- 16. A
- 17. A



Using the map below, determine which letter represents each location.



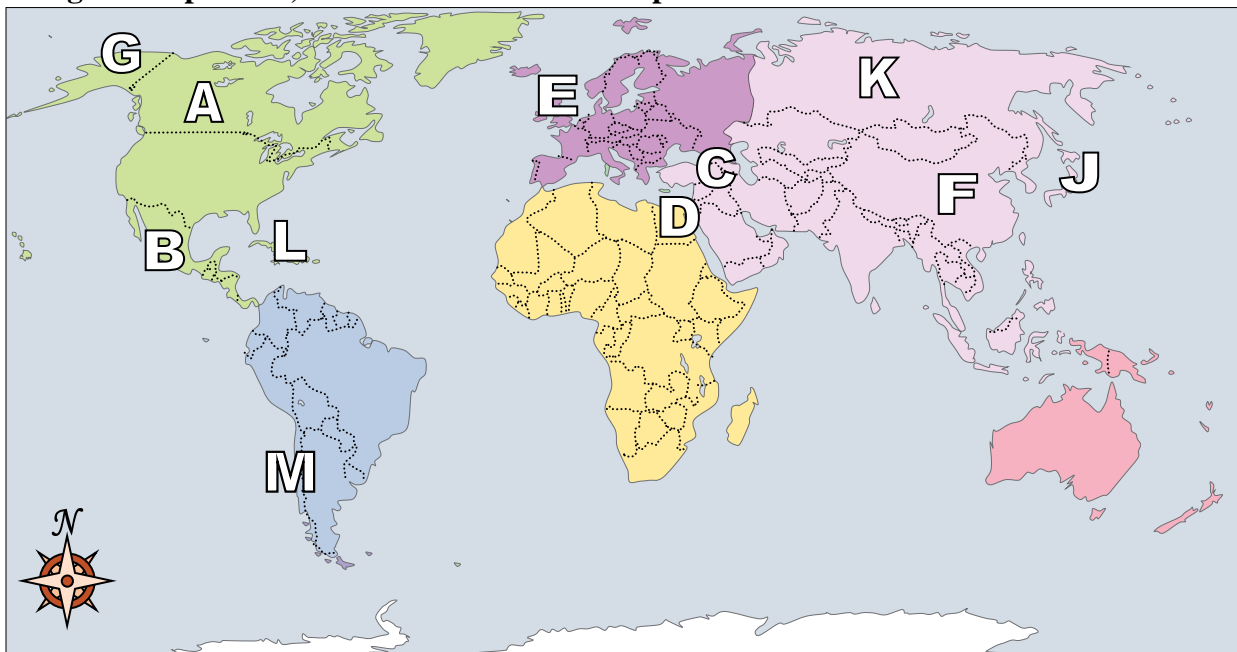
Answers

1. _____
2. _____
3. _____
4. _____
5. _____
6. _____
7. _____
8. _____
9. _____
10. _____
11. _____
12. _____
13. _____
14. _____
15. _____
16. _____
17. _____

- 1) Russia _____
- 2) Japan _____
- 3) Alaska (State) _____
- 4) Chile _____
- 5) China _____
- 6) Britain _____
- 7) Iraq _____
- 8) Canada _____
- 9) Egypt _____
- 10) Mexico _____
- 11) Cuba _____
- 12) United Kingdom _____
- 13) Alaska is _____ of the rest of the United States?
A. east B. west C. south D. north
- 14) Which country touches the USA's southern border?
A. Mexico B. Britain C. Canada D. Egypt
- 15) Which is not part of North America?
A. Japan B. The United States C. Alaska D. Mexico
- 16) Which country is closest to the state of Florida?
A. Egypt B. Cuba C. Japan D. Mexico
- 17) The state of Alaska is touching which country?
A. Canada B. France C. Britain D. China



Using the map below, determine which letter represents each location.



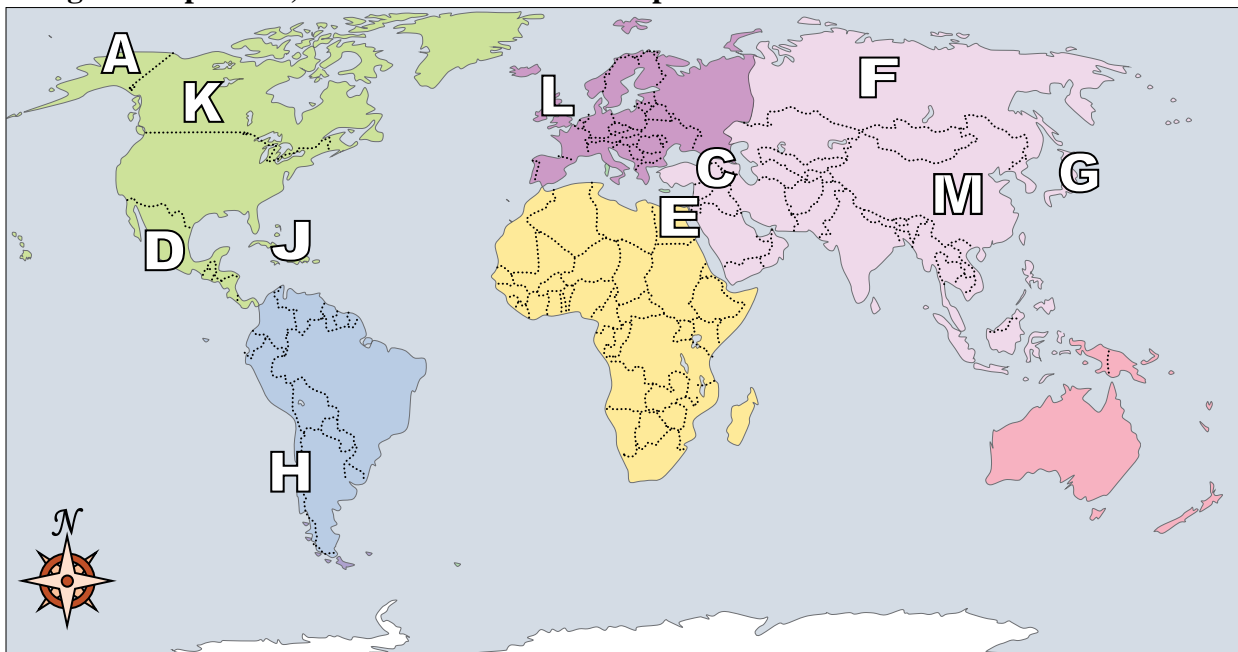
Answers

- 1) Russia K
- 2) Japan J
- 3) Alaska (State) G
- 4) Chile M
- 5) China F
- 6) Britain H
- 7) Iraq C
- 8) Canada A
- 9) Egypt D
- 10) Mexico B
- 11) Cuba L
- 12) United Kingdom E
- 13) Alaska is _____ of the rest of the United States?
A. east B. west C. south D. north
- 14) Which country touches the USA's southern border?
A. Mexico B. Britain C. Canada D. Egypt
- 15) Which is not part of North America?
A. Japan B. The United States C. Alaska D. Mexico
- 16) Which country is closest to the state of Florida?
A. Egypt B. Cuba C. Japan D. Mexico
- 17) The state of Alaska is touching which country?
A. Canada B. France C. Britain D. China

- 1. K
- 2. J
- 3. G
- 4. M
- 5. F
- 6. H
- 7. C
- 8. A
- 9. D
- 10. B
- 11. L
- 12. E
- 13. D
- 14. A
- 15. A
- 16. B
- 17. A



Using the map below, determine which letter represents each location.



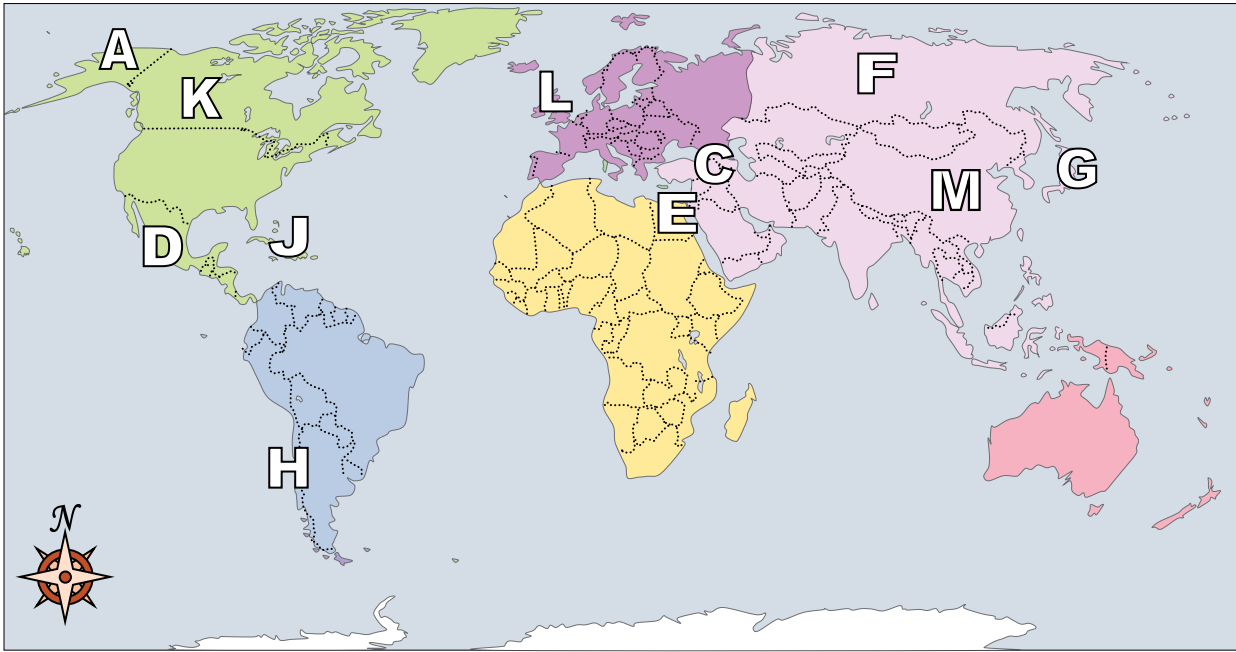
Answers

1. _____
2. _____
3. _____
4. _____
5. _____
6. _____
7. _____
8. _____
9. _____
10. _____
11. _____
12. _____
13. _____
14. _____
15. _____
16. _____
17. _____

- 1) Japan _____
- 2) Iraq _____
- 3) Chile _____
- 4) Alaska (State) _____
- 5) Mexico _____
- 6) Canada _____
- 7) Egypt _____
- 8) Britain _____
- 9) Russia _____
- 10) China _____
- 11) United Kingdom _____
- 12) Cuba _____
- 13) Alaska is _____ of the rest of the United States?
A. south B. west C. north D. east
- 14) Which country touches the USA's northern border?
A. Japan B. Mexico C. France D. Canada
- 15) If you wanted to see pyramids where should you go?
A. China B. Mexico C. Egypt D. France
- 16) The state of Alaska is touching which country?
A. Russia B. Canada C. Japan D. Britain
- 17) Which country is the largest in Asia?
A. Egypt B. Russia C. Mexico D. Britain



Using the map below, determine which letter represents each location.



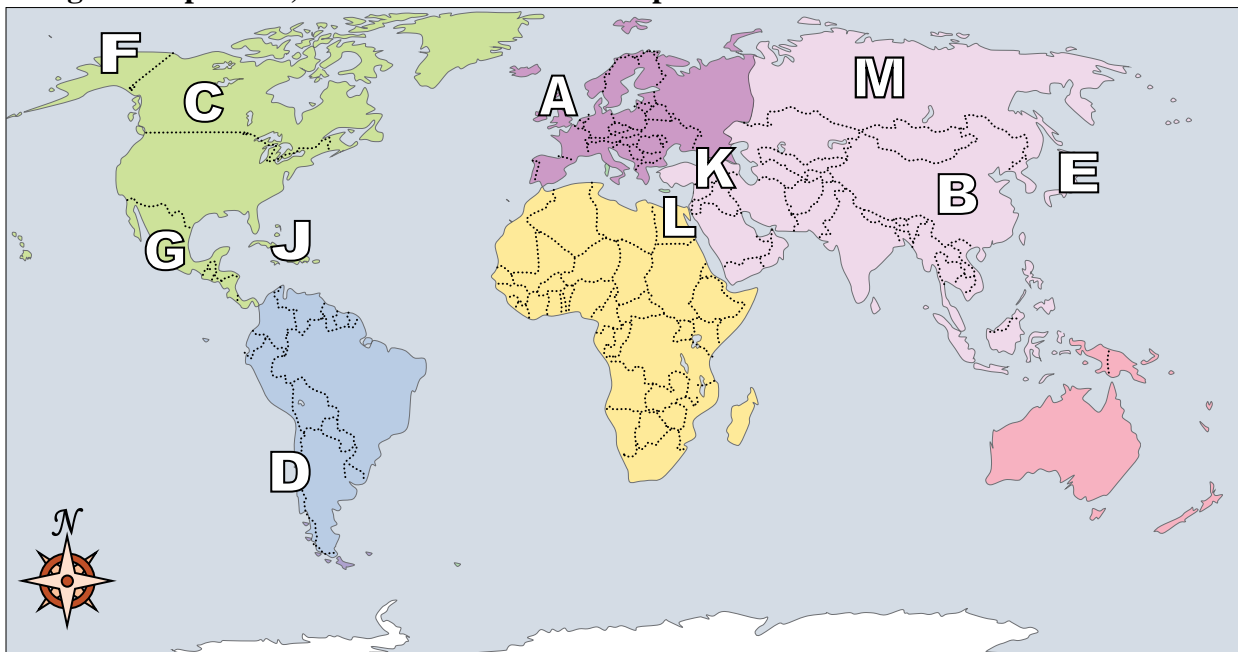
Answers

- 1. **G**
- 2. **C**
- 3. **H**
- 4. **A**
- 5. **D**
- 6. **K**
- 7. **E**
- 8. **B**
- 9. **F**
- 10. **M**
- 11. **L**
- 12. **J**
- 13. **C**
- 14. **D**
- 15. **C**
- 16. **B**
- 17. **B**

- 1) Japan **G**
- 2) Iraq **C**
- 3) Chile **H**
- 4) Alaska (State) **A**
- 5) Mexico **D**
- 6) Canada **K**
- 7) Egypt **E**
- 8) Britain **B**
- 9) Russia **F**
- 10) China **M**
- 11) United Kingdom **L**
- 12) Cuba **J**
- 13) Alaska is _____ of the rest of the United States?
A. south B. west C. north D. east
- 14) Which country touches the USA's northern border?
A. Japan B. Mexico C. France D. Canada
- 15) If you wanted to see pyramids where should you go?
A. China B. Mexico C. Egypt D. France
- 16) The state of Alaska is touching which country?
A. Russia B. Canada C. Japan D. Britain
- 17) Which country is the largest in Asia?
A. Egypt B. Russia C. Mexico D. Britain



Using the map below, determine which letter represents each location.



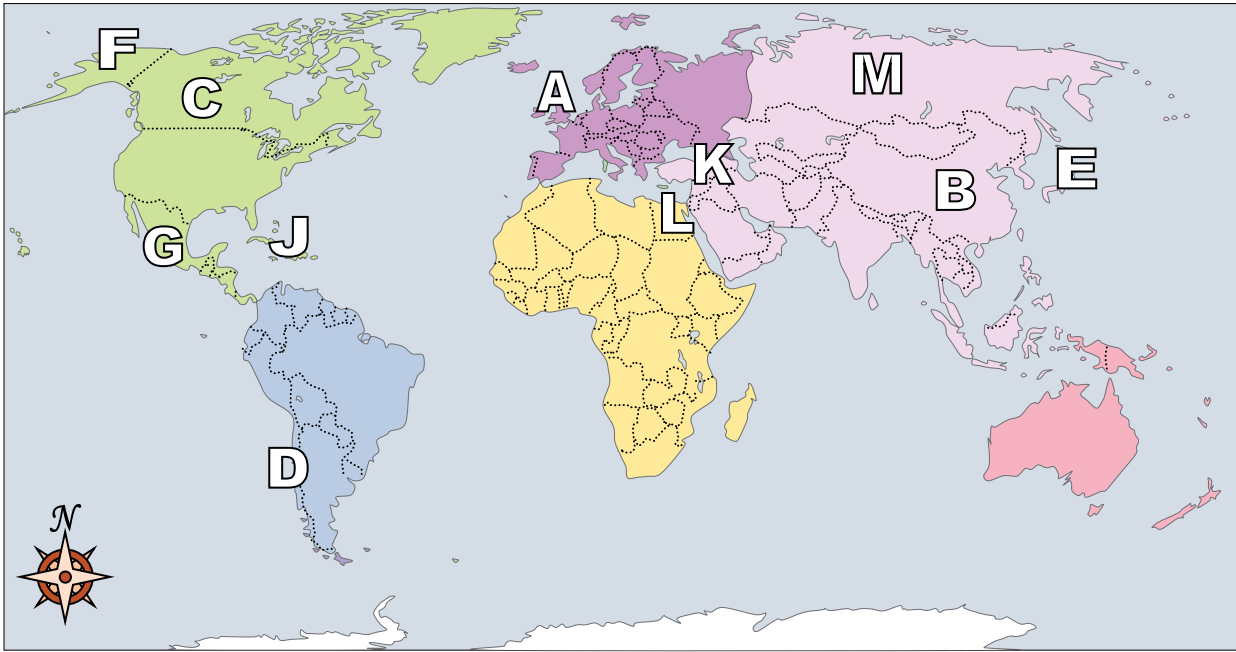
Answers

1. _____
2. _____
3. _____
4. _____
5. _____
6. _____
7. _____
8. _____
9. _____
10. _____
11. _____
12. _____
13. _____
14. _____
15. _____
16. _____
17. _____

- 1) Britain _____
- 2) Russia _____
- 3) Egypt _____
- 4) Mexico _____
- 5) Alaska (State) _____
- 6) Iraq _____
- 7) Chile _____
- 8) China _____
- 9) Cuba _____
- 10) Japan _____
- 11) United Kingdom _____
- 12) Canada _____
- 13) Which country touches the USA's northern border?
A. Mexico B. France C. Egypt D. Canada
- 14) Which country is closest to the state of Florida?
A. Japan B. Russia C. Cuba D. Mexico
- 15) The state of Alaska is touching which country?
A. Egypt B. Russia C. Canada D. France
- 16) If you wanted to see pyramids where should you go?
A. Britain B. China C. Egypt D. Mexico
- 17) Which country is the largest in Asia?
A. Egypt B. Russia C. France D. Britain



Using the map below, determine which letter represents each location.



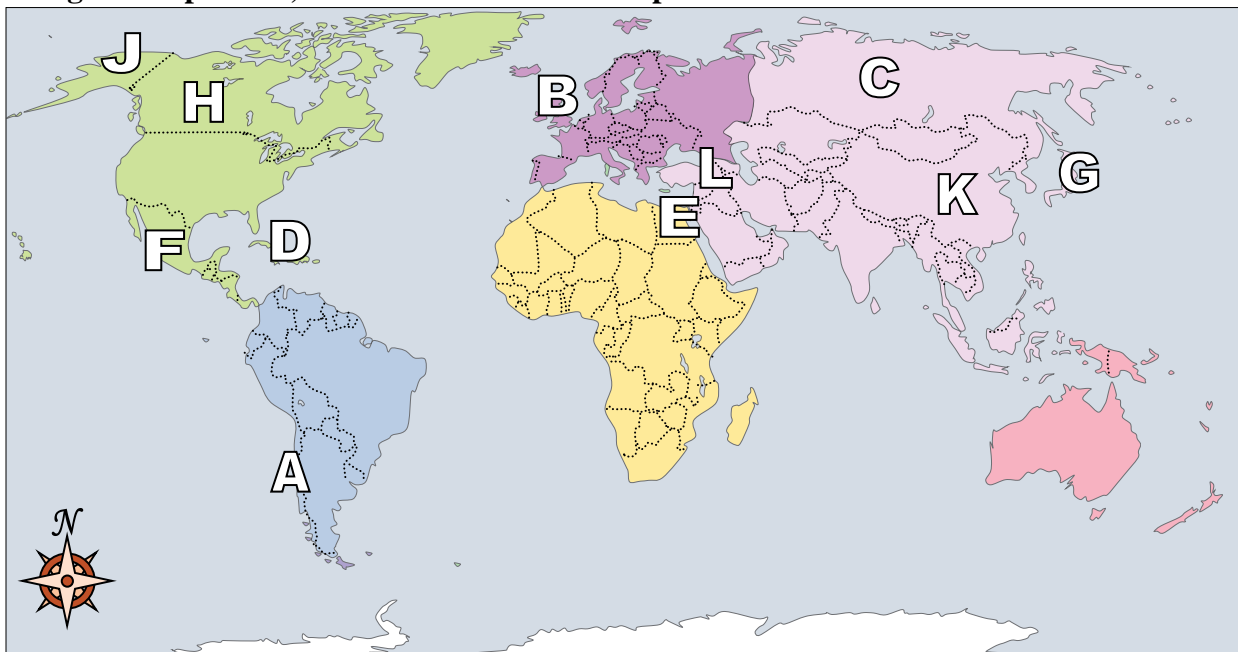
Answers

- 1. **H**
- 2. **M**
- 3. **L**
- 4. **G**
- 5. **F**
- 6. **K**
- 7. **D**
- 8. **B**
- 9. **J**
- 10. **E**
- 11. **A**
- 12. **C**
- 13. **D**
- 14. **C**
- 15. **C**
- 16. **C**
- 17. **B**

- 1) Britain **H**
- 2) Russia **M**
- 3) Egypt **L**
- 4) Mexico **G**
- 5) Alaska (State) **F**
- 6) Iraq **K**
- 7) Chile **D**
- 8) China **B**
- 9) Cuba **J**
- 10) Japan **E**
- 11) United Kingdom **A**
- 12) Canada **C**
- 13) Which country touches the USA's northern border?
A. Mexico B. France C. Egypt D. Canada
- 14) Which country is closest to the state of Florida?
A. Japan B. Russia C. Cuba D. Mexico
- 15) The state of Alaska is touching which country?
A. Egypt B. Russia C. Canada D. France
- 16) If you wanted to see pyramids where should you go?
A. Britain B. China C. Egypt D. Mexico
- 17) Which country is the largest in Asia?
A. Egypt B. Russia C. France D. Britain



Using the map below, determine which letter represents each location.



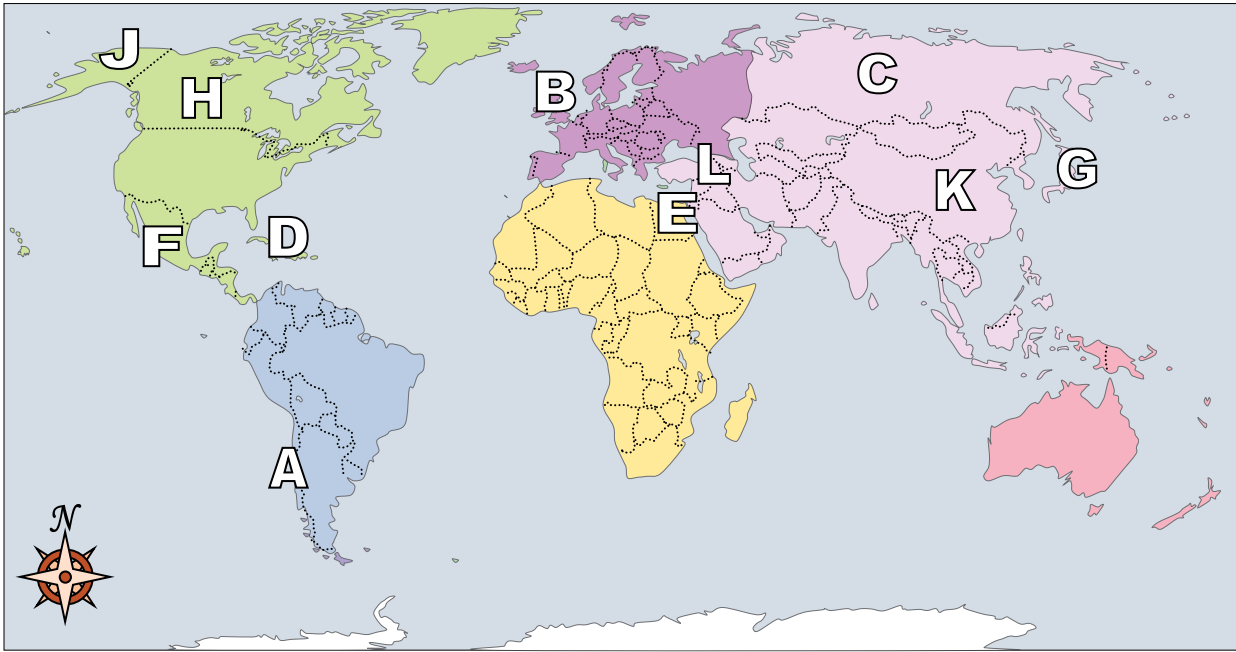
Answers

1. _____
2. _____
3. _____
4. _____
5. _____
6. _____
7. _____
8. _____
9. _____
10. _____
11. _____
12. _____
13. _____
14. _____
15. _____
16. _____
17. _____

- 1) Cuba _____
- 2) Britain _____
- 3) China _____
- 4) United Kingdom _____
- 5) Mexico _____
- 6) Canada _____
- 7) Russia _____
- 8) Alaska (State) _____
- 9) Japan _____
- 10) Chile _____
- 11) Egypt _____
- 12) Iraq _____
- 13) Which is not part of North America?
A. The United States B. Alaska C. Japan D. Mexico
- 14) Which country attacked the United State's base at Pearl Harbor during World War 2?
A. Japan B. France C. Britain D. China
- 15) The state of Alaska is touching which country?
A. China B. Canada C. Mexico D. France
- 16) Alaska is _____ of the rest of the United States?
A. east B. west C. north D. south
- 17) Which country is closest to the state of Florida?
A. Russia B. Mexico C. China D. Cuba



Using the map below, determine which letter represents each location.



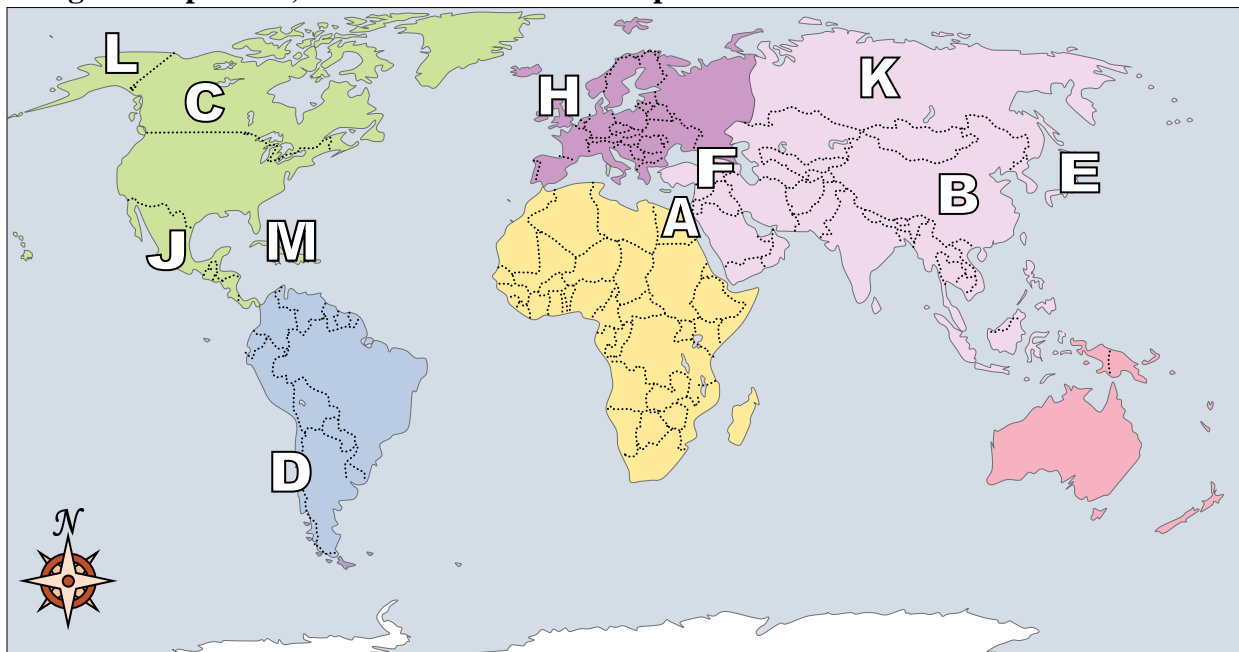
Answers

1. **D**
2. **M**
3. **K**
4. **B**
5. **F**
6. **H**
7. **C**
8. **J**
9. **G**
10. **A**
11. **E**
12. **L**
13. **C**
14. **A**
15. **B**
16. **C**
17. **D**

- 1) Cuba **D**
- 2) Britain **M**
- 3) China **K**
- 4) United Kingdom **B**
- 5) Mexico **F**
- 6) Canada **H**
- 7) Russia **C**
- 8) Alaska (State) **J**
- 9) Japan **G**
- 10) Chile **A**
- 11) Egypt **E**
- 12) Iraq **L**
- 13) Which is not part of North America?
A. The United States B. Alaska C. Japan D. Mexico
- 14) Which country attacked the United State's base at Pearl Harbor during World War 2?
A. Japan B. France C. Britain D. China
- 15) The state of Alaska is touching which country?
A. China B. Canada C. Mexico D. France
- 16) Alaska is _____ of the rest of the United States?
A. east B. west C. north D. south
- 17) Which country is closest to the state of Florida?
A. Russia B. Mexico C. China D. Cuba



Using the map below, determine which letter represents each location.



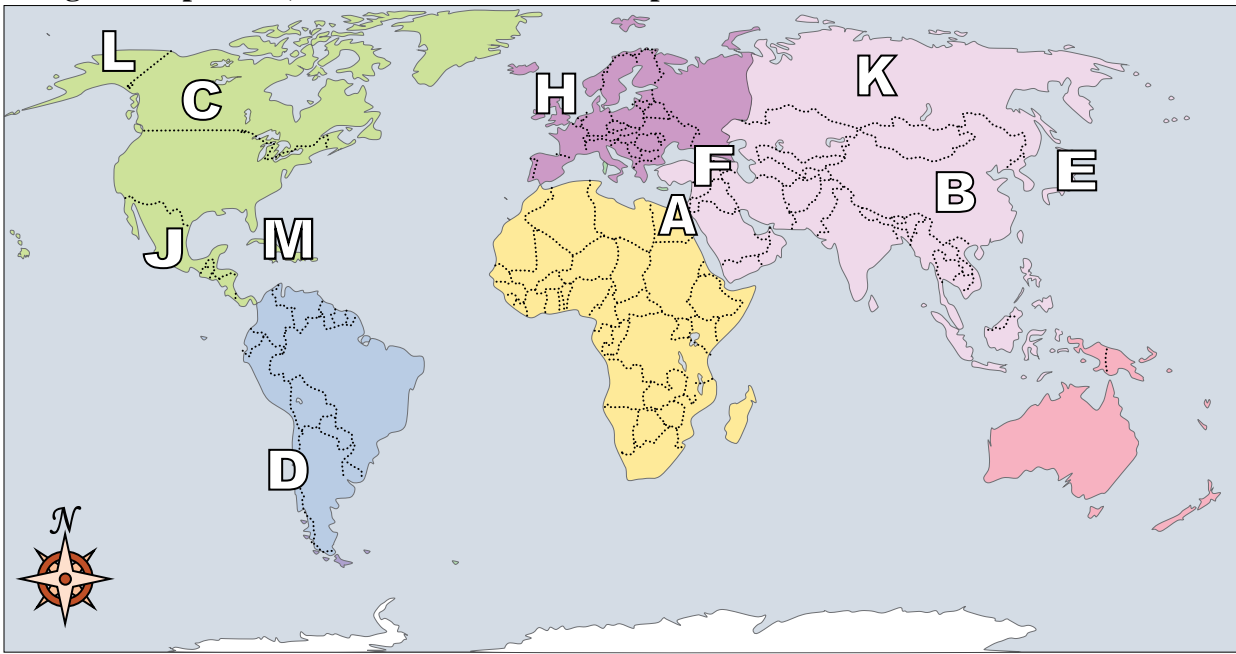
Answers

1. _____
2. _____
3. _____
4. _____
5. _____
6. _____
7. _____
8. _____
9. _____
10. _____
11. _____
12. _____
13. _____
14. _____
15. _____
16. _____
17. _____

- 1) Japan _____
- 2) Alaska (State) _____
- 3) Russia _____
- 4) United Kingdom _____
- 5) Iraq _____
- 6) Canada _____
- 7) China _____
- 8) Chile _____
- 9) Britain _____
- 10) Cuba _____
- 11) Mexico _____
- 12) Egypt _____
- 13) The state of Alaska is touching which country?
 A. China B. Canada C. Japan D. Britain
- 14) Which country touches the USA's southern border?
 A. Mexico B. France C. Japan D. Britain
- 15) Which country touches the USA's northern border?
 A. Egypt B. Britain C. China D. Canada
- 16) Which country attacked the United State's base at Pearl Harbor during World War 2?
 A. Britain B. Japan C. China D. Canada
- 17) Alaska is _____ of the rest of the United States?
 A. west B. east C. south D. north



Using the map below, determine which letter represents each location.



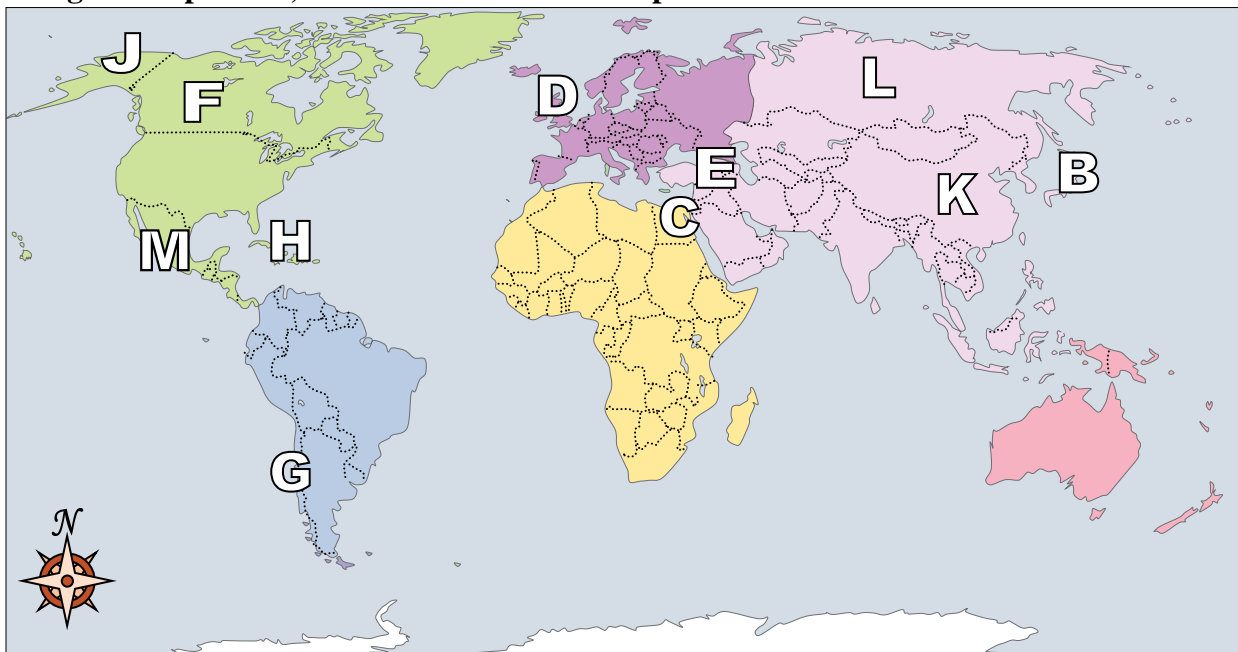
Answers

- 1) Japan E
- 2) Alaska (State) L
- 3) Russia K
- 4) United Kingdom H
- 5) Iraq F
- 6) Canada C
- 7) China B
- 8) Chile D
- 9) Britain G
- 10) Cuba M
- 11) Mexico J
- 12) Egypt A
- 13) The state of Alaska is touching which country?
A. China B. Canada C. Japan D. Britain
- 14) Which country touches the USA's southern border?
A. Mexico B. France C. Japan D. Britain
- 15) Which country touches the USA's northern border?
A. Egypt B. Britain C. China D. Canada
- 16) Which country attacked the United State's base at Pearl Harbor during World War 2?
A. Britain B. Japan C. China D. Canada
- 17) Alaska is _____ of the rest of the United States?
A. west B. east C. south D. north

- 1. E
- 2. L
- 3. K
- 4. H
- 5. F
- 6. C
- 7. B
- 8. D
- 9. G
- 10. M
- 11. J
- 12. A
- 13. B
- 14. A
- 15. D
- 16. B
- 17. D



Using the map below, determine which letter represents each location.



Answers

1. _____

2. _____

3. _____

4. _____

5. _____

6. _____

7. _____

8. _____

9. _____

10. _____

11. _____

12. _____

13. _____

14. _____

15. _____

16. _____

17. _____

1) United Kingdom _____

2) Russia _____

3) Egypt _____

4) Iraq _____

5) Alaska (State) _____

6) Cuba _____

7) Britain _____

8) Mexico _____

9) Chile _____

10) Canada _____

11) Japan _____

12) China _____

13) The state of Alaska is touching which country?

- A. Egypt
- B. China
- C. Japan
- D. Canada

14) Which country attacked the United State's base at Pearl Harbor during World War 2?

- A. China
- B. Mexico
- C. Japan
- D. Egypt

15) Which country touches the USA's northern border?

- A. France
- B. Canada
- C. Japan
- D. Britain

16) Which is not part of North America?

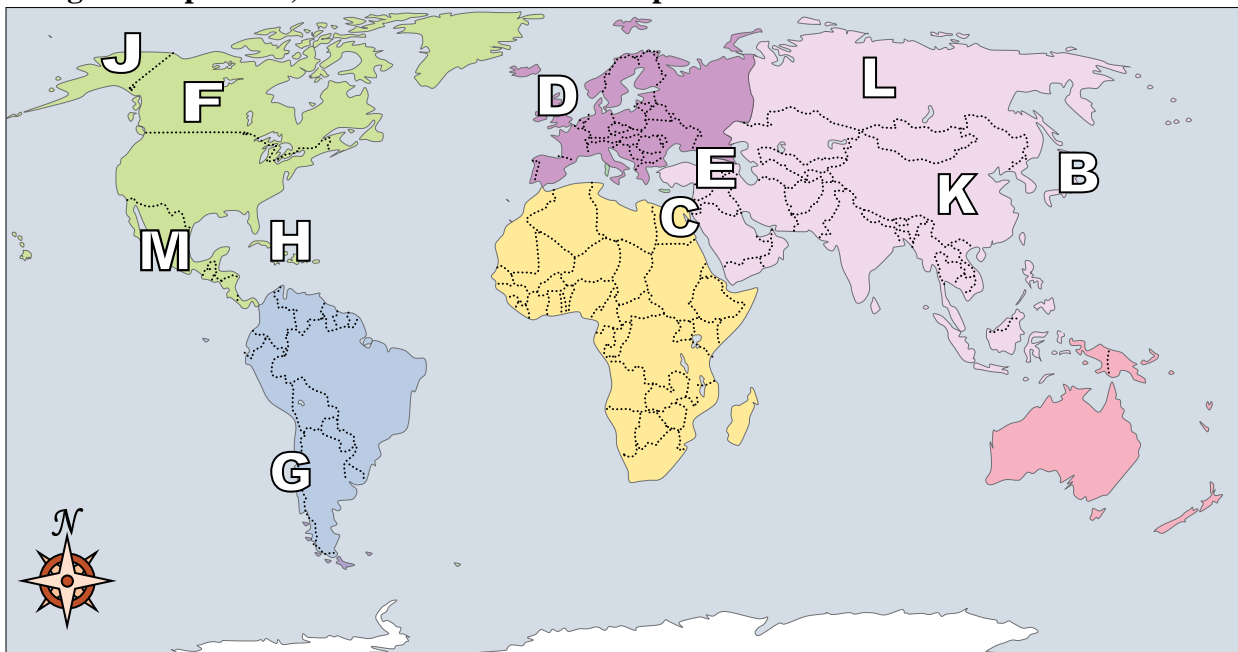
- A. Russia
- B. Mexico
- C. The United States
- D. Canada

17) If you wanted to see pyramids where should you go?

- A. Egypt
- B. Canada
- C. China
- D. Russia



Using the map below, determine which letter represents each location.



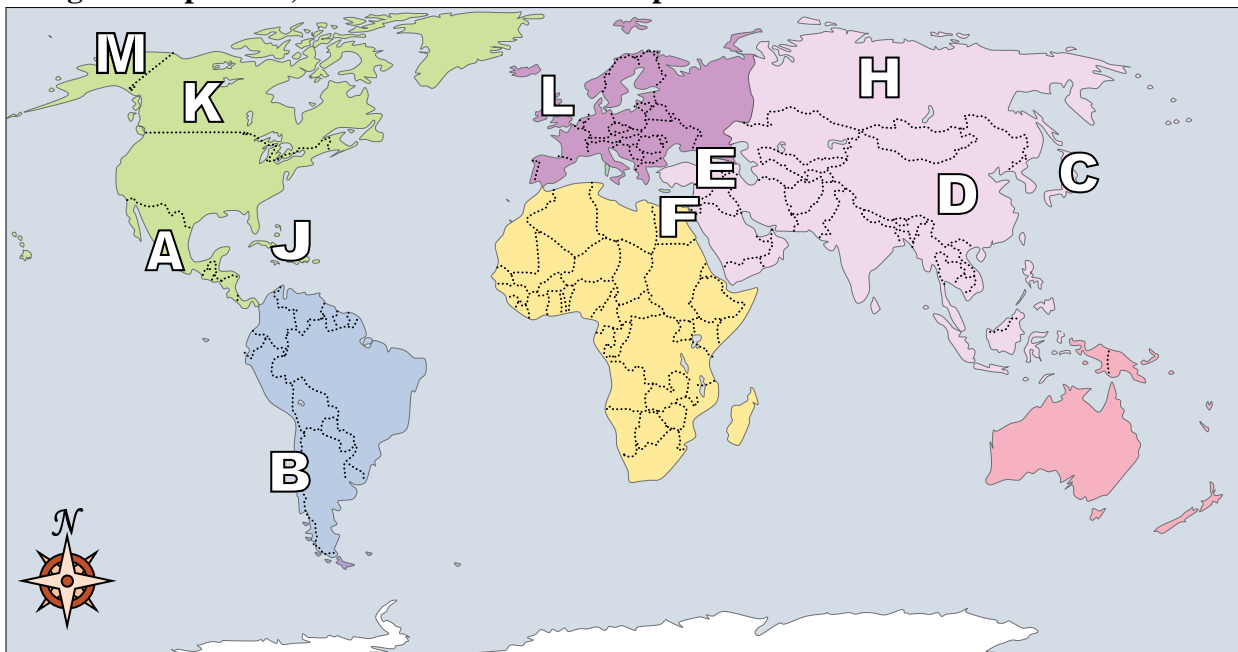
Answers

- 1. **D**
- 2. **L**
- 3. **C**
- 4. **E**
- 5. **J**
- 6. **H**
- 7. **A**
- 8. **M**
- 9. **G**
- 10. **F**
- 11. **B**
- 12. **K**
- 13. **D**
- 14. **C**
- 15. **B**
- 16. **A**
- 17. **A**

- 1) United Kingdom **D**
- 2) Russia **L**
- 3) Egypt **C**
- 4) Iraq **E**
- 5) Alaska (State) **J**
- 6) Cuba **H**
- 7) Britain **A**
- 8) Mexico **M**
- 9) Chile **G**
- 10) Canada **F**
- 11) Japan **B**
- 12) China **K**
- 13) The state of Alaska is touching which country?
A. Egypt B. China C. Japan D. Canada
- 14) Which country attacked the United State's base at Pearl Harbor during World War 2?
A. China B. Mexico C. Japan D. Egypt
- 15) Which country touches the USA's northern border?
A. France B. Canada C. Japan D. Britain
- 16) Which is not part of North America?
A. Russia B. Mexico C. The United States D. Canada
- 17) If you wanted to see pyramids where should you go?
A. Egypt B. Canada C. China D. Russia



Using the map below, determine which letter represents each location.



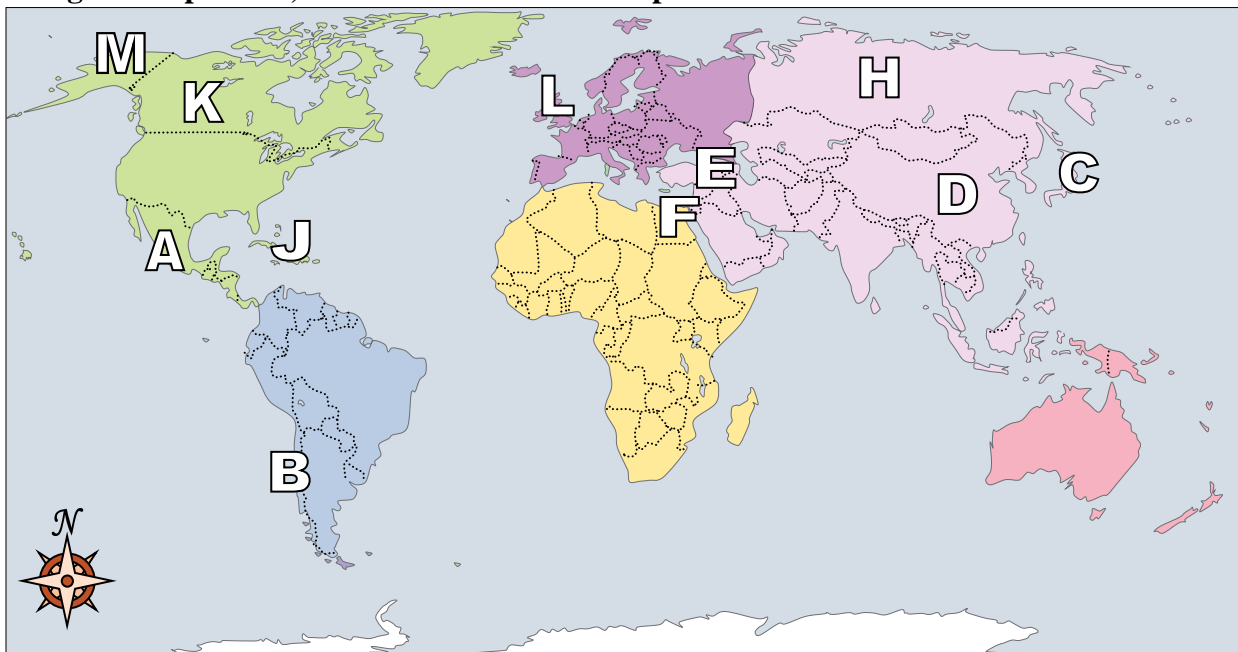
Answers

1. _____
2. _____
3. _____
4. _____
5. _____
6. _____
7. _____
8. _____
9. _____
10. _____
11. _____
12. _____
13. _____
14. _____
15. _____
16. _____
17. _____

- 1) Alaska (State) _____
- 2) Russia _____
- 3) United Kingdom _____
- 4) Cuba _____
- 5) Chile _____
- 6) Mexico _____
- 7) Japan _____
- 8) Iraq _____
- 9) Britain _____
- 10) China _____
- 11) Egypt _____
- 12) Canada _____
- 13) If you wanted to see pyramids where should you go?
A. Russia B. France C. Mexico D. Egypt
- 14) Which country attacked the United State's base at Pearl Harbor during World War 2?
A. Japan B. Mexico C. Britain D. Canada
- 15) Which country is the largest in Asia?
A. Egypt B. Russia C. Mexico D. France
- 16) Alaska is _____ of the rest of the United States?
A. south B. west C. north D. east
- 17) The state of Alaska is touching which country?
A. Japan B. Canada C. China D. Britain



Using the map below, determine which letter represents each location.



Answers

1. **M**

2. **H**

3. **L**

4. **J**

5. **B**

6. **A**

7. **C**

8. **E**

9. **G**

10. **D**

11. **F**

12. **K**

13. **D**

14. **A**

15. **B**

16. **C**

17. **B**

1) Alaska (State) **M**

2) Russia **H**

3) United Kingdom **L**

4) Cuba **J**

5) Chile **B**

6) Mexico **A**

7) Japan **C**

8) Iraq **E**

9) Britain **G**

10) China **D**

11) Egypt **F**

12) Canada **K**

13) If you wanted to see pyramids where should you go?

- A. Russia
- B. France
- C. Mexico
- D. Egypt

14) Which country attacked the United State's base at Pearl Harbor during World War 2?

- A. Japan
- B. Mexico
- C. Britain
- D. Canada

15) Which country is the largest in Asia?

- A. Egypt
- B. Russia
- C. Mexico
- D. France

16) Alaska is _____ of the rest of the United States?

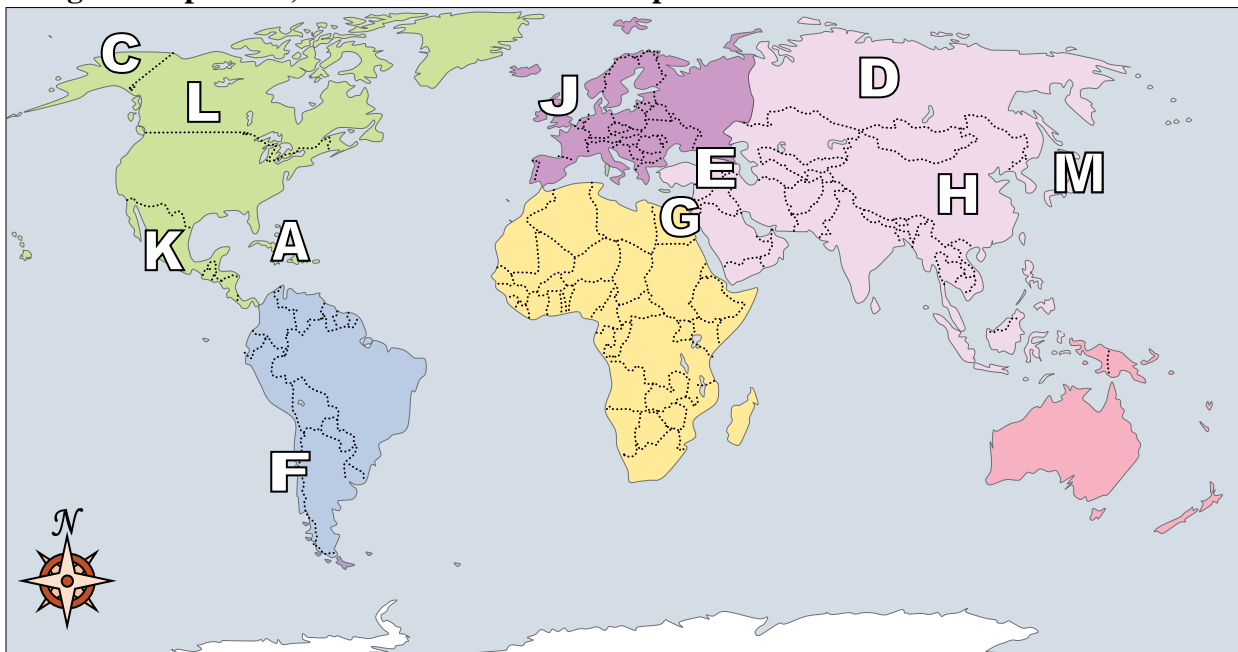
- A. south
- B. west
- C. north
- D. east

17) The state of Alaska is touching which country?

- A. Japan
- B. Canada
- C. China
- D. Britain



Using the map below, determine which letter represents each location.



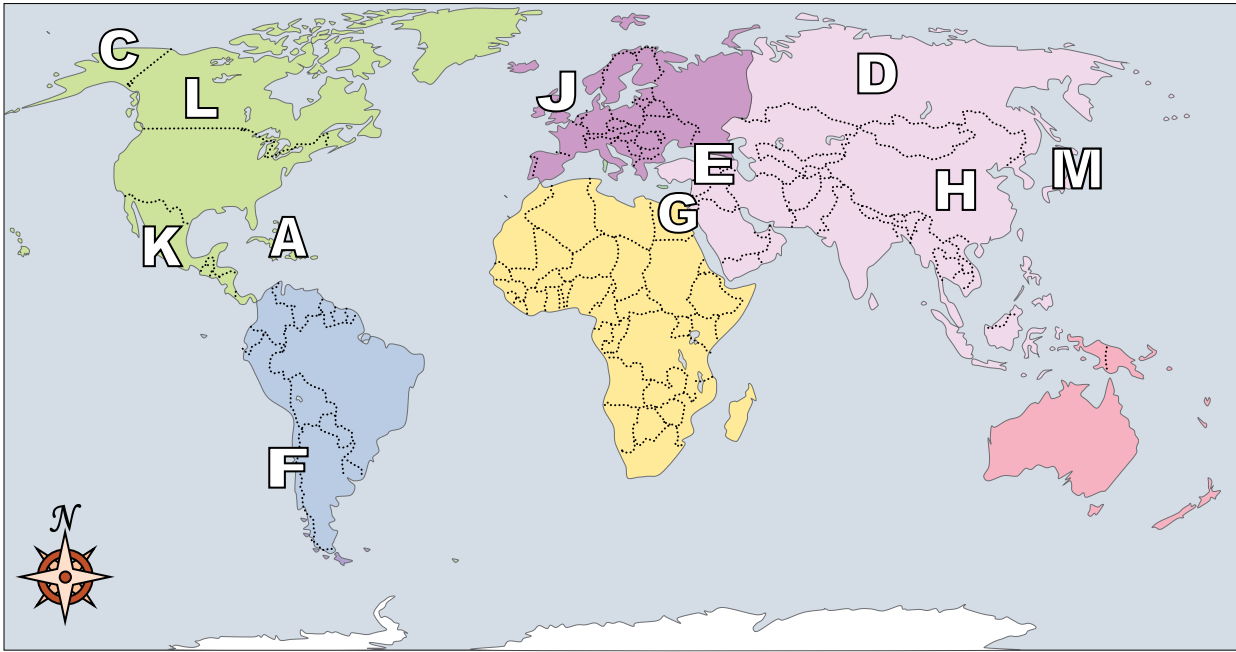
Answers

1. _____
2. _____
3. _____
4. _____
5. _____
6. _____
7. _____
8. _____
9. _____
10. _____
11. _____
12. _____
13. _____
14. _____
15. _____
16. _____
17. _____

- 1) Mexico _____
- 2) Chile _____
- 3) Cuba _____
- 4) Iraq _____
- 5) China _____
- 6) Egypt _____
- 7) Canada _____
- 8) Alaska (State) _____
- 9) Britain _____
- 10) United Kingdom _____
- 11) Russia _____
- 12) Japan _____
- 13) Which country touches the USA's northern border?
 A. France B. Canada C. China D. Mexico
- 14) Alaska is _____ of the rest of the United States?
 A. north B. west C. east D. south
- 15) Who was the United States of America at war with during the American Revolution?
 A. Britain B. Japan C. Mexico D. Egypt
- 16) Which country touches the USA's southern border?
 A. Mexico B. Egypt C. Japan D. France
- 17) Which country is the largest in Asia?
 A. Russia B. Egypt C. Japan D. Mexico



Using the map below, determine which letter represents each location.



Answers

1. **K**
2. **F**
3. **A**
4. **E**
5. **H**
6. **G**
7. **L**
8. **C**
9. **B**
10. **J**
11. **D**
12. **M**
13. **B**
14. **A**
15. **A**
16. **A**
17. **A**

- 1) Mexico **K**
- 2) Chile **F**
- 3) Cuba **A**
- 4) Iraq **E**
- 5) China **H**
- 6) Egypt **G**
- 7) Canada **L**
- 8) Alaska (State) **C**
- 9) Britain **B**
- 10) United Kingdom **J**
- 11) Russia **D**
- 12) Japan **M**
- 13) Which country touches the USA's northern border?
A. France B. Canada C. China D. Mexico
- 14) Alaska is _____ of the rest of the United States?
A. north B. west C. east D. south
- 15) Who was the United States of America at war with during the American Revolution?
A. Britain B. Japan C. Mexico D. Egypt
- 16) Which country touches the USA's southern border?
A. Mexico B. Egypt C. Japan D. France
- 17) Which country is the largest in Asia?
A. Russia B. Egypt C. Japan D. Mexico