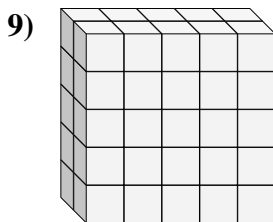
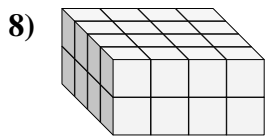
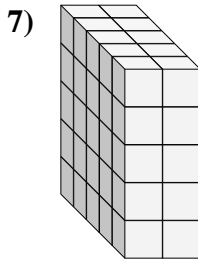
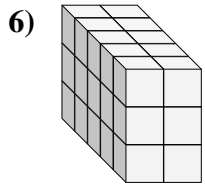
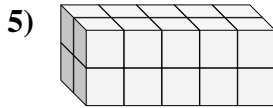
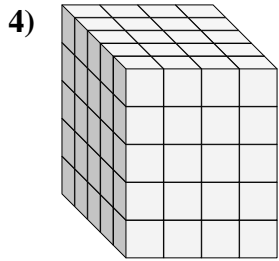
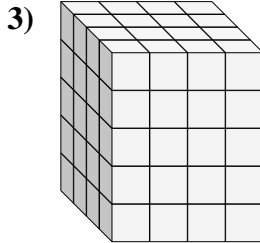
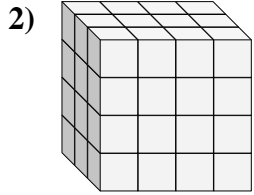
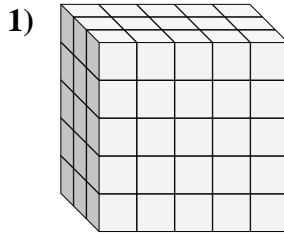
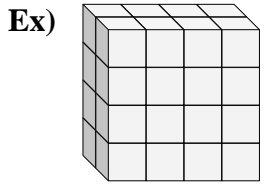




Find the length, width and height of the rectangular prism. Then find the volume.



Answers

Ex. 2 4 4 32

1. _____

2. _____

3. _____

4. _____

5. _____

6. _____

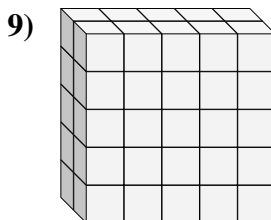
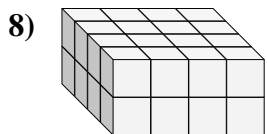
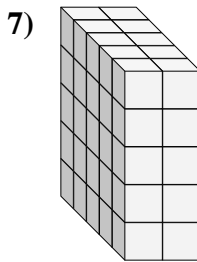
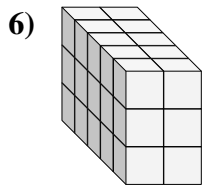
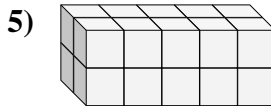
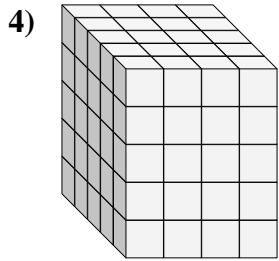
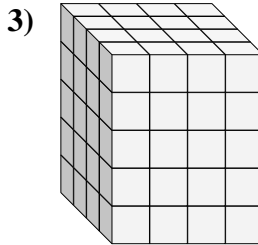
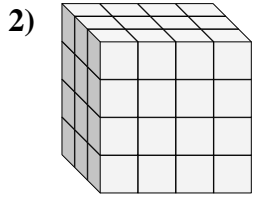
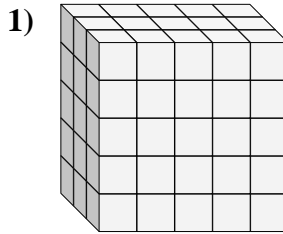
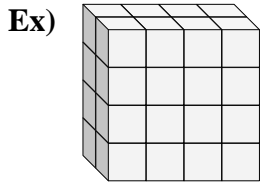
7. _____

8. _____

9. _____



Find the length, width and height of the rectangular prism. Then find the volume.



Answers

Ex. 2 4 4 32

1. 3 5 5 75

2. 3 4 4 48

3. 4 4 5 80

4. 5 4 5 100

5. 2 5 2 20

6. 5 2 3 30

7. 5 2 5 50

8. 4 4 2 32

9. 2 5 5 50