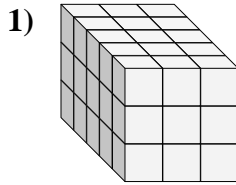
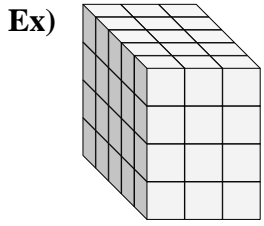




Find the length, width and height of the rectangular prism. Then find the volume.

Answers



Ex. 5 3 4 60

1. _____

2. _____

3. _____

4. _____

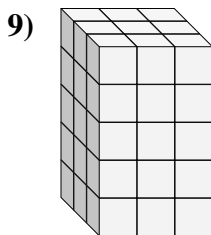
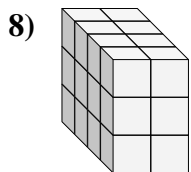
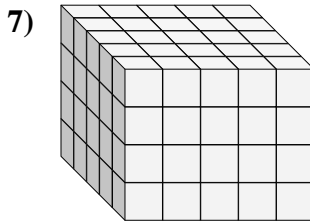
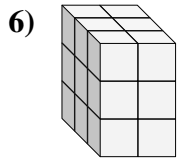
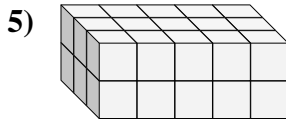
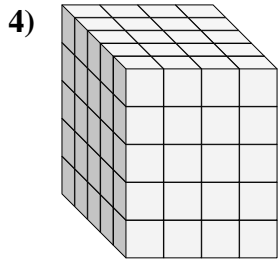
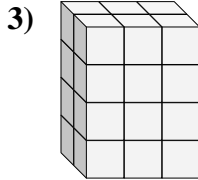
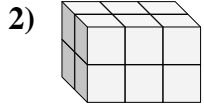
5. _____

6. _____

7. _____

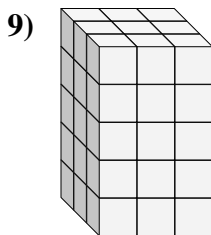
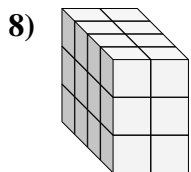
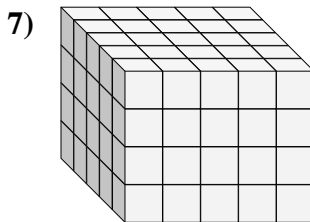
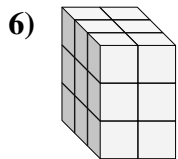
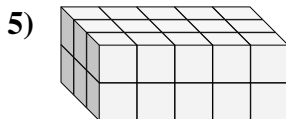
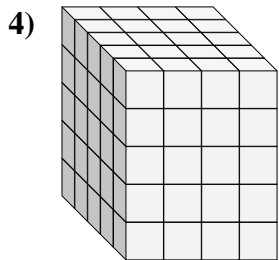
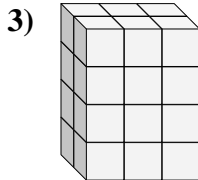
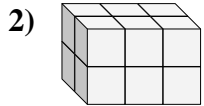
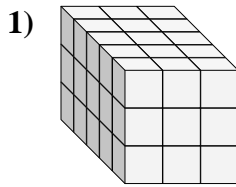
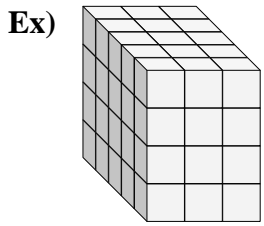
8. _____

9. _____





Find the length, width and height of the rectangular prism. Then find the volume.



Answers

Ex.	<u>5</u>	<u>3</u>	<u>4</u>	<u>60</u>
1.	<u>5</u>	<u>3</u>	<u>3</u>	<u>45</u>
2.	<u>2</u>	<u>3</u>	<u>2</u>	<u>12</u>
3.	<u>2</u>	<u>3</u>	<u>4</u>	<u>24</u>
4.	<u>5</u>	<u>4</u>	<u>5</u>	<u>100</u>
5.	<u>3</u>	<u>5</u>	<u>2</u>	<u>30</u>
6.	<u>3</u>	<u>2</u>	<u>3</u>	<u>18</u>
7.	<u>5</u>	<u>5</u>	<u>4</u>	<u>100</u>
8.	<u>4</u>	<u>2</u>	<u>3</u>	<u>24</u>
9.	<u>3</u>	<u>3</u>	<u>5</u>	<u>45</u>