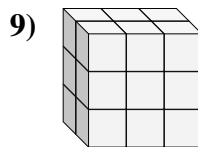
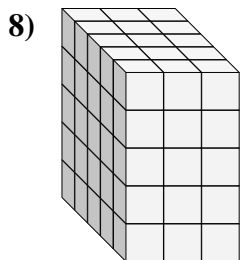
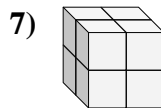
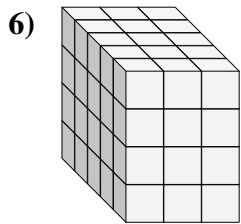
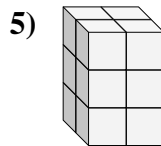
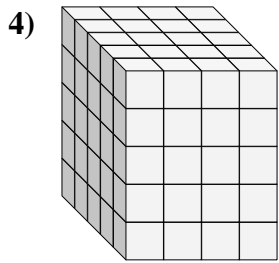
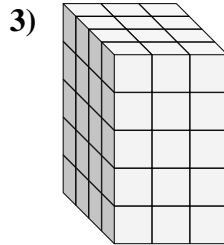
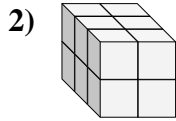
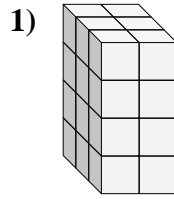
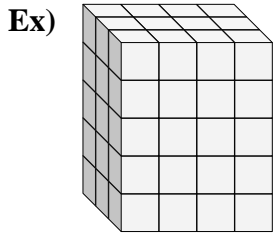




Find the length, width and height of the rectangular prism. Then find the volume.



Answers

Ex. 3 4 5 60

1. \_\_\_\_\_

2. \_\_\_\_\_

3. \_\_\_\_\_

4. \_\_\_\_\_

5. \_\_\_\_\_

6. \_\_\_\_\_

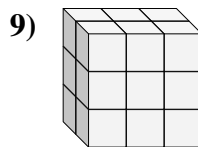
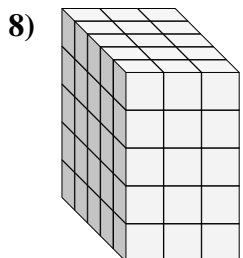
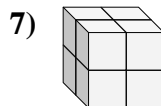
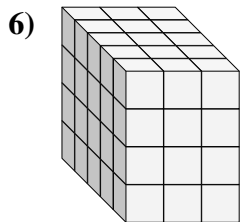
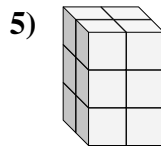
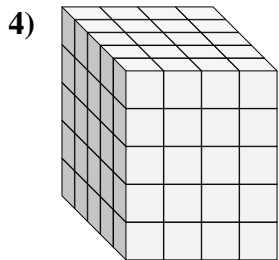
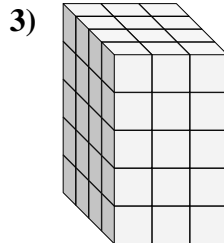
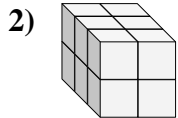
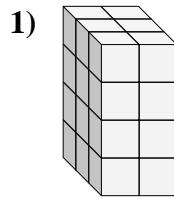
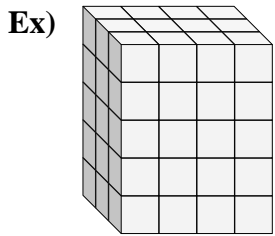
7. \_\_\_\_\_

8. \_\_\_\_\_

9. \_\_\_\_\_



Find the length, width and height of the rectangular prism. Then find the volume.



Answers

Ex.	<u>3</u>	<u>4</u>	<u>5</u>	<u>60</u>
1.	<u>3</u>	<u>2</u>	<u>4</u>	<u>24</u>
2.	<u>3</u>	<u>2</u>	<u>2</u>	<u>12</u>
3.	<u>4</u>	<u>3</u>	<u>5</u>	<u>60</u>
4.	<u>5</u>	<u>4</u>	<u>5</u>	<u>100</u>
5.	<u>2</u>	<u>2</u>	<u>3</u>	<u>12</u>
6.	<u>5</u>	<u>3</u>	<u>4</u>	<u>60</u>
7.	<u>2</u>	<u>2</u>	<u>2</u>	<u>8</u>
8.	<u>5</u>	<u>3</u>	<u>5</u>	<u>75</u>
9.	<u>2</u>	<u>3</u>	<u>3</u>	<u>18</u>