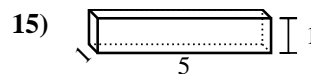
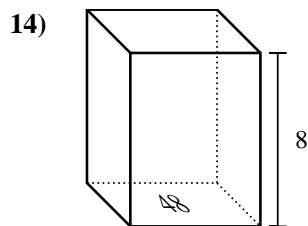
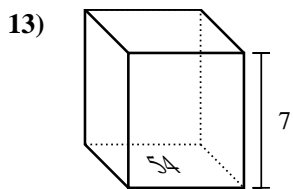
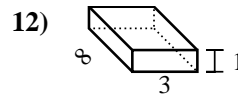
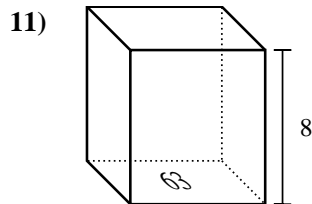
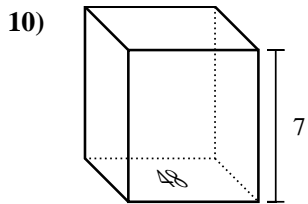
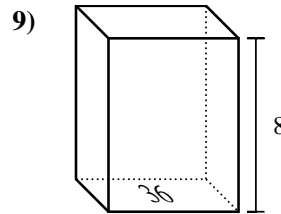
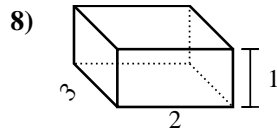
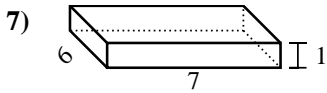
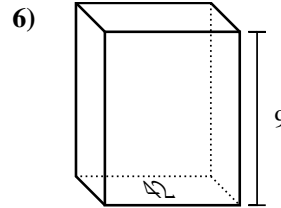
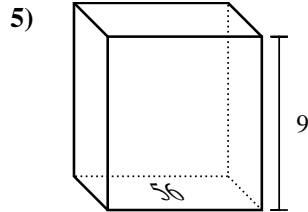
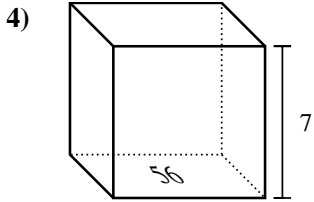
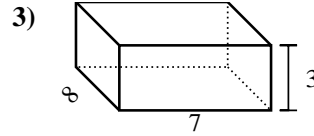
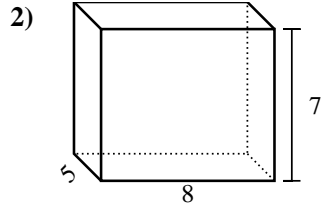
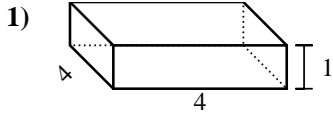




Find the volume of each rectangular prism. Units are in cm (not to scale). Remember $V = BH$ and $V = L \times W \times H$

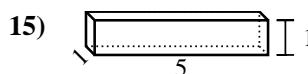
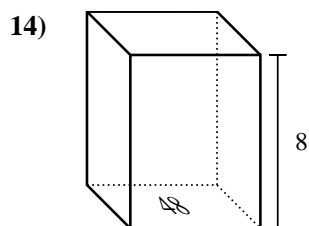
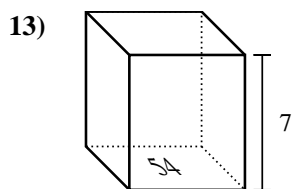
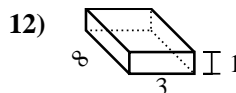
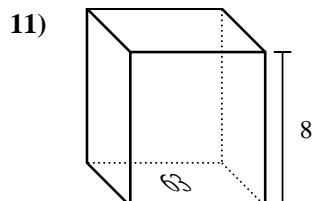
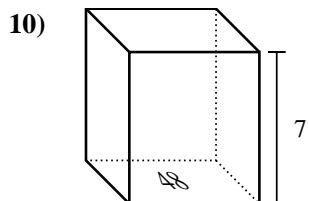
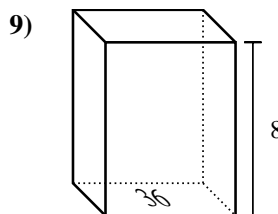
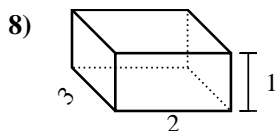
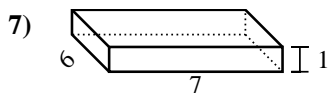
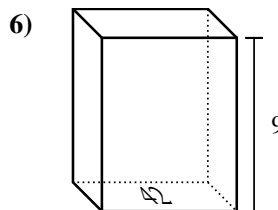
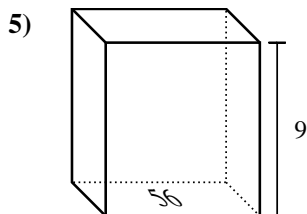
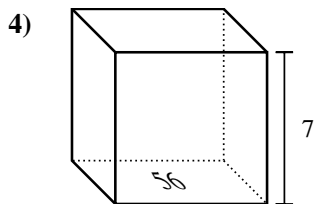
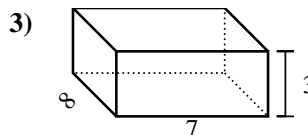
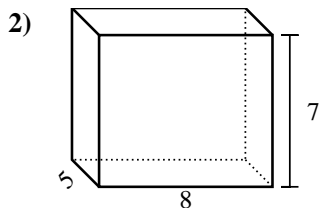
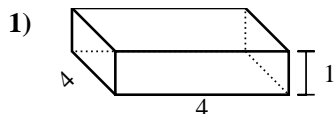


Answers

1. _____
2. _____
3. _____
4. _____
5. _____
6. _____
7. _____
8. _____
9. _____
10. _____
11. _____
12. _____
13. _____
14. _____
15. _____



Find the volume of each rectangular prism. Units are in cm (not to scale). Remember $V = BH$ and $V = L \times W \times H$



Answers

1. 16 cm³
2. 280 cm³
3. 168 cm³
4. 392 cm³
5. 504 cm³
6. 378 cm³
7. 42 cm³
8. 6 cm³
9. 288 cm³
10. 336 cm³
11. 504 cm³
12. 24 cm³
13. 378 cm³
14. 384 cm³
15. 5 cm³