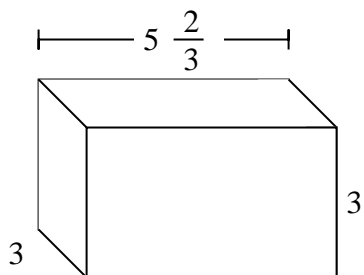


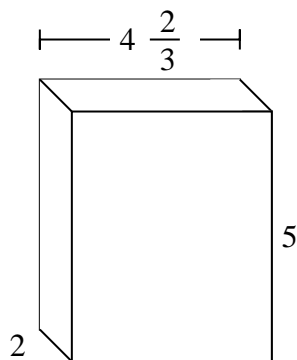


Fill each rectangular prism with cubes to determine the volume. Each prism's unit is measured in cm (not to scale).

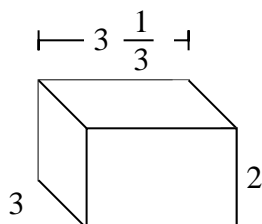
Ex)



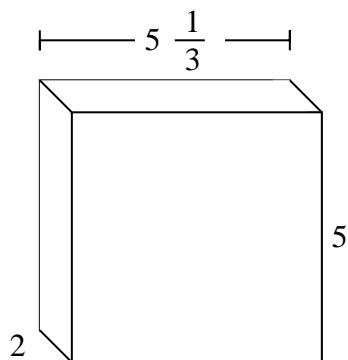
1)



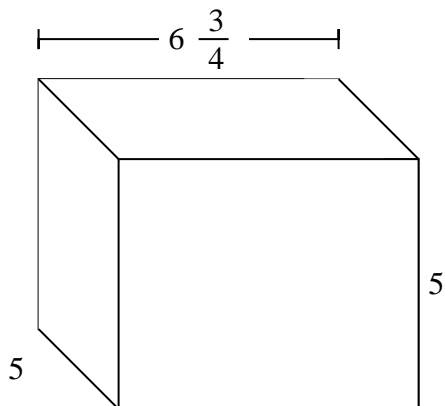
2)



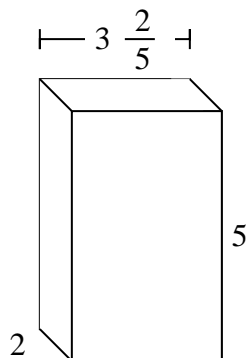
3)



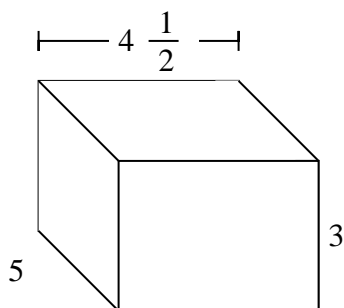
4)



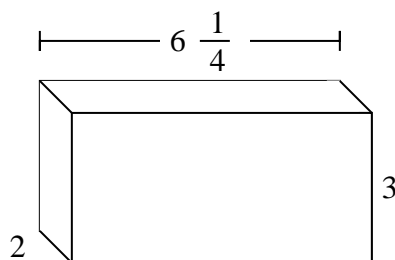
5)



6)



7)

**Answers**Ex. **51 cm**

1. _____

2. _____

3. _____

4. _____

5. _____

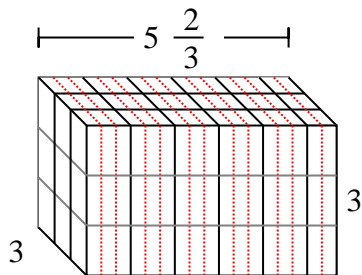
6. _____

7. _____

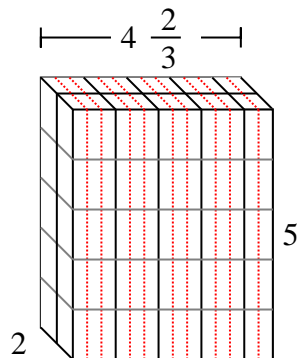


Fill each rectangular prism with cubes to determine the volume. Each prism's unit is measured in cm (not to scale).

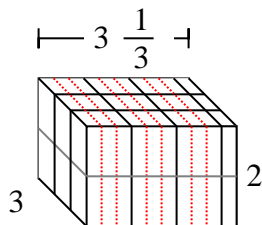
Ex)



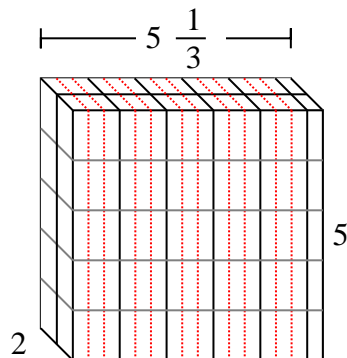
1)



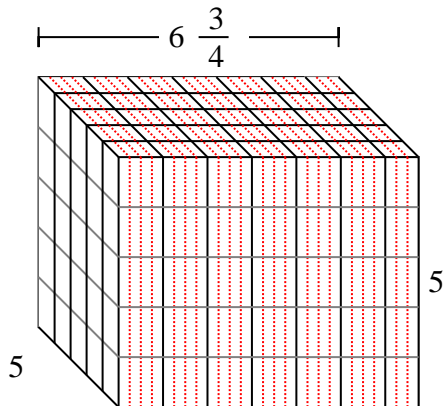
2)



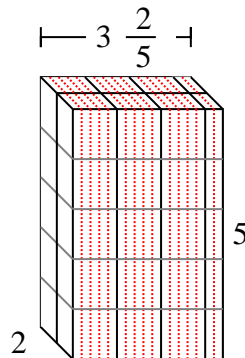
3)



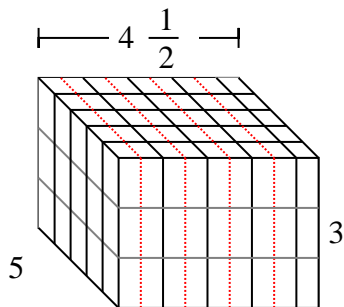
4)



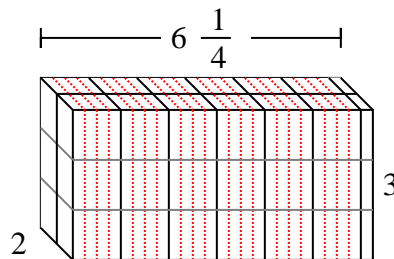
5)



6)



7)

**Answers**Ex. **51 cm**1. **$46\frac{2}{3}$ cm**2. **20 cm**3. **$53\frac{1}{3}$ cm**4. **$168\frac{3}{4}$ cm**5. **34 cm**6. **$67\frac{1}{2}$ cm**7. **$37\frac{2}{4}$ cm**