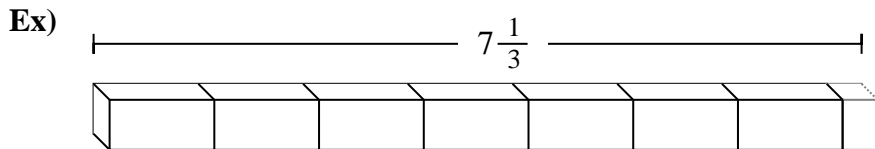




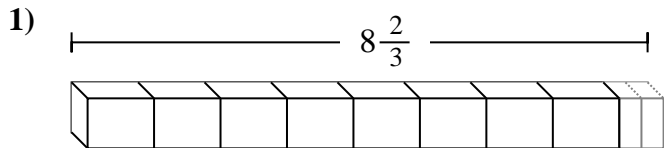
Determine the number of smaller fractional pieces that can be made from the larger piece.

Answers



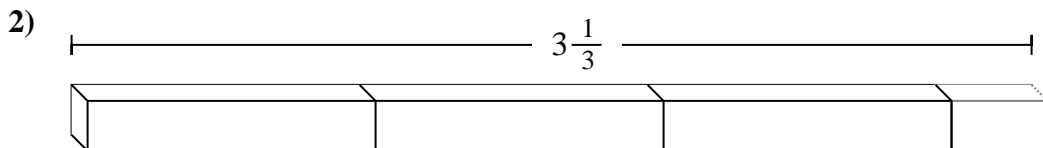
Ex. 22

1. \_\_\_\_\_



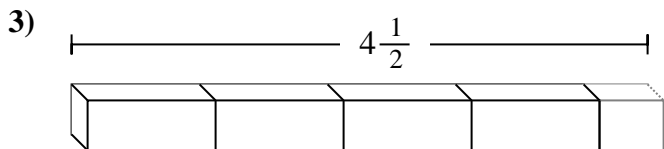
2. \_\_\_\_\_

3. \_\_\_\_\_



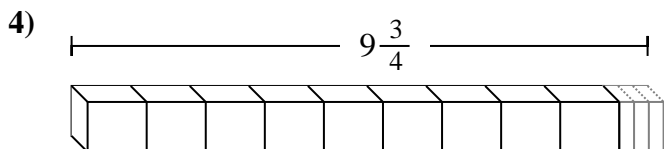
4. \_\_\_\_\_

5. \_\_\_\_\_



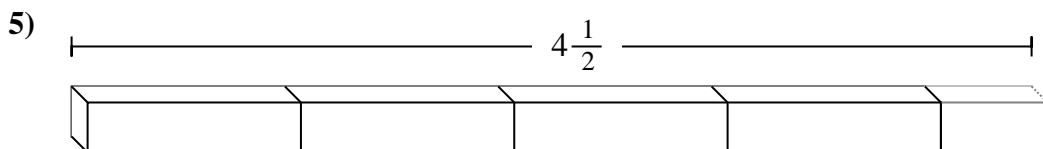
6. \_\_\_\_\_

7. \_\_\_\_\_

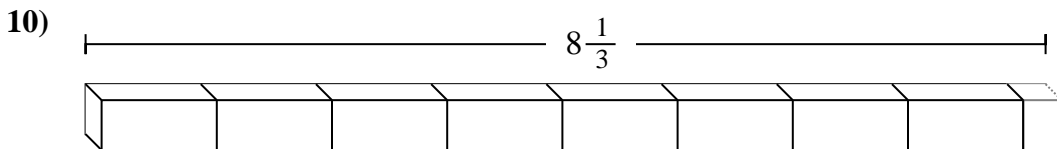
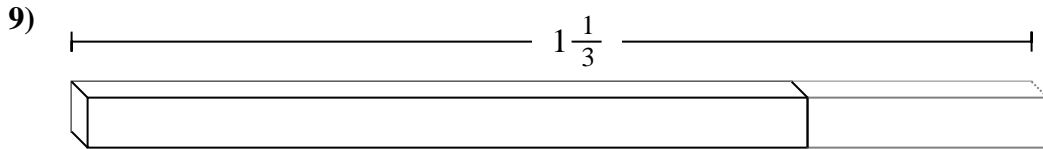
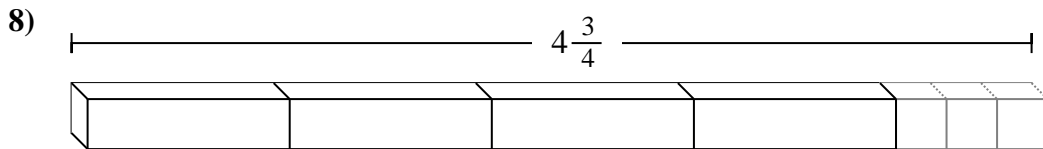
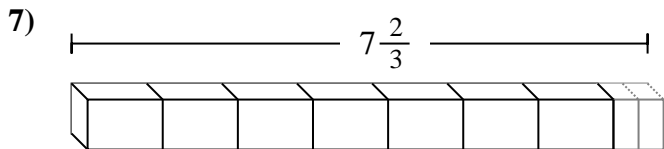
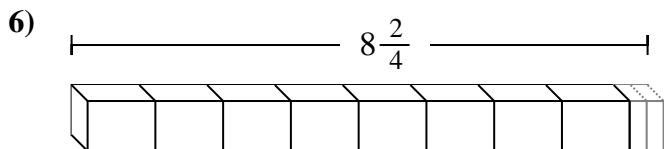


8. \_\_\_\_\_

9. \_\_\_\_\_



10. \_\_\_\_\_





Determine the number of smaller fractional pieces that can be made from the larger piece.

Answers

Ex)  $7\frac{1}{3}$

1)  $8\frac{2}{3}$

2)  $3\frac{1}{3}$

3)  $4\frac{1}{2}$

4)  $9\frac{3}{4}$

5)  $4\frac{1}{2}$

6)  $8\frac{2}{4}$

7)  $7\frac{2}{3}$

8)  $4\frac{3}{4}$

9)  $1\frac{1}{3}$

10)  $8\frac{1}{3}$

- Ex. 22
1. 26
2. 10
3. 9
4. 39
5. 9
6. 34
7. 23
8. 19
9. 4
10. 25