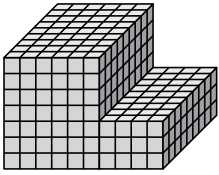




Find the total volume of each figure. Measurement is in cm (not to scale).

Answers

1)



1. _____

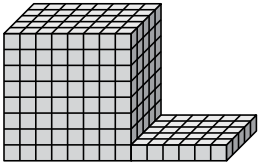
2. _____

3. _____

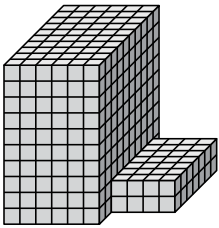
4. _____

5. _____

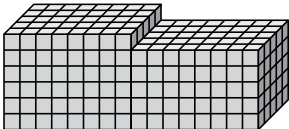
2)



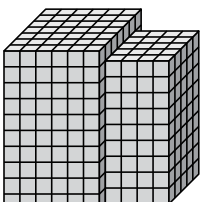
3)



4)



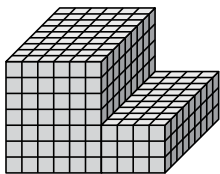
5)





Find the total volume of each figure. Measurement is in cm (not to scale).

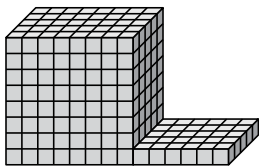
1)



$$6 \times 9 \times 7 = 378$$

$$4 \times 9 \times 3 = 108$$

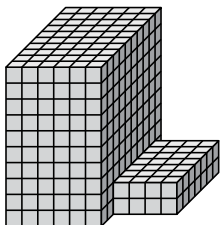
2)



$$8 \times 5 \times 8 = 320$$

$$6 \times 5 \times 1 = 30$$

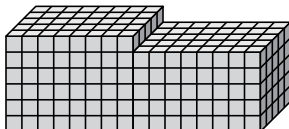
3)



$$6 \times 10 \times 10 = 600$$

$$4 \times 7 \times 2 = 56$$

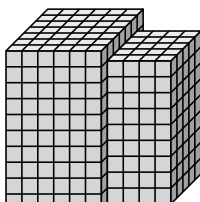
4)



$$8 \times 5 \times 6 = 240$$

$$8 \times 5 \times 5 = 200$$

5)



$$6 \times 7 \times 10 = 420$$

$$4 \times 5 \times 9 = 180$$

Answers

1. **486 cm³**

2. **350 cm³**

3. **656 cm³**

4. **440 cm³**

5. **600 cm³**