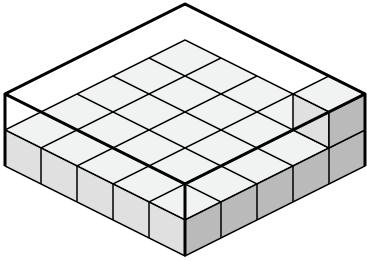




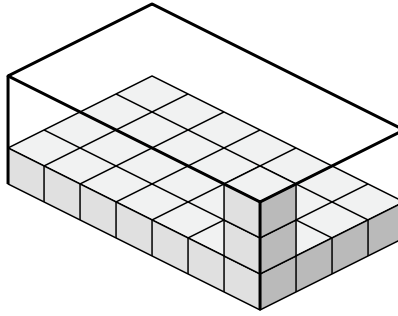
Create an expression to determine the volume of each box.

Answers

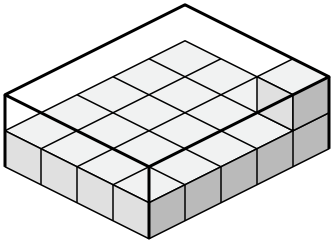
1)



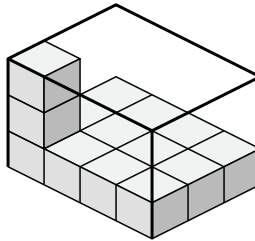
2)



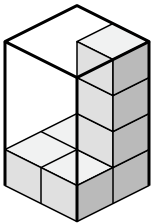
3)



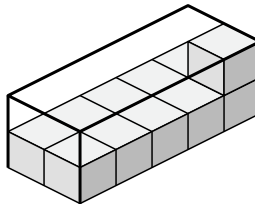
4)



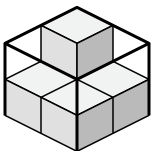
5)



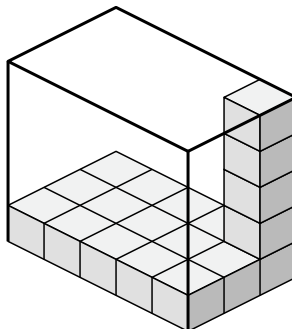
6)



7)



8)



1. _____

2. _____

3. _____

4. _____

5. _____

6. _____

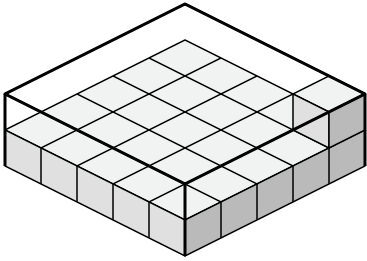
7. _____

8. _____

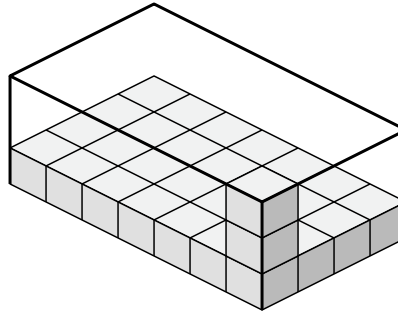


Create an expression to determine the volume of each box.

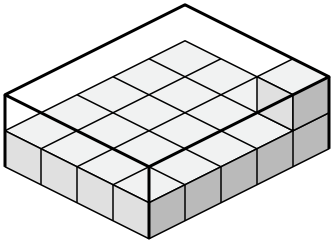
1)



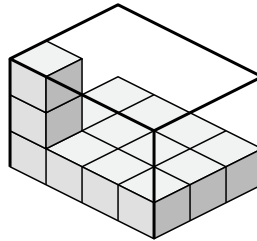
2)



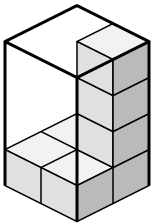
3)



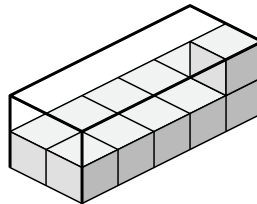
4)



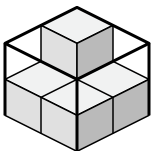
5)



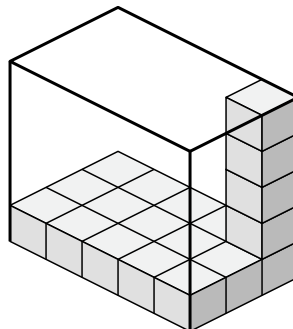
6)



7)



8)



Answers

1. $5 \times 5 \times 2$

2. $7 \times 4 \times 3$

3. $4 \times 5 \times 2$

4. $4 \times 3 \times 3$

5. $2 \times 2 \times 4$

6. $2 \times 5 \times 2$

7. $2 \times 2 \times 2$

8. $5 \times 3 \times 5$