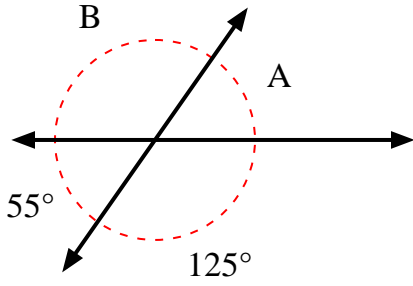


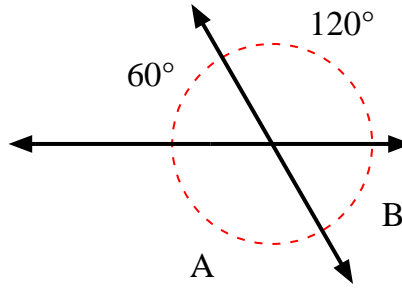


Find the value of angle 'A' and angle 'B'.

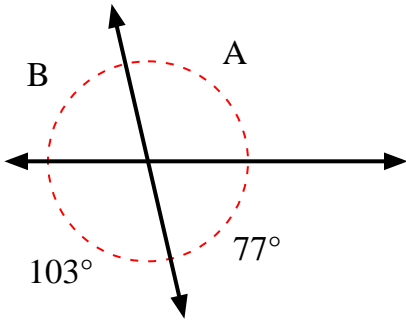
1)



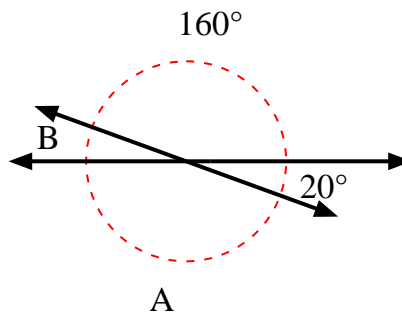
2)



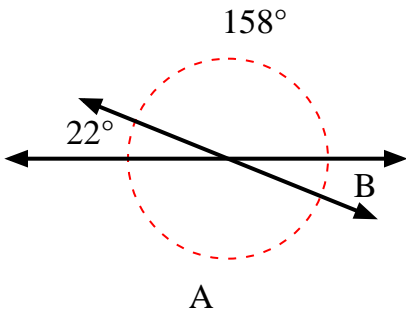
3)



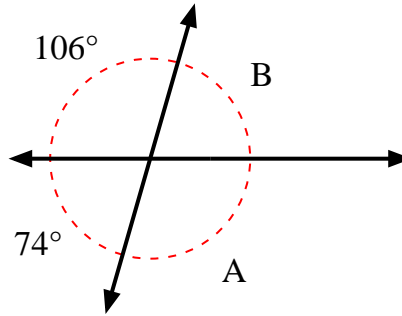
4)



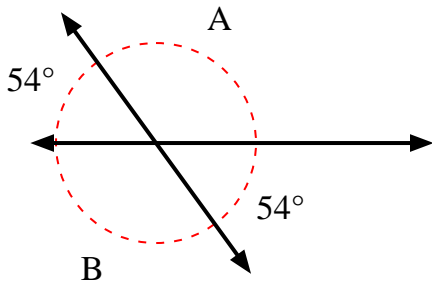
5)



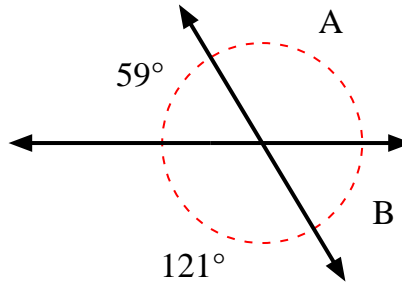
6)



7)



8)



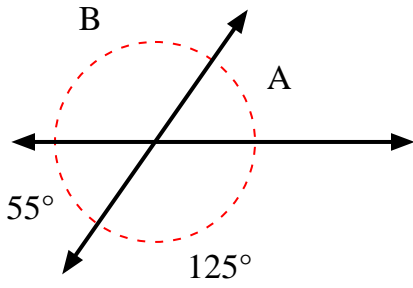
Answers

1. _____
2. _____
3. _____
4. _____
5. _____
6. _____
7. _____
8. _____

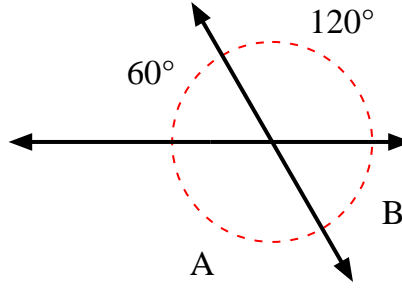


Find the value of angle 'A' and angle 'B'.

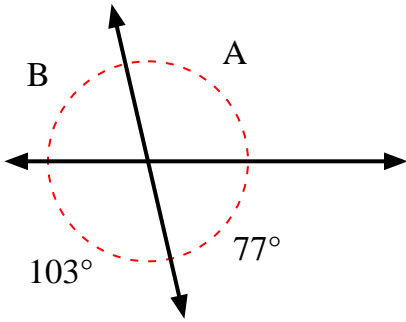
1)



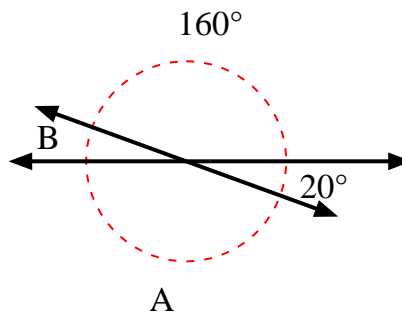
2)



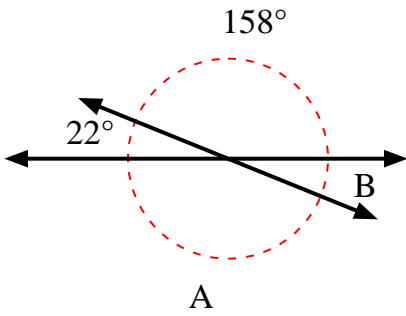
3)



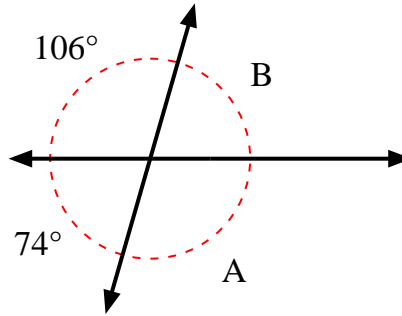
4)



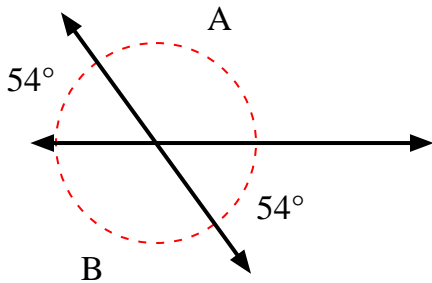
5)



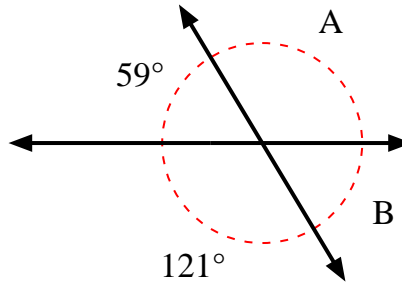
6)



7)



8)



Answers

1.	<u>55°</u>	<u>125°</u>
2.	<u>120°</u>	<u>60°</u>
3.	<u>103°</u>	<u>77°</u>
4.	<u>160°</u>	<u>20°</u>
5.	<u>158°</u>	<u>22°</u>
6.	<u>106°</u>	<u>74°</u>
7.	<u>126°</u>	<u>126°</u>
8.	<u>121°</u>	<u>59°</u>