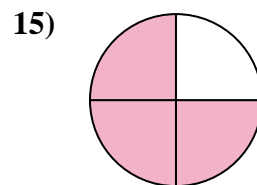
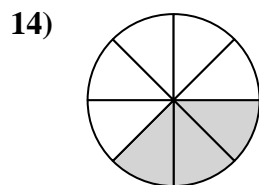
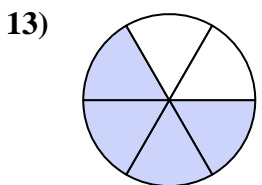
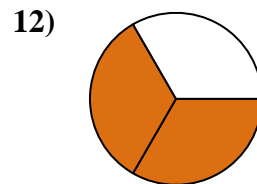
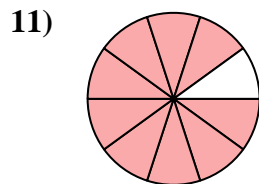
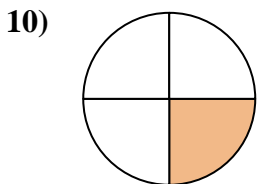
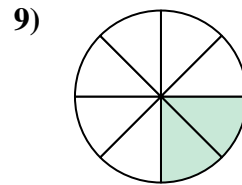
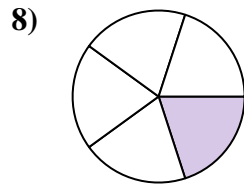
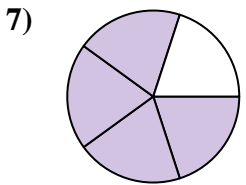
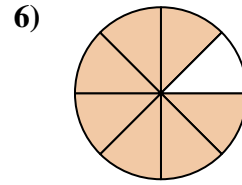
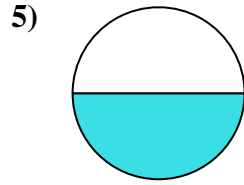
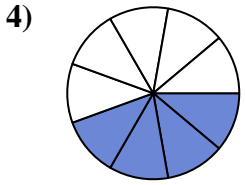
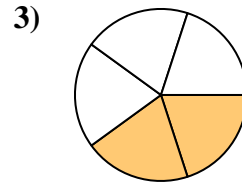
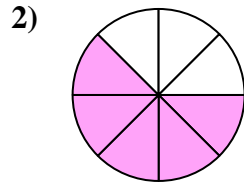
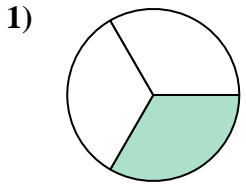




Find the angle (in degrees) of the shaded portion of the circle.

Answers

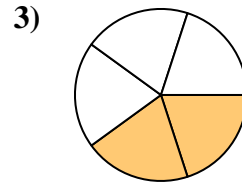
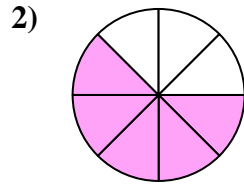
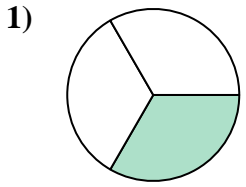


1. \_\_\_\_\_
2. \_\_\_\_\_
3. \_\_\_\_\_
4. \_\_\_\_\_
5. \_\_\_\_\_
6. \_\_\_\_\_
7. \_\_\_\_\_
8. \_\_\_\_\_
9. \_\_\_\_\_
10. \_\_\_\_\_
11. \_\_\_\_\_
12. \_\_\_\_\_
13. \_\_\_\_\_
14. \_\_\_\_\_
15. \_\_\_\_\_

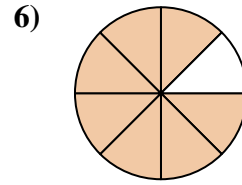
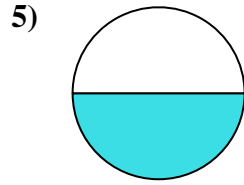
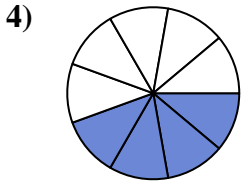


Find the angle (in degrees) of the shaded portion of the circle.

Answers



1. 120



2. 225

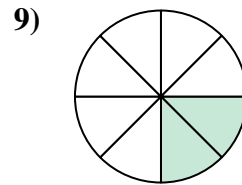
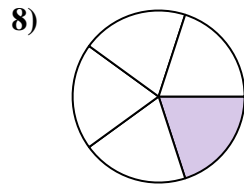
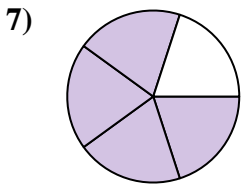
3. 144

4. 160

5. 180

6. 315

7. 288

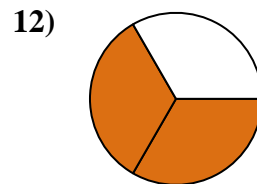
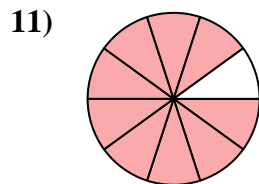
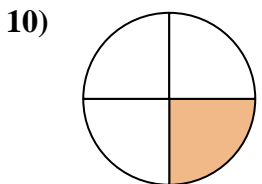


8. 72

9. 90

10. 90

11. 324

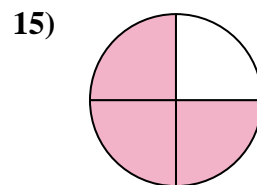
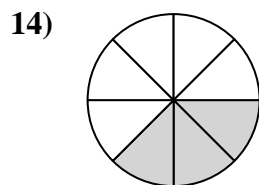
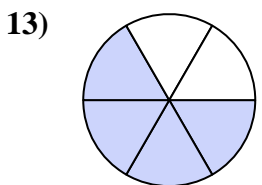


12. 240

13. 240

14. 135

15. 270





Find the angle (in degrees) of the shaded portion of the circle.

Answers

315

120

240

72

90

225

324

160

180

288

90

144

1. \_\_\_\_\_

2. \_\_\_\_\_

3. \_\_\_\_\_

4. \_\_\_\_\_

5. \_\_\_\_\_

6. \_\_\_\_\_

7. \_\_\_\_\_

8. \_\_\_\_\_

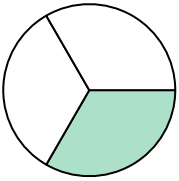
9. \_\_\_\_\_

10. \_\_\_\_\_

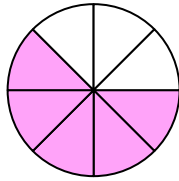
11. \_\_\_\_\_

12. \_\_\_\_\_

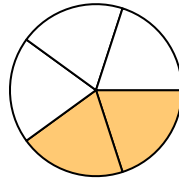
1)



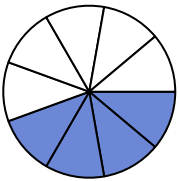
2)



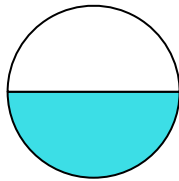
3)



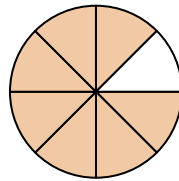
4)



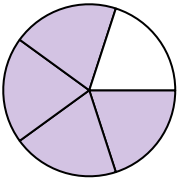
5)



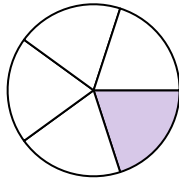
6)



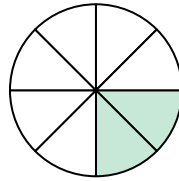
7)



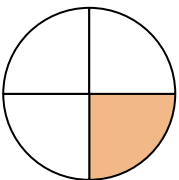
8)



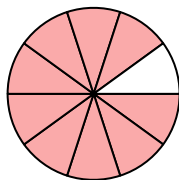
9)



10)



11)



12)

