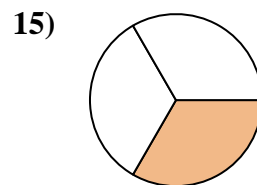
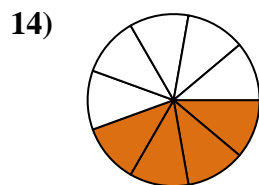
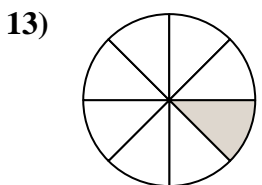
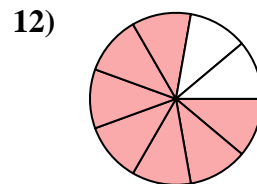
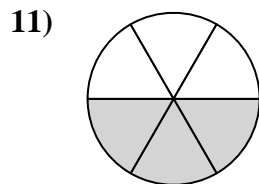
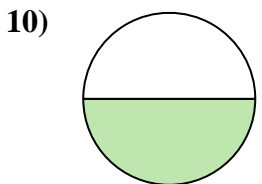
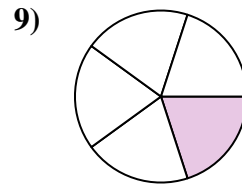
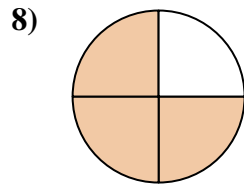
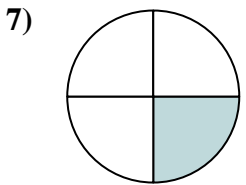
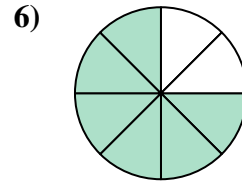
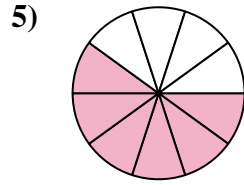
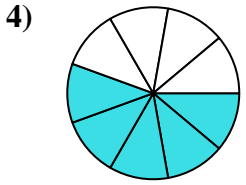
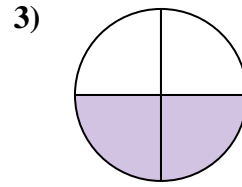
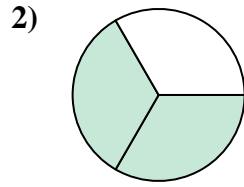
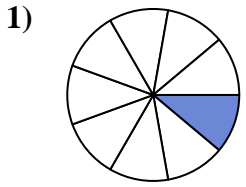




Find the angle (in degrees) of the shaded portion of the circle.

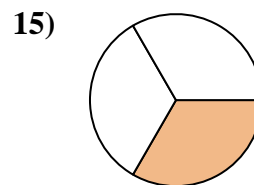
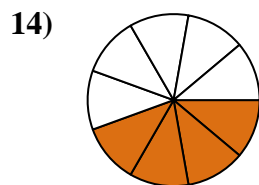
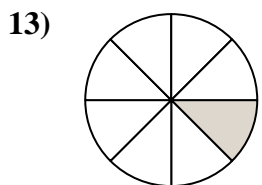
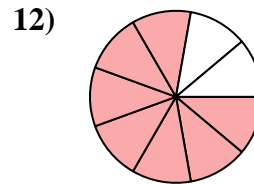
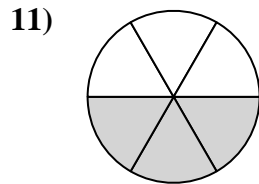
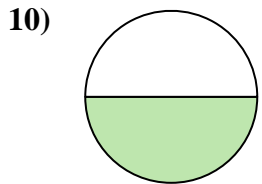
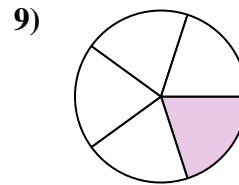
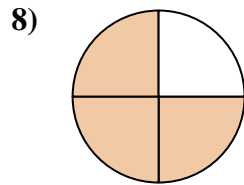
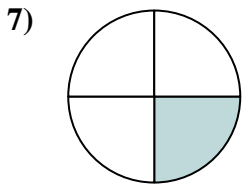
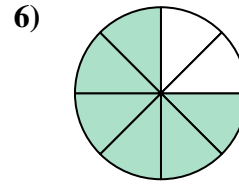
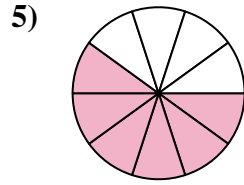
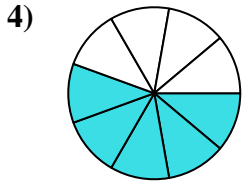
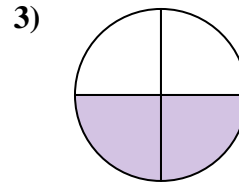
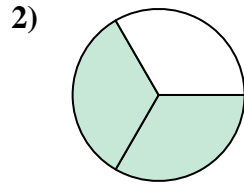
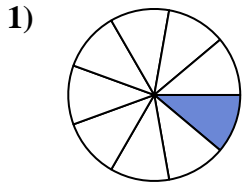
Answers



1. _____
2. _____
3. _____
4. _____
5. _____
6. _____
7. _____
8. _____
9. _____
10. _____
11. _____
12. _____
13. _____
14. _____
15. _____



Find the angle (in degrees) of the shaded portion of the circle.



Answers

1. 40

2. 240

3. 180

4. 200

5. 216

6. 270

7. 90

8. 270

9. 72

10. 180

11. 180

12. 280

13. 45

14. 160

15. 120



Find the angle (in degrees) of the shaded portion of the circle.

Answers

180

180

216

270

240

180

200

72

40

270

280

90

1. _____

2. _____

3. _____

4. _____

5. _____

6. _____

7. _____

8. _____

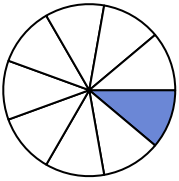
9. _____

10. _____

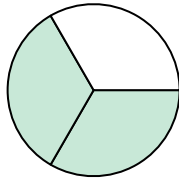
11. _____

12. _____

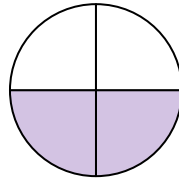
1)



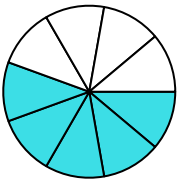
2)



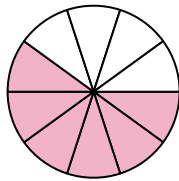
3)



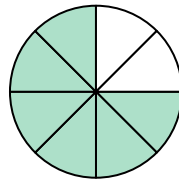
4)



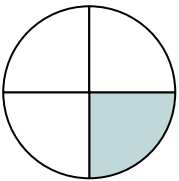
5)



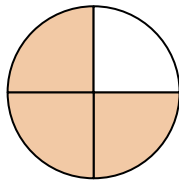
6)



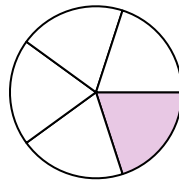
7)



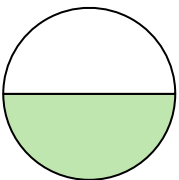
8)



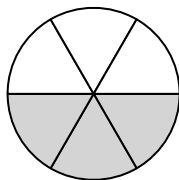
9)



10)



11)



12)

