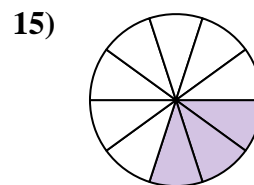
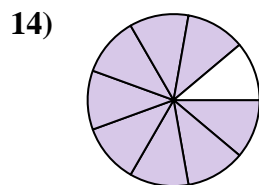
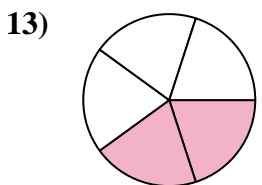
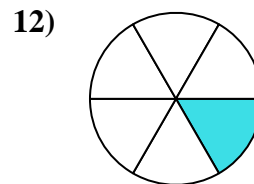
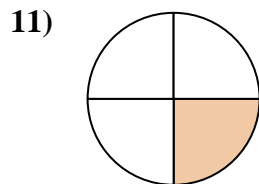
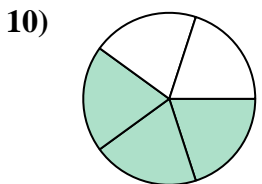
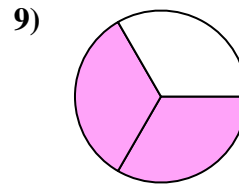
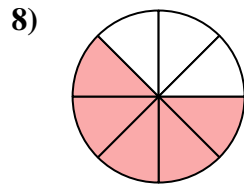
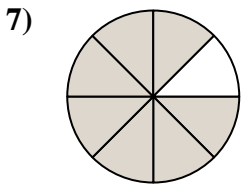
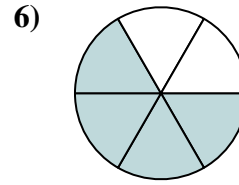
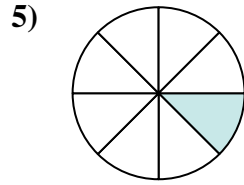
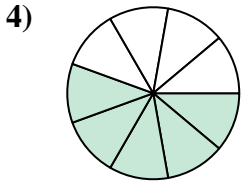
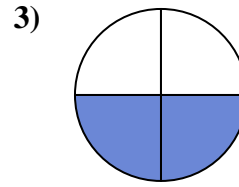
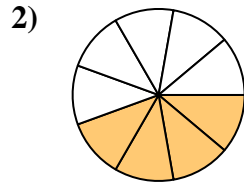
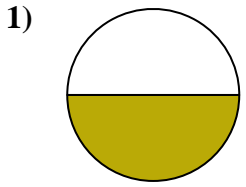




Find the angle (in degrees) of the shaded portion of the circle.

Answers

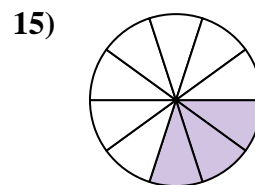
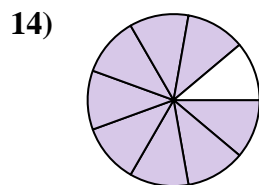
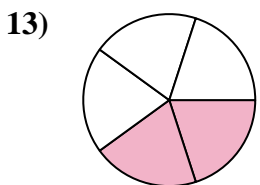
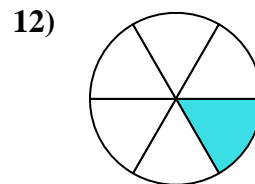
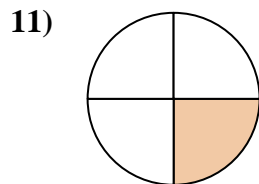
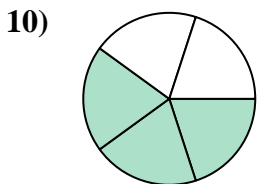
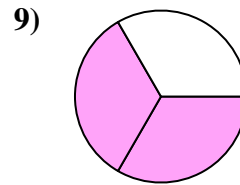
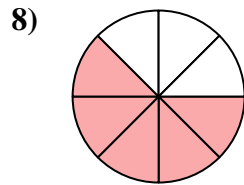
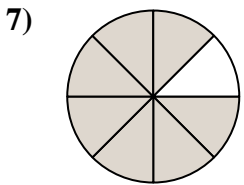
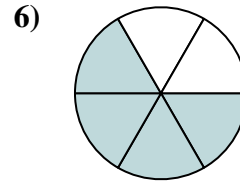
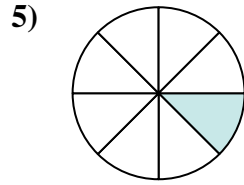
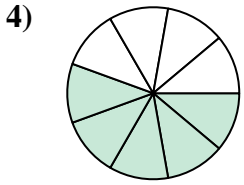
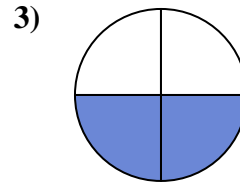
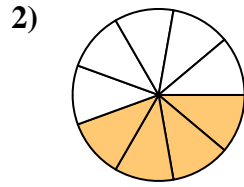
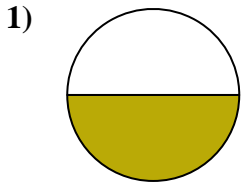


1. _____
2. _____
3. _____
4. _____
5. _____
6. _____
7. _____
8. _____
9. _____
10. _____
11. _____
12. _____
13. _____
14. _____
15. _____



Find the angle (in degrees) of the shaded portion of the circle.

Answers



1. 180

2. 160

3. 180

4. 200

5. 45

6. 240

7. 315

8. 225

9. 240

10. 216

11. 90

12. 60

13. 144

14. 320

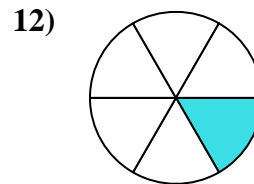
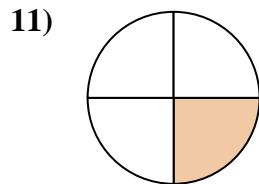
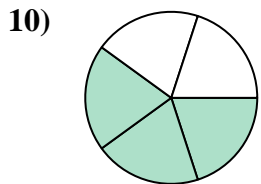
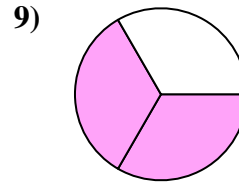
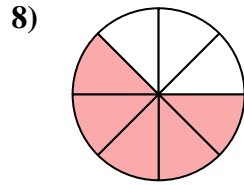
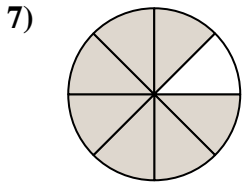
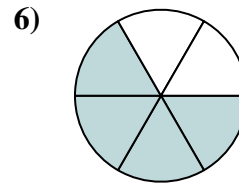
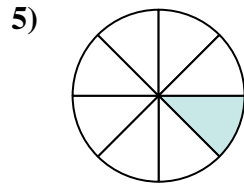
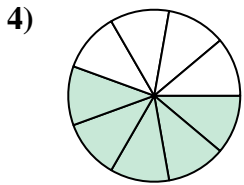
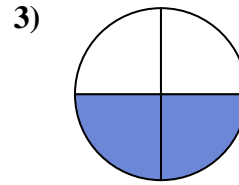
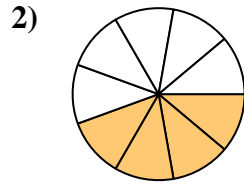
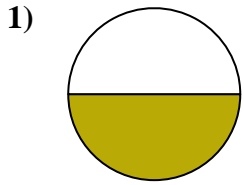
15. 108



Find the angle (in degrees) of the shaded portion of the circle.

Answers

| | | | | |
|-----|-----|-----|----|-----|
| 90 | 200 | 240 | 60 | 160 |
| 216 | 315 | 180 | 45 | 225 |
| 240 | 180 | | | |



1. _____
2. _____
3. _____
4. _____
5. _____
6. _____
7. _____
8. _____
9. _____
10. _____
11. _____
12. _____