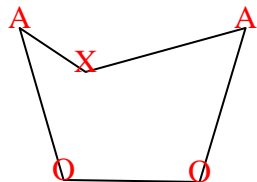




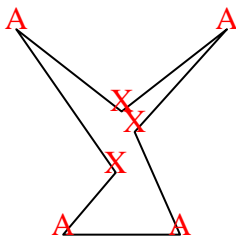


Count the number of Acute, Obtuse, Right and Reflex angles in each shape.

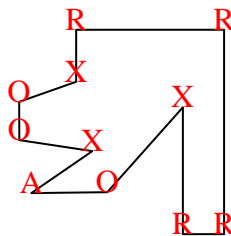
Ex)



1)



2)



Ex. 2 2 0 1

1. 4 0 0 3

2. 1 3 4 3

3. 4 1 0 3

4. 1 2 4 2

5. 0 2 3 0

6. 2 4 4 0

7. 2 2 1 2

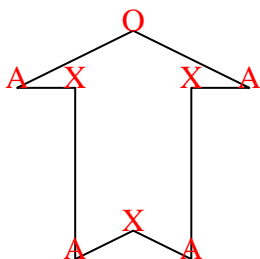
8. 1 2 1 0

9. 0 0 8 4

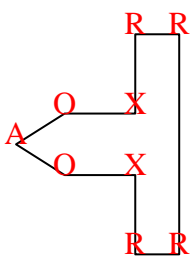
10. 5 0 0 5

11. 2 1 2 2

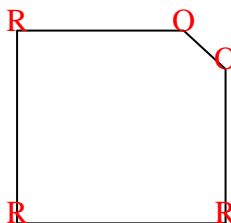
3)



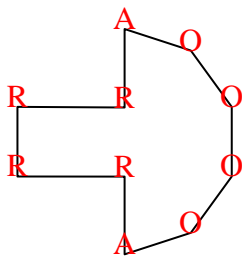
4)



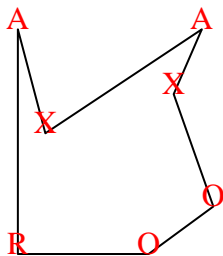
5)



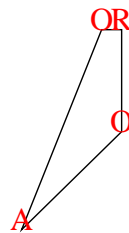
6)



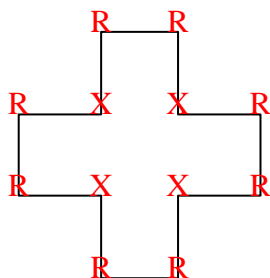
7)



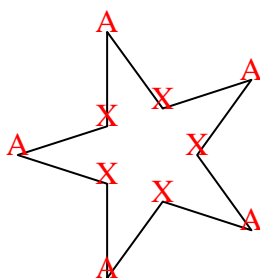
8)



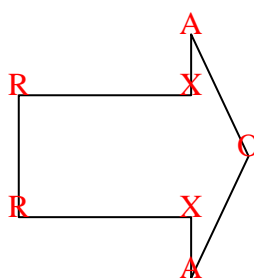
9)



10)



11)





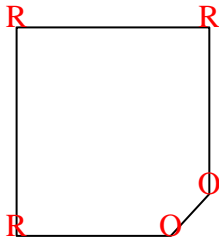




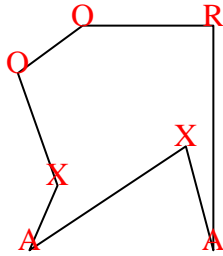


Count the number of Acute, Obtuse, Right and Reflex angles in each shape.


Ex)



1)



2)



Ex. 0 2 3 0

1. 2 2 1 2

2. 0 0 4 0

3. 2 2 1 1

4. 2 4 4 0

5. 2 1 2 2

6. 1 1 3 1

7. 4 1 0 3

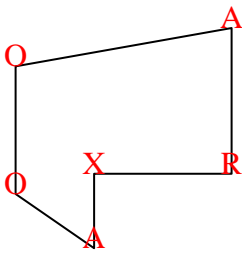
8. 1 3 4 3

9. 2 2 0 1

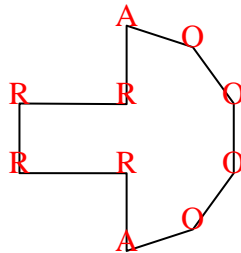
10. 2 1 1 1

11. 0 0 4 0

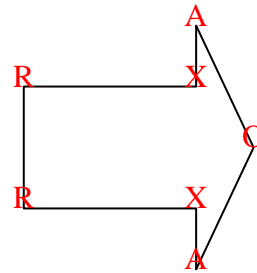
3)



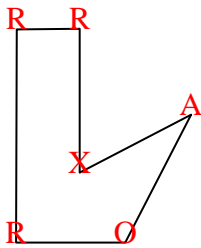
4)



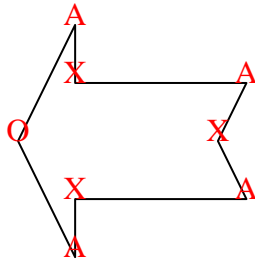
5)



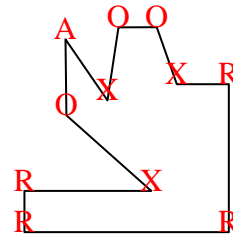
6)



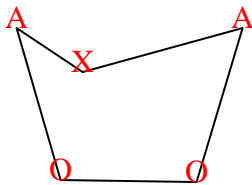
7)



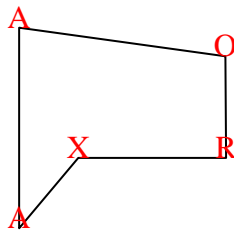
8)



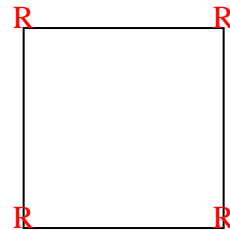
9)



10)



11)







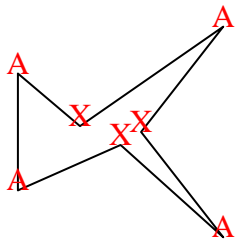




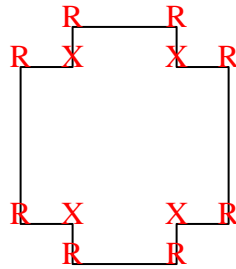


Count the number of Acute, Obtuse, Right and Reflex angles in each shape.

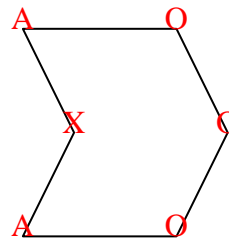
Ex)



1)



2)



Answers

Ex. 4 0 0 3

1. 0 0 8 4

2. 2 3 0 1

3. 2 2 0 0

4. 2 1 1 1

5. 2 1 4 4

6. 5 0 0 5

7. 0 3 2 0

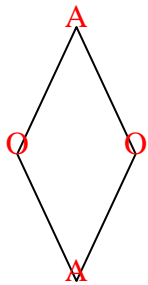
8. 4 2 0 4

9. 2 2 0 0

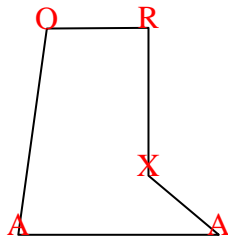
10. 0 0 4 0

11. 4 1 0 3

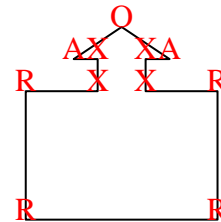
3)



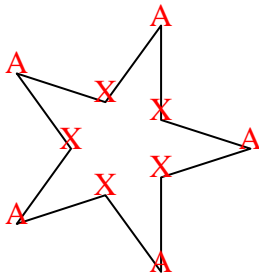
4)



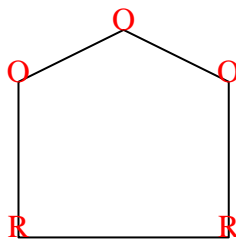
5)



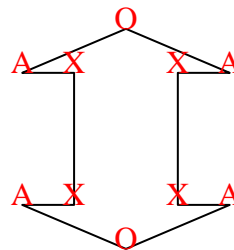
6)



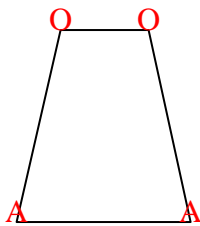
7)



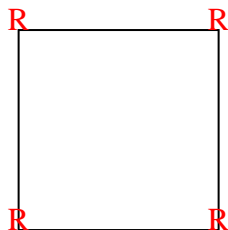
8)



9)



10)



11)

