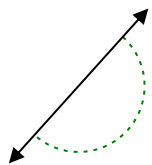




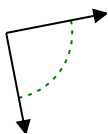
Determine if the angle shown is acute, obtuse, right or straight.

Answers

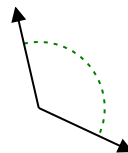
Ex)



1)



2)

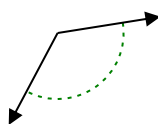


Ex. **straight**

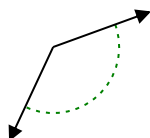
1. _____

2. _____

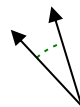
3)



4)



5)



3. _____

4. _____

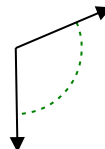
6)



7)



8)

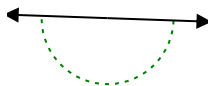


5. _____

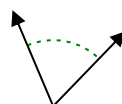
6. _____

7. _____

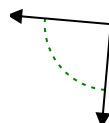
9)



10)



11)

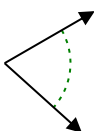


8. _____

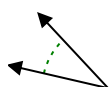
9. _____

10. _____

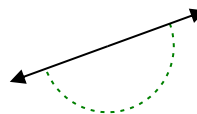
12)



13)



14)

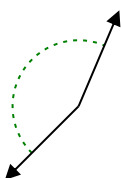


11. _____

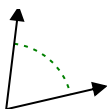
12. _____

13. _____

15)



16)



17)

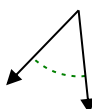


14. _____

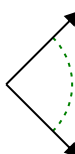
15. _____

16. _____

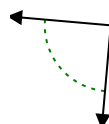
18)



19)



20)



17. _____

18. _____

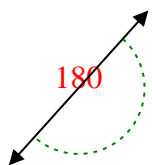
19. _____

20. _____

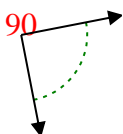


Determine if the angle shown is acute, obtuse, right or straight.

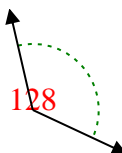
Ex)



1)



2)



Answers

Ex. **straight**

1. **right**

2. **obtuse**

3. **obtuse**

4. **obtuse**

5. **acute**

6. **obtuse**

7. **obtuse**

8. **obtuse**

9. **straight**

10. **acute**

11. **right**

12. **acute**

13. **acute**

14. **straight**

15. **obtuse**

16. **acute**

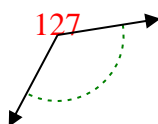
17. **acute**

18. **acute**

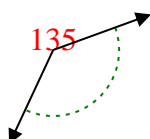
19. **right**

20. **right**

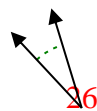
3)



4)



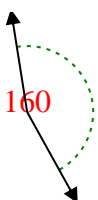
5)



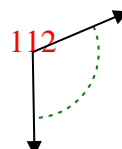
6)



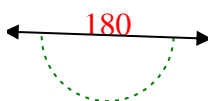
7)



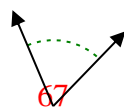
8)



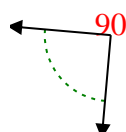
9)



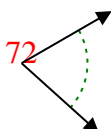
10)



11)



12)



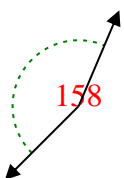
13)



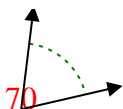
14)



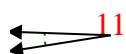
15)



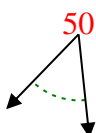
16)



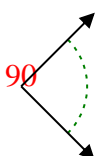
17)



18)



19)



20)

