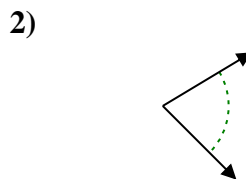

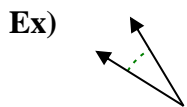




Determine if the angle shown is acute, obtuse, right or straight.

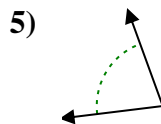
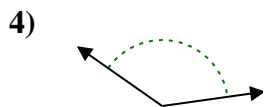
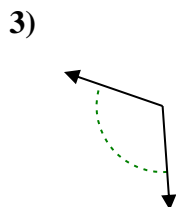
Answers



Ex. **acute**

1. _____

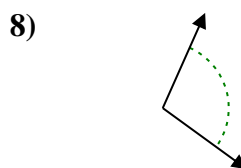
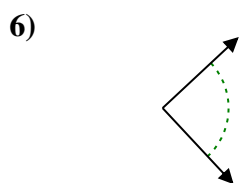
2. _____



3. _____

4. _____

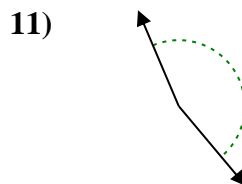
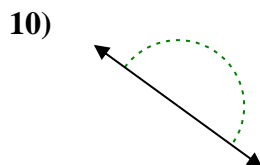
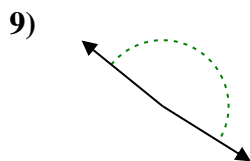
5. _____



6. _____

7. _____

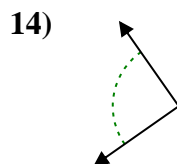
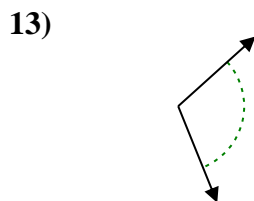
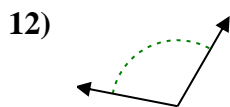
8. _____



9. _____

10. _____

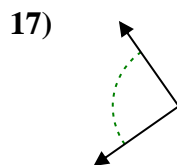
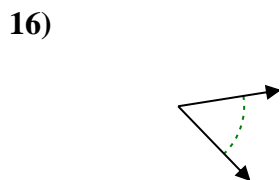
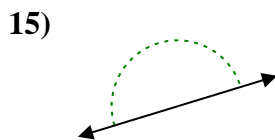
11. _____



12. _____

13. _____

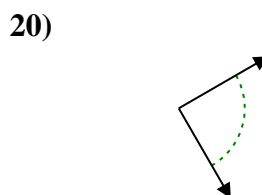
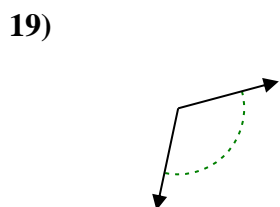
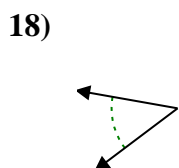
14. _____



15. _____

16. _____

17. _____



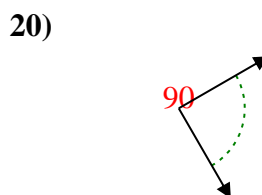
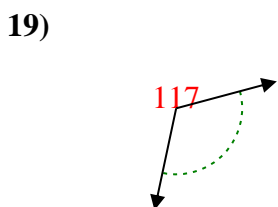
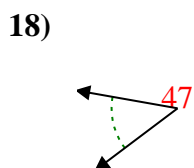
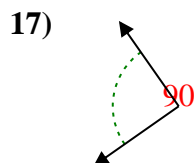
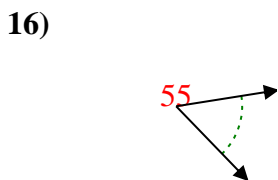
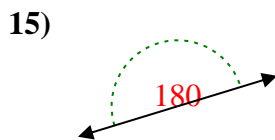
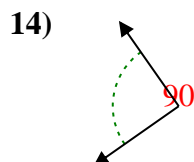
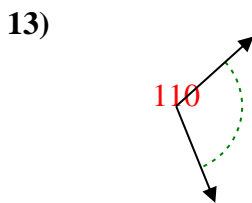
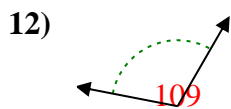
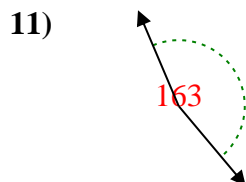
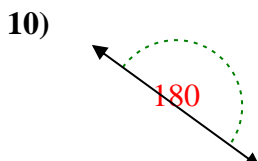
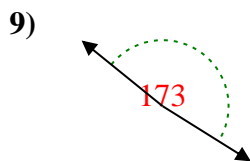
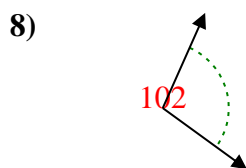
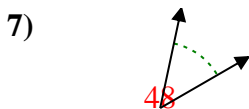
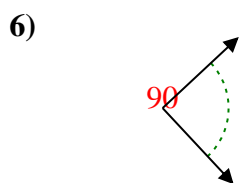
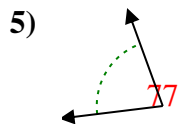
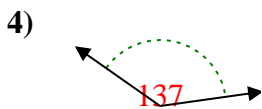
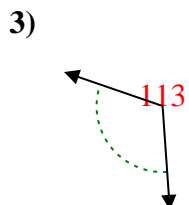
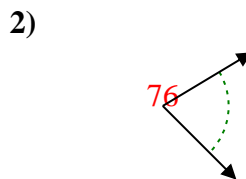
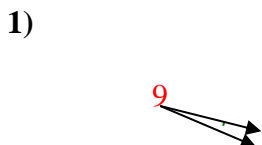
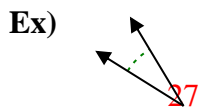
18. _____

19. _____

20. _____



Determine if the angle shown is acute, obtuse, right or straight.



Answers

Ex. **acute**

1. **acute**

2. **acute**

3. **obtuse**

4. **obtuse**

5. **acute**

6. **right**

7. **acute**

8. **obtuse**

9. **obtuse**

10. **straight**

11. **obtuse**

12. **obtuse**

13. **obtuse**

14. **right**

15. **straight**

16. **acute**

17. **right**

18. **acute**

19. **obtuse**

20. **right**