



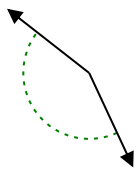
Determine if the angle shown is acute, obtuse, right or straight.

Answers

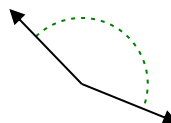
Ex)



1)



2)

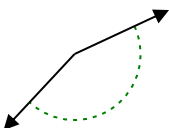


Ex. **straight**

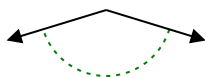
1. \_\_\_\_\_

2. \_\_\_\_\_

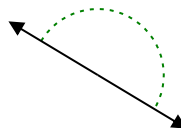
3)



4)



5)



3. \_\_\_\_\_

4. \_\_\_\_\_

5. \_\_\_\_\_

6)



7)



8)

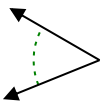


6. \_\_\_\_\_

7. \_\_\_\_\_

8. \_\_\_\_\_

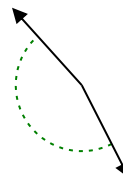
9)



10)



11)



9. \_\_\_\_\_

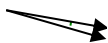
10. \_\_\_\_\_

11. \_\_\_\_\_

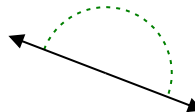
12)



13)



14)

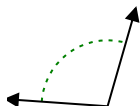


12. \_\_\_\_\_

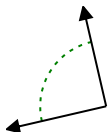
13. \_\_\_\_\_

14. \_\_\_\_\_

15)



16)



17)



15. \_\_\_\_\_

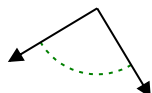
16. \_\_\_\_\_

17. \_\_\_\_\_

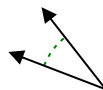
18)



19)



20)



18. \_\_\_\_\_

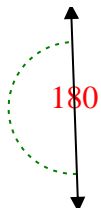
19. \_\_\_\_\_

20. \_\_\_\_\_

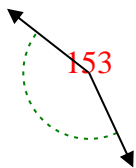


Determine if the angle shown is acute, obtuse, right or straight.

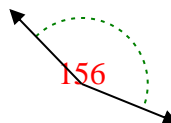
Ex)



1)



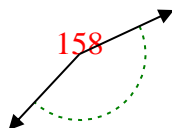
2)



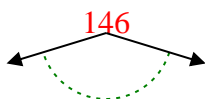
Answers

Ex. **straight**

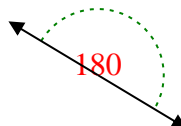
3)



4)



5)



1. **obtuse**

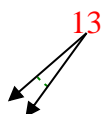
2. **obtuse**

3. **obtuse**

4. **obtuse**

5. **straight**

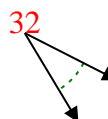
6)



7)



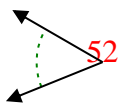
8)



6. **acute**

7. **acute**

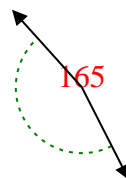
9)



10)



11)



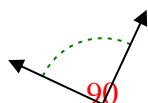
8. **acute**

9. **acute**

10. **acute**

11. **obtuse**

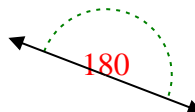
12)



13)



14)

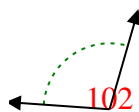


12. **right**

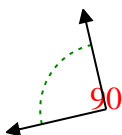
13. **acute**

14. **straight**

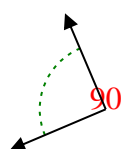
15)



16)



17)



15. **obtuse**

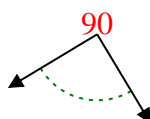
16. **right**

17. **right**

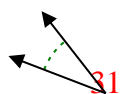
18)



19)



20)



18. **obtuse**

19. **right**

20. **acute**