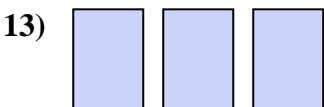
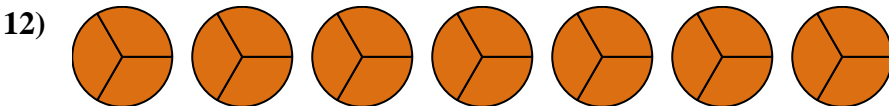
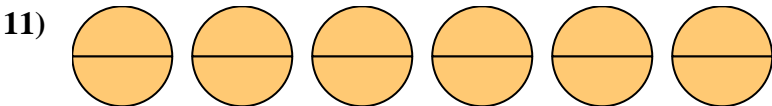
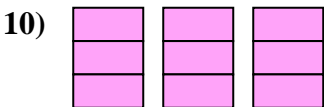
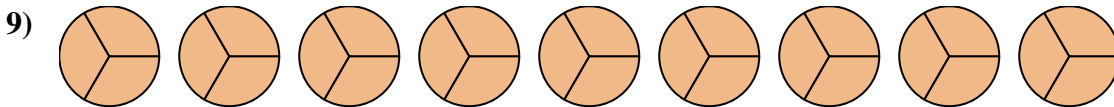
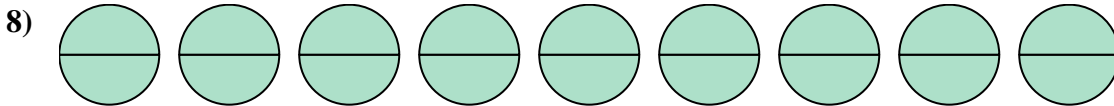
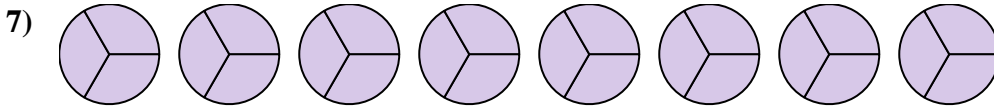
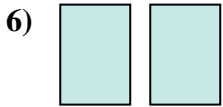
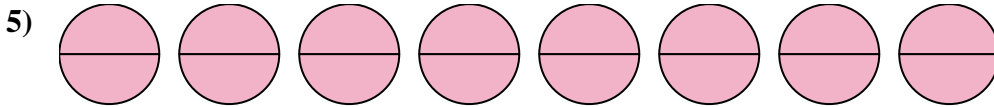


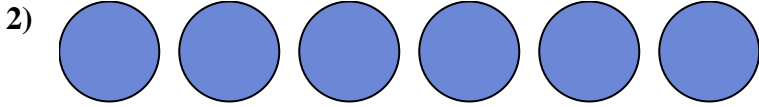
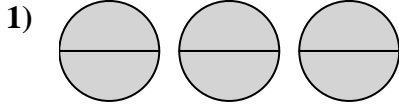




Write the shaded amount as a fraction.



Answers

1. \_\_\_\_\_

2. \_\_\_\_\_

3. \_\_\_\_\_

4. \_\_\_\_\_

5. \_\_\_\_\_

6. \_\_\_\_\_

7. \_\_\_\_\_

8. \_\_\_\_\_

9. \_\_\_\_\_

10. \_\_\_\_\_

11. \_\_\_\_\_

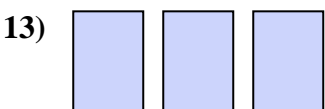
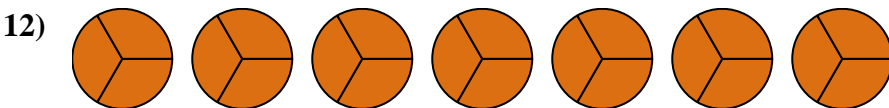
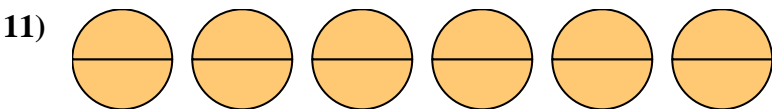
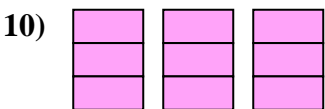
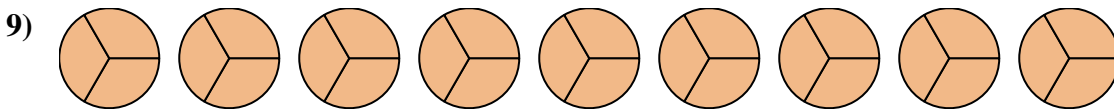
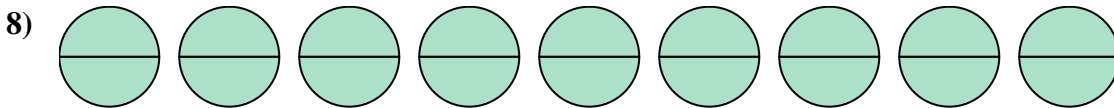
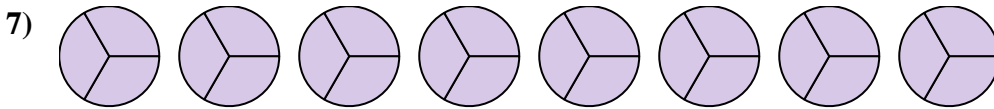
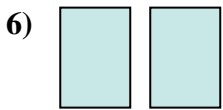
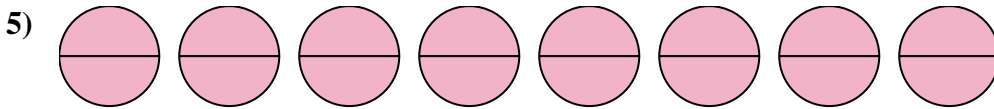

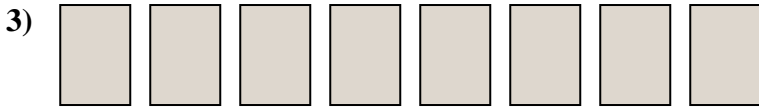
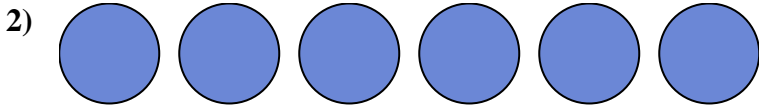
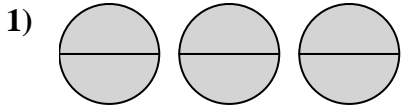
12. \_\_\_\_\_

13. \_\_\_\_\_

14. \_\_\_\_\_



Write the shaded amount as a fraction.



Answers

1.  $\frac{6}{2}$

2.  $\frac{6}{1}$

3.  $\frac{8}{1}$

4.  $\frac{4}{1}$

5.  $\frac{16}{2}$

6.  $\frac{2}{1}$

7.  $\frac{24}{3}$

8.  $\frac{18}{2}$

9.  $\frac{27}{3}$

10.  $\frac{9}{3}$

11.  $\frac{12}{2}$

12.  $\frac{21}{3}$

13.  $\frac{3}{1}$

14.  $\frac{6}{3}$