



Solve each problem using a tape diagram.

Answers

1) Robin's hair was 45 centimeters long. If she cut off 30 centimeters, how long is her hair now?

1. _____

2) At the zoo a cage had 51 snakes. If 18 were hiding, how many snakes were not hiding?

2. _____

3) Katie had 30 pieces of paper in her folder. She used 17 pieces. How many pieces does she have now?

3. _____

4. _____

5. _____

4) George had 41 cherries. He ate 21 of them. How many cherries does George have left?

6. _____

7. _____

5) A chef has 62 cherries. He sets aside 18 of them to make a pie. How many cherries would he still have?

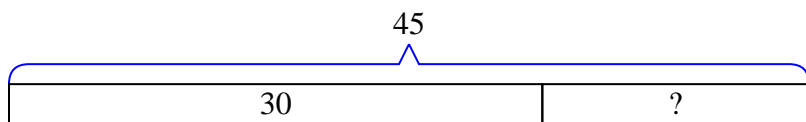
6) At the arcade Oliver had won 92 tickets total. He won 47 of them while playing Whack-A-Mole and the rest while playing Stop-The-Light. How many tickets did Oliver win playing Stop-The-Light?

7) A pet store had 67 gerbils. If they sold 22 of them, how many would they have left?

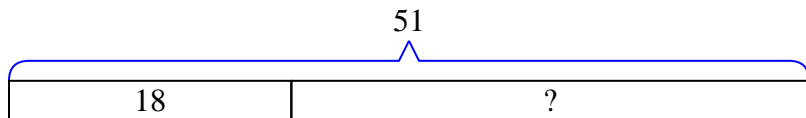


Solve each problem using a tape diagram.

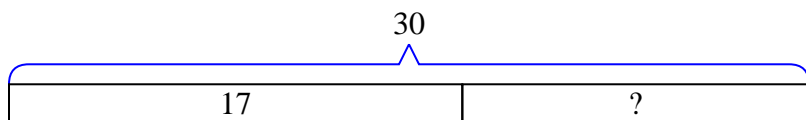
- 1) Robin's hair was 45 centimeters long. If she cut off 30 centimeters, how long is her hair now?



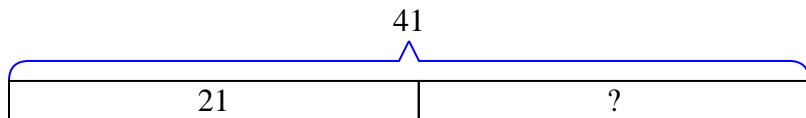
- 2) At the zoo a cage had 51 snakes. If 18 were hiding, how many snakes were not hiding?



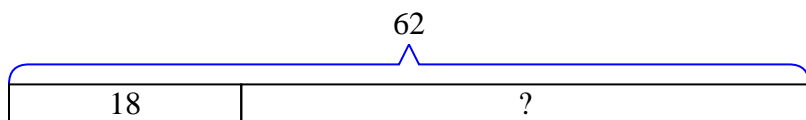
- 3) Katie had 30 pieces of paper in her folder. She used 17 pieces. How many pieces does she have now?



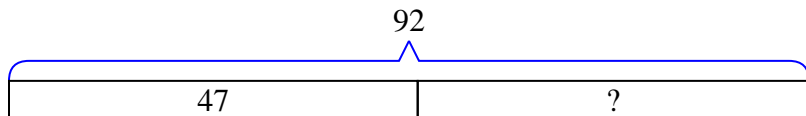
- 4) George had 41 cherries. He ate 21 of them. How many cherries does George have left?



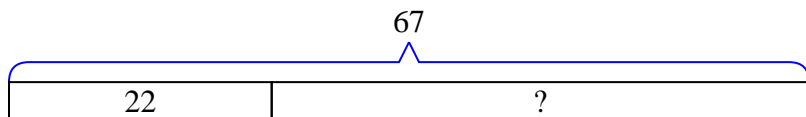
- 5) A chef has 62 cherries. He sets aside 18 of them to make a pie. How many cherries would he still have?



- 6) At the arcade Oliver had won 92 tickets total. He won 47 of them while playing Whack-A-Mole and the rest while playing Stop-The-Light. How many tickets did Oliver win playing Stop-The-Light?



- 7) A pet store had 67 gerbils. If they sold 22 of them, how many would they have left?

Answers1. 152. 333. 134. 205. 446. 457. 45