



Solve each problem using a tape diagram.

Answers

1) At the arcade Kaleb had won 48 tickets total. He won 32 of them while playing Whack-A-Mole and the rest while playing Stop-The-Light. How many tickets did Kaleb win playing Stop-The-Light?

1. _____

2) Lana had 64 photos on her computer. She deleted 50. How many photos does she have left?

2. _____

3) A farmer had 80 tomatoes in his garden. If he picked 42 of them, how many would he have left in the garden?

3. _____

4) George has \$58. He decides to spend \$13 on new video game. How much money would he have left?

4. _____

5) A museum had 76 paintings. If they got rid of 36 of them, how many pictures would they have left?

5. _____

6) A fast food restaurant sold 89 ice cream cones. They used waffle cones on 41 of them and the rest were sugar cones. How many sugar cones did they use?

6. _____

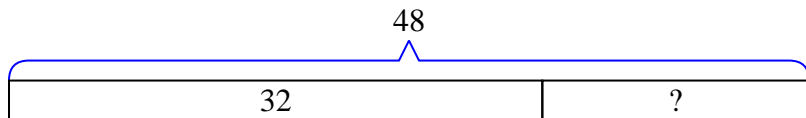
7) A baker made 54 cakes. 22 were chocolate and the rest were vanilla. How many cakes were vanilla?

7. _____

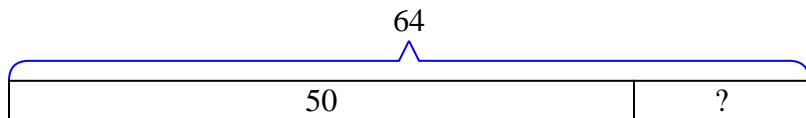


Solve each problem using a tape diagram.

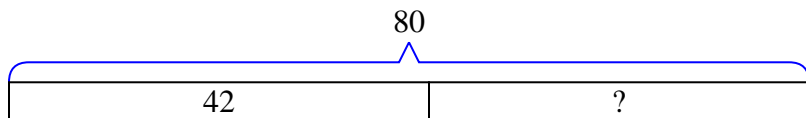
- 1) At the arcade Kaleb had won 48 tickets total. He won 32 of them while playing Whack-A-Mole and the rest while playing Stop-The-Light. How many tickets did Kaleb win playing Stop-The-Light?



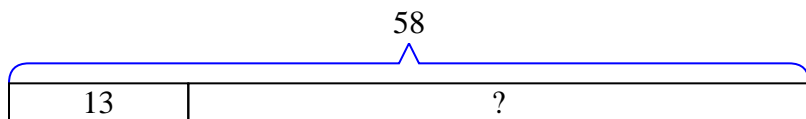
- 2) Lana had 64 photos on her computer. She deleted 50. How many photos does she have left?



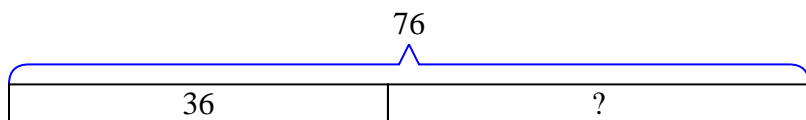
- 3) A farmer had 80 tomatoes in his garden. If he picked 42 of them, how many would he have left in the garden?



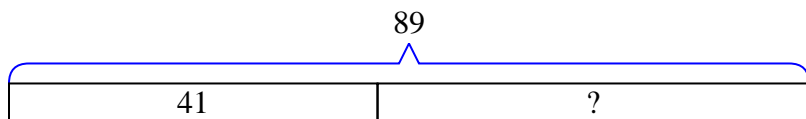
- 4) George has \$58. He decides to spend \$13 on new video game. How much money would he have left?



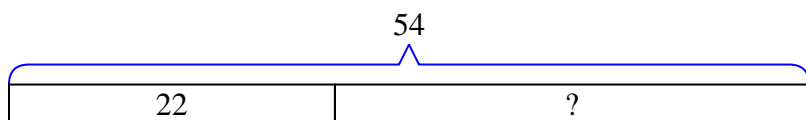
- 5) A museum had 76 paintings. If they got rid of 36 of them, how many pictures would they have left?



- 6) A fast food restaurant sold 89 ice cream cones. They used waffle cones on 41 of them and the rest were sugar cones. How many sugar cones did they use?



- 7) A baker made 54 cakes. 22 were chocolate and the rest were vanilla. How many cakes were vanilla?

**Answers**1. 162. 143. 384. 455. 406. 487. 32