



Solve each problem using a tape diagram.

Answers

1) At the arcade John had won 40 tickets total. He won 22 of them while playing Whack-A-Mole and the rest while playing Stop-The-Light. How many tickets did John win playing Stop-The-Light?

1. _____

2) There were 55 people on the train. At the first stop 25 people got off. How many people are left on the train?

2. _____

3) Billy owned 64 video games for his Playstation and Xbox. 22 of the games were for Xbox. How many games does Billy have for playstation?

3. _____

4. _____

5. _____

4) A waiter has 86 customers. If 36 left, how many customers would the waiter still have?

6. _____

7. _____

5) Cody had 53 apps on his phone. He deleted 39 of them. How many apps does Cody have left?

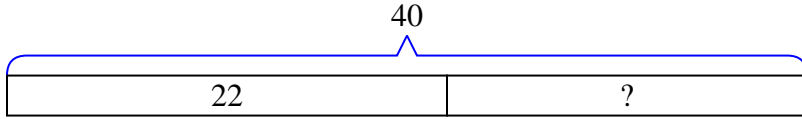
6) For a party Kaleb bought 59 cupcakes. If 36 were eaten, how many cupcakes would Kaleb have left?

7) Maria had 33 3DS games. If she gave 19 to her friend, how many would she have left?

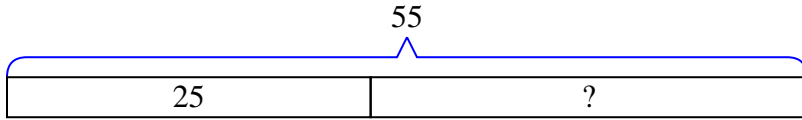


Solve each problem using a tape diagram.

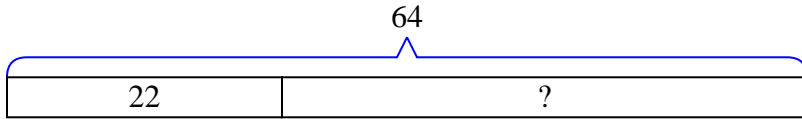
- 1) At the arcade John had won 40 tickets total. He won 22 of them while playing Whack-A-Mole and the rest while playing Stop-The-Light. How many tickets did John win playing Stop-The-Light?



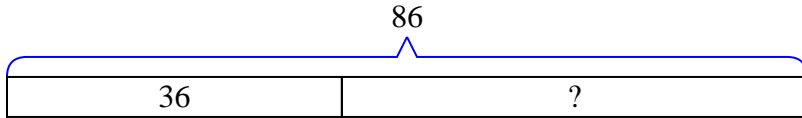
- 2) There were 55 people on the train. At the first stop 25 people got off. How many people are left on the train?



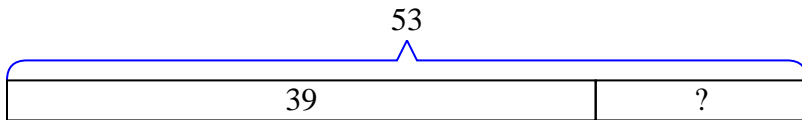
- 3) Billy owned 64 video games for his Playstation and Xbox. 22 of the games were for Xbox. How many games does Billy have for playstation?



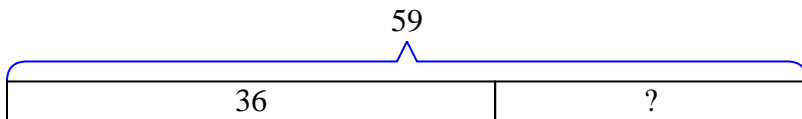
- 4) A waiter has 86 customers. If 36 left, how many customers would the waiter still have?



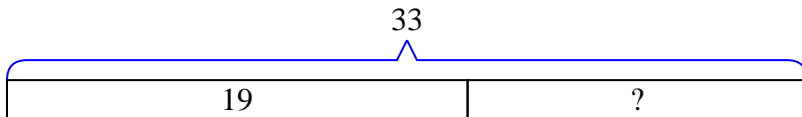
- 5) Cody had 53 apps on his phone. He deleted 39 of them. How many apps does Cody have left?



- 6) For a party Kaleb bought 59 cupcakes. If 36 were eaten, how many cupcakes would Kaleb have left?



- 7) Maria had 33 3DS games. If she gave 19 to her friend, how many would she have left?



Answers

1. 18

2. 30

3. 42

4. 50

5. 14

6. 23

7. 14