



Solve each problem using a tape diagram.

Answers

Ex) Maria was trying to determine the weight of a small rock. She determined the small rock was $\frac{1}{2}$ as heavy as a medium rock. The medium rock was $\frac{2}{6}$ as heavy as a large rock. The large rock weighed 450 grams. How heavy was the small rock?

Ex. 75

1) Faye was looking at her Nintendo collection. She had 456 wiiU games. She had $\frac{2}{6}$ as many DS games and $\frac{1}{2}$ as many 3ds games as DS games. How many 3ds games does she have?

1. _____

2. _____

3. _____

4. _____

2) On Super Bowl Sunday a store sold 480 sodas. They sold $\frac{5}{6}$ as many bags of chips. They also sold $\frac{3}{5}$ as many jars of dip as bags of chips. How many jars of dip did they sell?

3) Two years ago the fair had $\frac{1}{3}$ as many people as 1 year ago. 1 year ago the fair had $\frac{3}{10}$ as many people as this year. This year the fair had 380 people. How many people did the fair have 2 years ago?

4) At the school fundraiser Adam earned \$285. Bianca earned $\frac{2}{5}$ as much as Adam. And Cathy earned $\frac{1}{2}$ as much as Bianca. How much did Cathy earn?



Solve each problem using a tape diagram.

Ex) Maria was trying to determine the weight of a small rock. She determined the small rock was $\frac{1}{2}$ as heavy as a medium rock. The medium rock was $\frac{2}{6}$ as heavy as a large rock. The large rock weighed 450 grams. How heavy was the small rock?

Answers

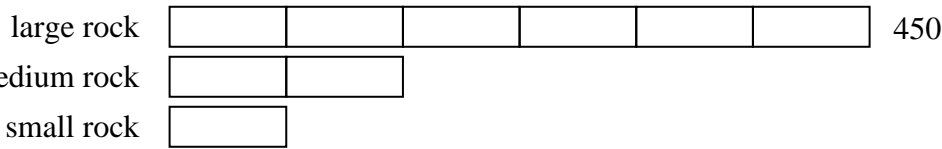
Ex. 75

1. 76

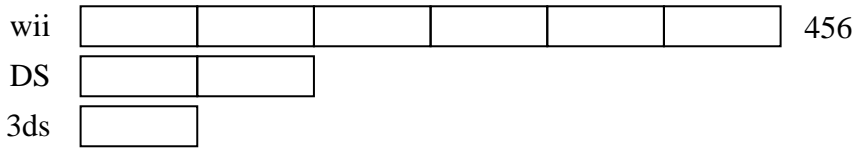
2. 240

3. 38

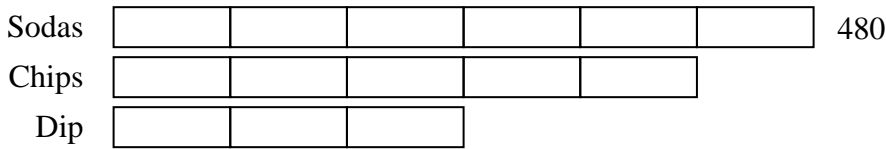
4. 57



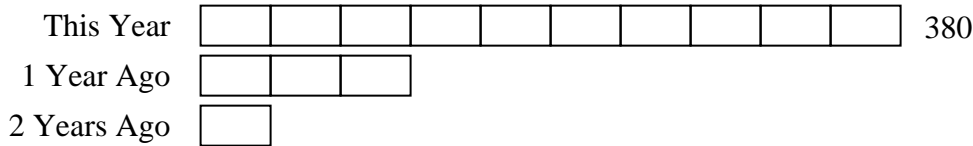
1) Faye was looking at her Nintendo collection. She had 456 wiiU games. She had $\frac{2}{6}$ as many DS games and $\frac{1}{2}$ as many 3ds games as DS games. How many 3ds games does she have?



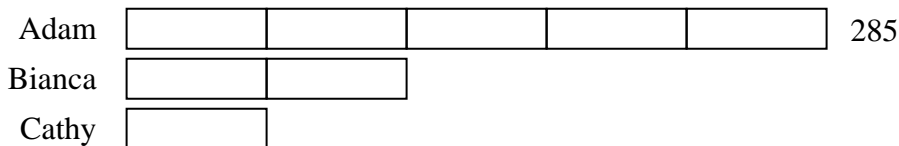
2) On Super Bowl Sunday a store sold 480 sodas. They sold $\frac{5}{6}$ as many bags of chips. They also sold $\frac{3}{5}$ as many jars of dip as bags of chips. How many jars of dip did they sell?



3) Two years ago the fair had $\frac{1}{3}$ as many people as 1 year ago. 1 year ago the fair had $\frac{3}{10}$ as many people as this year. This year the fair had 380 people. How many people did the fair have 2 years ago?



4) At the school fundraiser Adam earned \$285. Bianca earned $\frac{2}{5}$ as much as Adam. And Cathy earned $\frac{1}{2}$ as much as Bianca. How much did Cathy earn?





Solve each problem using a tape diagram.

Answers

Ex) On Super Bowl Sunday a store sold 155 sodas. They sold $\frac{4}{5}$ as many bags of chips. They also sold $\frac{2}{4}$ as many jars of dip as bags of chips. How many jars of dip did they sell?

Ex. 62

1. _____

2. _____

3. _____

4. _____

1) Haley was looking at her Nintendo collection. She had 200 wiiU games. She had $\frac{2}{8}$ as many DS games and $\frac{1}{2}$ as many 3ds games as DS games. How many 3ds games does she have?

2) At the school fundraiser Adam earned \$465. Bianca earned $\frac{2}{5}$ as much as Adam. And Cathy earned $\frac{1}{2}$ as much as Bianca. How much did Cathy earn?

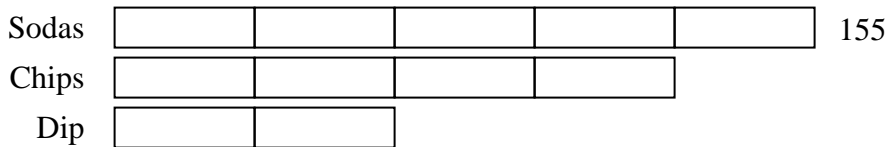
3) Two years ago the fair had $\frac{1}{2}$ as many people as 1 year ago. 1 year ago the fair had $\frac{2}{5}$ as many people as this year. This year the fair had 465 people. How many people did the fair have 2 years ago?

4) A chef was ordering vegetables for his restaurant. He order \$96 worth of potatoes. He also spent $\frac{4}{6}$ as much on tomatoes. Finally he spent $\frac{2}{4}$ as much on green beans as he did on tomatoes. How much did he spend on green beans?

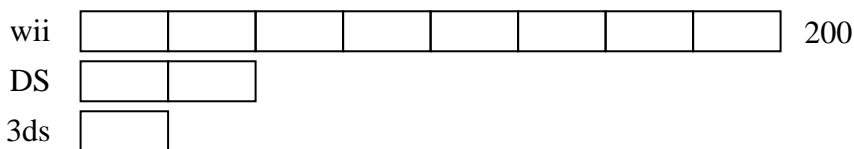


Solve each problem using a tape diagram.

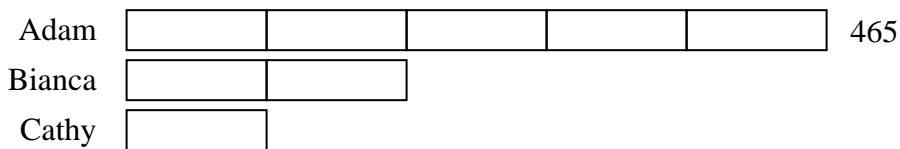
Ex) On Super Bowl Sunday a store sold 155 sodas. They sold $\frac{4}{5}$ as many bags of chips. They also sold $\frac{2}{4}$ as many jars of dip as bags of chips. How many jars of dip did they sell?



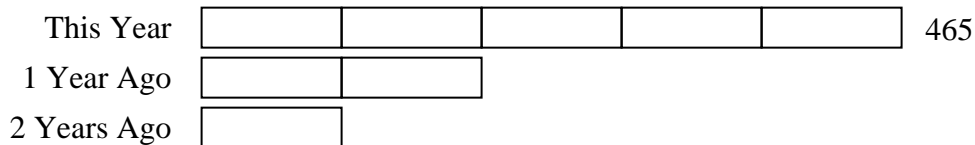
1) Haley was looking at her Nintendo collection. She had 200 wiiU games. She had $\frac{2}{8}$ as many DS games and $\frac{1}{2}$ as many 3ds games as DS games. How many 3ds games does she have?



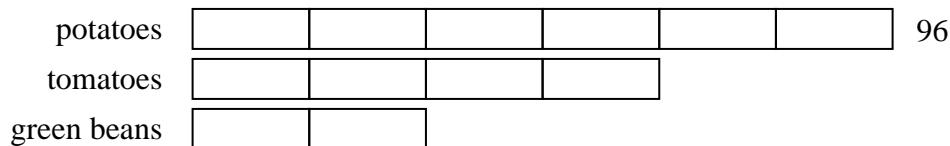
2) At the school fundraiser Adam earned \$465. Bianca earned $\frac{2}{5}$ as much as Adam. And Cathy earned $\frac{1}{2}$ as much as Bianca. How much did Cathy earn?



3) Two years ago the fair had $\frac{1}{2}$ as many people as 1 year ago. 1 year ago the fair had $\frac{2}{5}$ as many people as this year. This year the fair had 465 people. How many people did the fair have 2 years ago?



4) A chef was ordering vegetables for his restaurant. He order \$96 worth of potatoes. He also spent $\frac{4}{6}$ as much on tomatoes. Finally he spent $\frac{2}{4}$ as much on green beans as he did on tomatoes. How much did he spend on green beans?



Answers

Ex. 62

1. 25

2. 93

3. 93

4. 32



Solve each problem using a tape diagram.

Answers

Ex) A chef was ordering vegetables for his restaurant. He order \$801 worth of potatoes. He also spent $\frac{7}{9}$ as much on tomatoes. Finally he spent $\frac{6}{7}$ as much on green beans as he did on tomatoes. How much did he spend on green beans?

Ex. 534

1) On Super Bowl Sunday a store sold 294 sodas. They sold $\frac{2}{7}$ as many bags of chips. They also sold $\frac{1}{2}$ as many jars of dip as bags of chips. How many jars of dip did they sell?

1. _____

2. _____

3. _____

4. _____

2) Olivia was looking at her Nintendo collection. She had 581 wiiU games. She had $\frac{2}{7}$ as many DS games and $\frac{1}{2}$ as many 3ds games as DS games. How many 3ds games does she have?

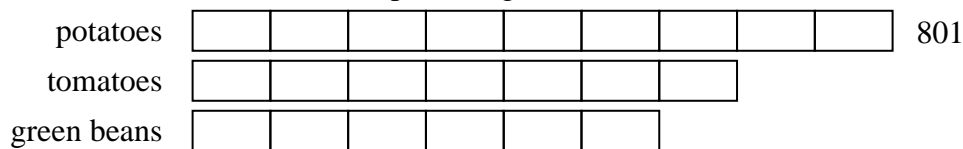
3) At the school fundraiser Adam earned \$552. Bianca earned $\frac{2}{6}$ as much as Adam. And Cathy earned $\frac{1}{2}$ as much as Bianca. How much did Cathy earn?

4) Lana was trying to determine the weight of a small rock. She determined the small rock was $\frac{3}{4}$ as heavy as a medium rock. The medium rock was $\frac{4}{8}$ as heavy as a large rock. The large rock weighed 144 grams. How heavy was the small rock?

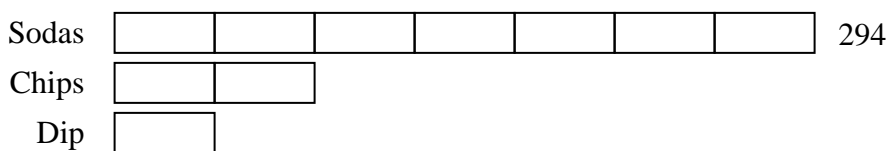


Solve each problem using a tape diagram.

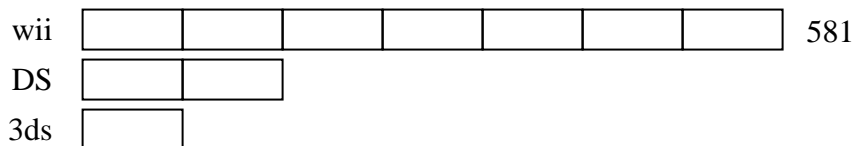
Ex) A chef was ordering vegetables for his restaurant. He order \$801 worth of potatoes. He also spent $\frac{7}{9}$ as much on tomatoes. Finally he spent $\frac{6}{7}$ as much on green beans as he did on tomatoes. How much did he spend on green beans?



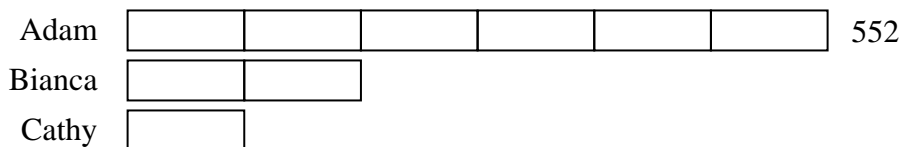
1) On Super Bowl Sunday a store sold 294 sodas. They sold $\frac{2}{7}$ as many bags of chips. They also sold $\frac{1}{2}$ as many jars of dip as bags of chips. How many jars of dip did they sell?



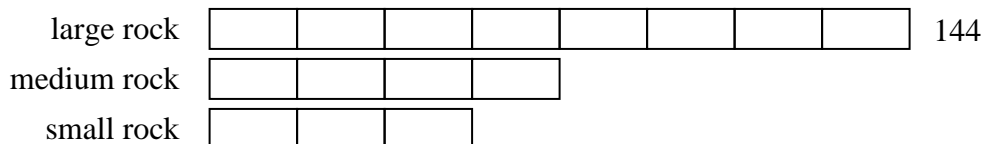
2) Olivia was looking at her Nintendo collection. She had 581 wiiU games. She had $\frac{2}{7}$ as many DS games and $\frac{1}{2}$ as many 3ds games as DS games. How many 3ds games does she have?



3) At the school fundraiser Adam earned \$552. Bianca earned $\frac{2}{6}$ as much as Adam. And Cathy earned $\frac{1}{2}$ as much as Bianca. How much did Cathy earn?



4) Lana was trying to determine the weight of a small rock. She determined the small rock was $\frac{3}{4}$ as heavy as a medium rock. The medium rock was $\frac{4}{8}$ as heavy as a large rock. The large rock weighed 144 grams. How heavy was the small rock?



Answers

Ex. 534

1. 42

2. 83

3. 92

4. 54



Solve each problem using a tape diagram.

Answers

Ex) A chef was ordering vegetables for his restaurant. He order \$630 worth of potatoes. He also spent $\frac{6}{10}$ as much on tomatoes. Finally he spent $\frac{4}{6}$ as much on green beans as he did on tomatoes. How much did he spend on green beans?

Ex. 252

1) On Super Bowl Sunday a store sold 276 sodas. They sold $\frac{5}{6}$ as many bags of chips. They also sold $\frac{4}{5}$ as many jars of dip as bags of chips. How many jars of dip did they sell?

1. _____

2. _____

3. _____

4. _____

2) Lana was trying to determine the weight of a small rock. She determined the small rock was $\frac{1}{6}$ as heavy as a medium rock. The medium rock was $\frac{6}{8}$ as heavy as a large rock. The large rock weighed 672 grams. How heavy was the small rock?


3) At the school fundraiser Adam earned \$455. Bianca earned $\frac{5}{7}$ as much as Adam. And Cathy earned $\frac{1}{5}$ as much as Bianca. How much did Cathy earn?

4) Two years ago the fair had $\frac{3}{4}$ as many people as 1 year ago. 1 year ago the fair had $\frac{4}{5}$ as many people as this year. This year the fair had 305 people. How many people did the fair have 2 years ago?



Solve each problem using a tape diagram.

Ex) A chef was ordering vegetables for his restaurant. He order \$630 worth of potatoes. He also spent $\frac{6}{10}$ as much on tomatoes. Finally he spent $\frac{4}{6}$ as much on green beans as he did on tomatoes. How much did he spend on green beans?



Answers

Ex. 252

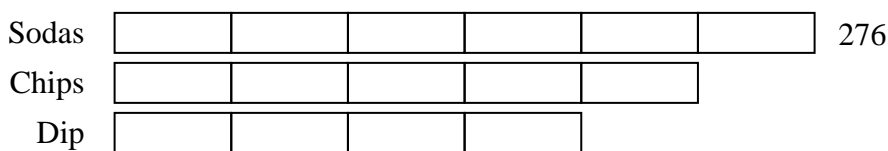
1. 184

2. 84

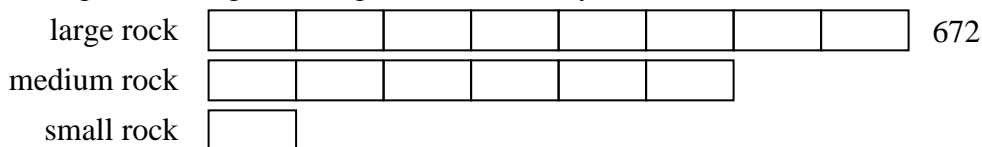
3. 65

4. 183

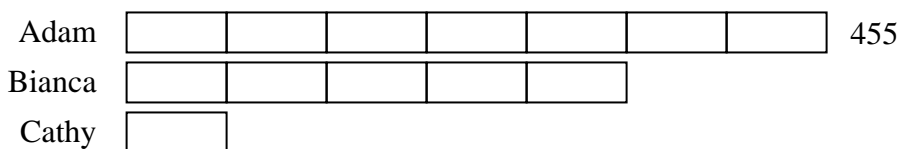
1) On Super Bowl Sunday a store sold 276 sodas. They sold $\frac{5}{6}$ as many bags of chips. They also sold $\frac{4}{5}$ as many jars of dip as bags of chips. How many jars of dip did they sell?



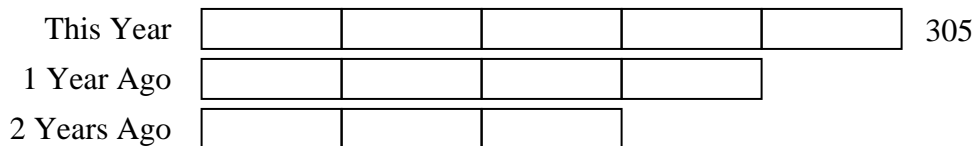
2) Lana was trying to determine the weight of a small rock. She determined the small rock was $\frac{1}{6}$ as heavy as a medium rock. The medium rock was $\frac{6}{8}$ as heavy as a large rock. The large rock weighed 672 grams. How heavy was the small rock?



3) At the school fundraiser Adam earned \$455. Bianca earned $\frac{5}{7}$ as much as Adam. And Cathy earned $\frac{1}{5}$ as much as Bianca. How much did Cathy earn?



4) Two years ago the fair had $\frac{3}{4}$ as many people as 1 year ago. 1 year ago the fair had $\frac{4}{5}$ as many people as this year. This year the fair had 305 people. How many people did the fair have 2 years ago?





Solve each problem using a tape diagram.

Answers

Ex) Two years ago the fair had $\frac{1}{3}$ as many people as 1 year ago. 1 year ago the fair had $\frac{3}{6}$ as many people as this year. This year the fair had 96 people. How many people did the fair have 2 years ago?

Ex. 16

1) A chef was ordering vegetables for his restaurant. He order \$245 worth of potatoes. He also spent $\frac{4}{7}$ as much on tomatoes. Finally he spent $\frac{2}{4}$ as much on green beans as he did on tomatoes. How much did he spend on green beans?

1. _____

2. _____

3. _____

4. _____

2) At the school fundraiser Adam earned \$610. Bianca earned $\frac{7}{10}$ as much as Adam. And Cathy earned $\frac{4}{7}$ as much as Bianca. How much did Cathy earn?

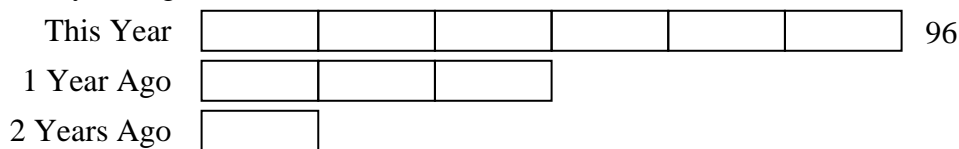
3) On Super Bowl Sunday a store sold 180 sodas. They sold $\frac{5}{6}$ as many bags of chips. They also sold $\frac{4}{5}$ as many jars of dip as bags of chips. How many jars of dip did they sell?

4) Paige was looking at her Nintendo collection. She had 480 wiiU games. She had $\frac{6}{8}$ as many DS games and $\frac{3}{6}$ as many 3ds games as DS games. How many 3ds games does she have?




Solve each problem using a tape diagram.

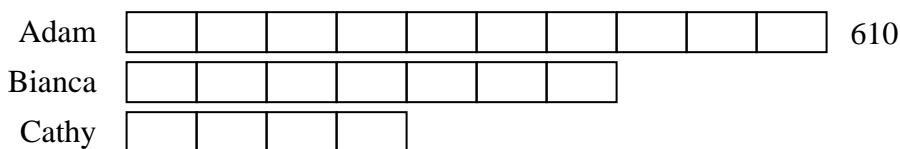
Ex) Two years ago the fair had $\frac{1}{3}$ as many people as 1 year ago. 1 year ago the fair had $\frac{3}{6}$ as many people as this year. This year the fair had 96 people. How many people did the fair have 2 years ago?




1) A chef was ordering vegetables for his restaurant. He order \$245 worth of potatoes. He also spent $\frac{4}{7}$ as much on tomatoes. Finally he spent $\frac{2}{4}$ as much on green beans as he did on tomatoes. How much did he spend on green beans?



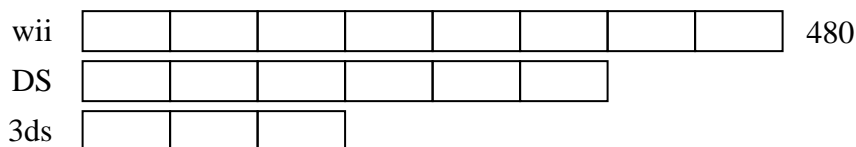
2) At the school fundraiser Adam earned \$610. Bianca earned $\frac{7}{10}$ as much as Adam. And Cathy earned $\frac{4}{7}$ as much as Bianca. How much did Cathy earn?



3) On Super Bowl Sunday a store sold 180 sodas. They sold $\frac{5}{6}$ as many bags of chips. They also sold $\frac{4}{5}$ as many jars of dip as bags of chips. How many jars of dip did they sell?



4) Paige was looking at her Nintendo collection. She had 480 wiiU games. She had $\frac{6}{8}$ as many DS games and $\frac{3}{6}$ as many 3ds games as DS games. How many 3ds games does she have?



Answers

Ex. 16

1. 70

2. 244

3. 120

4. 180



Solve each problem using a tape diagram.

Answers

Ex) Sarah was trying to determine the weight of a small rock. She determined the small rock was $\frac{3}{9}$ as heavy as a medium rock. The medium rock was $\frac{9}{10}$ as heavy as a large rock. The large rock weighed 120 grams. How heavy was the small rock?

Ex. 36

1) A chef was ordering vegetables for his restaurant. He order \$432 worth of potatoes. He also spent $\frac{2}{9}$ as much on tomatoes. Finally he spent $\frac{1}{2}$ as much on green beans as he did on tomatoes. How much did he spend on green beans?

1. _____

2. _____

3. _____

4. _____

2) Two years ago the fair had $\frac{1}{2}$ as many people as 1 year ago. 1 year ago the fair had $\frac{2}{7}$ as many people as this year. This year the fair had 154 people. How many people did the fair have 2 years ago?

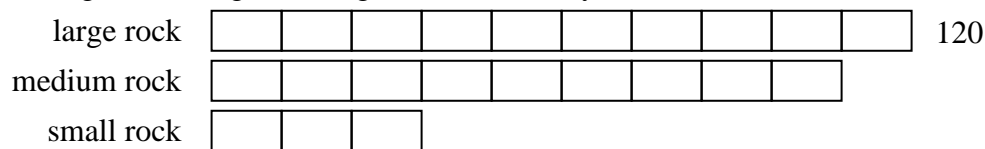
3) At the school fundraiser Adam earned \$215. Bianca earned $\frac{2}{5}$ as much as Adam. And Cathy earned $\frac{1}{2}$ as much as Bianca. How much did Cathy earn?

4) Maria was looking at her Nintendo collection. She had 784 wiiU games. She had $\frac{4}{8}$ as many DS games and $\frac{1}{4}$ as many 3ds games as DS games. How many 3ds games does she have?




Solve each problem using a tape diagram.

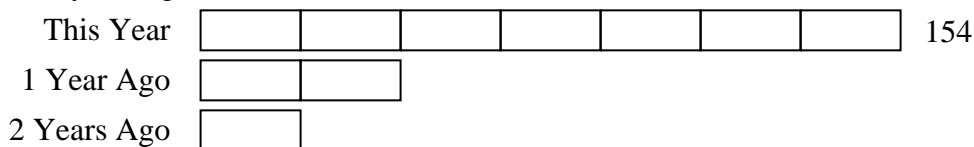
Ex) Sarah was trying to determine the weight of a small rock. She determined the small rock was $\frac{3}{9}$ as heavy as a medium rock. The medium rock was $\frac{9}{10}$ as heavy as a large rock. The large rock weighed 120 grams. How heavy was the small rock?



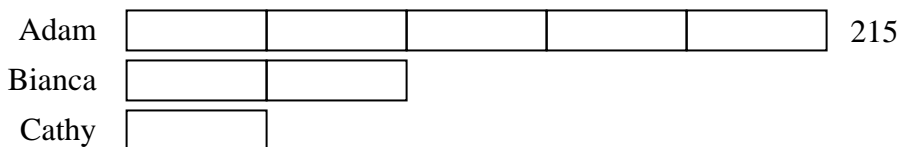
1) A chef was ordering vegetables for his restaurant. He order \$432 worth of potatoes. He also spent $\frac{2}{9}$ as much on tomatoes. Finally he spent $\frac{1}{2}$ as much on green beans as he did on tomatoes. How much did he spend on green beans?



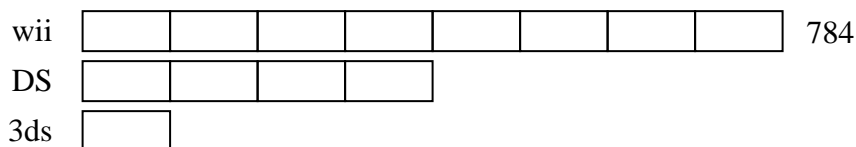
2) Two years ago the fair had $\frac{1}{2}$ as many people as 1 year ago. 1 year ago the fair had $\frac{2}{7}$ as many people as this year. This year the fair had 154 people. How many people did the fair have 2 years ago?



3) At the school fundraiser Adam earned \$215. Bianca earned $\frac{2}{5}$ as much as Adam. And Cathy earned $\frac{1}{2}$ as much as Bianca. How much did Cathy earn?



4) Maria was looking at her Nintendo collection. She had 784 wiiU games. She had $\frac{4}{8}$ as many DS games and $\frac{1}{4}$ as many 3ds games as DS games. How many 3ds games does she have?



Answers

Ex. 36

1. 48

2. 22

3. 43

4. 98



Solve each problem using a tape diagram.

Answers

Ex) Janet was looking at her Nintendo collection. She had 168 wiiU games. She had $\frac{7}{8}$ as many DS games and $\frac{5}{7}$ as many 3ds games as DS games. How many 3ds games does she have?

Ex. 105

1. _____

2. _____

3. _____

4. _____

1) A chef was ordering vegetables for his restaurant. He order \$261 worth of potatoes. He also spent $\frac{8}{9}$ as much on tomatoes. Finally he spent $\frac{4}{8}$ as much on green beans as he did on tomatoes. How much did he spend on green beans?

2) Lana was trying to determine the weight of a small rock. She determined the small rock was $\frac{2}{3}$ as heavy as a medium rock. The medium rock was $\frac{3}{5}$ as heavy as a large rock. The large rock weighed 330 grams. How heavy was the small rock?

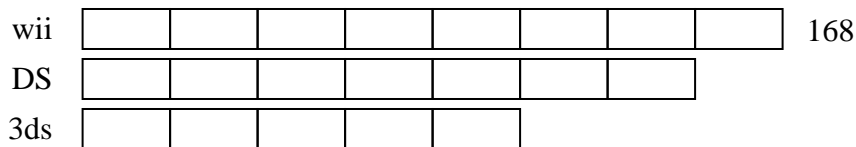
3) At the school fundraiser Adam earned \$432. Bianca earned $\frac{6}{8}$ as much as Adam. And Cathy earned $\frac{4}{6}$ as much as Bianca. How much did Cathy earn?

4) Two years ago the fair had $\frac{1}{4}$ as many people as 1 year ago. 1 year ago the fair had $\frac{4}{5}$ as many people as this year. This year the fair had 215 people. How many people did the fair have 2 years ago?

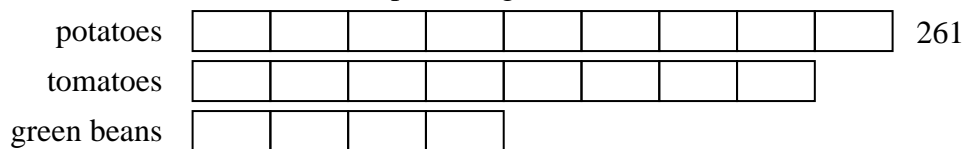


Solve each problem using a tape diagram.

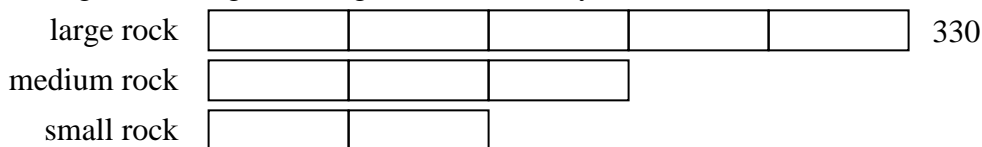
Ex) Janet was looking at her Nintendo collection. She had 168 wiiU games. She had $\frac{7}{8}$ as many DS games and $\frac{5}{7}$ as many 3ds games as DS games. How many 3ds games does she have?



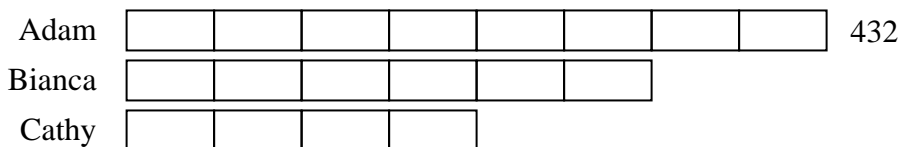
1) A chef was ordering vegetables for his restaurant. He order \$261 worth of potatoes. He also spent $\frac{8}{9}$ as much on tomatoes. Finally he spent $\frac{4}{8}$ as much on green beans as he did on tomatoes. How much did he spend on green beans?



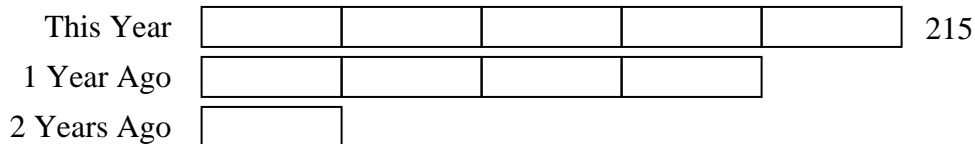
2) Lana was trying to determine the weight of a small rock. She determined the small rock was $\frac{2}{3}$ as heavy as a medium rock. The medium rock was $\frac{3}{5}$ as heavy as a large rock. The large rock weighed 330 grams. How heavy was the small rock?



3) At the school fundraiser Adam earned \$432. Bianca earned $\frac{6}{8}$ as much as Adam. And Cathy earned $\frac{4}{6}$ as much as Bianca. How much did Cathy earn?



4) Two years ago the fair had $\frac{1}{4}$ as many people as 1 year ago. 1 year ago the fair had $\frac{4}{5}$ as many people as this year. This year the fair had 215 people. How many people did the fair have 2 years ago?



Answers

Ex. 105

1. 116

2. 132

3. 216

4. 43



Solve each problem using a tape diagram.

Answers

Ex) Tiffany was looking at her Nintendo collection. She had 414 wiiU games. She had $\frac{2}{6}$ as many DS games and $\frac{1}{2}$ as many 3ds games as DS games. How many 3ds games does she have?

Ex. 69

1. _____

2. _____

3. _____

4. _____

1) Janet was trying to determine the weight of a small rock. She determined the small rock was $\frac{1}{3}$ as heavy as a medium rock. The medium rock was $\frac{3}{7}$ as heavy as a large rock. The large rock weighed 357 grams. How heavy was the small rock?

2) At the school fundraiser Adam earned \$160. Bianca earned $\frac{2}{10}$ as much as Adam. And Cathy earned $\frac{1}{2}$ as much as Bianca. How much did Cathy earn?

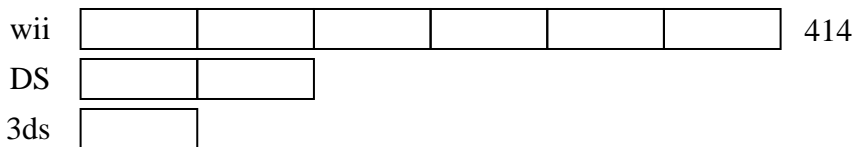
3) A chef was ordering vegetables for his restaurant. He order \$380 worth of potatoes. He also spent $\frac{8}{10}$ as much on tomatoes. Finally he spent $\frac{1}{8}$ as much on green beans as he did on tomatoes. How much did he spend on green beans?

4) Two years ago the fair had $\frac{2}{4}$ as many people as 1 year ago. 1 year ago the fair had $\frac{4}{10}$ as many people as this year. This year the fair had 900 people. How many people did the fair have 2 years ago?

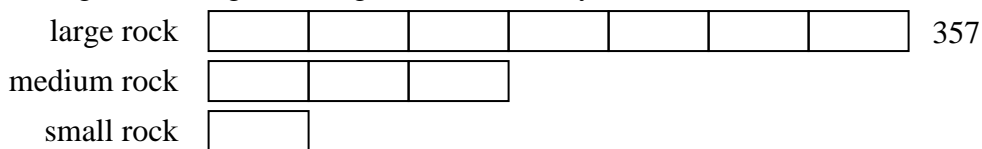


Solve each problem using a tape diagram.

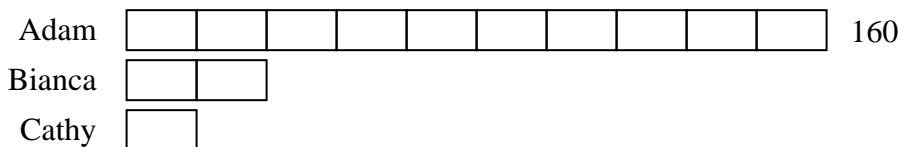
Ex) Tiffany was looking at her Nintendo collection. She had 414 wiiU games. She had $\frac{2}{6}$ as many DS games and $\frac{1}{2}$ as many 3ds games as DS games. How many 3ds games does she have?



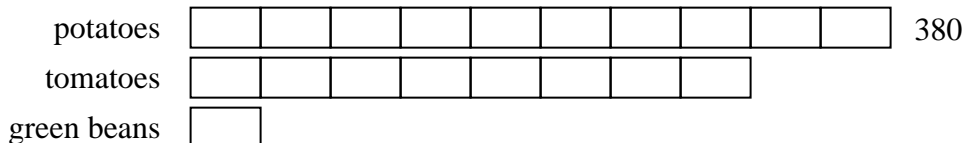
1) Janet was trying to determine the weight of a small rock. She determined the small rock was $\frac{1}{3}$ as heavy as a medium rock. The medium rock was $\frac{3}{7}$ as heavy as a large rock. The large rock weighed 357 grams. How heavy was the small rock?



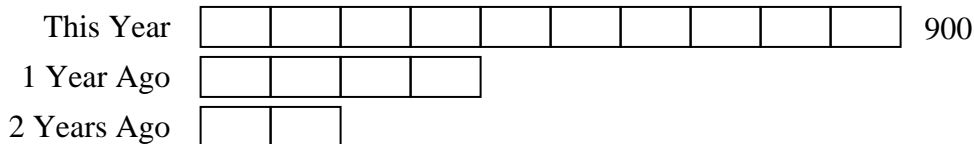
2) At the school fundraiser Adam earned \$160. Bianca earned $\frac{2}{10}$ as much as Adam. And Cathy earned $\frac{1}{2}$ as much as Bianca. How much did Cathy earn?



3) A chef was ordering vegetables for his restaurant. He order \$380 worth of potatoes. He also spent $\frac{8}{10}$ as much on tomatoes. Finally he spent $\frac{1}{8}$ as much on green beans as he did on tomatoes. How much did he spend on green beans?



4) Two years ago the fair had $\frac{2}{4}$ as many people as 1 year ago. 1 year ago the fair had $\frac{4}{10}$ as many people as this year. This year the fair had 900 people. How many people did the fair have 2 years ago?



Answers

Ex. 69

1. 51

2. 16

3. 38

4. 180



Solve each problem using a tape diagram.

Answers

Ex) A chef was ordering vegetables for his restaurant. He order \$243 worth of potatoes. He also spent $\frac{7}{9}$ as much on tomatoes. Finally he spent $\frac{1}{7}$ as much on green beans as he did on tomatoes. How much did he spend on green beans?

Ex. 27

1) Two years ago the fair had $\frac{4}{7}$ as many people as 1 year ago. 1 year ago the fair had $\frac{7}{8}$ as many people as this year. This year the fair had 736 people. How many people did the fair have 2 years ago?

1. _____

2. _____

3. _____

4. _____

2) On Super Bowl Sunday a store sold 318 sodas. They sold $\frac{2}{6}$ as many bags of chips. They also sold $\frac{1}{2}$ as many jars of dip as bags of chips. How many jars of dip did they sell?

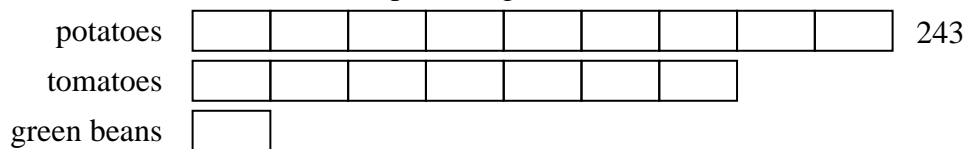
3) Katie was looking at her Nintendo collection. She had 100 wiiU games. She had $\frac{6}{10}$ as many DS games and $\frac{4}{6}$ as many 3ds games as DS games. How many 3ds games does she have?

4) At the school fundraiser Adam earned \$585. Bianca earned $\frac{3}{9}$ as much as Adam. And Cathy earned $\frac{2}{3}$ as much as Bianca. How much did Cathy earn?

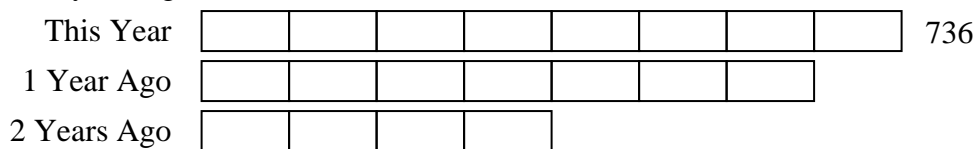


Solve each problem using a tape diagram.

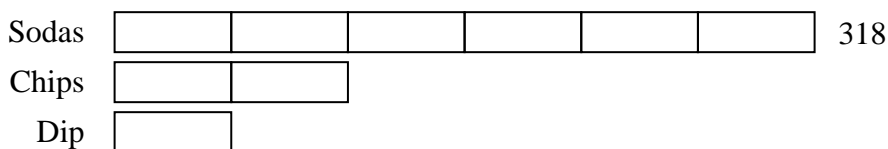
Ex) A chef was ordering vegetables for his restaurant. He order \$243 worth of potatoes. He also spent $\frac{7}{9}$ as much on tomatoes. Finally he spent $\frac{1}{7}$ as much on green beans as he did on tomatoes. How much did he spend on green beans?



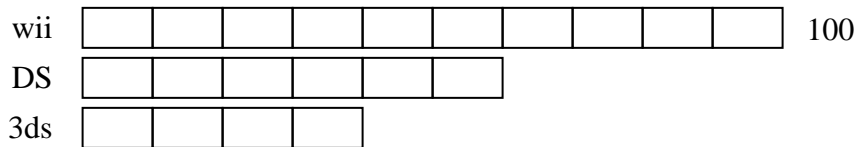
1) Two years ago the fair had $\frac{4}{7}$ as many people as 1 year ago. 1 year ago the fair had $\frac{7}{8}$ as many people as this year. This year the fair had 736 people. How many people did the fair have 2 years ago?



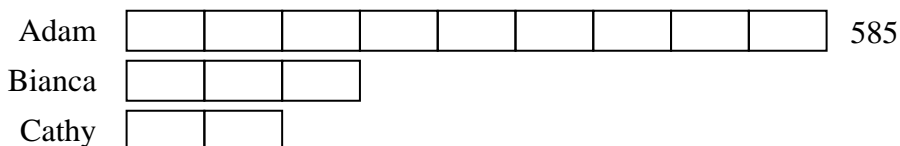
2) On Super Bowl Sunday a store sold 318 sodas. They sold $\frac{2}{6}$ as many bags of chips. They also sold $\frac{1}{2}$ as many jars of dip as bags of chips. How many jars of dip did they sell?



3) Katie was looking at her Nintendo collection. She had 100 wiiU games. She had $\frac{6}{10}$ as many DS games and $\frac{4}{6}$ as many 3ds games as DS games. How many 3ds games does she have?



4) At the school fundraiser Adam earned \$585. Bianca earned $\frac{3}{9}$ as much as Adam. And Cathy earned $\frac{2}{3}$ as much as Bianca. How much did Cathy earn?



Answers

Ex. 27

1. 368

2. 53

3. 40

4. 130



Solve each problem using a tape diagram.

Answers

Ex) At the school fundraiser Adam earned \$210. Bianca earned $\frac{6}{10}$ as much as Adam. And Cathy earned $\frac{5}{6}$ as much as Bianca. How much did Cathy earn?

Ex. 105

1) Two years ago the fair had $\frac{3}{4}$ as many people as 1 year ago. 1 year ago the fair had $\frac{4}{7}$ as many people as this year. This year the fair had 343 people. How many people did the fair have 2 years ago?

1. _____

2) On Super Bowl Sunday a store sold 408 sodas. They sold $\frac{5}{8}$ as many bags of chips. They also sold $\frac{2}{5}$ as many jars of dip as bags of chips. How many jars of dip did they sell?

2. _____

3) Tiffany was looking at her Nintendo collection. She had 340 wiiU games. She had $\frac{6}{10}$ as many DS games and $\frac{4}{6}$ as many 3ds games as DS games. How many 3ds games does she have?

3. _____

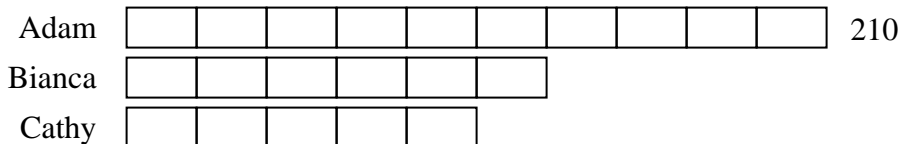
4) Isabel was trying to determine the weight of a small rock. She determined the small rock was $\frac{3}{8}$ as heavy as a medium rock. The medium rock was $\frac{8}{10}$ as heavy as a large rock. The large rock weighed 870 grams. How heavy was the small rock?

4. _____

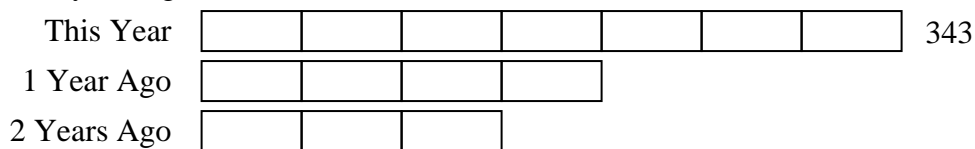


Solve each problem using a tape diagram.

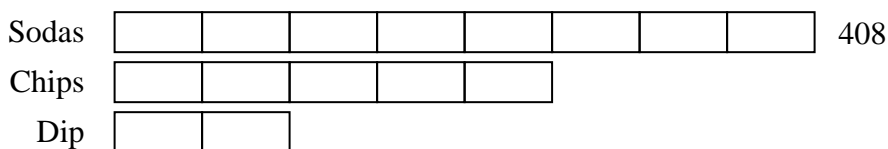
Ex) At the school fundraiser Adam earned \$210. Bianca earned $\frac{6}{10}$ as much as Adam. And Cathy earned $\frac{5}{6}$ as much as Bianca. How much did Cathy earn?



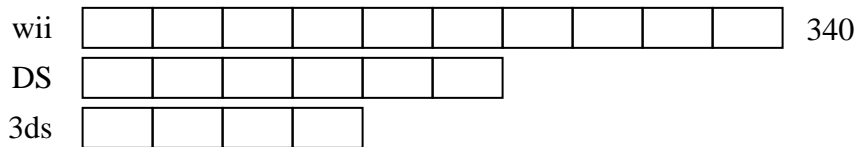
1) Two years ago the fair had $\frac{3}{4}$ as many people as 1 year ago. 1 year ago the fair had $\frac{4}{7}$ as many people as this year. This year the fair had 343 people. How many people did the fair have 2 years ago?



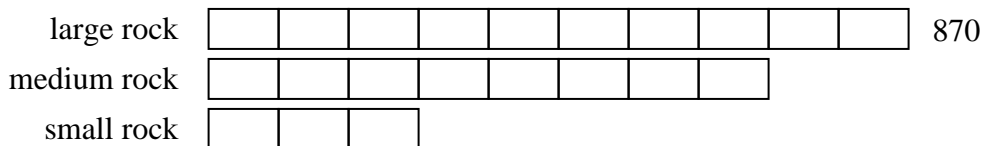
2) On Super Bowl Sunday a store sold 408 sodas. They sold $\frac{5}{8}$ as many bags of chips. They also sold $\frac{2}{5}$ as many jars of dip as bags of chips. How many jars of dip did they sell?



3) Tiffany was looking at her Nintendo collection. She had 340 wiiU games. She had $\frac{6}{10}$ as many DS games and $\frac{4}{6}$ as many 3ds games as DS games. How many 3ds games does she have?



4) Isabel was trying to determine the weight of a small rock. She determined the small rock was $\frac{3}{8}$ as heavy as a medium rock. The medium rock was $\frac{8}{10}$ as heavy as a large rock. The large rock weighed 870 grams. How heavy was the small rock?



Answers

Ex. 105

1. 147

2. 102

3. 136

4. 261