



Solve each problem.

Answers

- 1) A pet store had 32 kittens. If they got another 35 kittens, how many would they have total?

- 2) Lana received 37 text messages before noon and another 19 after noon. How many text messages did Lana receive total?

- 3) Bianca has 44 Playstation games and 41 Xbox games. How many games does she have total?

- 4) Emily spent 39 minutes drawing at school and 43 minutes drawing at home. How many minutes total did she spend drawing?

- 5) A store sold 16 cold drinks and 27 hot drinks. How many drinks did they sell total?

- 6) A clown gave away 31 balloons to girls and 40 balloons to boys. How many balloons did he give away total?

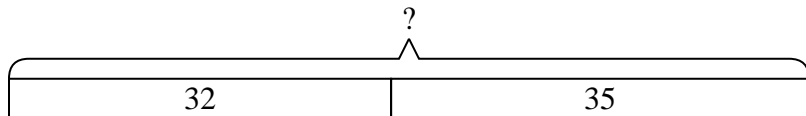
- 7) A baker already had 46 cakes but made 45 extra. How many cakes did the baker have total?

- 1. _____
- 2. _____
- 3. _____
- 4. _____
- 5. _____
- 6. _____
- 7. _____

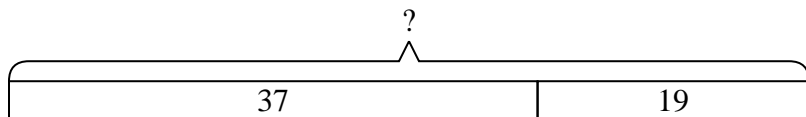


Solve each problem.

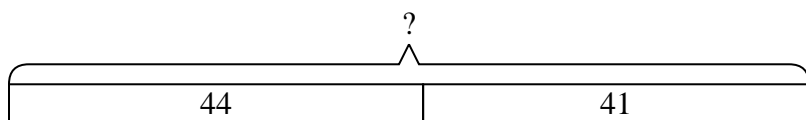
- 1) A pet store had 32 kittens. If they got another 35 kittens, how many would they have total?



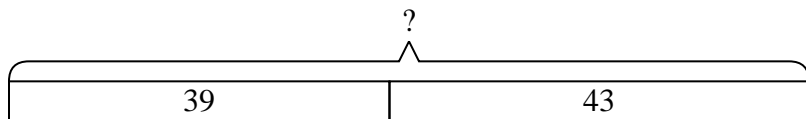
- 2) Lana received 37 text messages before noon and another 19 after noon. How many text messages did Lana receive total?



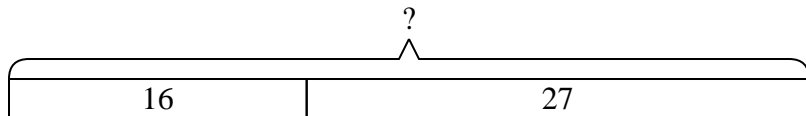
- 3) Bianca has 44 Playstation games and 41 Xbox games. How many games does she have total?



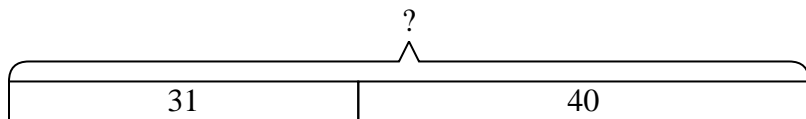
- 4) Emily spent 39 minutes drawing at school and 43 minutes drawing at home. How many minutes total did she spend drawing?



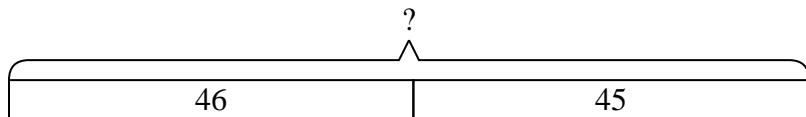
- 5) A store sold 16 cold drinks and 27 hot drinks. How many drinks did they sell total?



- 6) A clown gave away 31 balloons to girls and 40 balloons to boys. How many balloons did he give away total?



- 7) A baker already had 46 cakes but made 45 extra. How many cakes did the baker have total?



Answers

1. 67

2. 56

3. 85

4. 82

5. 43

6. 71

7. 91