



Solve each problem.

Answers

- 1) Amy picked up 46 pieces of paper from the floor. If Dave picked up 30 pieces, how many did they pick up total?

- 2) Sam had 16 books. During the book fair he bought 19 more. How many books did Sam have total?

- 3) For a party George spent 19 dollars on food and 47 dollars on drinks. How much did George spend total?

- 4) Paige had 20 pieces of candy. Her friend gave her 38 more pieces. How many pieces of candy did Paige have total?

- 5) Tom had \$14. Later he sold some of his old toys and got another \$34. How much money does he have total?

- 6) Janet spent 47 minutes drawing at school and 20 minutes drawing at home. How many minutes total did she spend drawing?

- 7) Frank had 31 dollars saved up. After doing some chores his mother gave him another 43 dollars. How much money does he have total?

1. _____

2. _____

3. _____

4. _____

5. _____

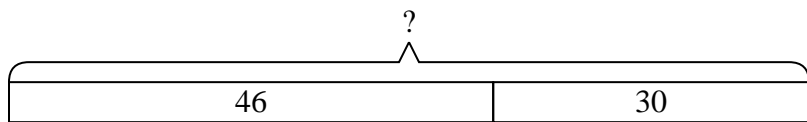
6. _____

7. _____

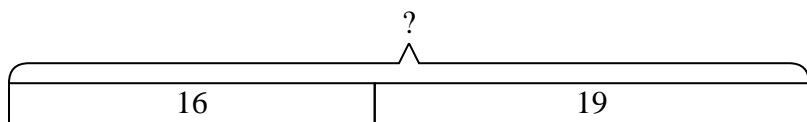


Solve each problem.

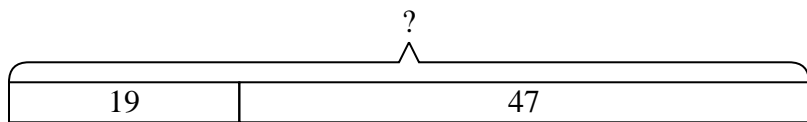
- 1) Amy picked up 46 pieces of paper from the floor. If Dave picked up 30 pieces, how many did they pick up total?



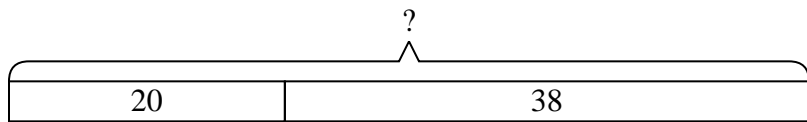
- 2) Sam had 16 books. During the book fair he bought 19 more. How many books did Sam have total?



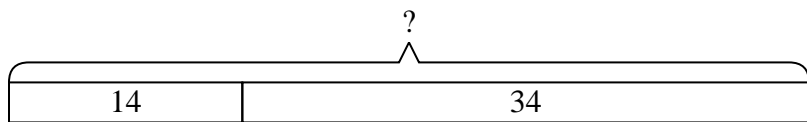
- 3) For a party George spent 19 dollars on food and 47 dollars on drinks. How much did George spend total?



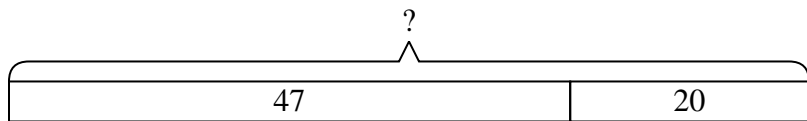
- 4) Paige had 20 pieces of candy. Her friend gave her 38 more pieces. How many pieces of candy did Paige have total?



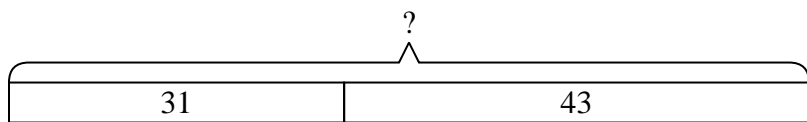
- 5) Tom had \$14. Later he sold some of his old toys and got another \$34. How much money does he have total?



- 6) Janet spent 47 minutes drawing at school and 20 minutes drawing at home. How many minutes total did she spend drawing?



- 7) Frank had 31 dollars saved up. After doing some chores his mother gave him another 43 dollars. How much money does he have total?



Answers

- 1. 76
- 2. 35
- 3. 66
- 4. 58
- 5. 48
- 6. 67
- 7. 74