



Solve each problem.

Answers

1) A restaurant sold 20 sodas in the morning and 47 in the afternoon. How many sodas did they sell total?

1. _____

2) While playing a game Jerry had 11 points. If he scored another 47 points, how many points would he have total?

2. _____

3) There were 41 people in line at lunch when 10 more got in line. How many people were there total in line?

3. _____

4) A farmer planted 26 seeds on Wednesday and another 18 seeds on Thursday. How many seeds did he plant total?

4. _____

5) Emily went to the movies 29 times last year and 47 times this year. How many times did Emily go to the movies total?

5. _____

6) Kristine had \$27 and Tiffany had \$11. If they combined their money, how much would they have?

6. _____

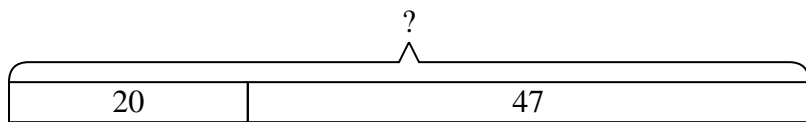
7) Amy has 11 Playstation games and 38 Xbox games. How many games does she have total?

7. _____

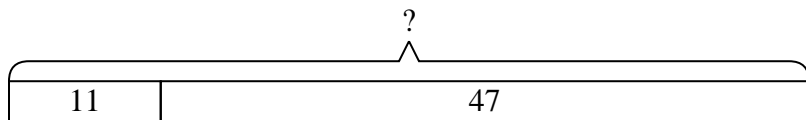


Solve each problem.

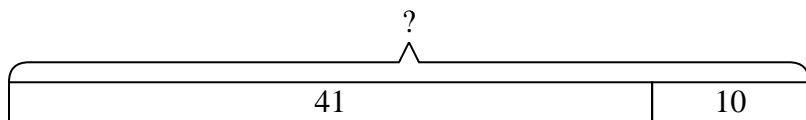
- 1) A restaurant sold 20 sodas in the morning and 47 in the afternoon. How many sodas did they sell total?



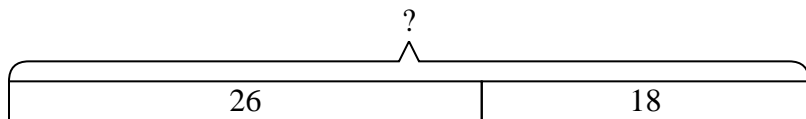
- 2) While playing a game Jerry had 11 points. If he scored another 47 points, how many points would he have total?



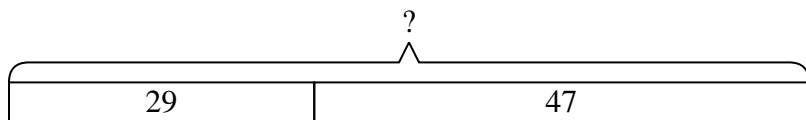
- 3) There were 41 people in line at lunch when 10 more got in line. How many people were there total in line?



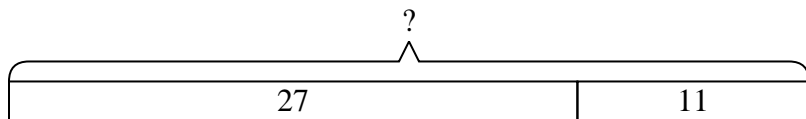
- 4) A farmer planted 26 seeds on Wednesday and another 18 seeds on Thursday. How many seeds did he plant total?



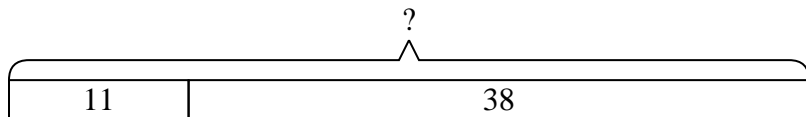
- 5) Emily went to the movies 29 times last year and 47 times this year. How many times did Emily go to the movies total?



- 6) Kristine had \$27 and Tiffany had \$11. If they combined their money, how much would they have?



- 7) Amy has 11 Playstation games and 38 Xbox games. How many games does she have total?



Answers

1. **67**

2. **58**

3. **51**

4. **44**

5. **76**

6. **38**

7. **49**