




Determine if the angle shown is 'less', 'more' or 'equal' to 90°.

Answers

Ex)



1)



2)



Ex. more

1. \_\_\_\_\_

2. \_\_\_\_\_


3)



4)



5)

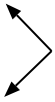


3. \_\_\_\_\_

4. \_\_\_\_\_

5. \_\_\_\_\_

6)



7)



8)



6. \_\_\_\_\_

7. \_\_\_\_\_

8. \_\_\_\_\_

9)



10)



11)



9. \_\_\_\_\_

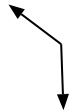
10. \_\_\_\_\_

11. \_\_\_\_\_

12)



13)



14)



12. \_\_\_\_\_

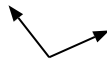
13. \_\_\_\_\_

14. \_\_\_\_\_

15)



16)



17)



15. \_\_\_\_\_

16. \_\_\_\_\_

17. \_\_\_\_\_

18)



19)



20)



18. \_\_\_\_\_

19. \_\_\_\_\_

20. \_\_\_\_\_



Determine if the angle shown is 'less', 'more' or 'equal' to 90°.

Ex)



1)



2)



Ex.

**more**

3)



4)



5)



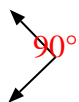
1.

**more**

2.

**less**

6)



7)



8)



3.

**equal**

4.

**less**

5.

**more**

6.

**equal**

7.

**less**

9)



10)



11)



8.

**equal**

9.

**equal**

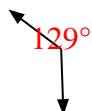
10.

**more**

12)



13)



14)



11.

**less**

12.

**less**

13.

**more**

15)



16)



17)



14.

**equal**

15.

**less**

16.

**more**

18)



19)



20)



17.

**more**

18.

**equal**

19.

**equal**

20.

**less**