



Determine if the angle shown is 'less', 'more' or 'equal' to 90°.

Ex)



1)



2)



Answers

Ex. less

1. _____

2. _____

3. _____

4. _____

5. _____

6. _____

7. _____

8. _____

9. _____

10. _____

11. _____

12. _____

13. _____

14. _____

15. _____

16. _____

17. _____

18. _____

19. _____

20. _____

3)



4)



5)



6)



7)



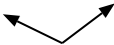
8)



9)



10)



11)



12)



13)



14)



15)



16)



17)



18)



19)



20)





Determine if the angle shown is 'less', 'more' or 'equal' to 90°.

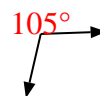
Ex)



1)



2)



Ex. less

3)



4)



5)



1. equal

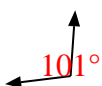
2. more

3. less

4. equal

5. less

6)



7)



8)



6. more

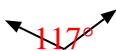
7. equal

8. more

9)



10)



11)



9. less

10. more

11. equal

12)



13)



14)



12. more

13. less

14. less

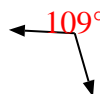
15)



16)



17)



15. equal

16. more

17. more

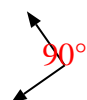
18)



19)



20)



18. equal

19. equal

20. equal