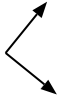




Determine if the angle shown is 'less', 'more' or 'equal' to 90°.

Answers

Ex)



1)



2)



Ex. **equal**

1. _____

2. _____

3)



4)



5)



3. _____

4. _____

6)



7)



8)

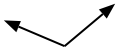


5. _____

6. _____

7. _____

9)



10)



11)



8. _____

9. _____

10. _____

12)



13)



14)



11. _____

12. _____

13. _____

15)



16)



17)



14. _____

15. _____

16. _____

18)



19)



20)



17. _____

18. _____

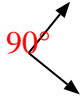
19. _____

20. _____



Determine if the angle shown is 'less', 'more' or 'equal' to 90° .

Ex)



1)



2)



Ex.

Answers

equal

3)



4)



5)



1.

equal

2.

less

3.

less

4.

more

5.

more

6)



7)



8)



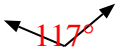
6.

less

7.

less

9)



10)



11)



8.

less

9.

more

10.

equal

11.

more

12)



13)



14)



12.

less

13.

equal

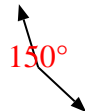
14.

equal

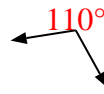
15)



16)



17)



15.

equal

16.

more

18)



19)



20)



17.

more

18.

less

19.

equal

20.

less