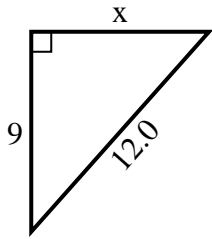


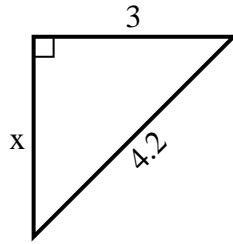


Find the value of X.

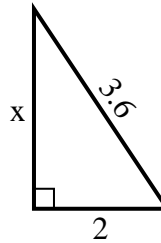
1) perimeter = 29 u



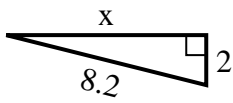
2) perimeter = 10.2 u



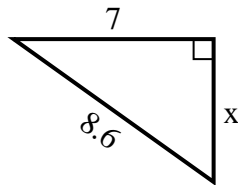
3) perimeter = 8.6 u



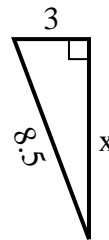
4) perimeter = 18.2 u



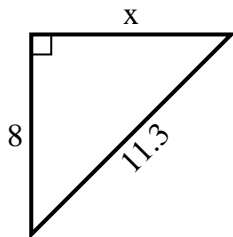
5) perimeter = 20.6 u



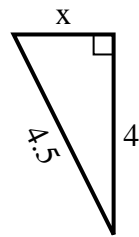
6) perimeter = 19.5 u



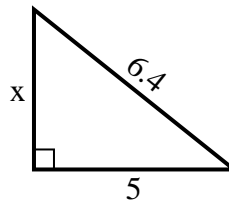
7) perimeter = 27.3 u



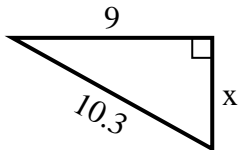
8) perimeter = 10.5 u



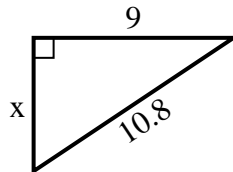
9) perimeter = 15.4 u



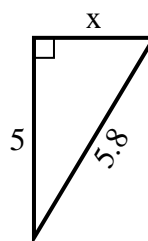
10) perimeter = 24.3 u



11) perimeter = 25.8 u



12) perimeter = 13.8 u



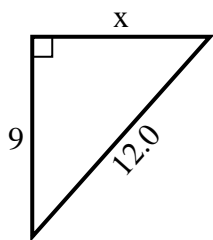
Answers

1. _____
2. _____
3. _____
4. _____
5. _____
6. _____
7. _____
8. _____
9. _____
10. _____
11. _____
12. _____

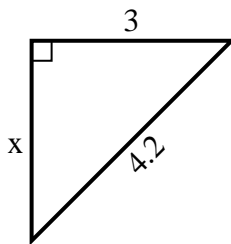


Find the value of X.

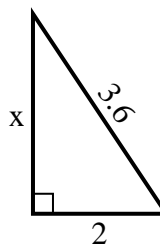
1) perimeter = 29 u



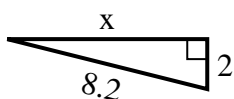
2) perimeter = 10.2 u



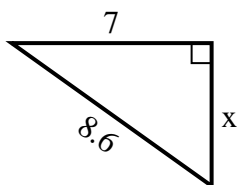
3) perimeter = 8.6 u



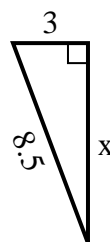
4) perimeter = 18.2 u



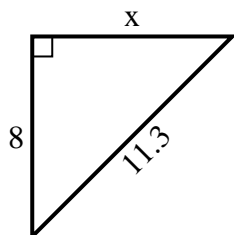
5) perimeter = 20.6 u



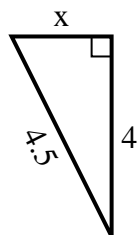
6) perimeter = 19.5 u



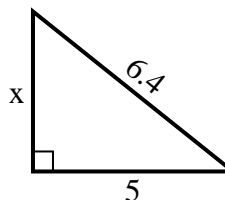
7) perimeter = 27.3 u



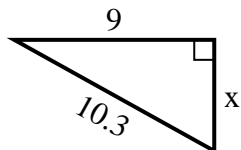
8) perimeter = 10.5 u



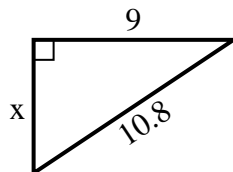
9) perimeter = 15.4 u



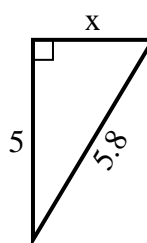
10) perimeter = 24.3 u



11) perimeter = 25.8 u



12) perimeter = 13.8 u



Answers

1. 8

2. 3

3. 3

4. 8

5. 5

6. 8

7. 8

8. 2

9. 4

10. 5

11. 6

12. 3