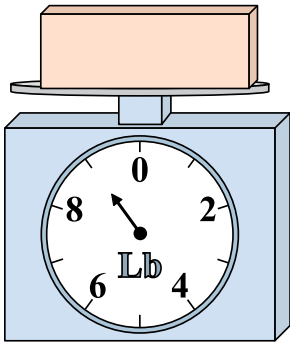




Use the scale to answer each question.


Answers

1)




If the block shown were 4 pounds lighter, how much would it weigh?

2)



What is the weight (in ounces) of the block?

3)



What is the weight (in pounds) of the block?

1. \_\_\_\_\_

2. \_\_\_\_\_

3. \_\_\_\_\_

4. \_\_\_\_\_

5. \_\_\_\_\_


6. \_\_\_\_\_

7. \_\_\_\_\_

8. \_\_\_\_\_


9. \_\_\_\_\_

4)




If you have 2 blocks that are the same weight, how many ounces total do the blocks weigh?

5)




If the block shown were 2 pounds lighter, how much would it weigh?

6)




If you have 5 blocks that are the same weight, how many ounces total do the blocks weigh?

7)




If the block shown were 2 pounds heavier, how much would it weigh?

8)



If you have 6 blocks that are the same weight, how many ounces total do the blocks weigh?

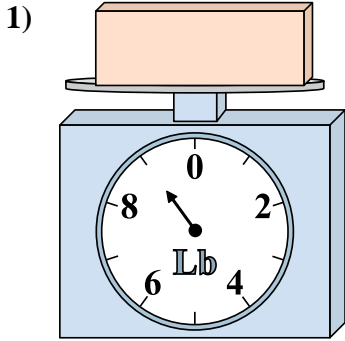
9)



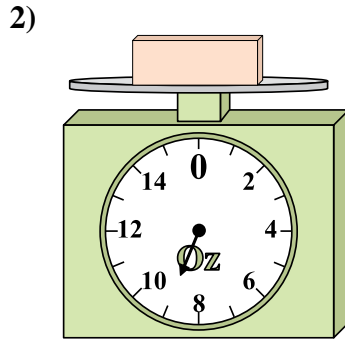
If the block shown were 4 pounds heavier, how much would it weigh?



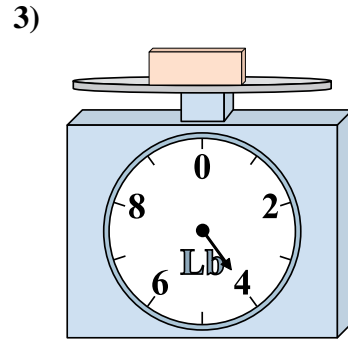
Use the scale to answer each question.



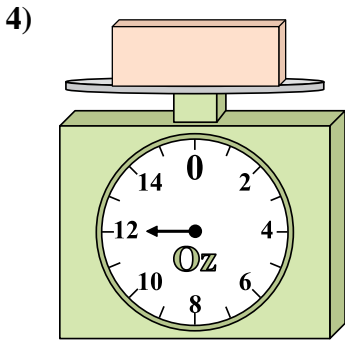
If the block shown were 4 pounds lighter, how much would it weigh?



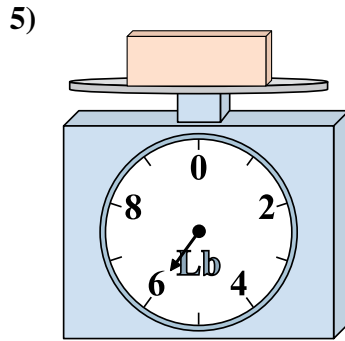
What is the weight (in ounces) of the block?



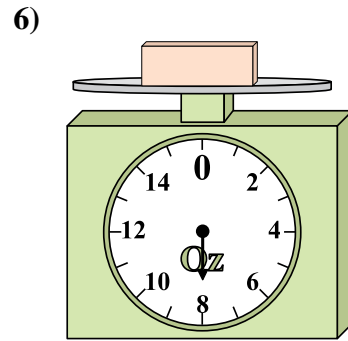
What is the weight (in pounds) of the block?



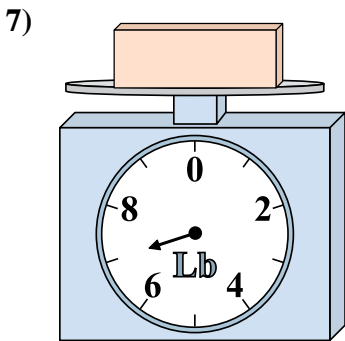
If you have 2 blocks that are the same weight, how many ounces total do the blocks weigh?



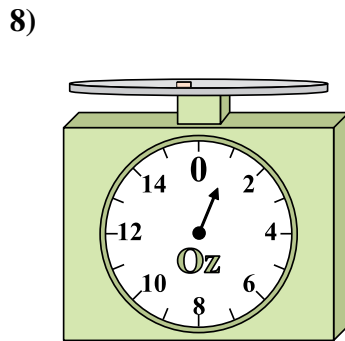
If the block shown were 2 pounds lighter, how much would it weigh?



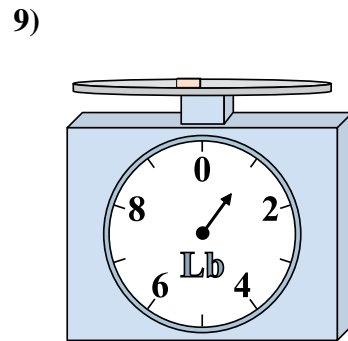
If you have 5 blocks that are the same weight, how many ounces total do the blocks weigh?



If the block shown were 2 pounds heavier, how much would it weigh?



If you have 6 blocks that are the same weight, how many ounces total do the blocks weigh?



If the block shown were 4 pounds heavier, how much would it weigh?

Answers

1. 5
2. 9
3. 4
4. 24
5. 4
6. 40
7. 9
8. 6
9. 5