



Determine which letter best represents the weight.

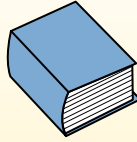
**Gram (g)**

A gram is about the weight of a paperclip.



**Kilogram (kg)**

A kilogram is about the weight of a thick book.




**Remember:**

Kilo means 1,000. So a kilogram is 1,000 grams.  
1 Kilogram is also about the same weight as 2 pounds.

**Answers**

1. \_\_\_\_\_
2. \_\_\_\_\_
3. \_\_\_\_\_
4. \_\_\_\_\_
5. \_\_\_\_\_
6. \_\_\_\_\_
7. \_\_\_\_\_
8. \_\_\_\_\_
9. \_\_\_\_\_

1)



Apple

- A. 200 grams
- B. 5 grams
- C. 5 kilograms
- D. 200 kilograms

2)



Flash Drive

- A. 10 kilograms
- B. 10 grams
- C. 1 kilogram
- D. 90 kilograms

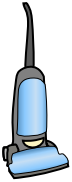
3)



Wrist Watch

- A. 500 kilograms
- B. 1 gram
- C. 90 grams
- D. 1 kilogram

4)



Vacuum

- A. 500 kilograms
- B. 90 grams
- C. 20 kilograms
- D. 50 grams

5)



Battery

- A. 10 kilograms
- B. 90 kilograms
- C. 15 grams
- D. 1 gram

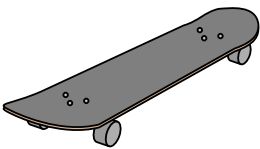
6)



Toothbrush

- A. 30 grams
- B. 500 kilograms
- C. 1 gram
- D. 15 kilograms

7)



Skateboard

- A. 20 grams
- B. 200 grams
- C. 15 kilograms
- D. 2 kilograms


8)



Tennis Ball

- A. 15 kilograms
- B. 1 kilogram
- C. 1 gram
- D. 50 grams

9)



Pear

- A. 170 kilograms
- B. 2 kilograms
- C. 170 grams
- D. 2 grams



Determine which letter best represents the weight.

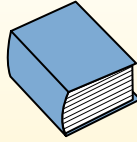
**Gram (g)**

A gram is about the weight of a paperclip.



**Kilogram (kg)**

A kilogram is about the weight of a thick book.




**Remember:**

Kilo means 1,000. So a kilogram is 1,000 grams.  
1 Kilogram is also about the same weight as 2 pounds.

**Answers**

1)



Apple

- A. 200 grams
- B. 5 grams
- C. 5 kilograms
- D. 200 kilograms

2)



Flash Drive

- A. 10 kilograms
- B. 10 grams
- C. 1 kilogram
- D. 90 kilograms

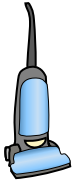
3)



Wrist Watch

- A. 500 kilograms
- B. 1 gram
- C. 90 grams
- D. 1 kilogram

4)



Vacuum

- A. 500 kilograms
- B. 90 grams
- C. 20 kilograms
- D. 50 grams

5)



Battery

- A. 10 kilograms
- B. 90 kilograms
- C. 15 grams
- D. 1 gram

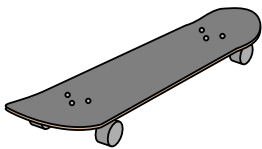
6)



Toothbrush

- A. 30 grams
- B. 500 kilograms
- C. 1 gram
- D. 15 kilograms

7)



Skateboard

- A. 20 grams
- B. 200 grams
- C. 15 kilograms
- D. 2 kilograms


8)



Tennis Ball

- A. 15 kilograms
- B. 1 kilogram
- C. 1 gram
- D. 50 grams

9)



Pear

- A. 170 kilograms
- B. 2 kilograms
- C. 170 grams
- D. 2 grams

- 1.   **A**
- 2.   **B**
- 3.   **C**
- 4.   **C**
- 5.   **C**
- 6.   **A**
- 7.   **D**
- 8.   **D**
- 9.   **C**