




Determine which letter best represents the weight.

**Ounce (oz)**

An ounce is about the weight of a slice of bread.



**Pound (lb)**

A pound is about the weight of a can of vegetables.



**Remember:**

There are 16 ounces in 1 pound.

**Answers**

1. \_\_\_\_\_
2. \_\_\_\_\_
3. \_\_\_\_\_
4. \_\_\_\_\_
5. \_\_\_\_\_
6. \_\_\_\_\_
7. \_\_\_\_\_
8. \_\_\_\_\_
9. \_\_\_\_\_

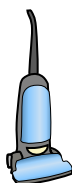
1)



File Cabinet

- A. 2 pounds
- B. 11 ounces
- C. 160 ounces
- D. 120 pounds

2)



Vacuum


- A. 1100 pounds
- B. 35 pounds
- C. 2 ounces
- D. 3 ounces

3)

Screw

- A. 0.04 ounces
- B. 2 pounds
- C. 10 ounces
- D. 1 pound

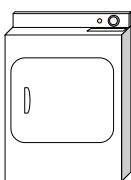
4)



Adult Horse

- A. 14 ounces
- B. 900 pounds
- C. 1 ounce
- D. 100 pounds


5)



Clothes Dryer

- A. 110 pounds
- B. 1 ounce
- C. 160 ounces
- D. 7 pounds

6)



Notebook Paper

- A. 3 ounces
- B. 10 ounces
- C. 2 pounds
- D. 0.1 ounces

7)

Big Screen TV

- A. 2000 pounds
- B. 160 ounces
- C. 1.25 ounces
- D. 40 pounds

8)



Lawn Mower

- A. 100 ounces
- B. 200 ounces
- C. 200 pounds
- D. 50 pounds

9)



Candle

- A. 0.2 ounces
- B. 16 ounces
- C. 1 pound
- D. 20 pounds




Determine which letter best represents the weight.

**Ounce (oz)**

**Pound (lb)**

An ounce is about the weight of a slice of bread.

A pound is about the weight of a can of vegetables.



**Remember:**  
There are 16 ounces in 1 pound.

**Answers**

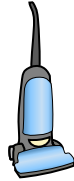
1)



File Cabinet

- A. 2 pounds
- B. 11 ounces
- C. 160 ounces
- D. 120 pounds

2)



Vacuum


- A. 1100 pounds
- B. 35 pounds
- C. 2 ounces
- D. 3 ounces

3)

Screw

- A. 0.04 ounces
- B. 2 pounds
- C. 10 ounces
- D. 1 pound

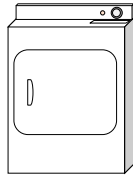
4)



Adult Horse

- A. 14 ounces
- B. 900 pounds
- C. 1 ounce
- D. 100 pounds


5)



Clothes Dryer

- A. 110 pounds
- B. 1 ounce
- C. 160 ounces
- D. 7 pounds

6)



Notebook Paper


- A. 3 ounces
- B. 10 ounces
- C. 2 pounds
- D. 0.1 ounces

7)

Big Screen TV

- A. 2000 pounds
- B. 160 ounces
- C. 1.25 ounces
- D. 40 pounds

8)



Lawn Mower

- A. 100 ounces
- B. 200 ounces
- C. 200 pounds
- D. 50 pounds

9)



Candle

- A. 0.2 ounces
- B. 16 ounces
- C. 1 pound
- D. 20 pounds

- 1.   **D**
- 2.   **B**
- 3.   **A**
- 4.   **B**
- 5.   **A**
- 6.   **D**
- 7.   **D**
- 8.   **D**
- 9.   **A**