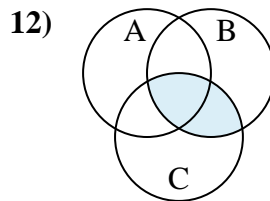
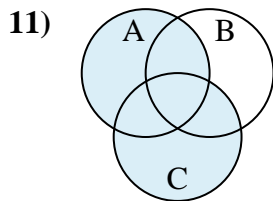
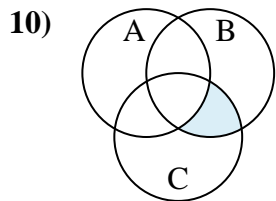
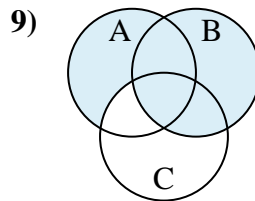
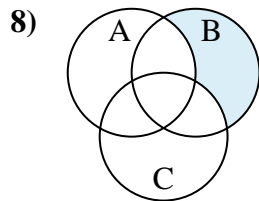
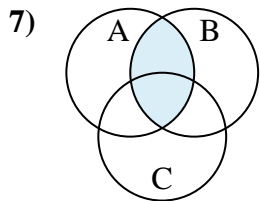
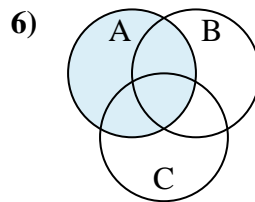
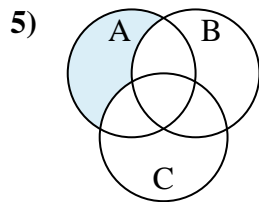
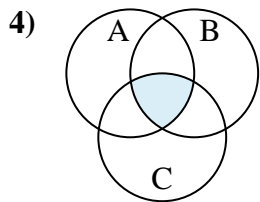
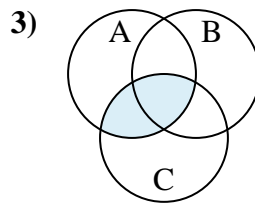
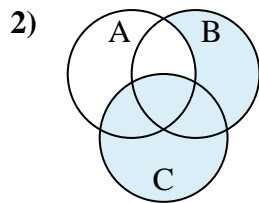
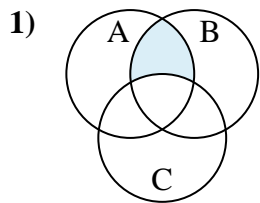




Determine the shaded region of each diagram.



Answers

1. \_\_\_\_\_

2. \_\_\_\_\_

3. \_\_\_\_\_

4. \_\_\_\_\_

5. \_\_\_\_\_

6. \_\_\_\_\_

7. \_\_\_\_\_

8. \_\_\_\_\_

9. \_\_\_\_\_

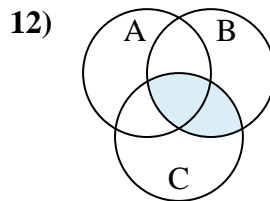
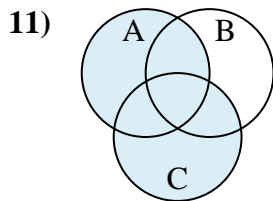
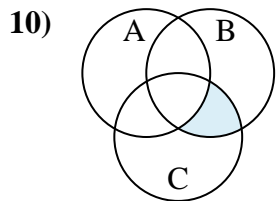
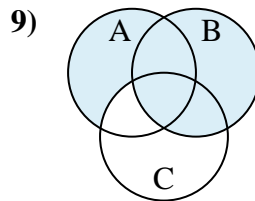
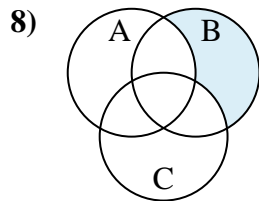
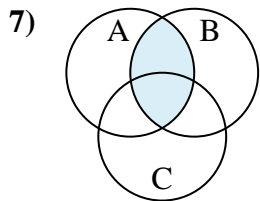
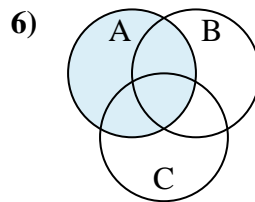
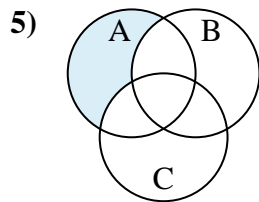
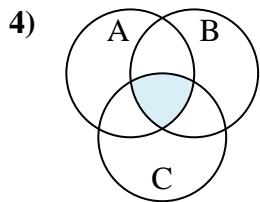
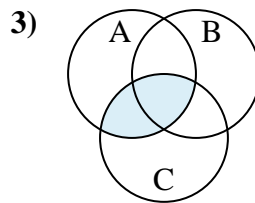
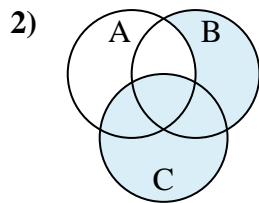
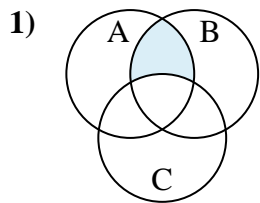
10. \_\_\_\_\_

11. \_\_\_\_\_

12. \_\_\_\_\_



Determine the shaded region of each diagram.



Answers

1.  $(A \cap B) - C$

2.  $C \cup (B - A)$

3.  $A \cap C$

4.  $A \cap C \cap B$

5.  $A - (C \cup B)$

6.  $A$

7.  $B \cap A$

8.  $B - (C \cup A)$

9.  $B \cup (A - C)$

10.  $(B \cap C) - A$

11.  $C \cup A$

12.  $C \cap B$